

つぎのかずは?(6のつぎは)_01_問題

なまえ : _____

うえの かずの つぎは ひだりの かずかな? みぎの かずかな?
まる(○)をつけよう!

☆☆☆☆☆

☆ _____

☆☆☆☆☆

☆☆ _____

☆☆☆☆

(4)

ろく

さん

しち

(1)

□□□□□

□ _____

□□□□□

□□ _____

□□□□

(5)

◇◇◇◇◇

◇ _____

◇◇◇

◇◇◇◇◇◇

◇◇ _____

(2)

ろくにん

ななにん

さんにん

(6)

ろっこ

いっこ

ななこ

(3)

むっつ

みっつ

ななつ

(7)

6

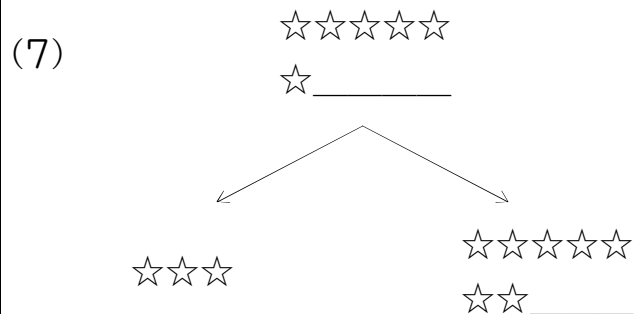
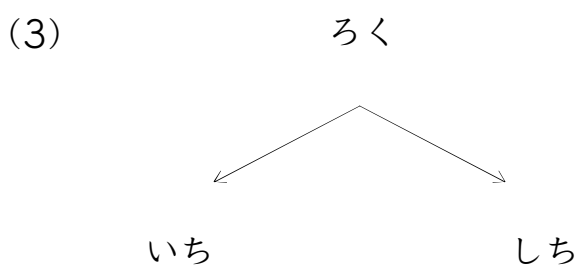
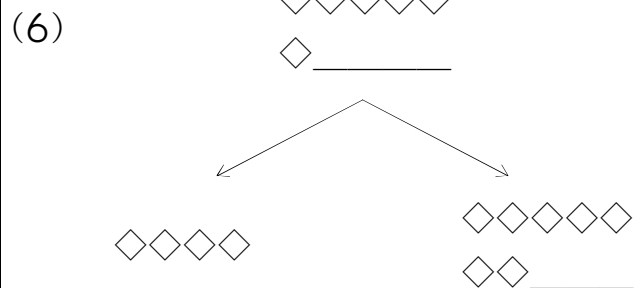
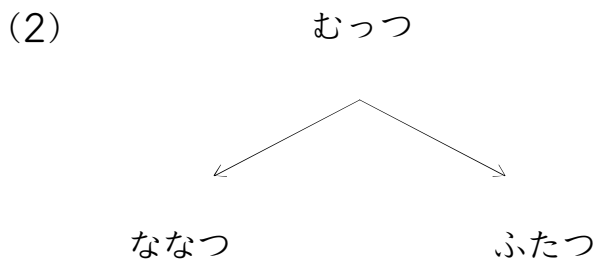
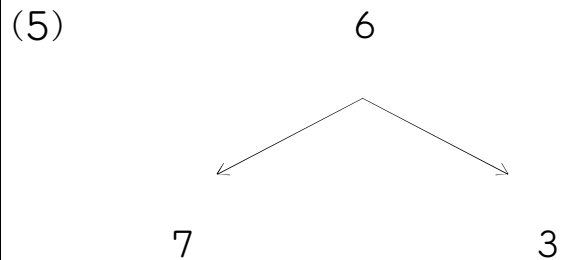
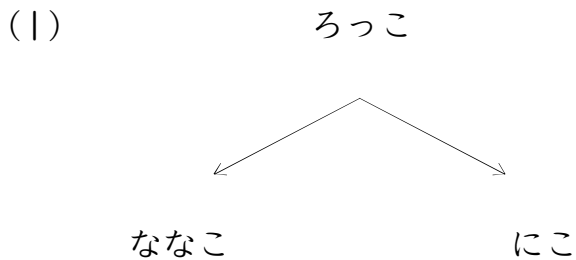
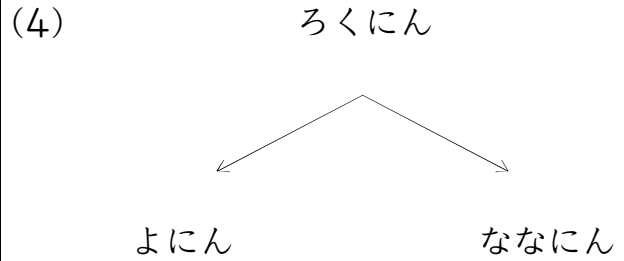
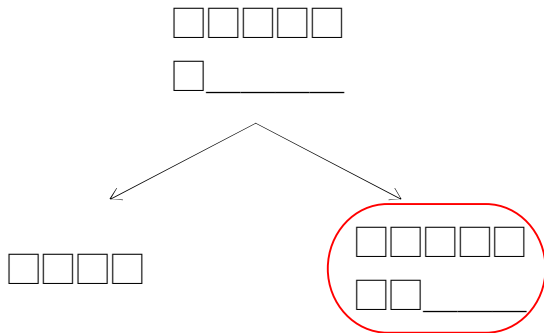
2

7

つぎのかずは?(6のつぎは)_01_問題

なまえ : _____

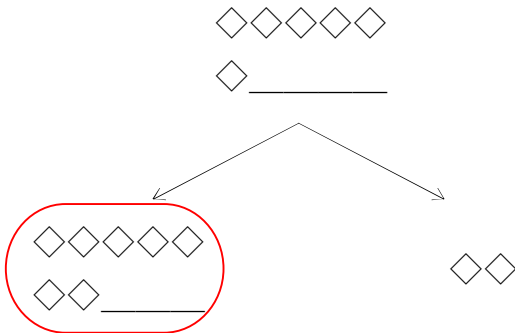
うえの かずの つぎは ひだりの かずかな? みぎの かずかな?
まる(○)をつけよう!



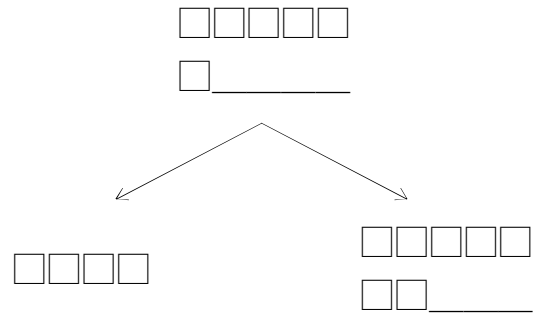
つぎのかずは?(6のつぎは)_01_問題

なまえ : _____

うえの かずの つぎは ひだりの かずかな? みぎの かずかな?
まる(○)をつけよう!



(4)



(1)

ろっこ

ななこ

よんこ

(5)

☆☆☆☆☆

☆ _____

☆☆☆☆☆

☆☆☆☆☆

☆☆ _____

(2)

△△△△△

△ _____

△△△△△

△△ _____

△

(6)

ろくにん

ひとり

しちにん

(3)

6

1

7

(7)

ろく

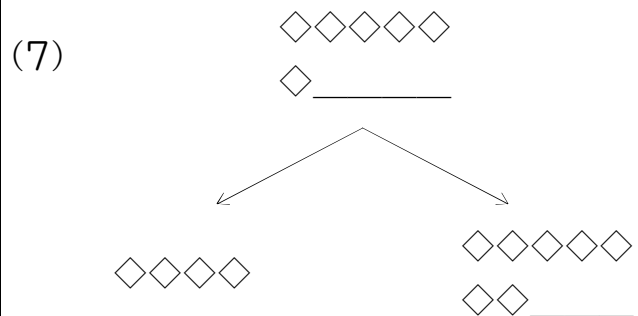
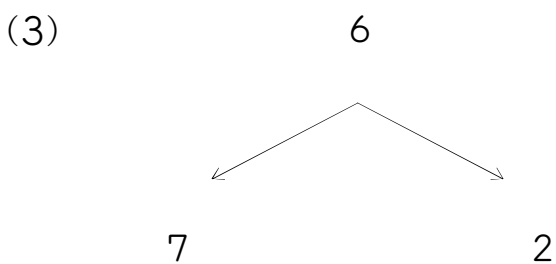
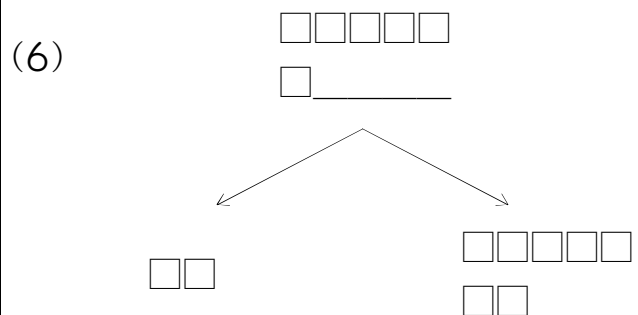
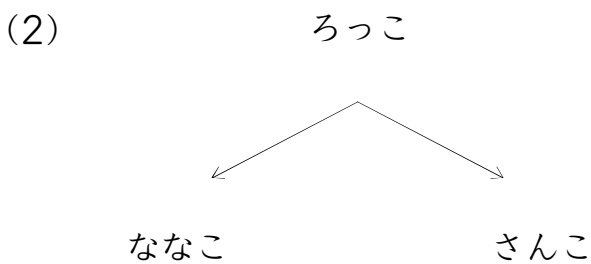
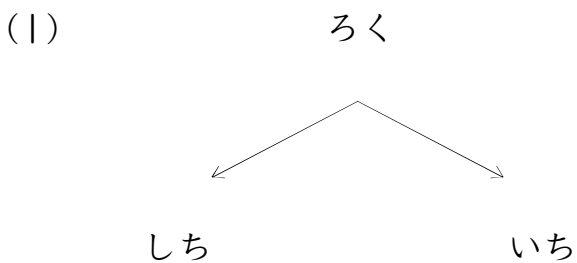
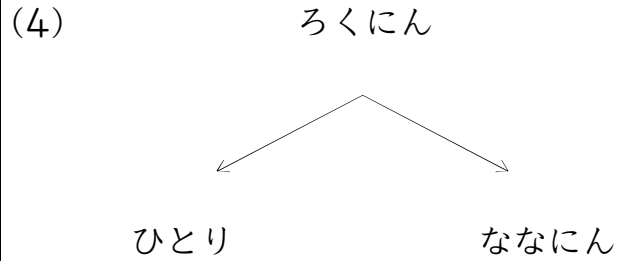
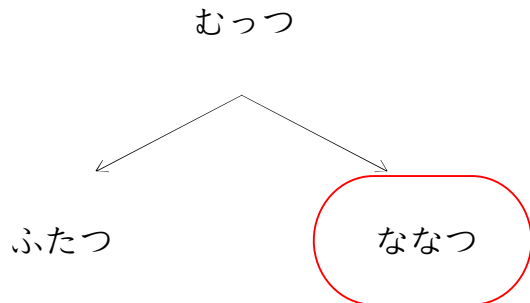
いち

なな

つぎのかずは?(6のつぎは)_01_問題

なまえ : _____

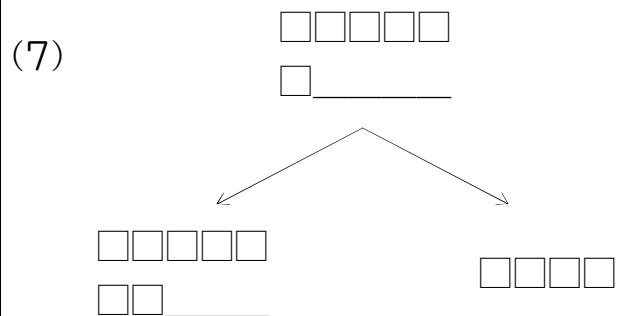
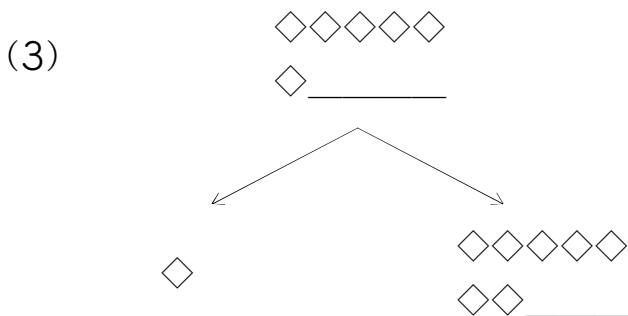
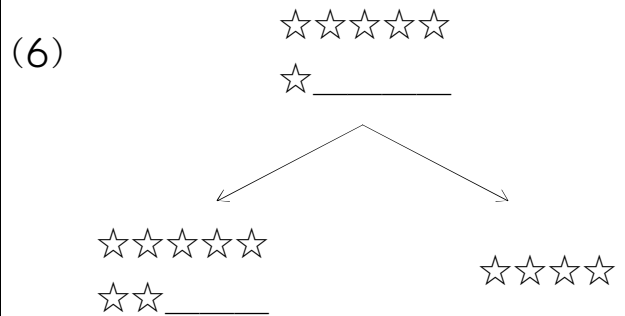
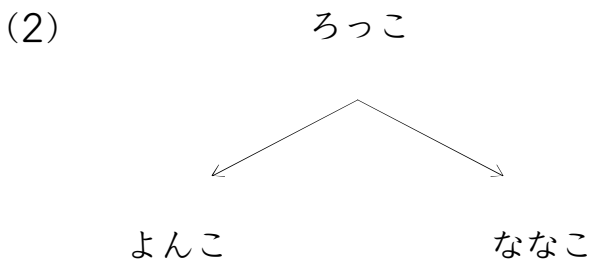
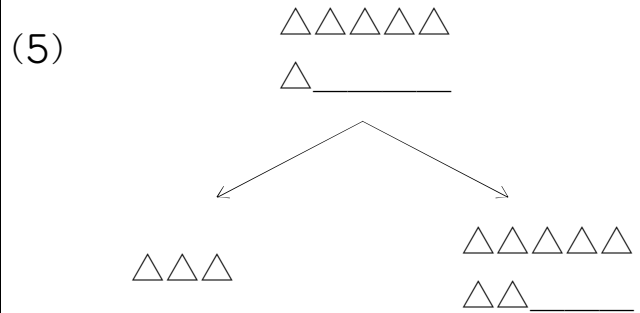
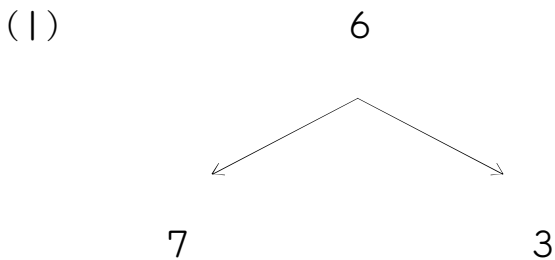
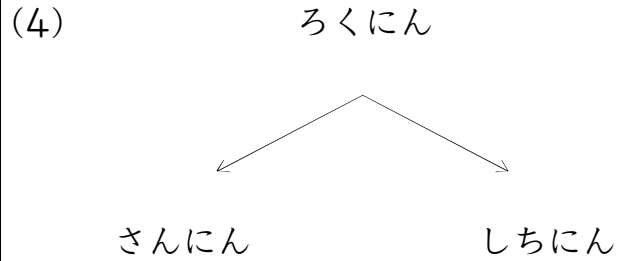
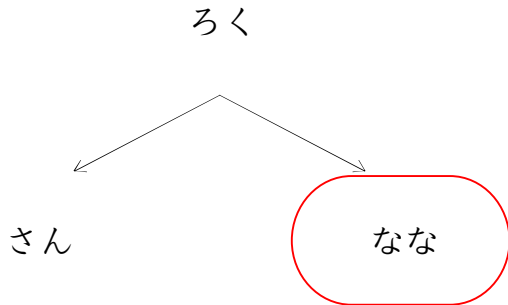
うえの かずの つぎは ひだりの かずかな? みぎの かずかな?
まる(○)をつけよう!



つぎのかずは?(6のつぎは)_01_問題

なまえ : _____

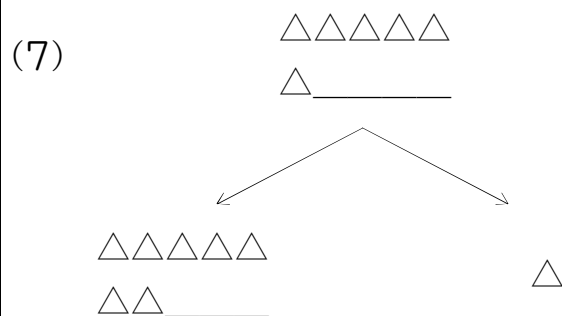
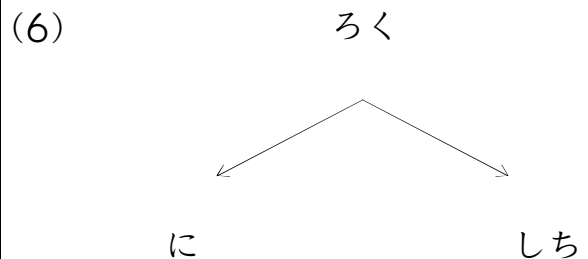
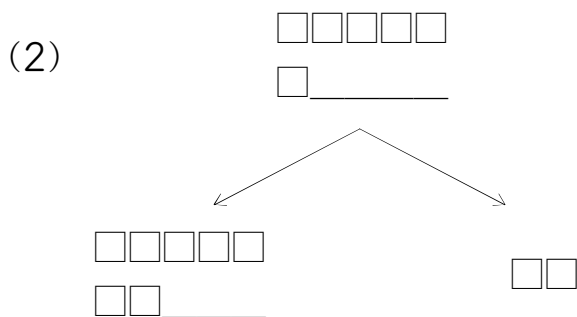
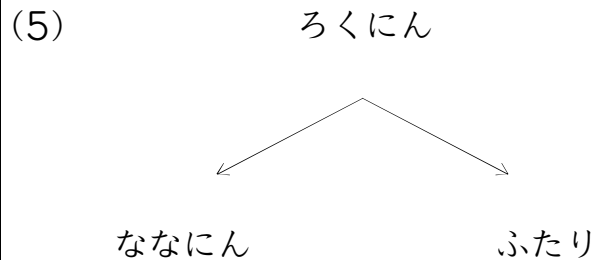
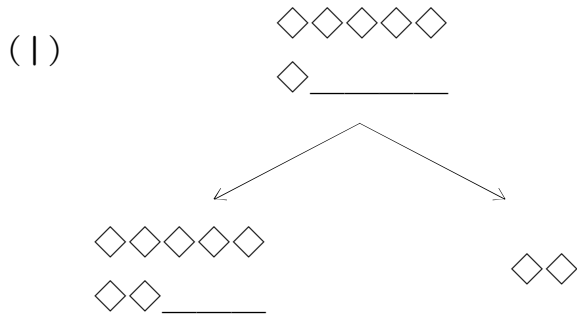
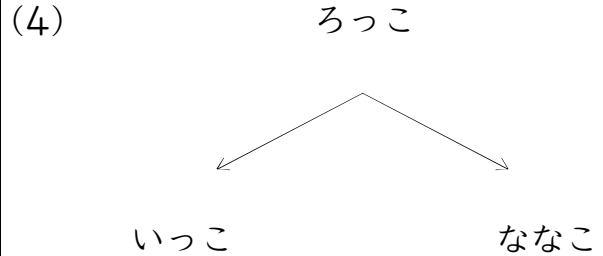
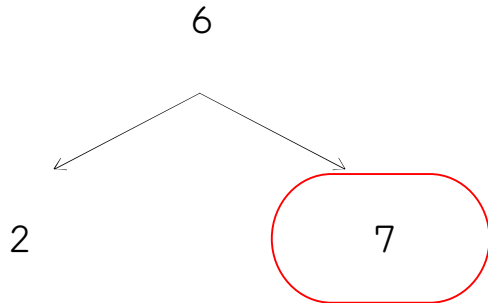
うえの かずの つぎは ひだりの かずかな? みぎの かずかな?
まる(○)をつけよう!



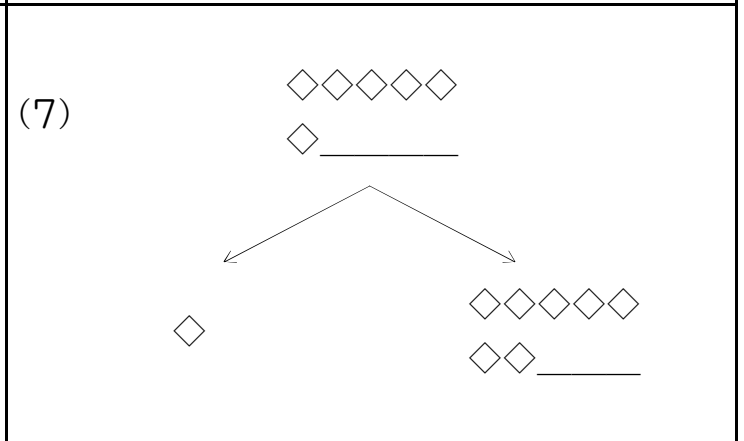
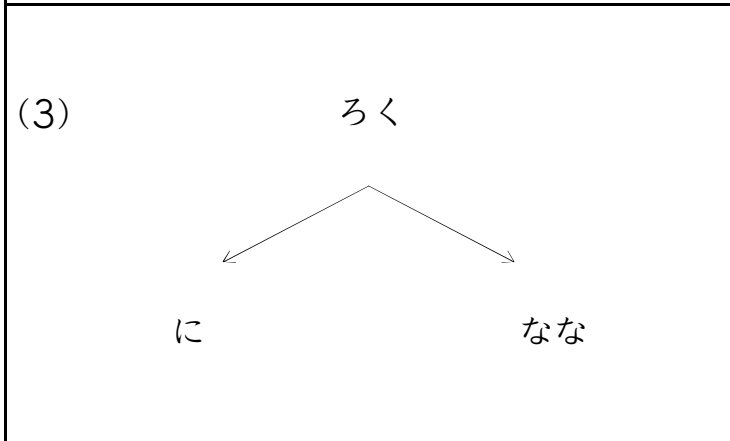
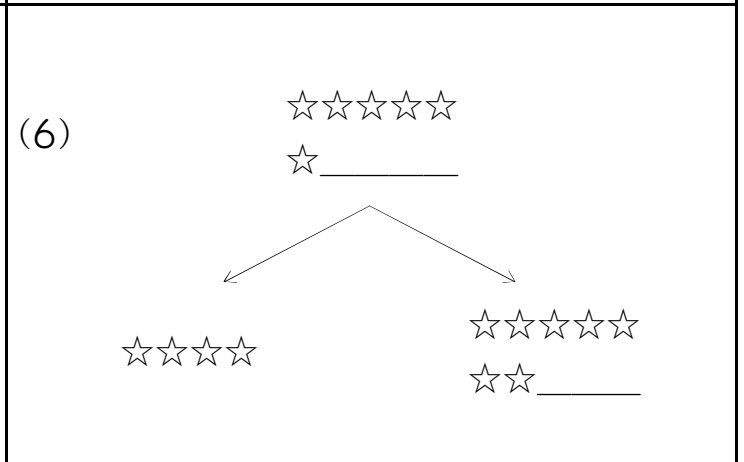
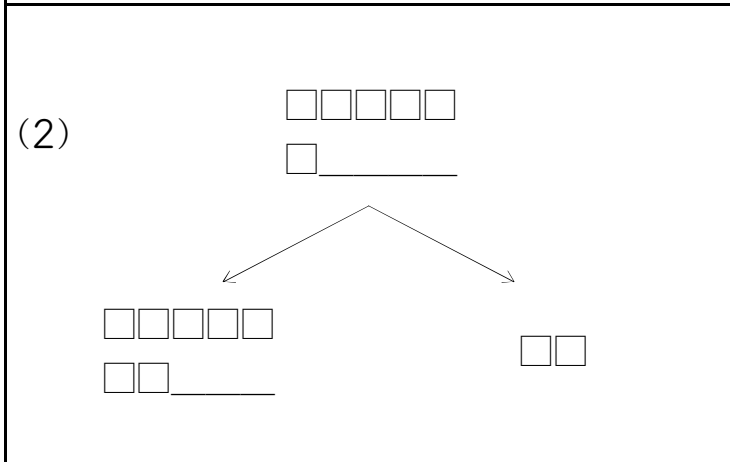
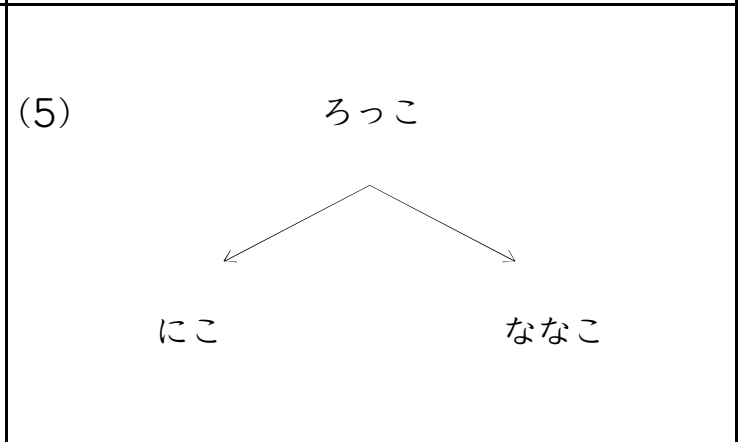
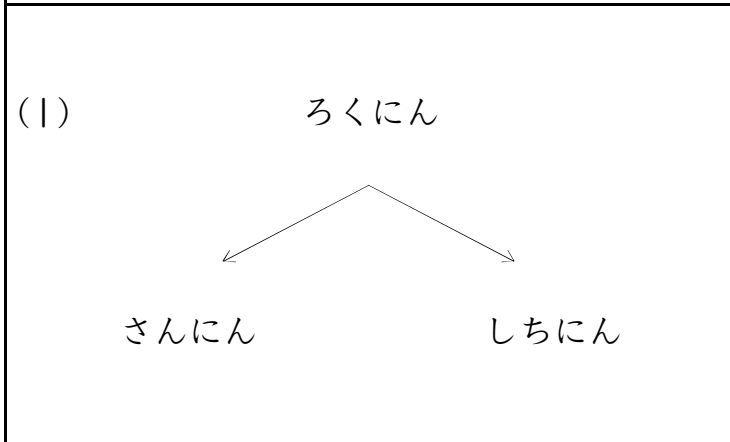
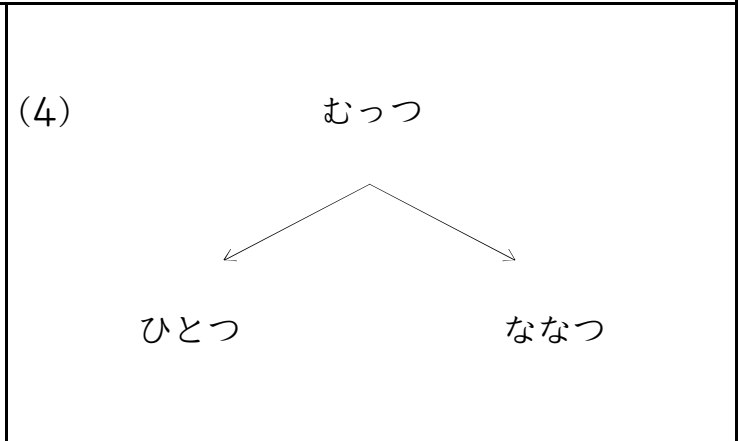
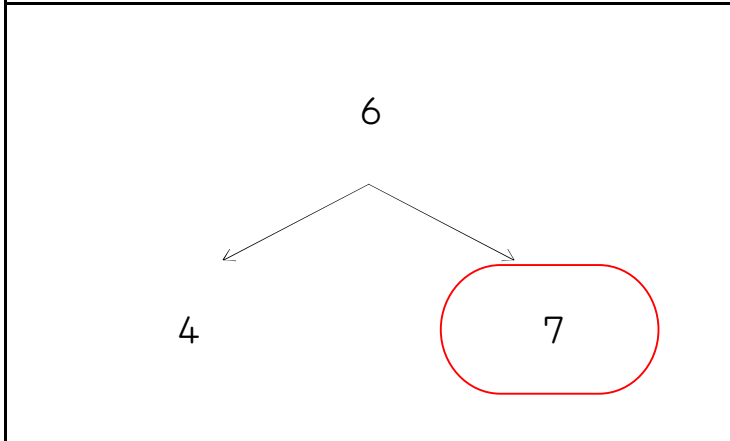
つぎのかずは?(6のつぎは)_01_問題

なまえ : _____

うえの かずの つぎは ひだりの かずかな? みぎの かずかな?
まる(○)をつけよう!



うえの かずの つぎは ひだりの かずかな? みぎの かずかな?
まる(○)をつけよう!



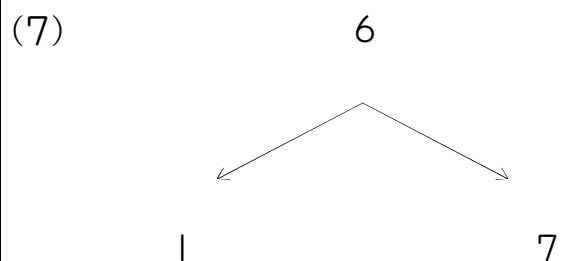
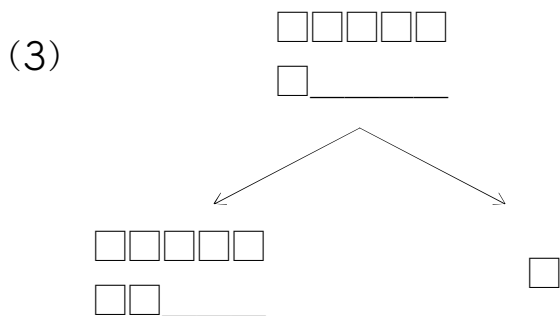
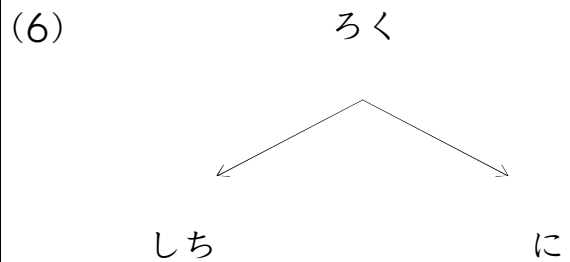
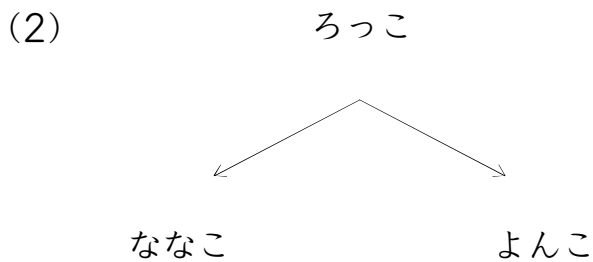
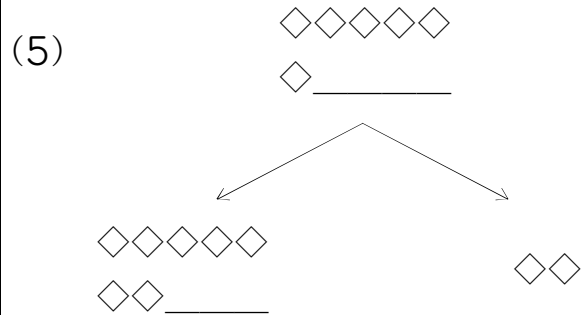
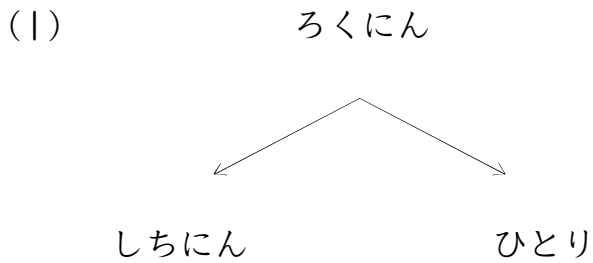
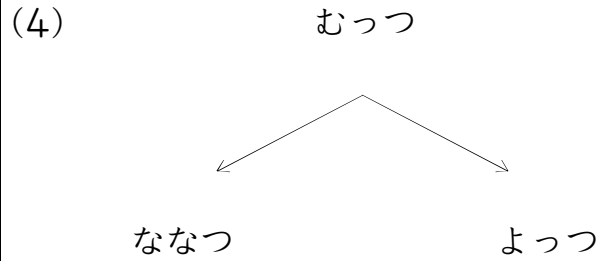
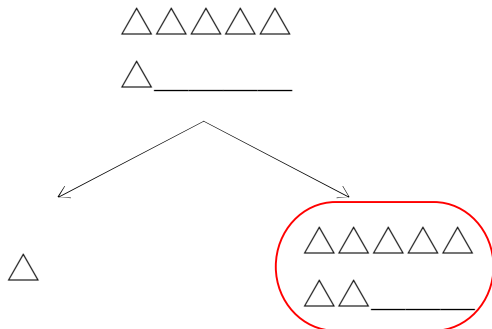
うえの かずの つぎは ひだりの かずかな? みぎの かずかな?
まる(○)をつけよう!

<p>(1) ろく</p> <p>しち よん</p>	<p>(4) ろくにん</p> <p>しちにん ふたり</p>
<p>(1) ろっこ</p> <p>よんこ ななこ</p>	<p>(5) ☆☆☆☆☆</p> <p>☆ _____</p> <p>☆☆ ☆☆☆☆☆</p> <p>☆☆ _____</p>
<p>(2) △△△△△</p> <p>△ _____</p> <p>△△△ △△△△△</p> <p>△△ _____</p>	<p>(6) □□□□□</p> <p>□ _____</p> <p>□□□ □□□□□</p> <p>□□ _____</p>
<p>(3) むっつ</p> <p>ななつ ふたつ</p>	<p>(7) ◇◇◇◇◇</p> <p>◇ _____</p> <p>◇◇ ◇◇◇◇◇</p> <p>◇◇ _____</p>

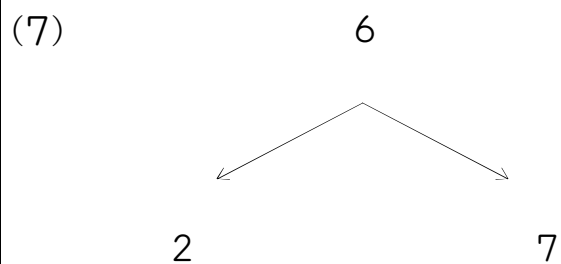
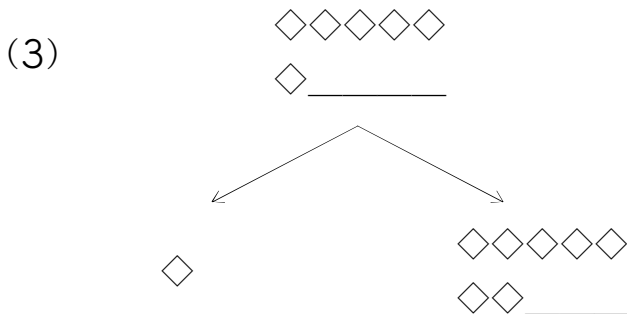
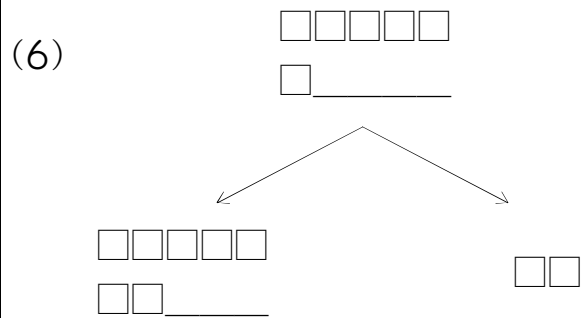
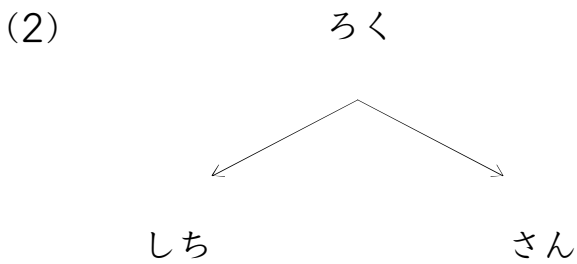
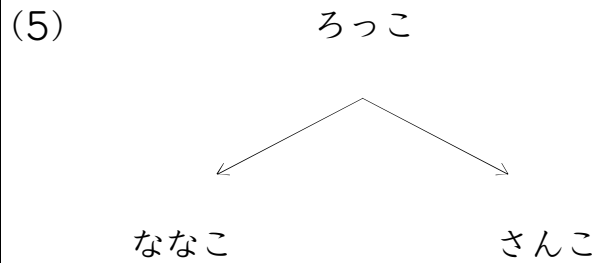
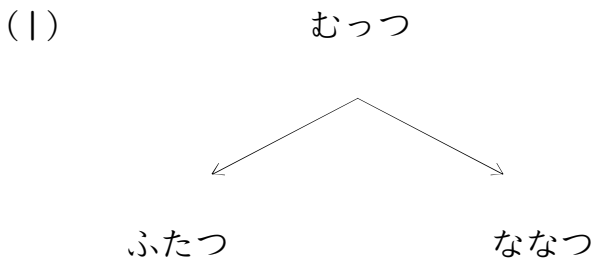
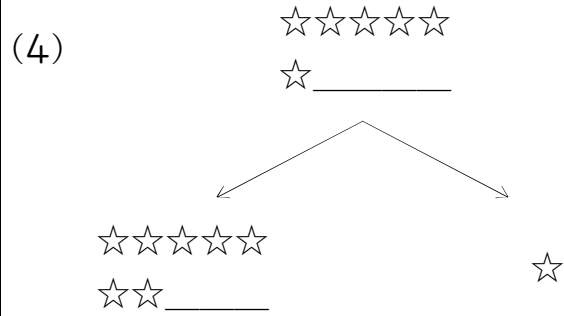
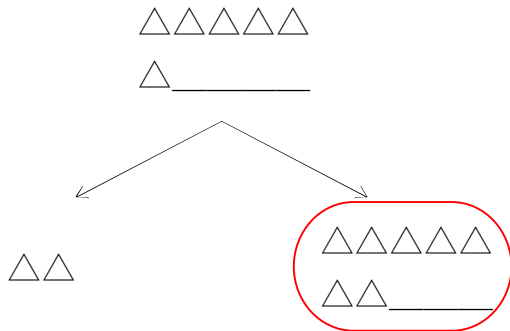
つぎのかずは?(6のつぎは)_01_問題

なまえ: _____

うえの かずの つぎは ひだりの かずかな? みぎの かずかな?
まる(○)をつけよう!



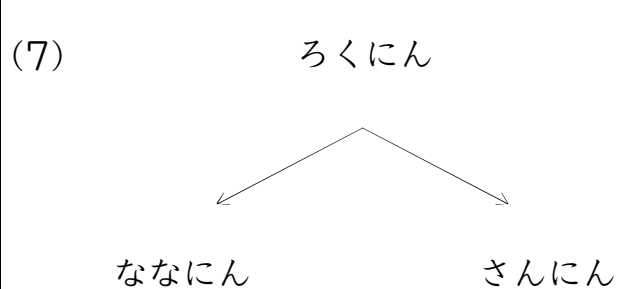
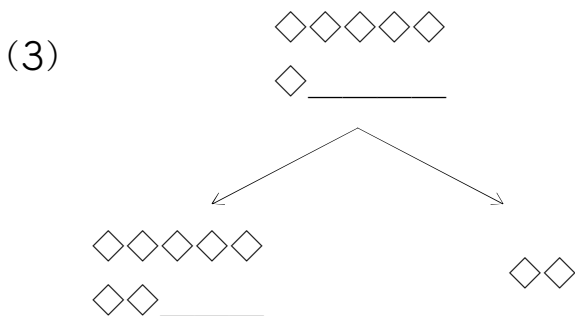
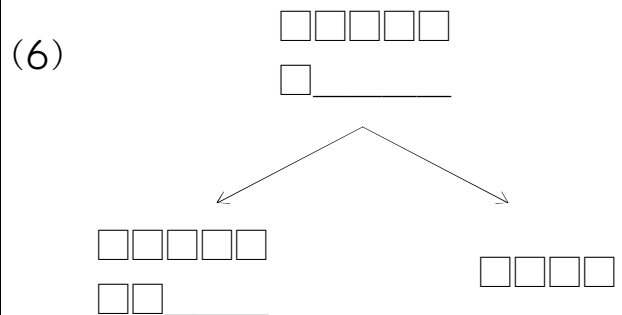
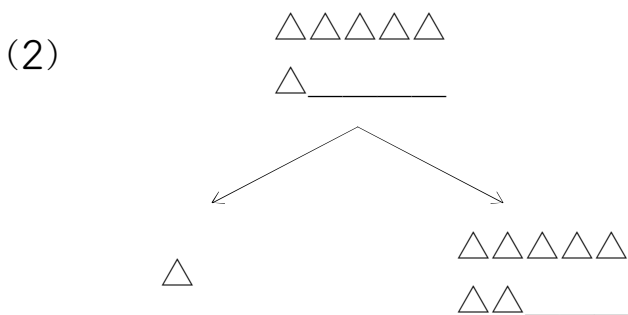
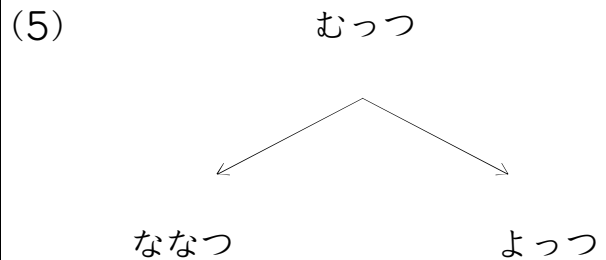
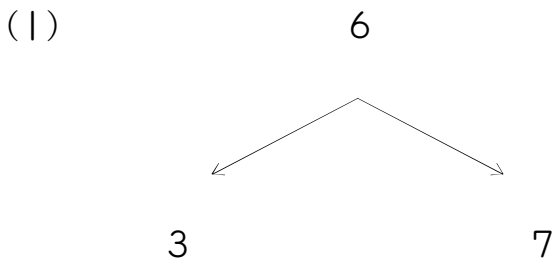
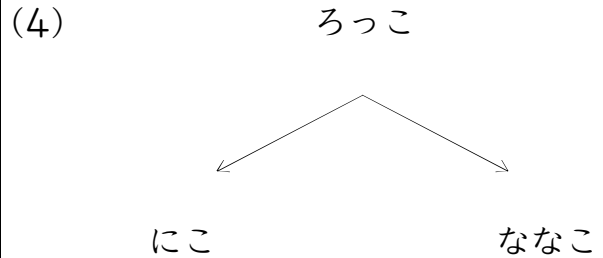
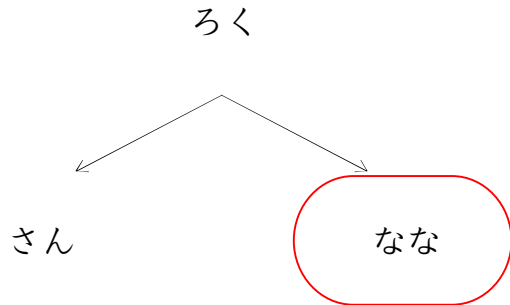
うえの かずの つぎは ひだりの かずかな? みぎの かずかな?
まる(○)をつけよう!



つぎのかずは?(6のつぎは)_01_問題

なまえ : _____

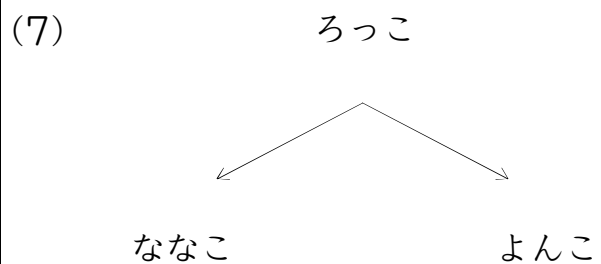
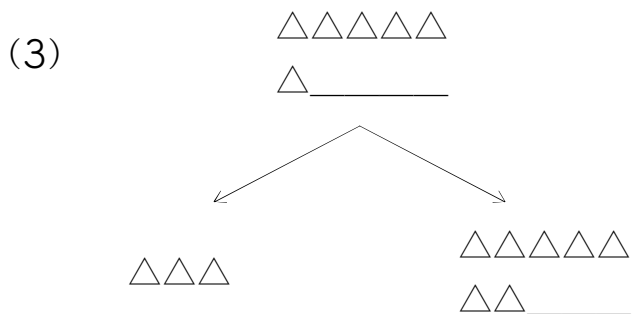
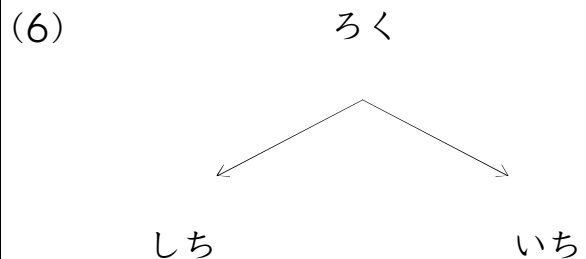
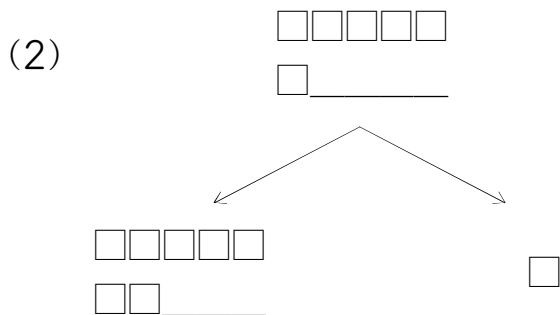
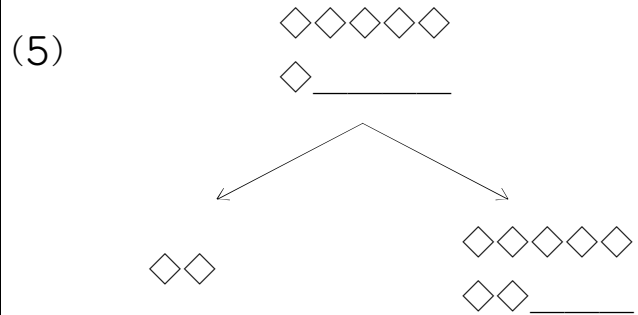
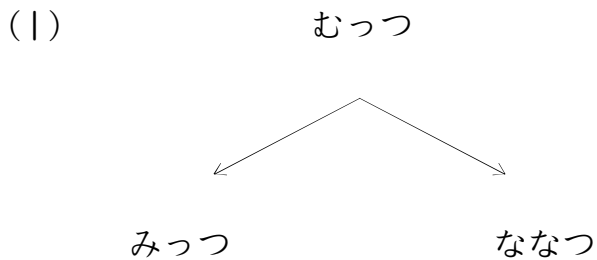
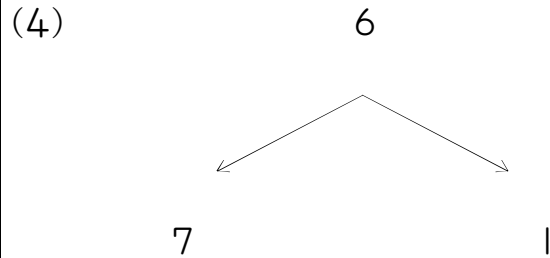
うえの かずの つぎは ひだりの かずかな? みぎの かずかな?
まる(○)をつけよう!



つぎのかずは?(6のつぎは)_01_問題

なまえ: _____

うえの かずの つぎは ひだりの かずかな? みぎの かずかな?
まる(○)をつけよう!



つぎのかずは?(6のつぎは)_01_問題

なまえ: _____

うえの かずの つぎは ひだりの かずかな? みぎの かずかな?
まる(○)をつけよう!

☆☆☆☆☆

☆ _____

☆☆☆☆☆

☆☆ _____

☆

(4)

むっつ

ななつ

みっつ

(1)

△△△△△

△ _____

△

△△△△△

△△ _____

(5)

6

7

2

(2)

ろく

なな

に

(6)

ろくにん

ふたり

しちにん

(3)

ろっこ

ななこ

いっこ

(7)

◇◇◇◇◇

◇ _____

◇◇◇◇◇

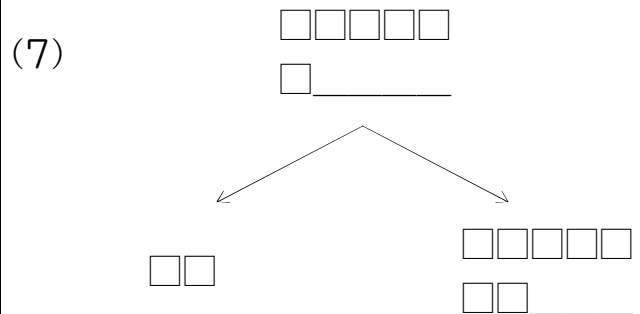
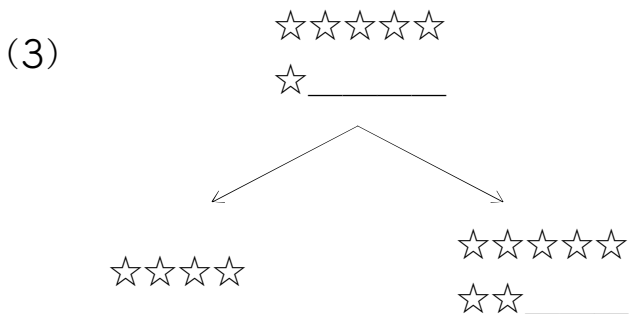
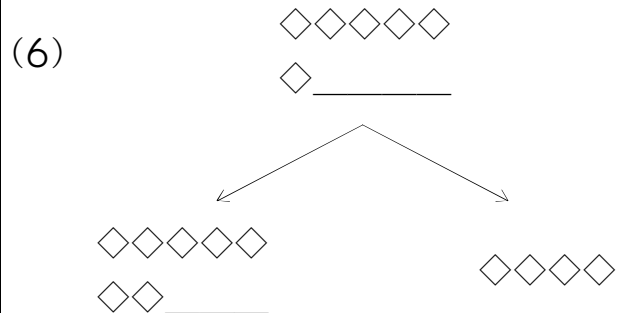
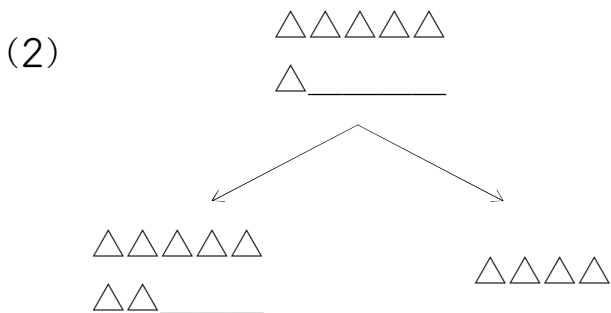
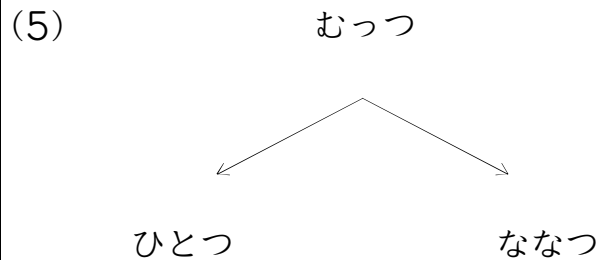
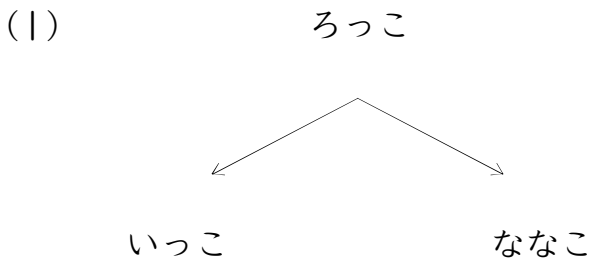
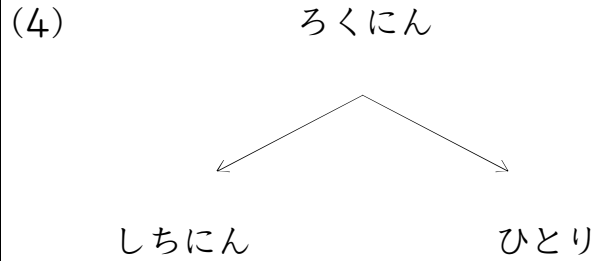
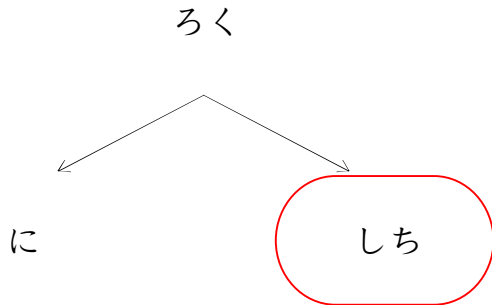
◇◇ _____

◇◇◇◇◇

つぎのかずは?(6のつぎは)_01_問題

なまえ : _____

うえの かずの つぎは ひだりの かずかな? みぎの かずかな?
まる(○)をつけよう!



つぎのかずは?(6のつぎは)_01_問題

なまえ: _____

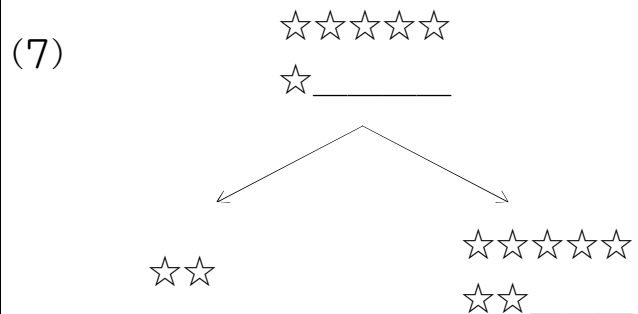
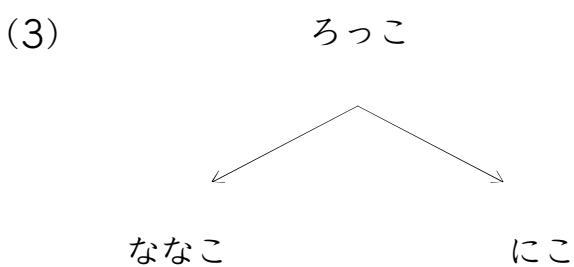
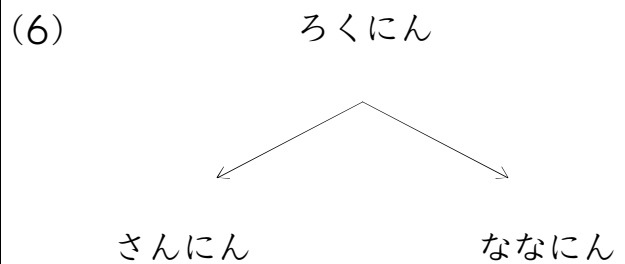
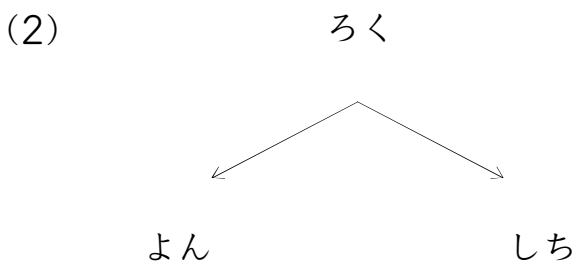
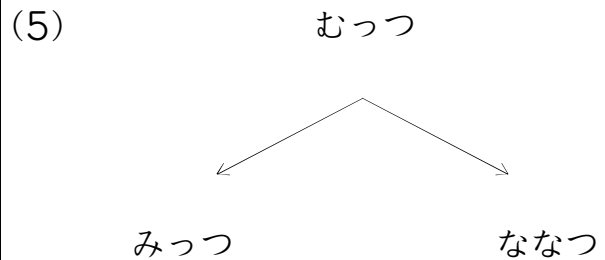
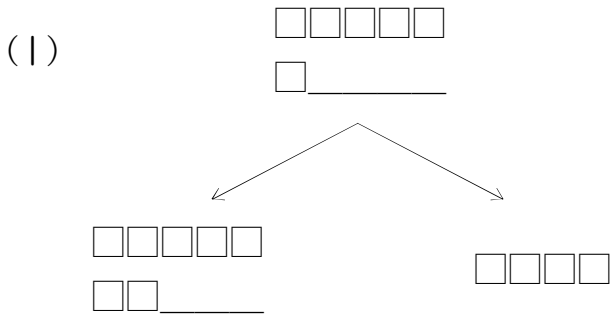
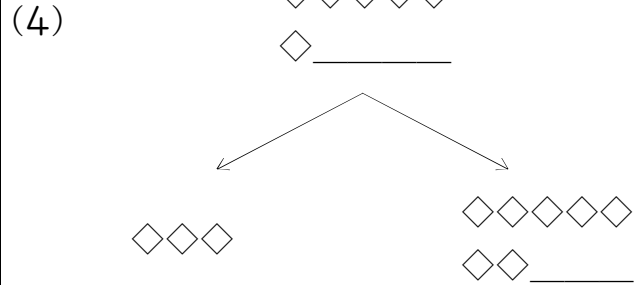
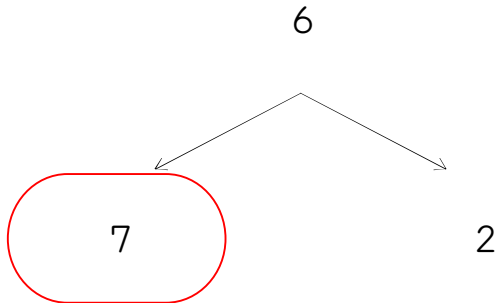
うえのかずの つぎは ひだりの かずかな? みぎのかずかな?
まる(○)をつけよう!

<p>6</p> <p>7 4</p>	<p>(4)</p> <p>☆☆☆☆☆ ☆ _____</p> <p>☆☆☆☆☆ ☆☆ ☆☆ _____</p>
<p>(1)</p> <p>□□□□□ □ _____</p> <p>□□□□ □□□□□ □□□□ □□ _____</p>	<p>(5)</p> <p>◇◇◇◇◇ ◇ _____</p> <p>◇◇◇◇◇ ◇◇◇◇◇ ◇◇ _____ ◇◇◇◇</p>
<p>(2)</p> <p>むっつ</p> <p>ななつ ひとつ</p>	<p>(6)</p> <p>ろっこ</p> <p>さんこ ななこ</p>
<p>(3)</p> <p>ろく</p> <p>いち なな</p>	<p>(7)</p> <p>△△△△△ △ _____</p> <p>△△△ △△△△△ △△△ △△ _____</p>

つぎのかずは?(6のつぎは)_01_問題

なまえ: _____

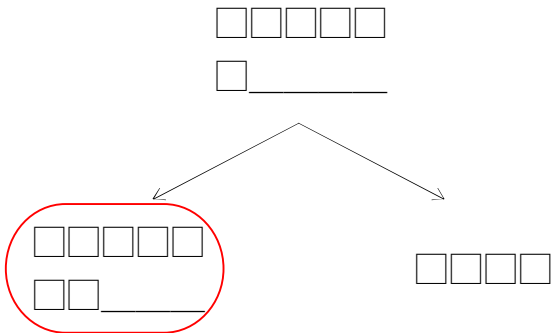
うえの かずの つぎは ひだりの かずかな? みぎの かずかな?
まる(○)をつけよう!



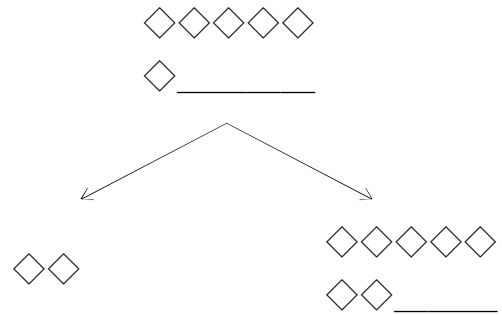
つぎのかずは?(6のつぎは)_01_問題

なまえ : _____

うえの かずの つぎは ひだりの かずかな? みぎの かずかな?
まる(○)をつけよう!

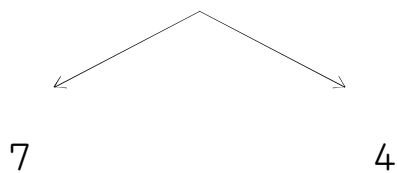


(4)



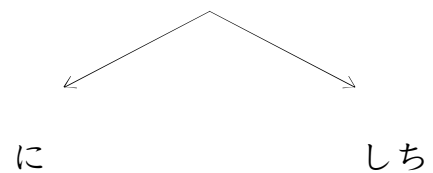
(1)

6



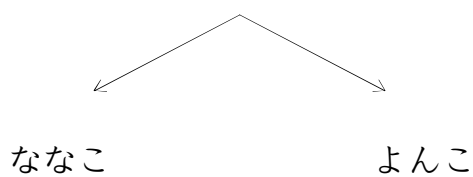
(5)

ろく

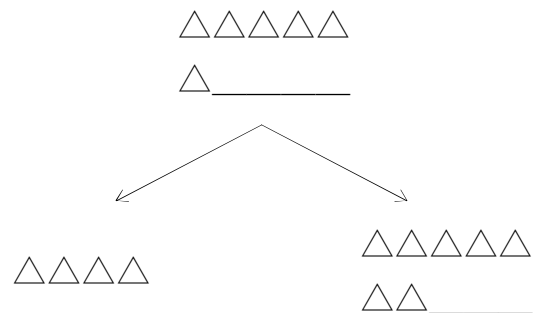


(2)

ろっこ

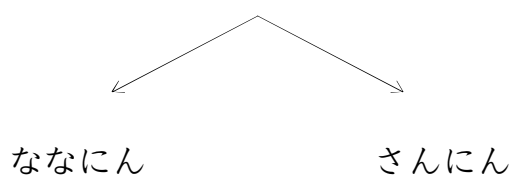


(6)

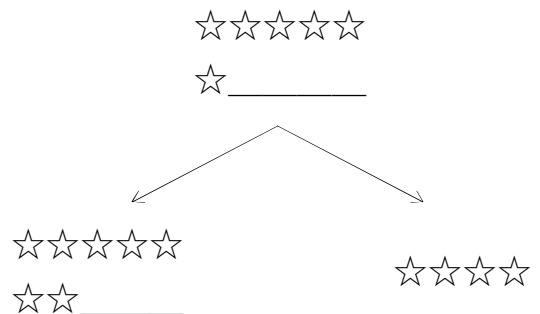


(3)

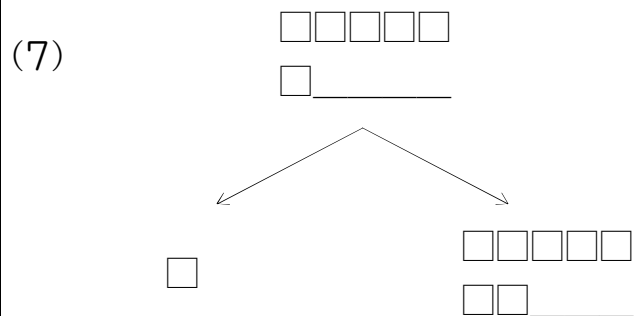
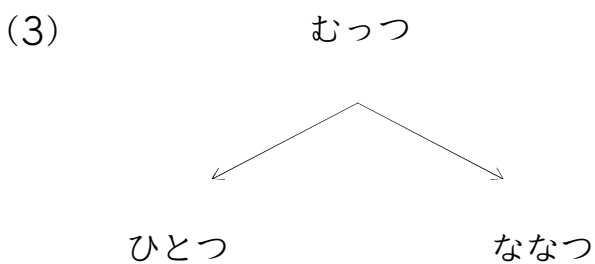
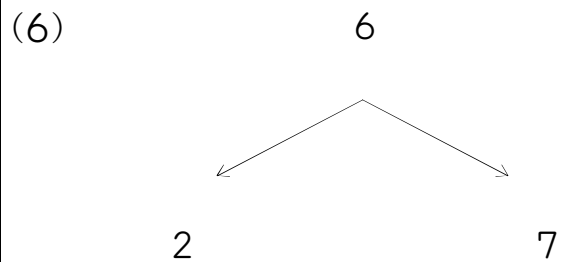
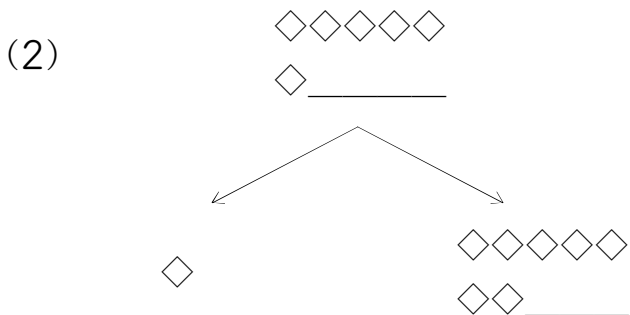
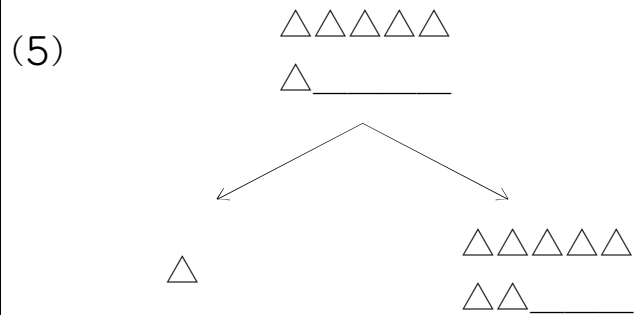
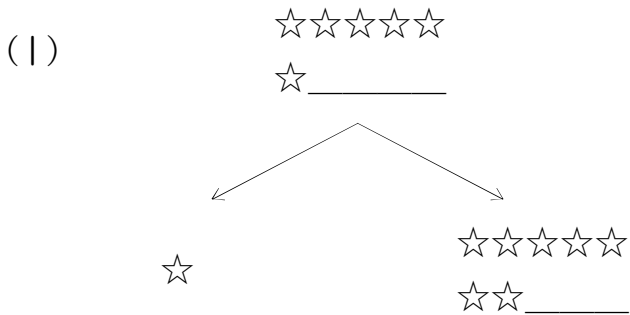
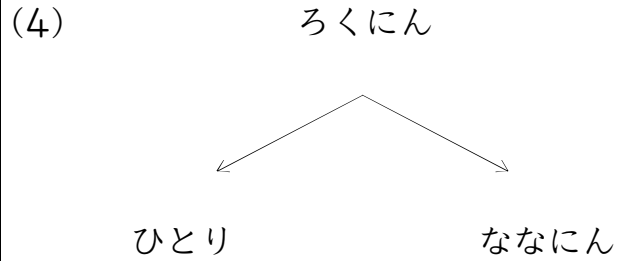
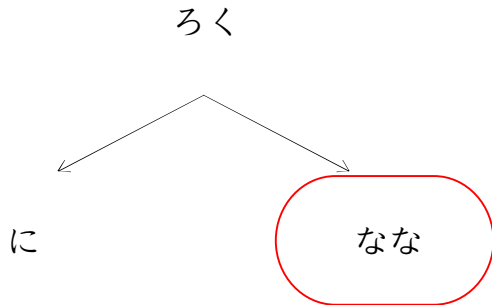
ろくにん



(7)



うえの かずの つぎは ひだりの かずかな? みぎの かずかな?
まる(○)をつけよう!

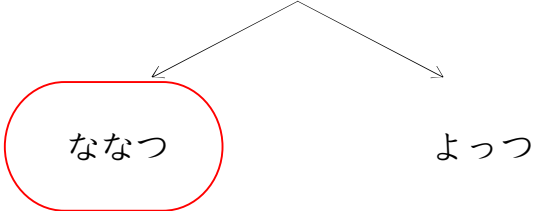


つぎのかずは?(6のつぎは)_01_問題

なまえ : _____

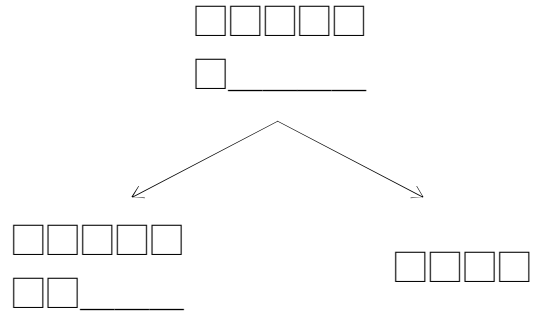
うえの かずの つぎは ひだりの かずかな? みぎの かずかな?
まる(○)をつけよう!

むっつ


 ななつ

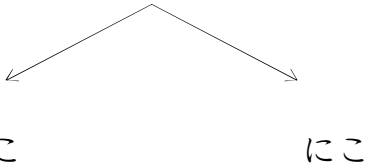
よっつ

(4)



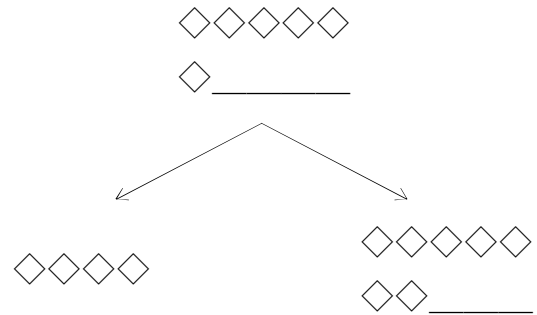
(1)

ろっこ


 ななこ

にこ

(5)



(2)

△△△△△

△ _____

△△△△△

△△ _____

△△△△

(6)

6

3

7

(3)

☆☆☆☆☆

☆ _____

☆☆☆☆☆

☆☆ _____

☆☆☆☆

(7)

ろく

さん

なな

つぎのかずは?(6のつぎは)_01_問題

なまえ : _____

うえの かずの つぎは ひだりの かずかな? みぎの かずかな?
まる(○)をつけよう!

☆☆☆☆☆

☆ _____

☆☆☆☆☆

☆☆ _____

☆☆

(4)

ろくにん

しちにん

よにん

(1)

むつつ

ななつ

ふたつ

(5)

ろっこ

よんこ

ななこ

(2)

◇◇◇◇◇

◇ _____

◇◇◇

◇◇◇◇◇

◇◇ _____

(6)

□□□□□

□ _____

□□□□□

□□ _____

□□□□

(3)

ろく

しち

し

(7)

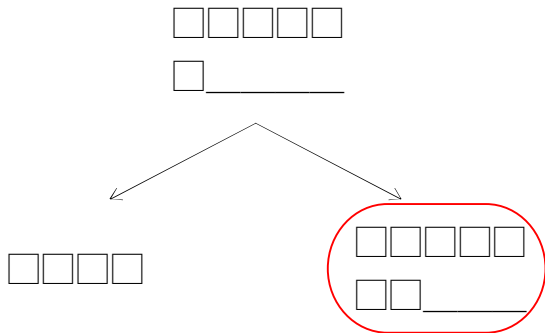
6

4

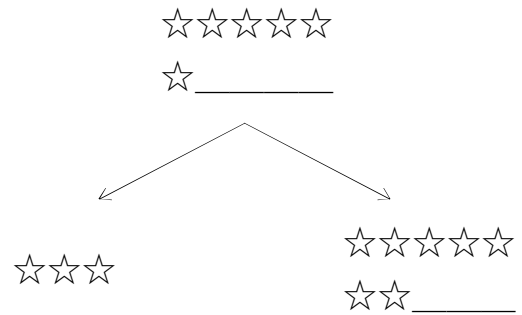
7

なまえ : _____

うえの かずの つぎは ひだりの かずかな? みぎの かずかな?
まる(○)をつけよう!

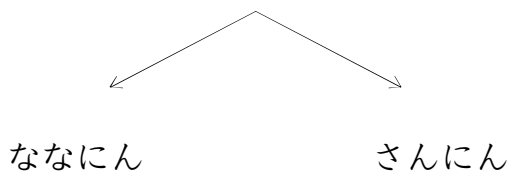


(4)



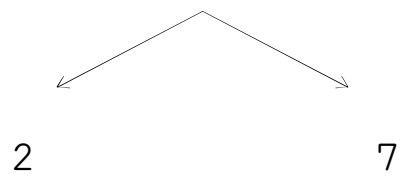
(1)

ろくにん



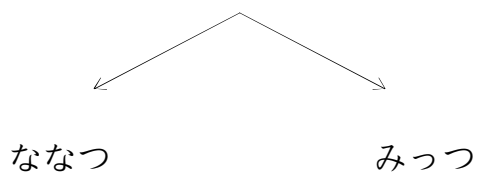
(5)

6

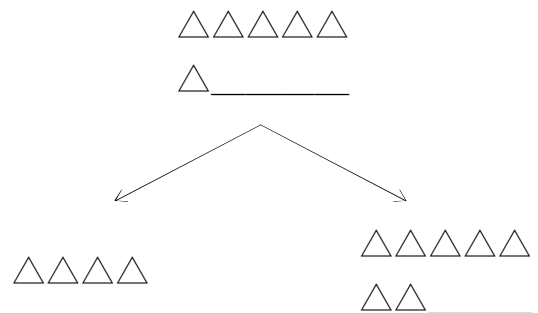


(2)

むっつ

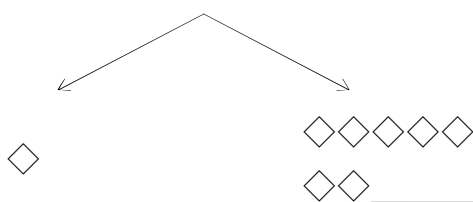


(6)



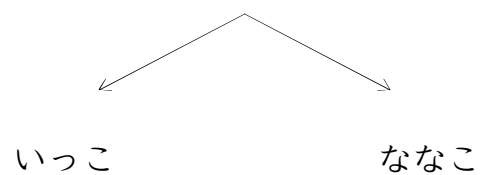
(3)

◇◇◇◇◇
◇ _____



(7)

ろっこ



うえの かずの つぎは ひだりの かずかな? みぎの かずかな?
まる(○)をつけよう!

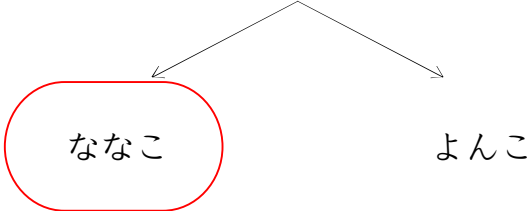
<p>◇◇◇◇◇ ◇ _____</p> <p>◇◇◇◇◇ ◇◇ _____</p> <p>◇◇◇</p>	<p>(4) ろくにん</p> <p>ひとり しちにん</p>
<p>(1) むつつ</p> <p>ななつ ひとつ</p>	<p>(5)</p> <p>□□□□□ □ _____</p> <p>□□□□□ □□ _____</p> <p>□</p>
<p>(2) ろっこ</p> <p>よんこ ななこ</p>	<p>(6) ろく</p> <p>いち なな</p>
<p>(3)</p> <p>△△△△△ △ _____</p> <p>△ △△△△△ △△ _____</p>	<p>(7) 6</p> <p>7 1</p>

つぎのかずは?(6のつぎは)_01_問題

なまえ : _____

うえの かずの つぎは ひだりの かずかな? みぎの かずかな?
まる(○)をつけよう!

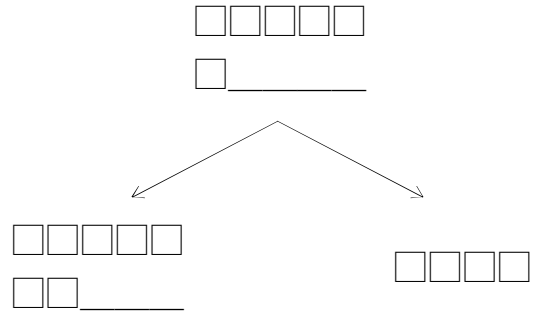
ろっこ



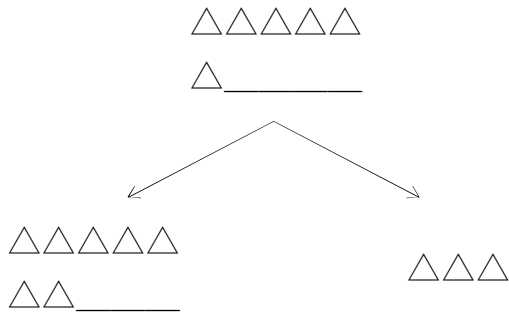
ななこ

よんこ

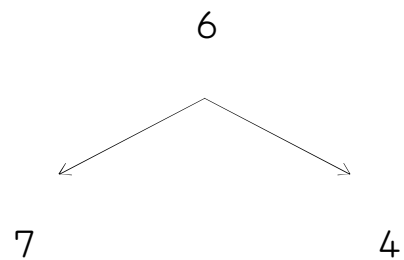
(4)



(1)



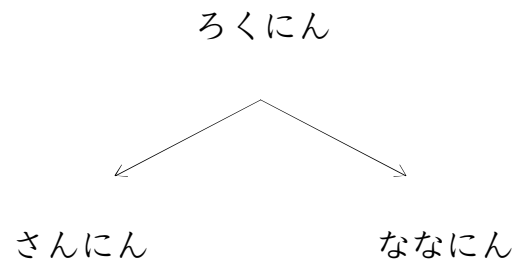
(5)



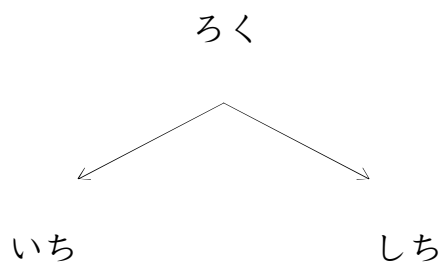
(2)



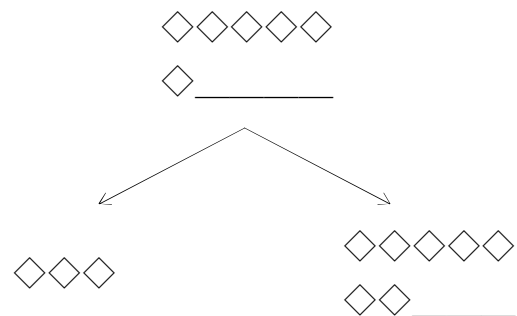
(6)



(3)



(7)

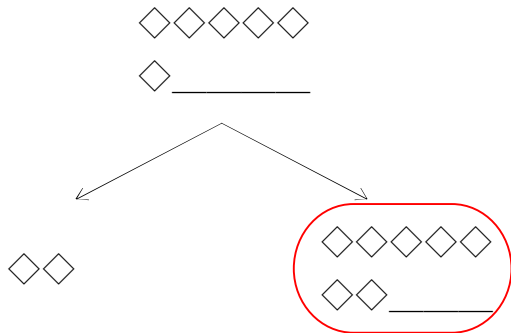


なまえ : _____

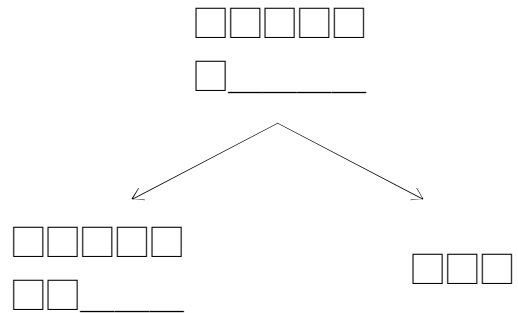
うえの かずの つぎは ひだりの かずかな? みぎの かずかな?
まる(○)をつけよう!

<p style="text-align: center;">ろっこ</p>	<p>(4)</p> <p style="text-align: center;">☆☆☆☆☆ ☆ _____</p>
<p>(1)</p> <p style="text-align: center;">□□□□□ □ _____</p>	<p>(5)</p> <p style="text-align: center;">ろく</p>
<p>(2)</p> <p style="text-align: center;">△△△△△ △ _____</p>	<p>(6)</p> <p style="text-align: center;">むっつ</p>
<p>(3)</p> <p style="text-align: center;">ろくにん</p>	<p>(7)</p> <p style="text-align: center;">◇◇◇◇◇ ◇ _____</p>

うえの かずの つぎは ひだりの かずかな? みぎの かずかな?
まる(○)をつけよう!

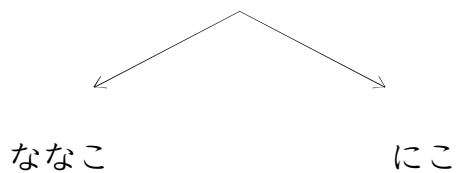


(4)



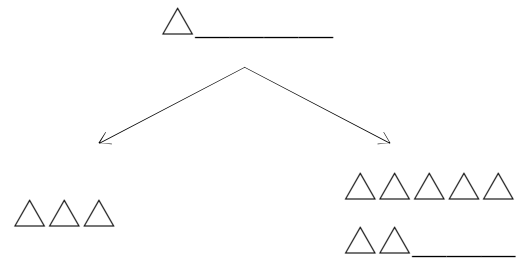
(1)

ろっこ



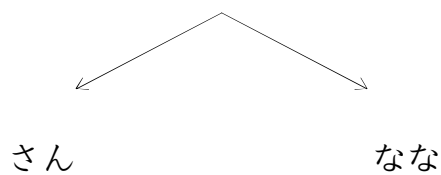
(5)

△△△△△



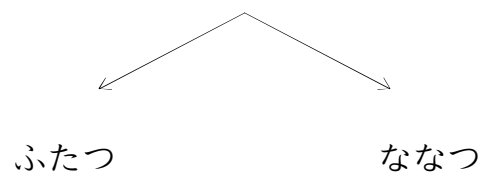
(2)

ろく



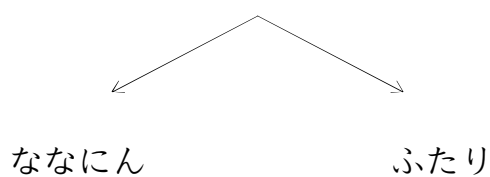
(6)

むっつ



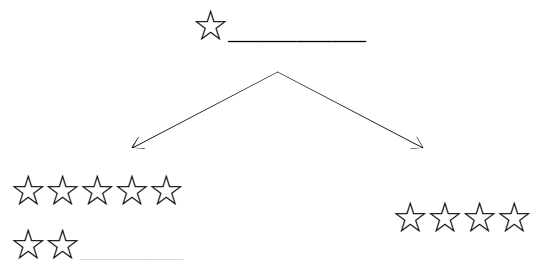
(3)

ろくにん



(7)

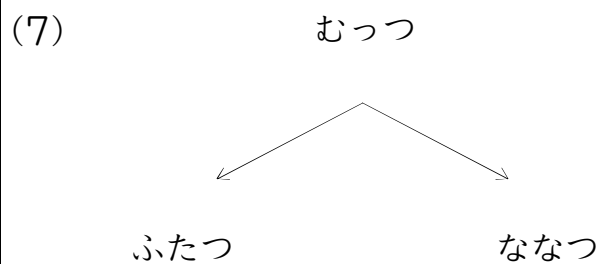
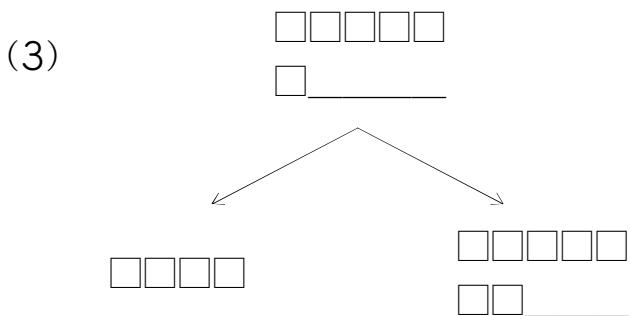
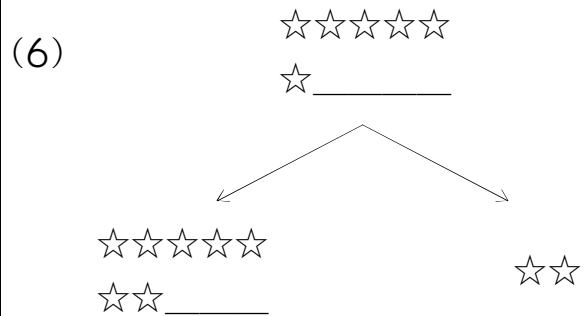
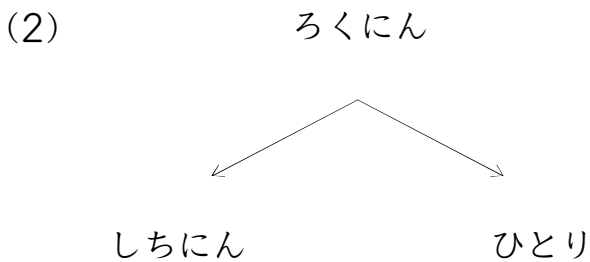
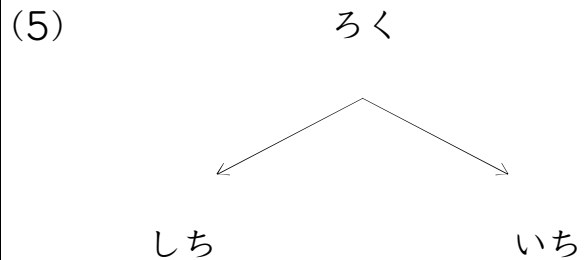
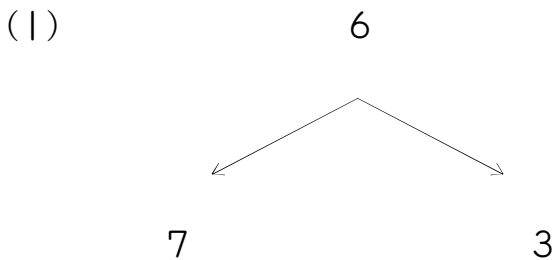
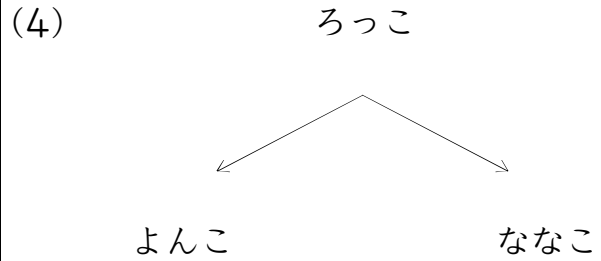
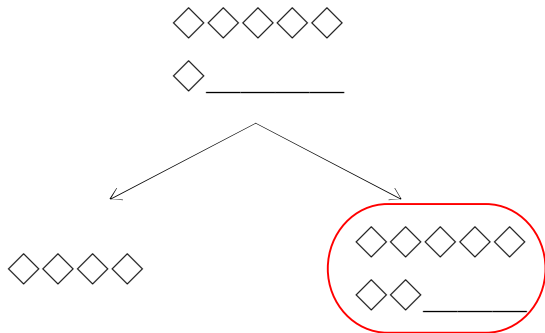
☆☆☆☆☆



つぎのかずは?(6のつぎは)_01_問題

なまえ: _____

うえの かずの つぎは ひだりの かずかな? みぎの かずかな?
まる(○)をつけよう!



つぎのかずは?(6のつぎは)_01_問題

なまえ : _____

うえの かずの つぎは ひだりの かずかな? みぎの かずかな?
まる(○)をつけよう!

むっつ

ななつ

ふたつ

(4)

ろくにん

ななにん

さんにん

(1)

△△△△△

△ _____

△△△△△

△△ _____

△△

(5)

□□□□□

□ _____

□□□□□

□□ _____

□□□

(2)

◇◇◇◇◇

◇ _____

◇◇◇◇◇

◇◇ _____

◇◇◇◇◇

(6)

ろく

に

なな

(3)

6

2

7

(7)

☆☆☆☆☆

☆ _____

☆

☆☆☆☆☆

☆☆ _____

つぎのかずは?(6のつぎは)_01_問題

なまえ : _____

うえの かずの つぎは ひだりの かずかな? みぎの かずかな?
まる(O)をつけよう!

むっつ

ななつ

ふたつ

(4)

ろくにん

さんにん

しちにん

(1)

ろっこ

ななこ

にこ

(5)

☆☆☆☆☆

☆_____

☆☆☆☆☆

☆☆_____

☆☆

(2)

△△△△△

△_____

△△△△△

△△_____

△△△

(6)

6

2

7

(3)

◇◇◇◇◇

◇_____

◇◇◇◇◇

◇◇_____

◇◇◇

(7)

ろく

しち

さん

つぎのかずは?(6のつぎは)_01_問題

なまえ : _____

うえの かずの つぎは ひだりの かずかな? みぎの かずかな?
まる(○)をつけよう!

ろく


 なな

に

(4)

△△△△△

△_____

△△△△

△△△△△

△△_____

(1)

ろくにん

ひとり

しちにん

(5)

□□□□□

□_____

□□□□□

□□_____

□□□

(2)

◇◇◇◇◇

◇_____

◇◇

◇◇◇◇◇

◇◇_____

(6)

ろっこ

ななこ

にこ

(3)

むっつ

みっつ

ななつ

(7)

☆☆☆☆☆

☆_____

☆☆☆☆☆

☆☆_____

☆☆☆☆

つぎのかずは?(6のつぎは)_01_問題

なまえ : _____

うえの かずの つぎは ひだりの かずかな? みぎの かずかな?
まる(○)をつけよう!

☆☆☆☆☆

☆ _____

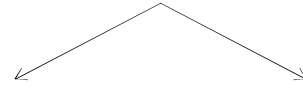
☆☆☆☆☆

☆☆ _____

☆☆☆☆

(4)

ろく

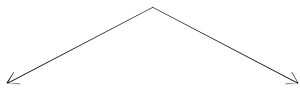


に

しち

(1)

ろくにん



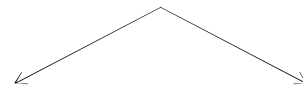
しちにん

ひとり

(5)

□□□□□

□ _____



□□□□

□□□□□

□□ _____

(2)

◇◇◇◇◇

◇ _____

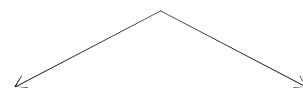
◇◇◇

◇◇◇◇◇

◇◇ _____

(6)

ろっこ

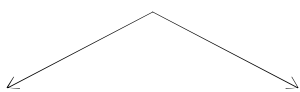


ななこ

いっこ

(3)

6

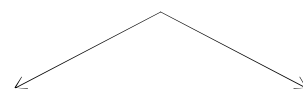


3

7

(7)

むっつ



ななつ

よっつ

うえの かずの つぎは ひだりの かずかな? みぎの かずかな?
まる(○)をつけよう!

6

1 7

(4)

☆☆☆☆☆
☆ _____

☆☆☆ ☆☆☆☆☆
☆☆ _____

(1) ろくにん

ななにん ひとり

(5) ろく

しち いち

(2)

□□□□□
□ _____

□□□ □□□□□
□□ _____

(6) ろっこ

にこ ななこ

(3)

◇◇◇◇◇
◇ _____

◇◇ ◇◇◇◇◇
◇◇ _____

(7)

△△△△△
△ _____

△△△△△
△△ _____ △△△

うえの かずの つぎは ひだりの かずかな? みぎの かずかな?
まる(○)をつけよう!

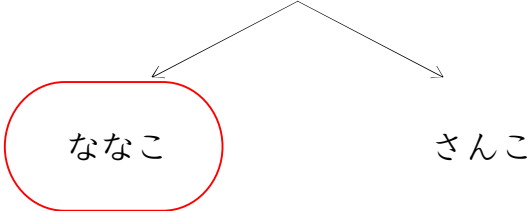
<p style="text-align: center;">ろくにん</p>	<p>(4) ろっこ</p>
<p>(1)</p>	<p>(5)</p>
<p>(2)</p> <p style="text-align: center;">6</p>	<p>(6) ろく</p>
<p>(3)</p>	<p>(7)</p>

つぎのかずは?(6のつぎは)_01_問題

なまえ: _____

うえの かずの つぎは ひだりの かずかな? みぎの かずかな?
まる(○)をつけよう!

ろっこ


 ななこ

さんこ

(4)

☆☆☆☆☆

☆_____

☆☆☆☆☆

☆☆_____

☆

(1)

むつつ

ふたつ

ななつ

(5)

6

7

1

(2)

□□□□□

□_____

□

□□□□□

□□_____

(6)

ろく

いち

なな

(3)

△△△△△

△_____

△△

△△△△△

△△_____

(7)

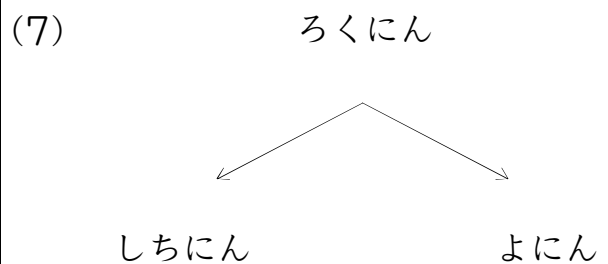
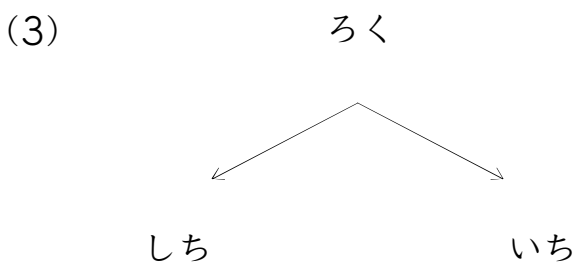
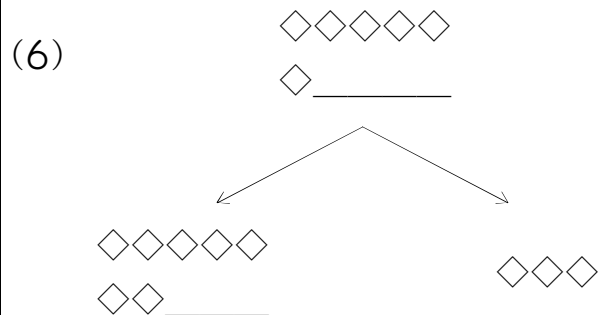
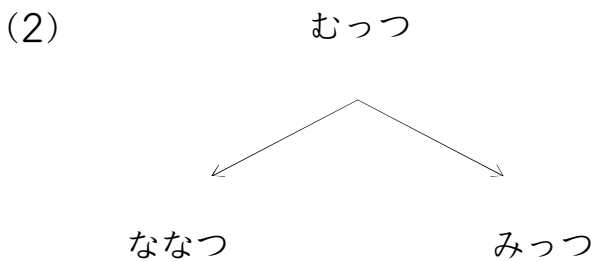
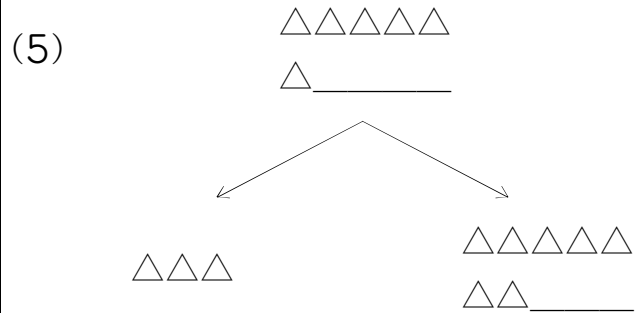
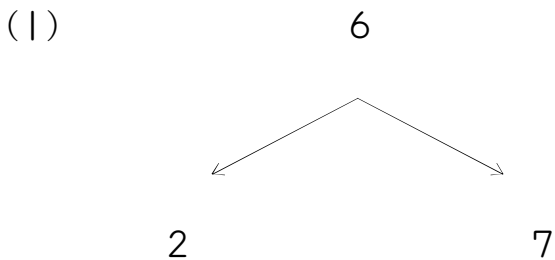
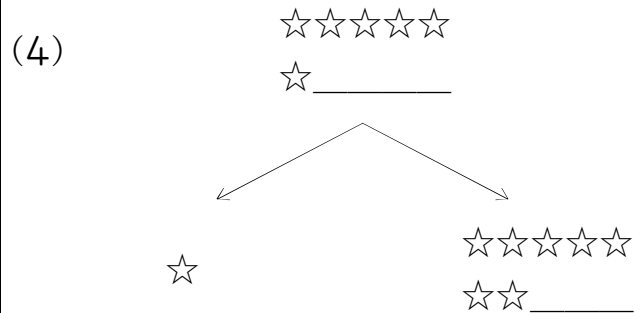
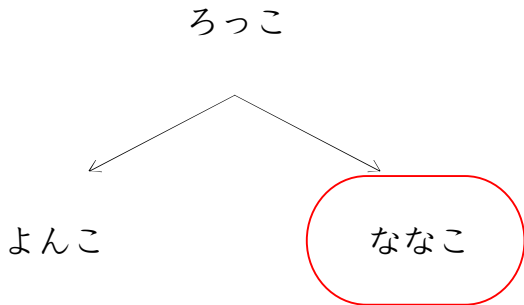
ろくにん

ななにん

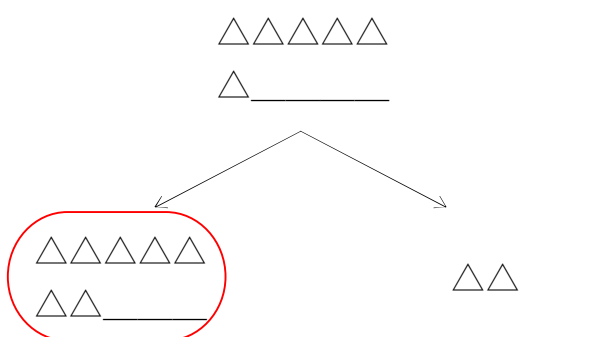
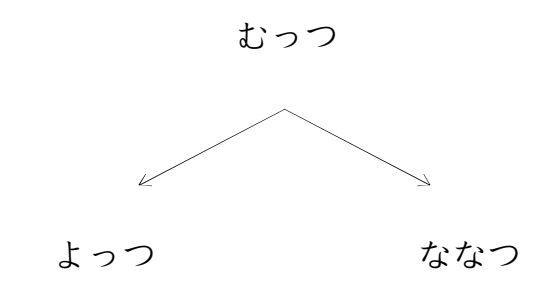
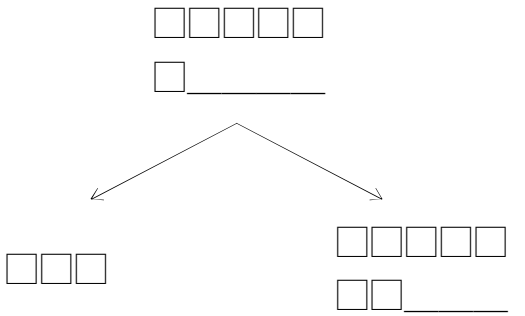
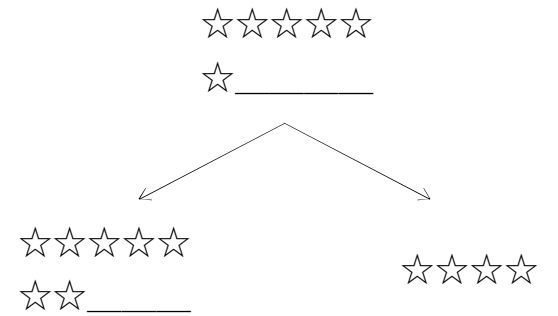
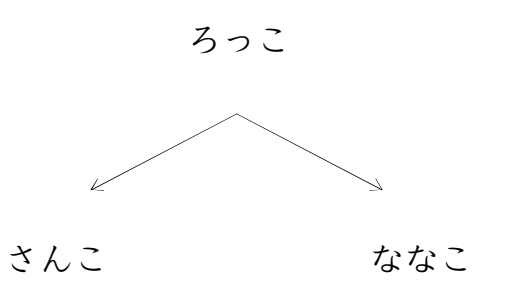
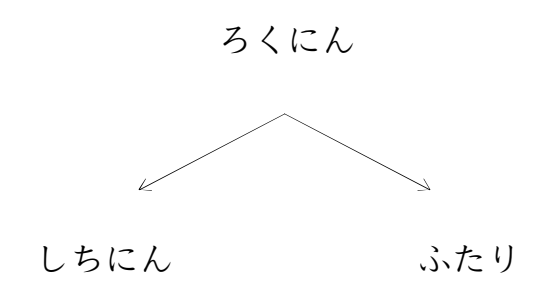
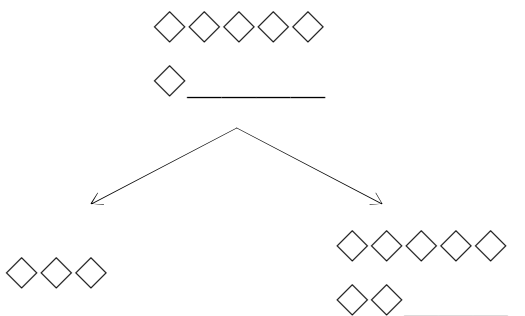
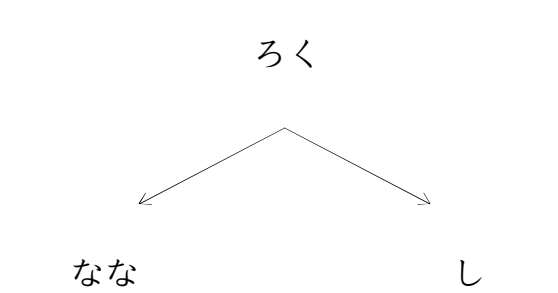
さんになん

なまえ： _____

うえの かずの つぎは ひだりの かずかな？ みぎの かずかな？
まる(○)をつけよう！



うえの かずの つぎは ひだりの かずかな? みぎの かずかな?
まる(○)をつけよう!

<p>(1) </p>	<p>(4) </p>
<p>(1) </p>	<p>(5) </p>
<p>(2) </p>	<p>(6) </p>
<p>(3) </p>	<p>(7) </p>

うえの かずの つぎは ひだりの かずかな? みぎの かずかな?
まる(○)をつけよう!

6

7 3

(4)

☆☆☆☆☆
☆ _____

☆☆☆ ☆☆☆☆☆
☆☆☆☆☆
☆☆ _____

(1)

△△△△△
△ _____

△△△△△ △△
△△ _____

(5)

ろく

なな さん

(2)

ろくにん

ふたり ななにん

(6)

むっつ

ふたつ ななつ

(3)

◇◇◇◇◇
◇ _____

◇◇◇◇◇ ◇◇◇
◇◇ _____

(7)

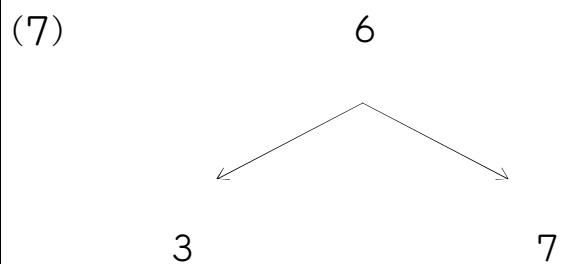
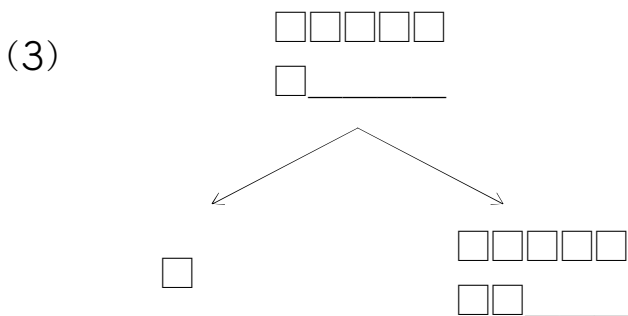
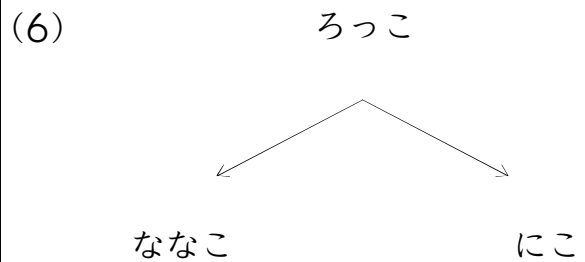
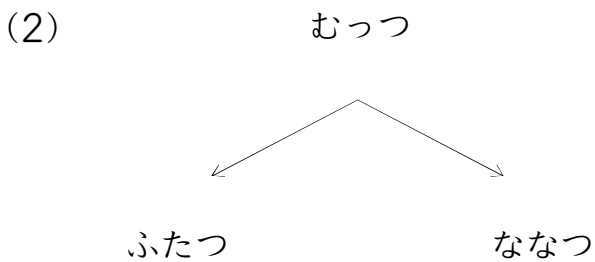
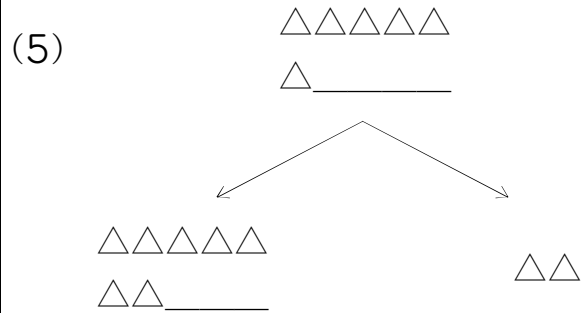
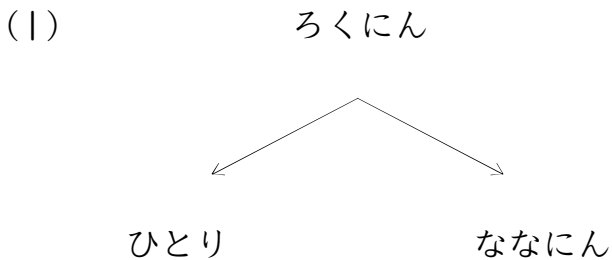
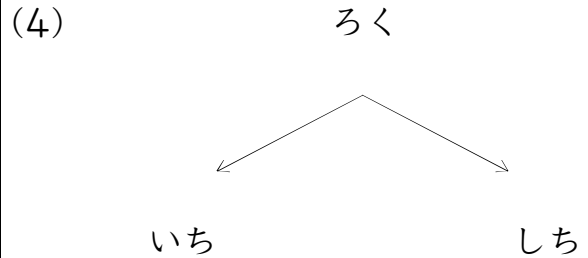
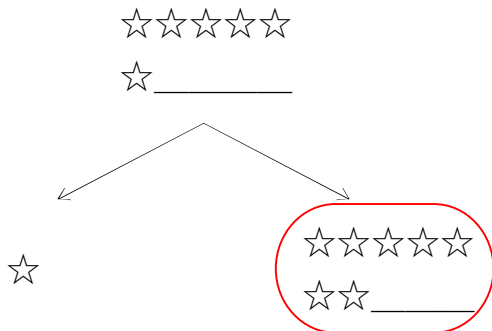
□□□□□
□ _____

□□□□□ □□□□
□□ _____

つぎのかずは?(6のつぎは)_01_問題

なまえ: _____

うえの かずの つぎは ひだりの かずかな? みぎの かずかな?
まる(○)をつけよう!

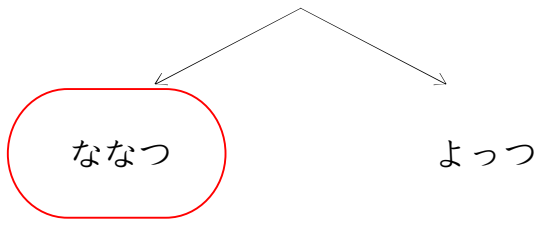


つぎのかずは?(6のつぎは)_01_問題

なまえ : _____

うえの かずの つぎは ひだりの かずかな? みぎの かずかな?
まる(○)をつけよう!

むっつ


 ななつ

よっつ

(4)

☆☆☆☆☆

☆ _____

☆☆

☆☆☆☆☆

☆☆ _____

(1)

◇◇◇◇◇

◇ _____

◇◇

◇◇◇◇◇

◇◇ _____

(5)

ろく

し

しち

(2)

ろくにん

ふたり

しちにん

(6)

△△△△△

△ _____

△△△△△

△△ _____

△△

(3)

□□□□□

□ _____

□

□□□□□

□□ _____

(7)

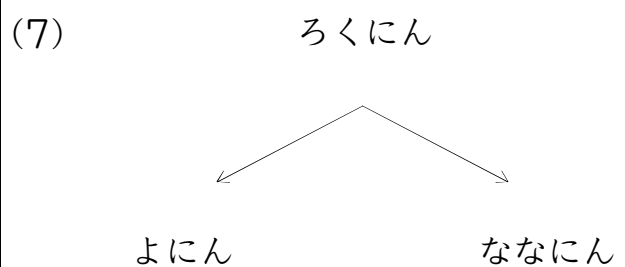
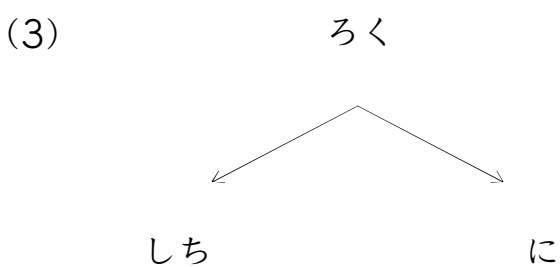
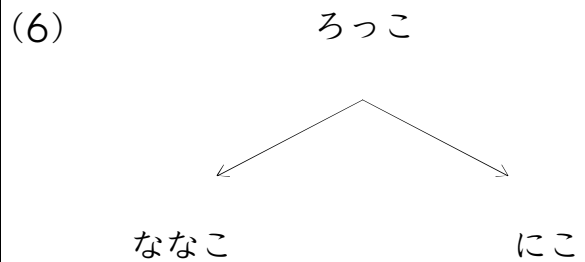
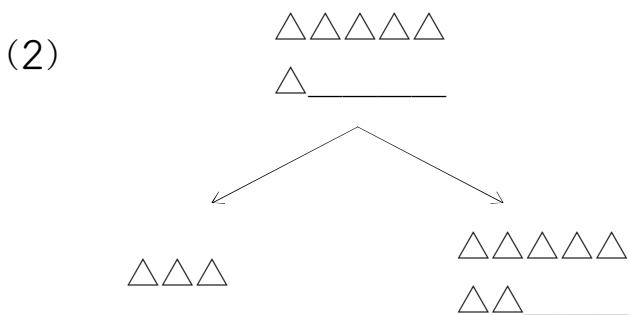
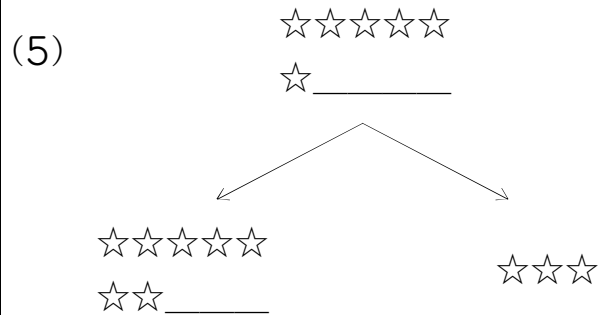
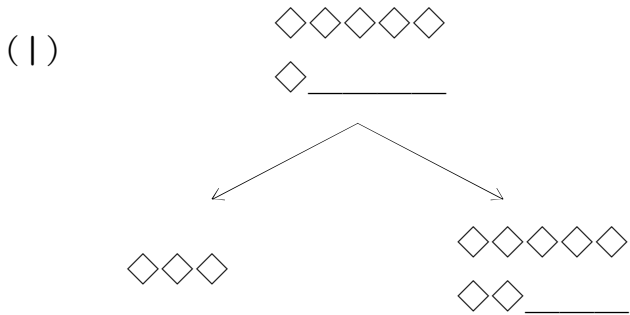
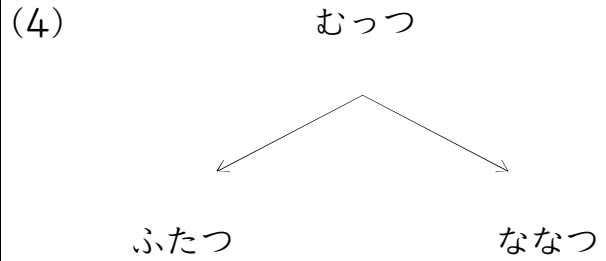
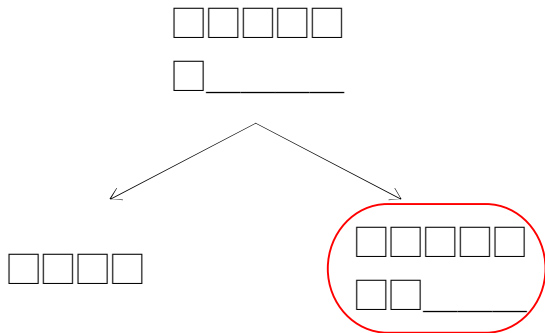
6

7

4

なまえ : _____

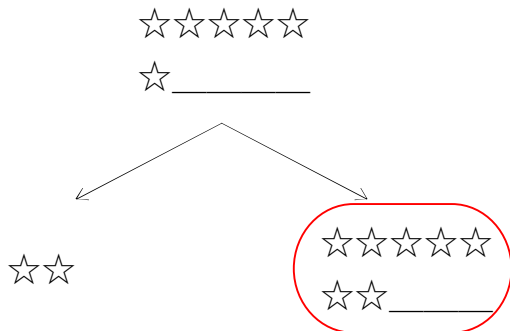
うえの かずの つぎは ひだりの かずかな? みぎの かずかな?
まる(○)をつけよう!



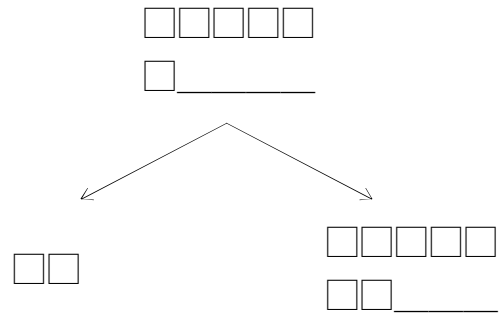
つぎのかずは?(6のつぎは)_01_問題

なまえ : _____

うえの かずの つぎは ひだりの かずかな? みぎの かずかな?
まる(O)をつけよう!

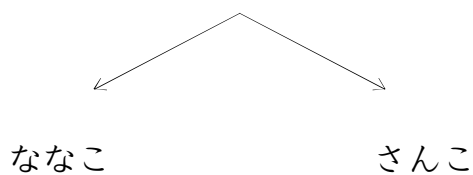


(4)



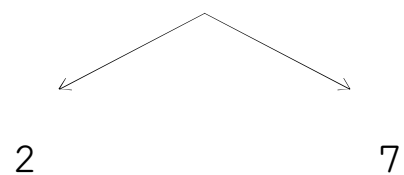
(1)

ろっこ

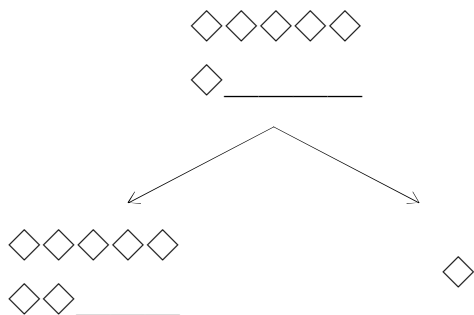


(5)

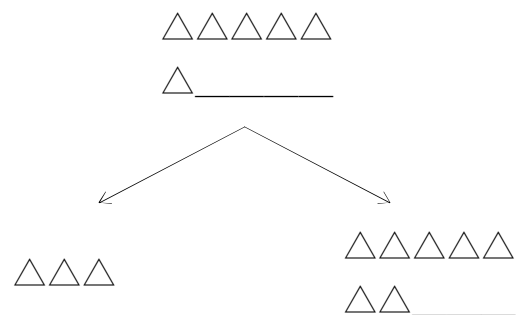
6



(2)

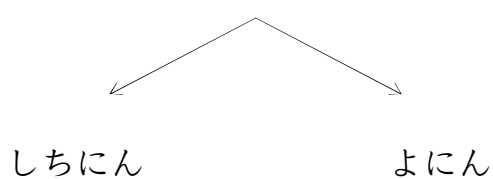


(6)



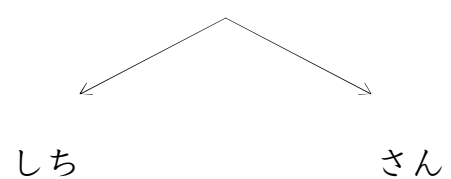
(3)

ろくにん



(7)

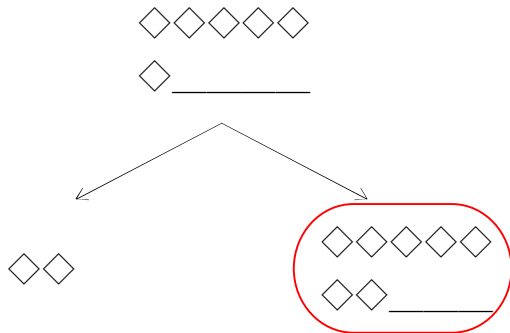
ろく



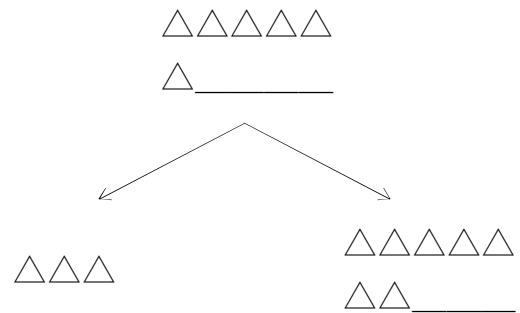
つぎのかずは?(6のつぎは)_01_問題

なまえ : _____

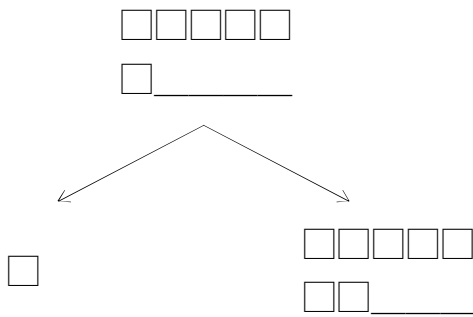
うえの かずの つぎは ひだりの かずかな? みぎの かずかな?
まる(○)をつけよう!



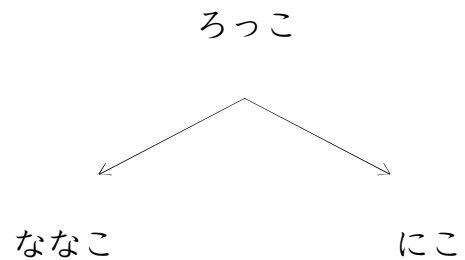
(4)



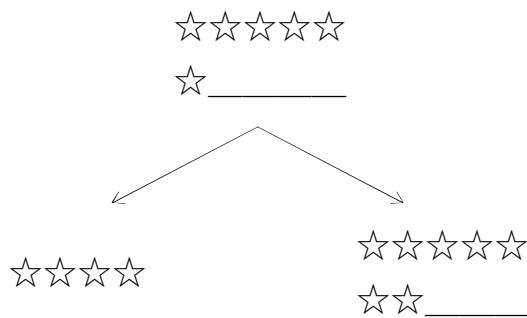
(1)



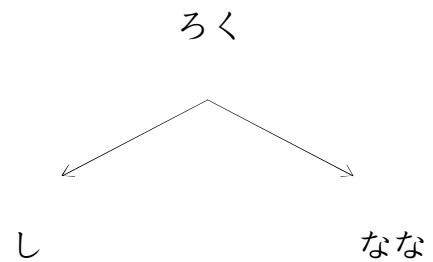
(5)



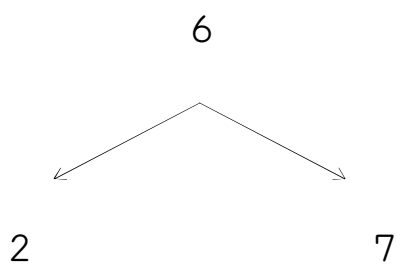
(2)



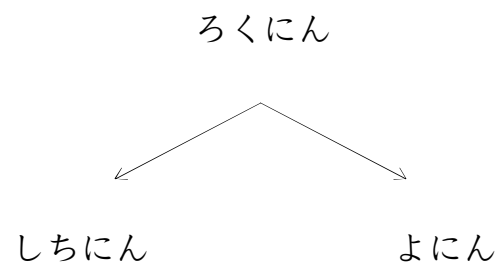
(6)



(3)



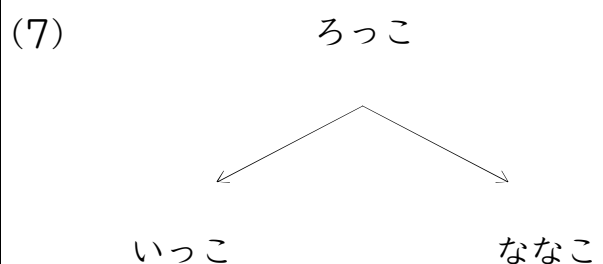
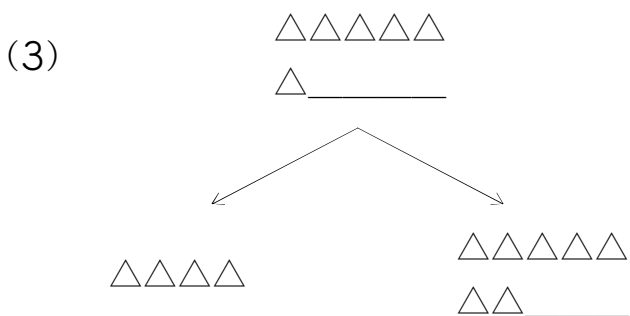
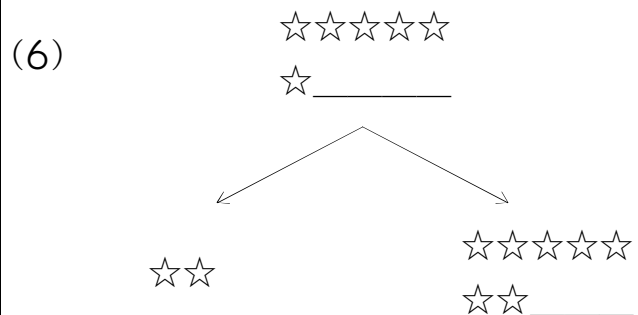
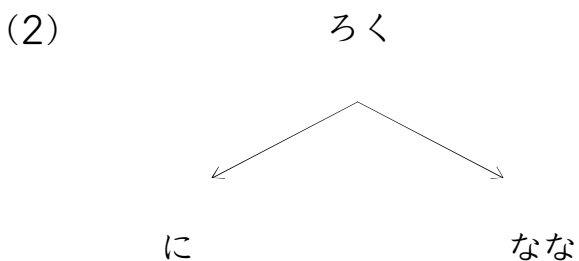
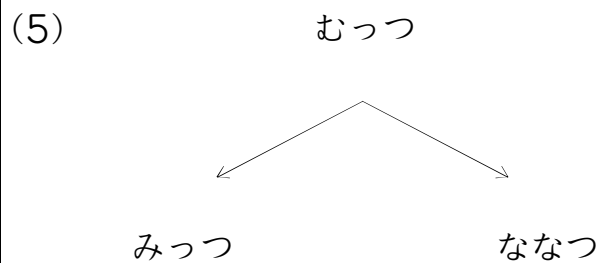
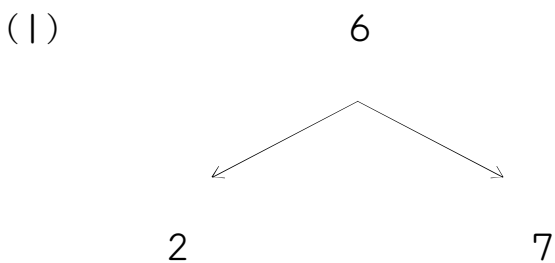
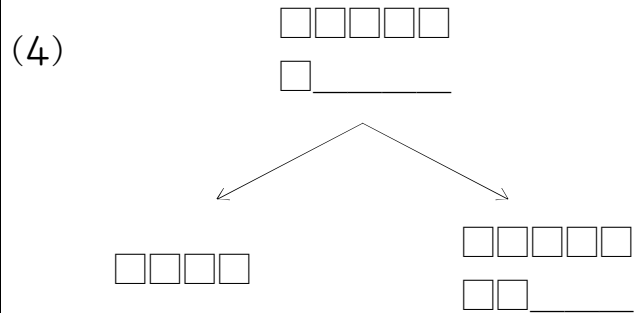
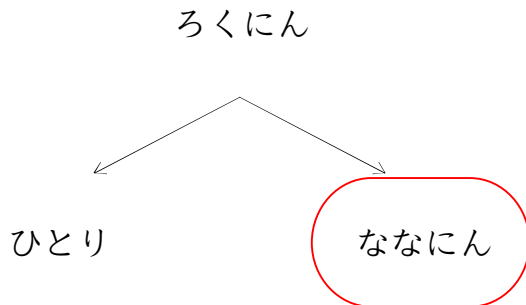
(7)



つぎのかずは?(6のつぎは)_01_問題

なまえ : _____

うえの かずの つぎは ひだりの かずかな? みぎの かずかな?
まる(○)をつけよう!



つぎのかずは?(6のつぎは)_01_問題

なまえ : _____

うえの かずの つぎは ひだりの かずかな? みぎの かずかな?
まる(○)をつけよう!

☆☆☆☆☆

☆ _____

☆☆☆☆☆
☆☆ _____

☆

(4)

◇◇◇◇◇

◇ _____

◇◇◇◇◇
◇◇ _____

◇◇◇

(1)

□□□□□

□ _____

□□

□□□□□
□□ _____

(5)

ろっこ

ななこ

よんこ

(2)

△△△△△

△ _____

△

△△△△△
△△ _____

(6)

6

3

7

(3)

ろくにん

よにん

しちにん

(7)

むっつ

ななつ

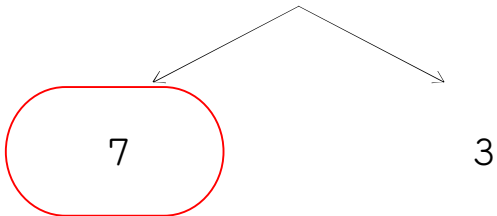
ひとつ

つぎのかずは?(6のつぎは)_01_問題

なまえ : _____

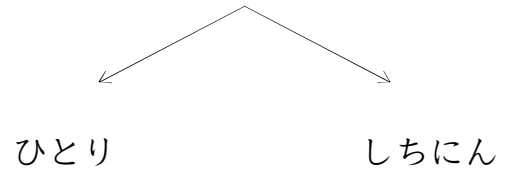
うえの かずの つぎは ひだりの かずかな? みぎの かずかな?
まる(○)をつけよう!

6



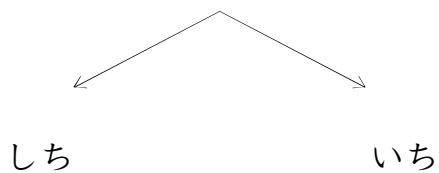
(4)

ろくにん



(1)

ろく



(5)

☆☆☆☆☆

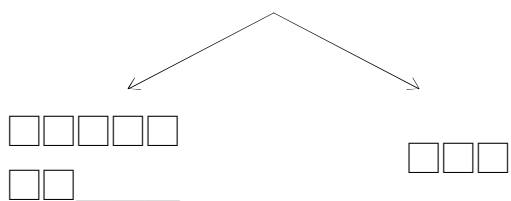
☆_____



(2)

□□□□□

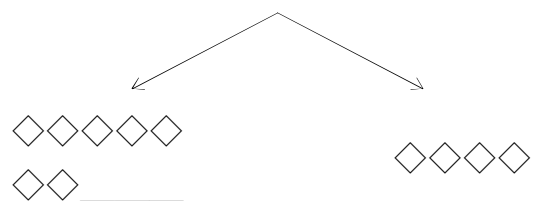
□_____



(6)

◇◇◇◇◇

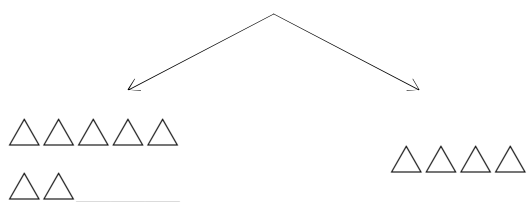
◇_____



(3)

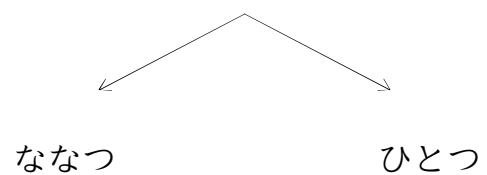
△△△△△

△_____



(7)

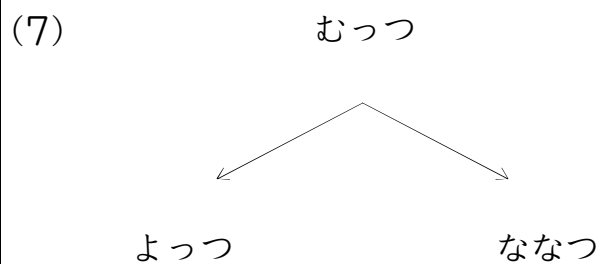
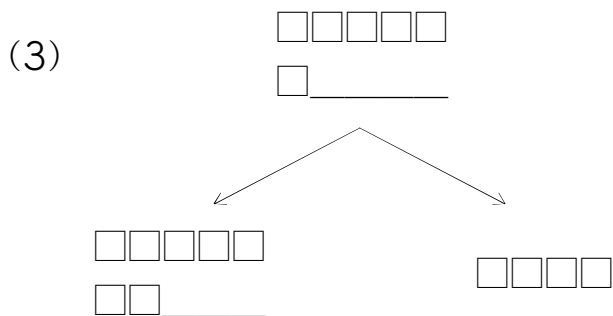
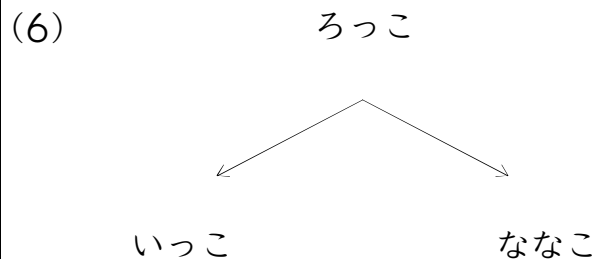
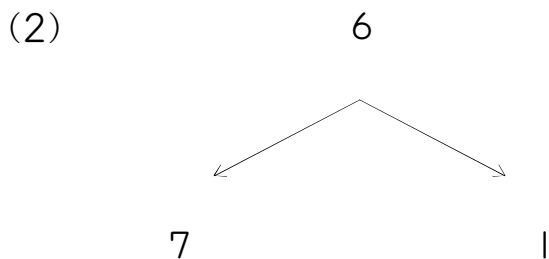
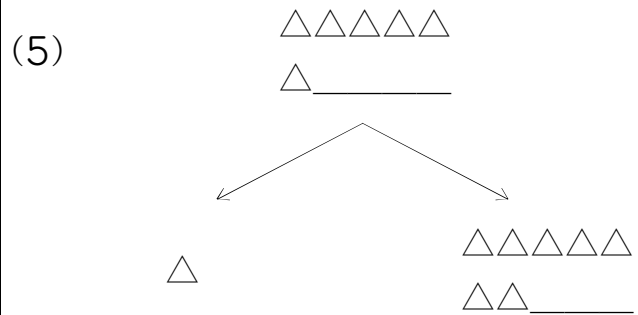
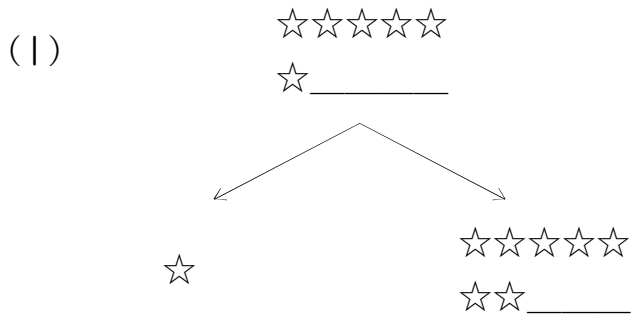
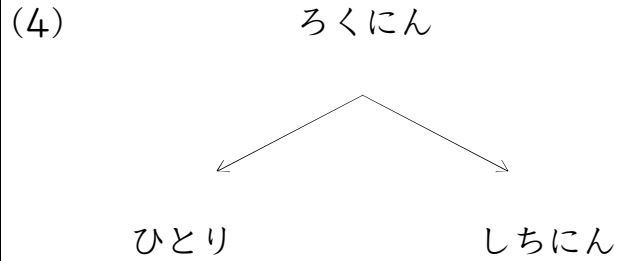
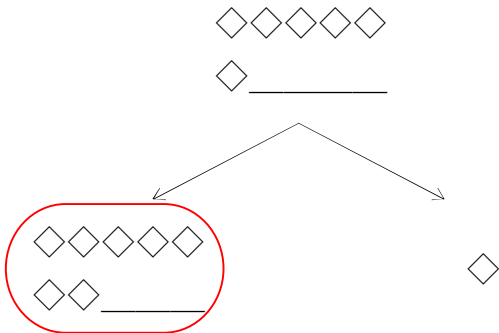
むっつ



つぎのかずは?(6のつぎは)_01_問題

なまえ : _____

うえの かずの つぎは ひだりの かずかな? みぎの かずかな?
まる(○)をつけよう!



つぎのかずは?(6のつぎは)_01_問題

なまえ : _____

うえの かずの つぎは ひだりの かずかな? みぎの かずかな?
まる(○)をつけよう!

☆☆☆☆☆

☆ _____

☆☆☆☆☆
☆☆ _____

☆☆☆☆☆

(4)

□□□□□

□ _____

□□□□□
□□ _____

□□□

(1)

ろくにん

ななにん

さんにん

(5)

△△△△△

△ _____

△△△△

△△△△△

△△ _____

(2)

むつつ

ななつ

みつつ

(6)

6

2

7

(3)

ろっこ

ななこ

よんこ

(7)

ろく

しち

に

うえの かずの つぎは ひだりの かずかな? みぎの かずかな?
まる(○)をつけよう!

<p>☆☆☆☆☆ ☆ _____</p> <p>☆☆</p> <p>☆☆☆☆☆ ☆☆ _____</p>	<p>(4) むつつ</p> <p>ななつ</p> <p>ひとつ</p>
<p>(1) ろく</p> <p>し</p> <p>しち</p>	<p>(5) ◇◇◇◇◇ ◇ _____</p> <p>◇</p> <p>◇◇◇◇◇ ◇◇ _____</p>
<p>(2) □□□□□ □ _____</p> <p>□□□□□ □□ _____</p> <p>□</p>	<p>(6) ろくにん</p> <p>ななにん</p> <p>さんにん</p>
<p>(3) △△△△△ △ _____</p> <p>△△</p> <p>△△△△△ △△ _____</p>	<p>(7) ろっこ</p> <p>ななこ</p> <p>さんこ</p>

つぎのかずは?(6のつぎは)_01_問題

なまえ : _____

うえの かずの つぎは ひだりの かずかな? みぎの かずかな?
まる(○)をつけよう!

ろくにん

しちにん

さんにん

(4)

6

1

7

(1)

むつつ

ななつ

ひとつ

(5)

ろく

しち

よん

(2)

□□□□□

□ _____

□□□□□

□□ _____

□

(6)

△△△△△

△ _____

△△△△△

△△ _____

△△△

(3)

◇◇◇◇◇

◇ _____

◇◇◇◇◇

◇◇ _____

◇◇

(7)

ろっこ

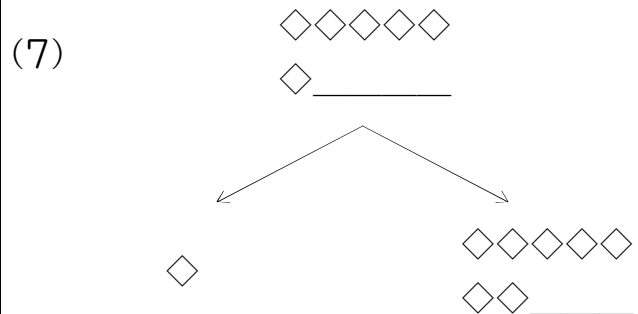
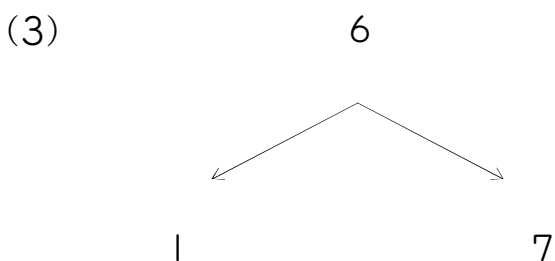
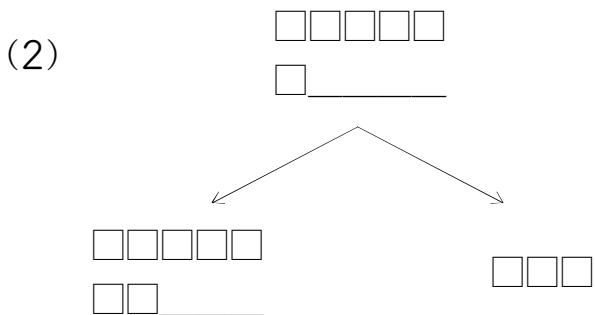
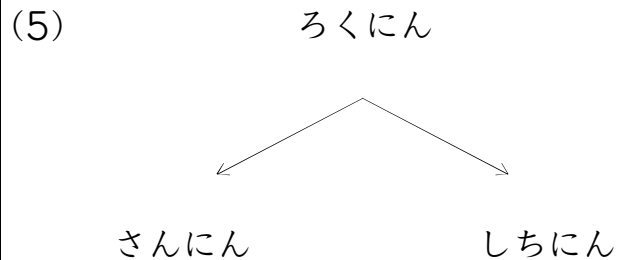
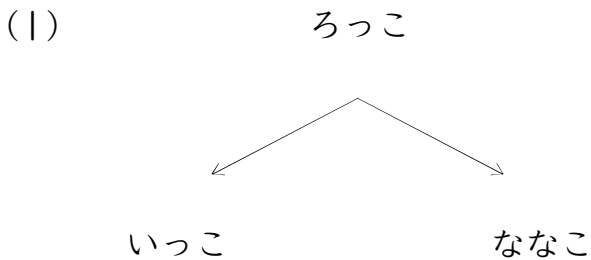
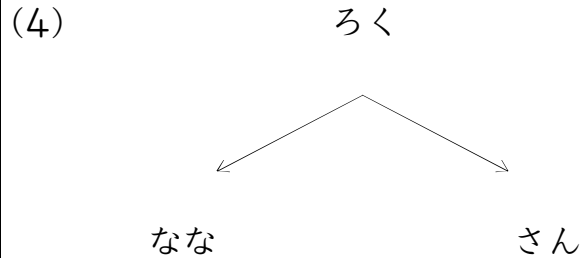
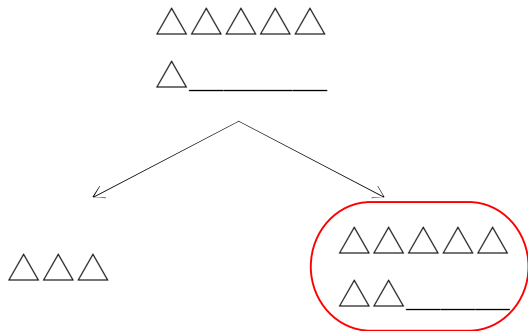
ななこ

よんこ

つぎのかずは?(6のつぎは)_01_問題

なまえ : _____

うえの かずの つぎは ひだりの かずかな? みぎの かずかな?
まる(○)をつけよう!



うえの かずの つぎは ひだりの かずかな? みぎの かずかな?
まる(O)をつけよう!

(1) $\diamond\diamond\diamond\diamond\diamond$
 \diamond _____

$\diamond\diamond\diamond\diamond\diamond$
 $\diamond\diamond$ _____

$\diamond\diamond\diamond$

(4) $\star\star\star\star\star$
 \star _____

$\star\star\star$

$\star\star\star\star\star$
 $\star\star$ _____

(1) ろっこ

よんこ ななこ

(5) $\square\square\square\square\square$
 \square _____

$\square\square\square$

$\square\square\square\square\square$
 $\square\square$ _____

(2) ろくにん

よにん しちにん

(6) 6

2 7

(3) むつつ

ひとつ ななつ

(7) $\triangle\triangle\triangle\triangle\triangle$
 \triangle _____

\triangle

$\triangle\triangle\triangle\triangle\triangle$
 $\triangle\triangle$ _____

つぎのかずは?(6のつぎは)_01_問題

なまえ : _____

うえの かずの つぎは ひだりの かずかな? みぎの かずかな?
まる(○)をつけよう!

むっつ

ななつ

ひとつ

(4)

ろく

しち

いち

(1)

□□□□□

□ _____

□□□□□

□□ _____

□□□□

(5)

6

1

7

(2)

ろっこ

にこ

ななこ

(6)

ろくにん

ななにん

よにん

(3)

☆☆☆☆☆

☆ _____

☆☆☆☆☆

☆☆ _____

☆☆

(7)

◇◇◇◇◇

◇ _____

◇

◇◇◇◇◇

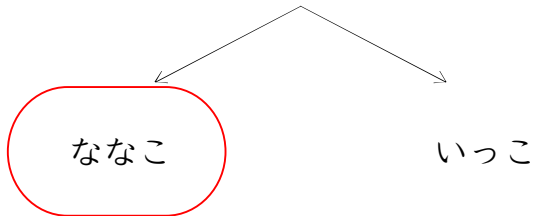
◇◇ _____

つぎのかずは?(6のつぎは)_01_問題

なまえ : _____

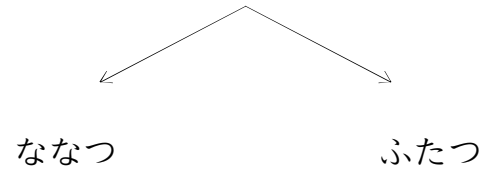
うえの かずの つぎは ひだりの かずかな? みぎの かずかな?
まる(○)をつけよう!

ろっこ

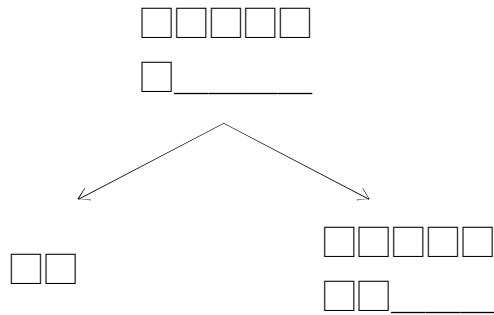


(4)

むっつ

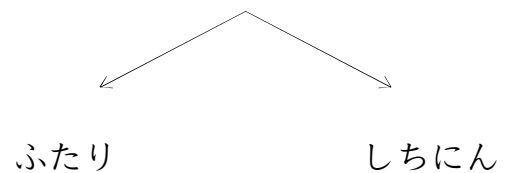


(1)

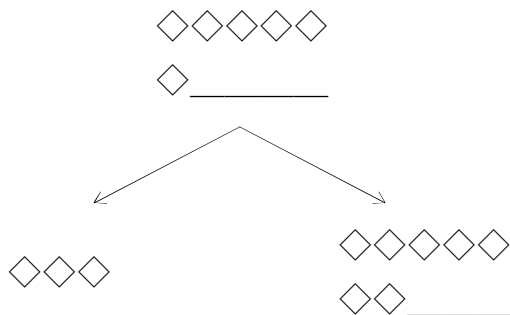


(5)

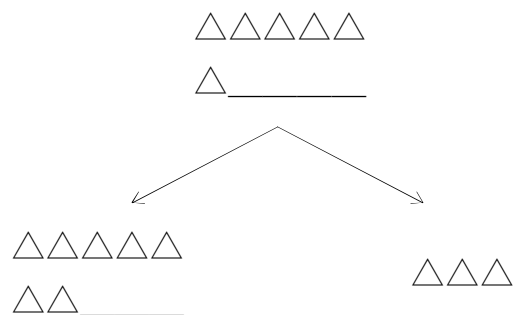
ろくにん



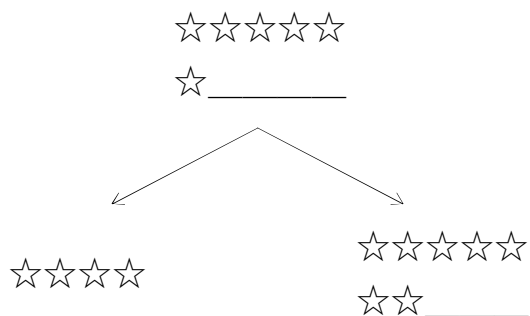
(2)



(6)

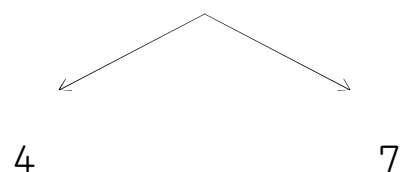


(3)



(7)

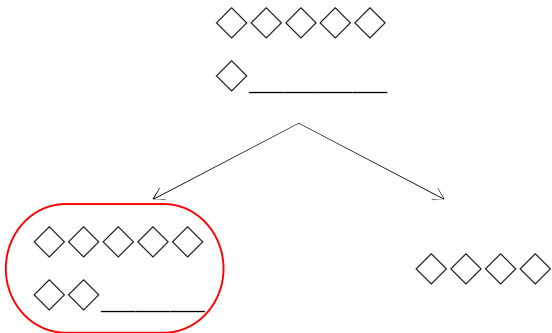
6



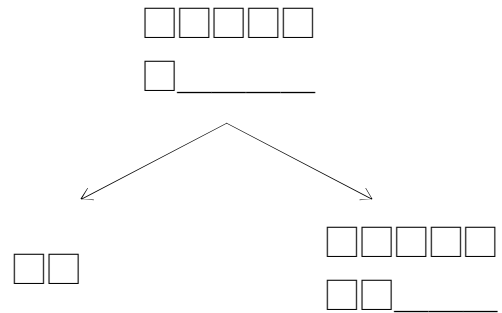
つぎのかずは？(6のつぎは)_01_問題

なまえ： _____

うえの かずの つぎは ひだりの かずかな？ みぎの かずかな？
まる(○)をつけよう！

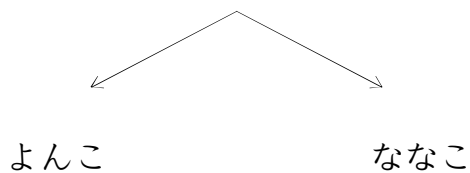


(4)



(1)

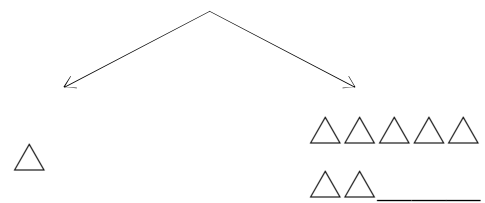
ろっこ



(5)

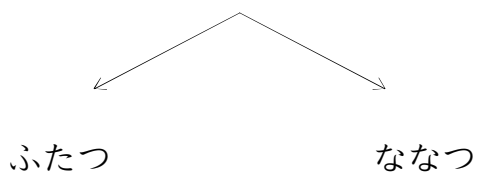
△△△△△

△ _____



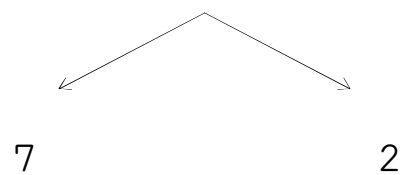
(2)

むつつ



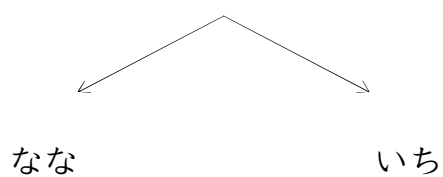
(6)

6



(3)

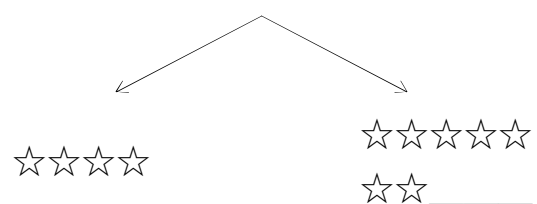
ろく



(7)

☆☆☆☆☆

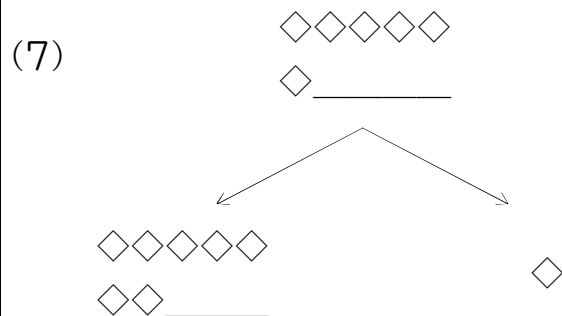
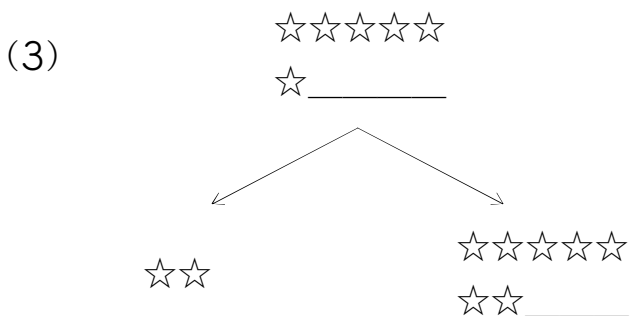
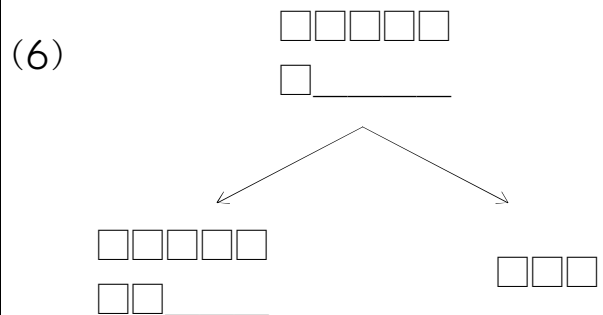
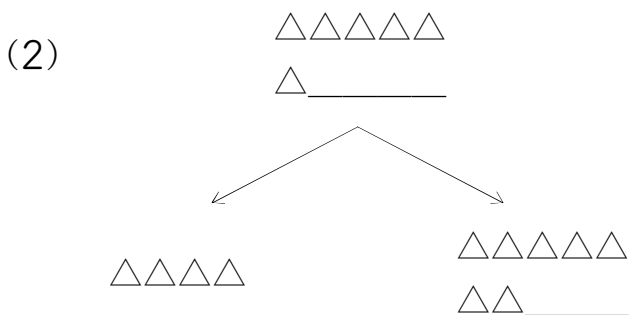
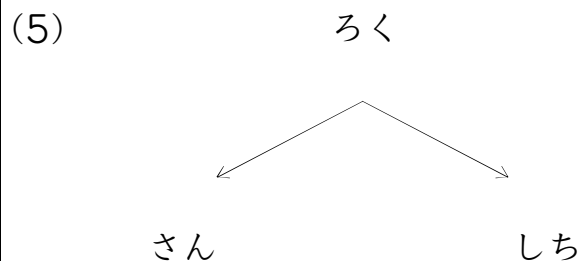
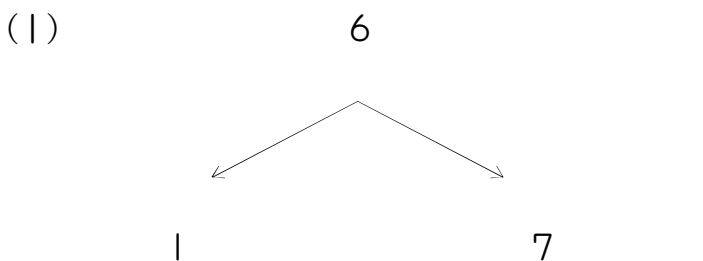
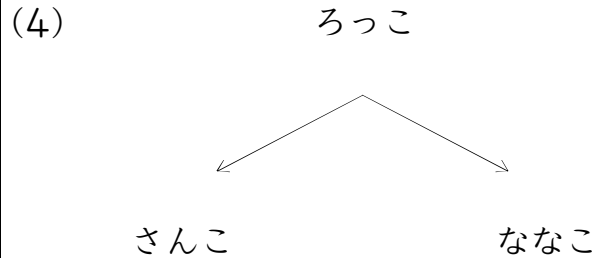
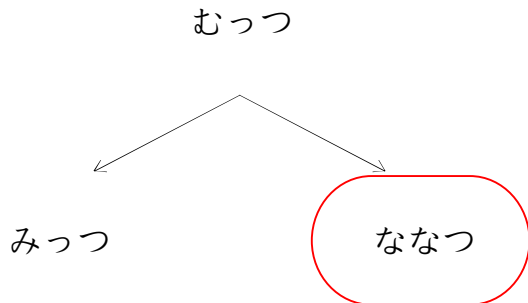
☆ _____



つぎのかずは?(6のつぎは)_01_問題

なまえ : _____

うえの かずの つぎは ひだりの かずかな? みぎの かずかな?
まる(○)をつけよう!

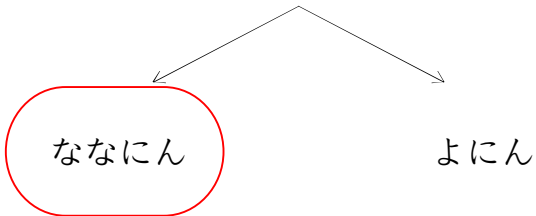


つぎのかずは?(6のつぎは)_01_問題

なまえ : _____

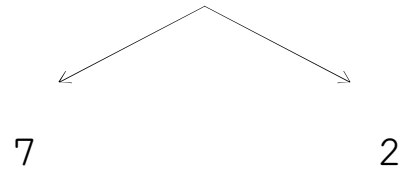
うえの かずの つぎは ひだりの かずかな? みぎの かずかな?
まる(○)をつけよう!

ろくにん

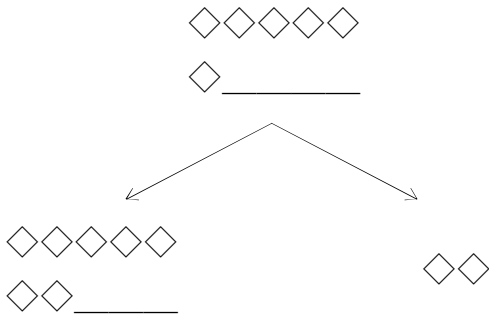


(4)

6

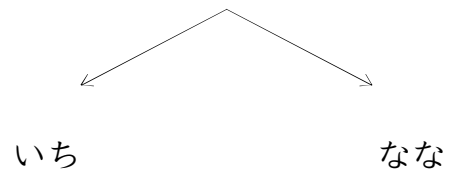


(1)



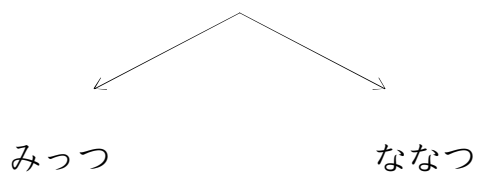
(5)

ろく

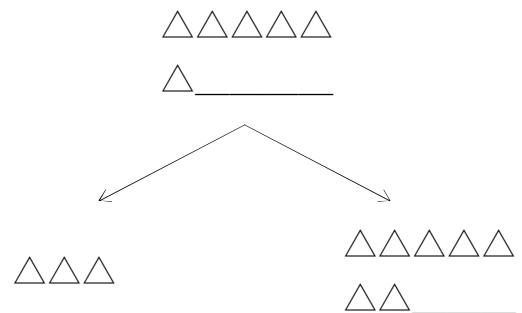


(2)

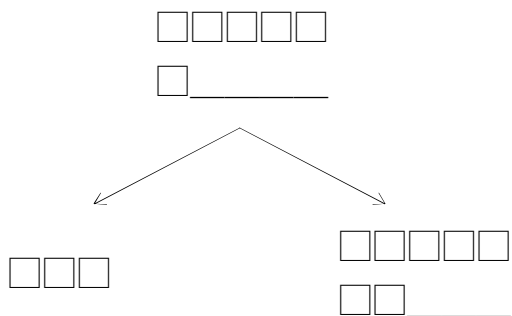
むつつ



(6)

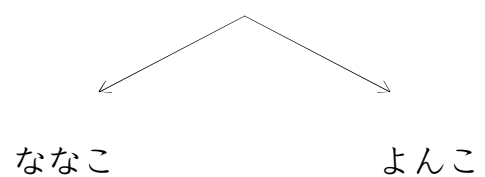


(3)



(7)

ろっこ

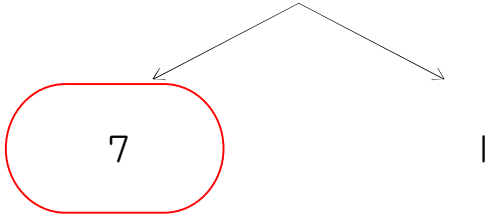


つぎのかずは?(6のつぎは)_01_問題

なまえ : _____

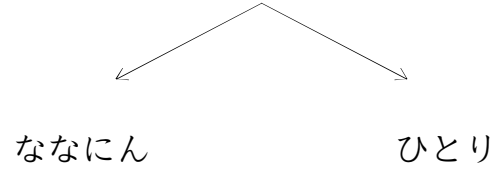
うえの かずの つぎは ひだりの かずかな? みぎの かずかな?
まる(○)をつけよう!

6

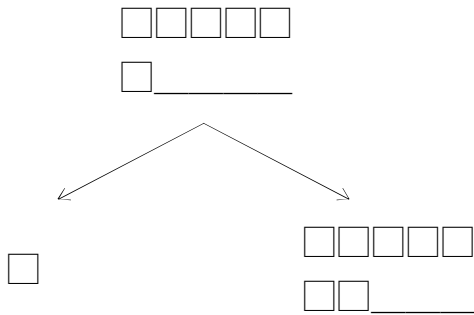


(4)

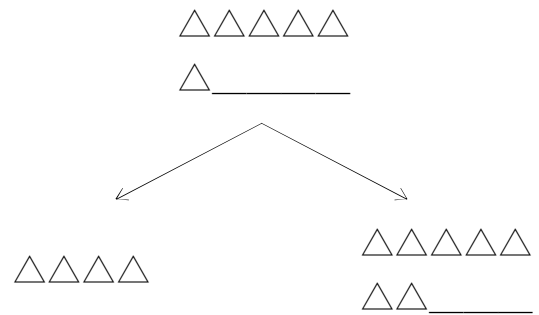
ろくにん



(1)

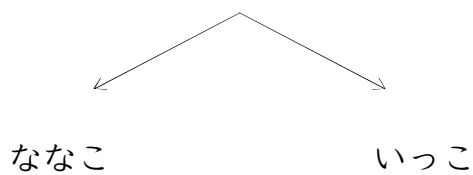


(5)

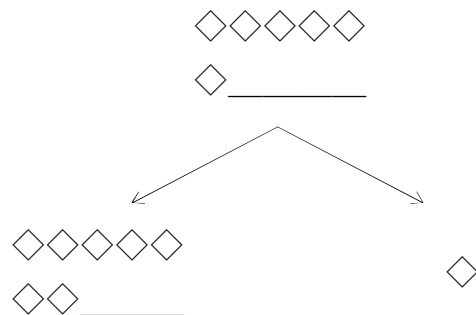


(2)

ろっこ

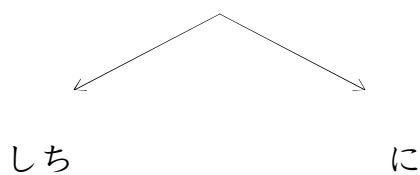


(6)

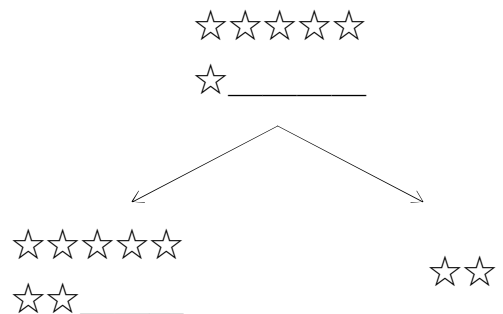


(3)

ろく



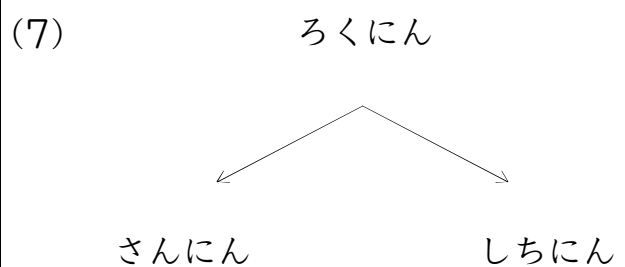
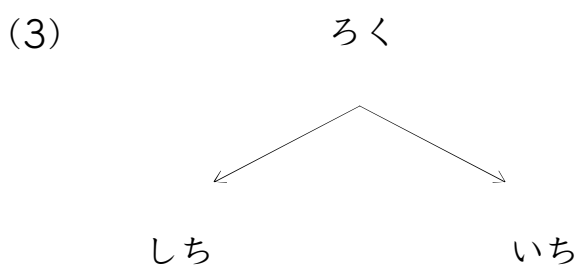
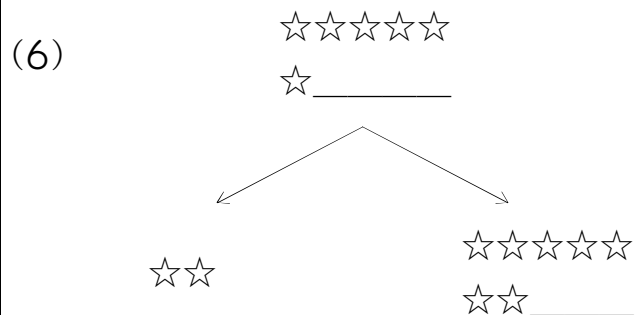
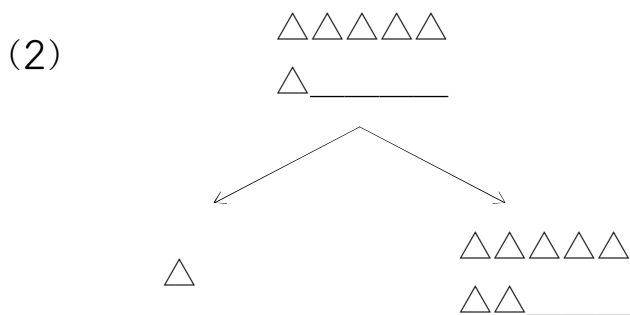
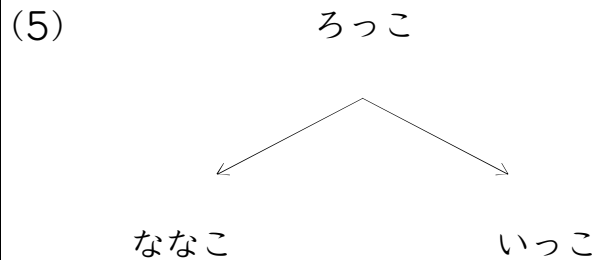
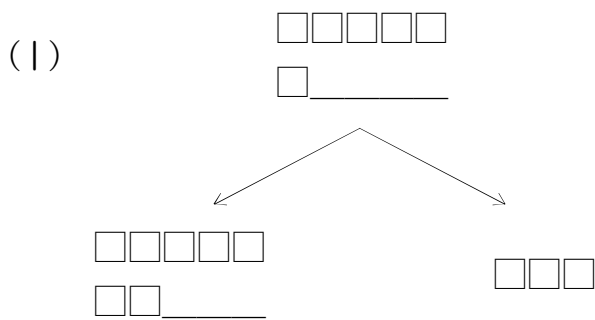
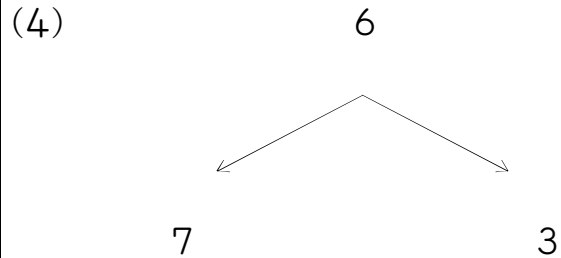
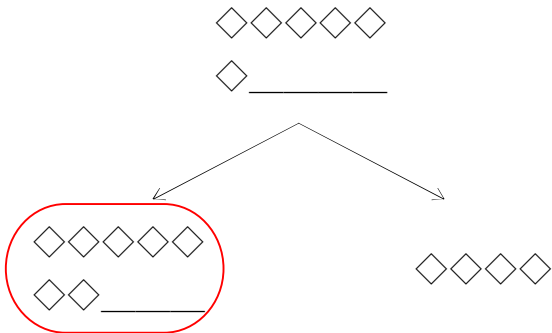
(7)



つぎのかずは?(6のつぎは)_01_問題

なまえ : _____

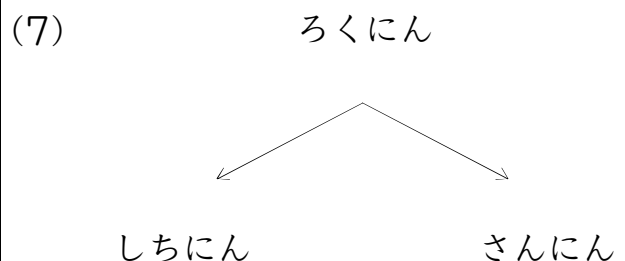
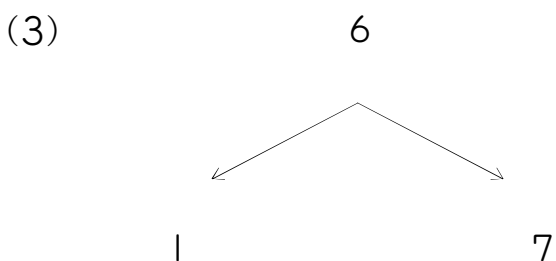
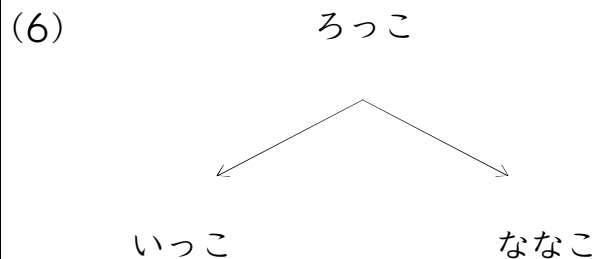
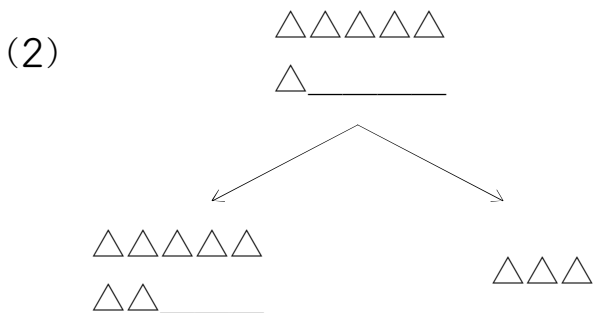
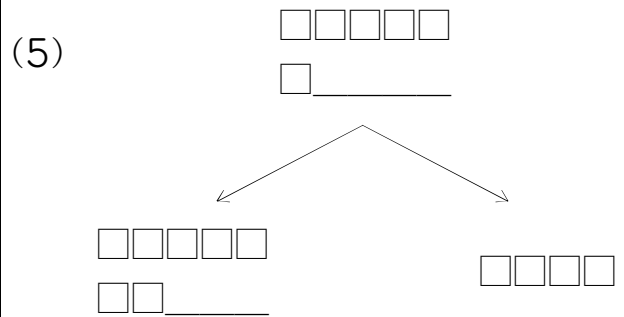
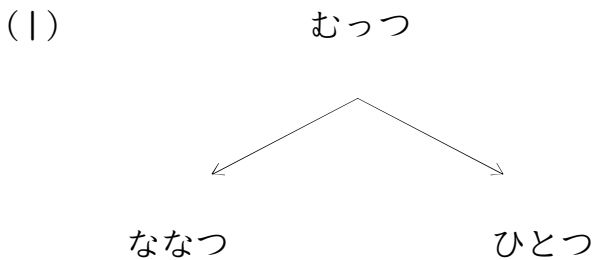
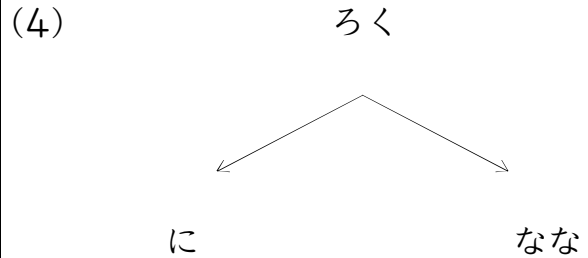
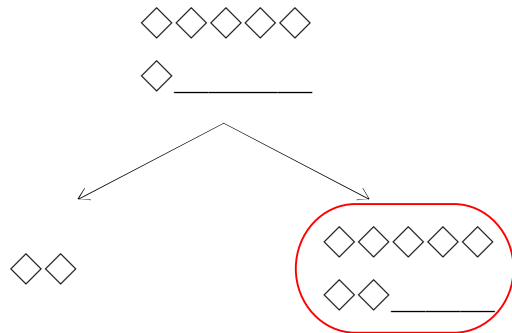
うえの かずの つぎは ひだりの かずかな? みぎの かずかな?
まる(○)をつけよう!



つぎのかずは?(6のつぎは)_01_問題

なまえ : _____

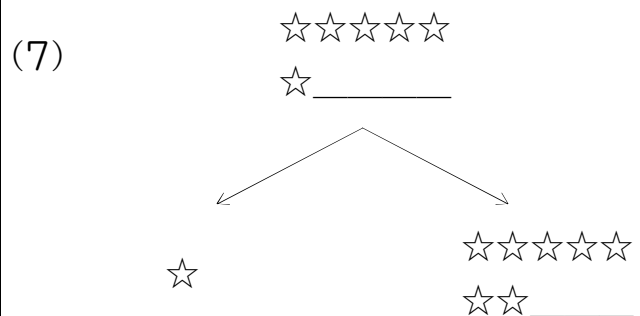
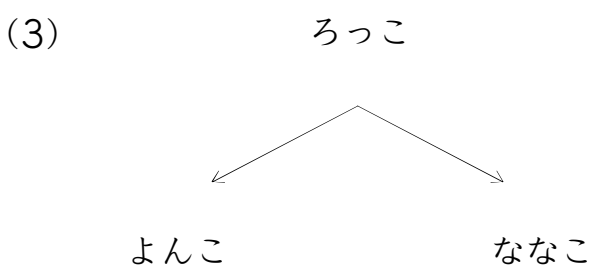
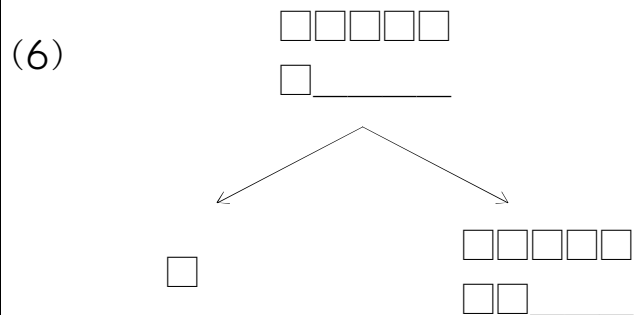
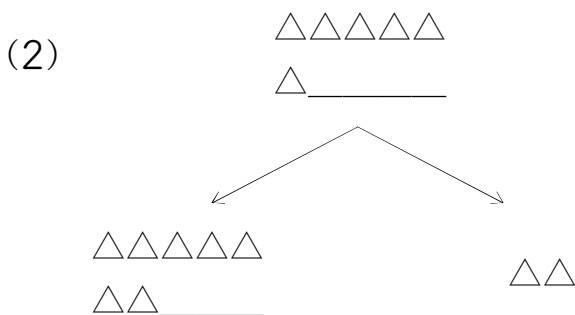
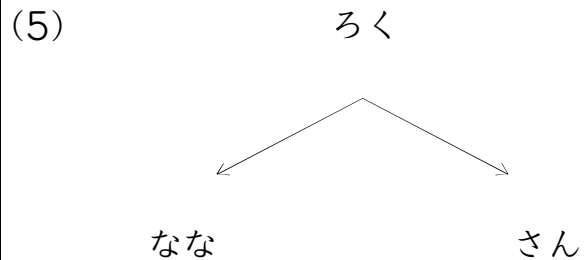
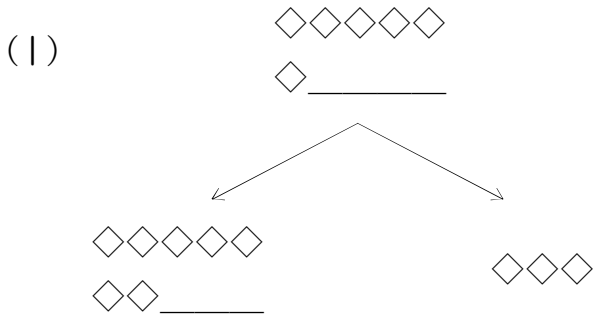
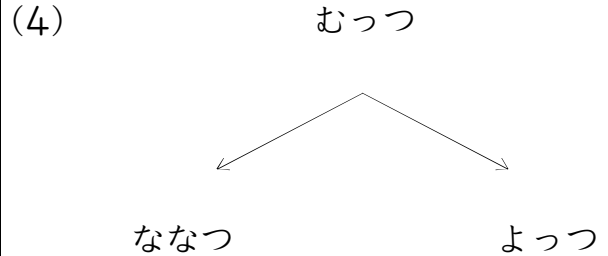
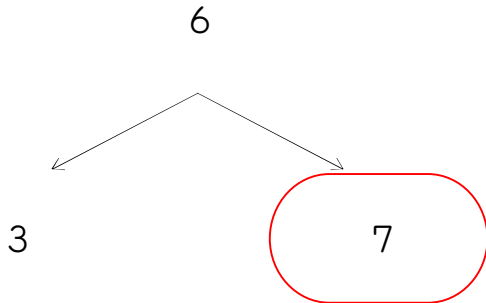
うえの かずの つぎは ひだりの かずかな? みぎの かずかな?
まる(○)をつけよう!



つぎのかずは?(6のつぎは)_01_問題

なまえ : _____

うえの かずの つぎは ひだりの かずかな? みぎの かずかな?
まる(○)をつけよう!



つぎのかずは?(6のつぎは)_01_問題

なまえ: _____

うえの かずの つぎは ひだりの かずかな? みぎの かずかな?
まる(○)をつけよう!

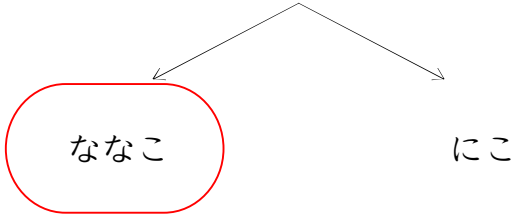
<p style="text-align: center;">△△△△△ △_____</p> <p style="text-align: center;">↙ ↘</p> <div style="display: flex; justify-content: space-around;"> <div style="border: 2px solid red; border-radius: 50%; padding: 5px; text-align: center;"> <p>△△△△△ △△_____</p> </div> <div style="text-align: center;"> <p>△△△△</p> </div> </div>	<p>(4)</p> <p style="text-align: center;">□□□□□ □_____</p> <p style="text-align: center;">↙ ↘</p> <div style="display: flex; justify-content: space-around;"> <div style="text-align: center;"> <p>□</p> </div> <div style="text-align: center;"> <p>□□□□□ □□_____</p> </div> </div>
<p>(1)</p> <p style="text-align: center;">6</p> <p style="text-align: center;">↙ ↘</p> <div style="display: flex; justify-content: space-around;"> <p>7</p> <p>3</p> </div>	<p>(5)</p> <p style="text-align: center;">ろく</p> <p style="text-align: center;">↙ ↘</p> <div style="display: flex; justify-content: space-around;"> <p>し</p> <p>しち</p> </div>
<p>(2)</p> <p style="text-align: center;">ろくにん</p> <p style="text-align: center;">↙ ↘</p> <div style="display: flex; justify-content: space-around;"> <p>さんにん</p> <p>しちにん</p> </div>	<p>(6)</p> <p style="text-align: center;">ろっこ</p> <p style="text-align: center;">↙ ↘</p> <div style="display: flex; justify-content: space-around;"> <p>ななこ</p> <p>いっこ</p> </div>
<p>(3)</p> <p style="text-align: center;">☆☆☆☆☆ ☆_____</p> <p style="text-align: center;">↙ ↘</p> <div style="display: flex; justify-content: space-around;"> <div style="text-align: center;"> <p>☆☆☆☆☆ ☆☆_____</p> </div> <div style="text-align: center;"> <p>☆☆☆☆</p> </div> </div>	<p>(7)</p> <p style="text-align: center;">むっつ</p> <p style="text-align: center;">↙ ↘</p> <div style="display: flex; justify-content: space-around;"> <p>ななつ</p> <p>よっつ</p> </div>

つぎのかずは?(6のつぎは)_01_問題

なまえ : _____

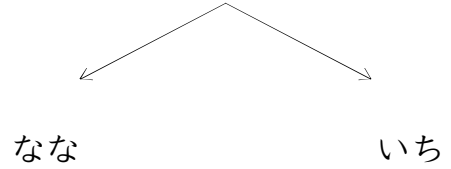
うえの かずの つぎは ひだりの かずかな? みぎの かずかな?
まる(○)をつけよう!

ろっこ

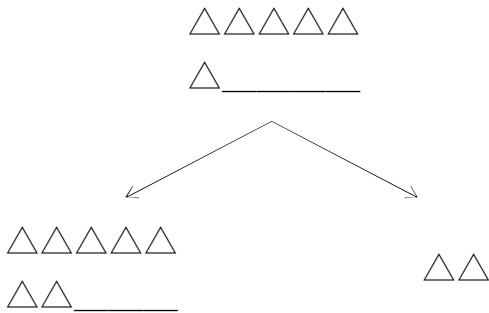


(4)

ろく

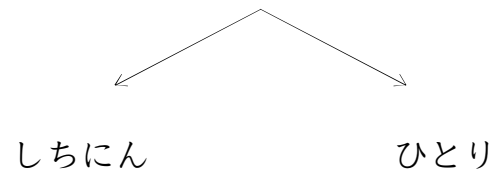


(1)

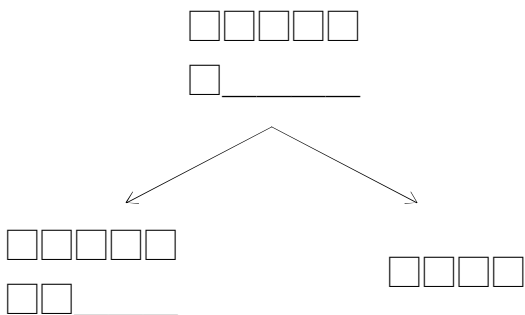


(5)

ろくにん

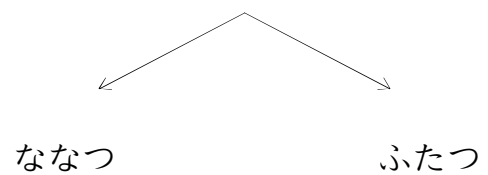


(2)

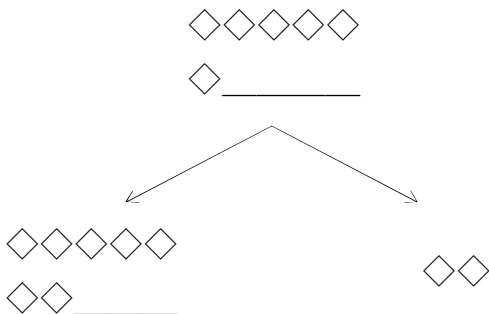


(6)

むつつ

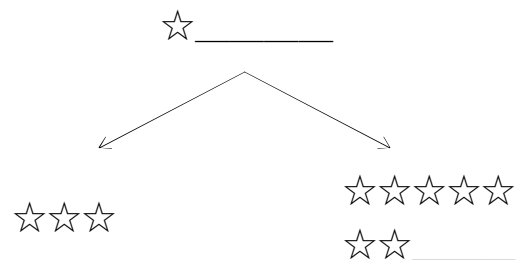


(3)



(7)

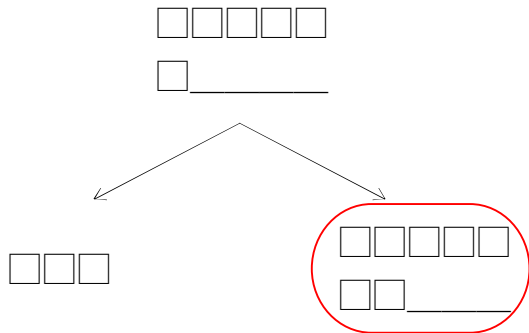
☆☆☆☆☆



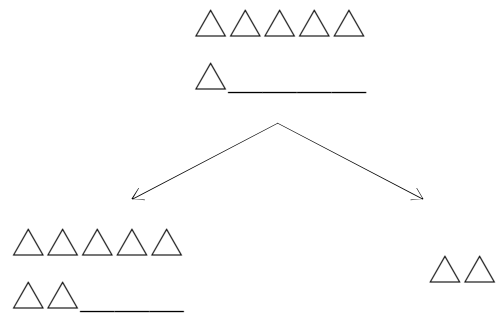
つぎのかずは?(6のつぎは)_01_問題

なまえ : _____

うえの かずの つぎは ひだりの かずかな? みぎの かずかな?
まる(○)をつけよう!

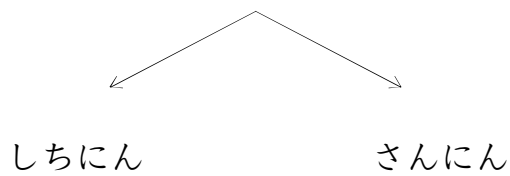


(4)



(1)

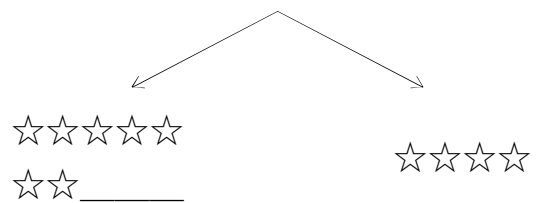
ろくにん



(5)

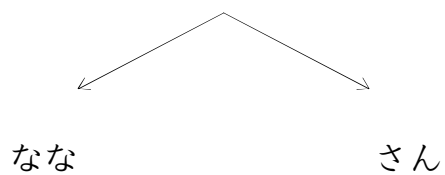
☆☆☆☆☆

☆ _____



(2)

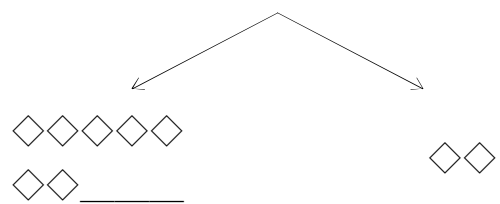
ろく



(6)

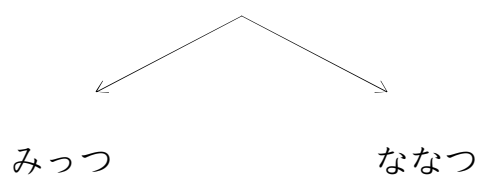
◇◇◇◇◇

◇ _____



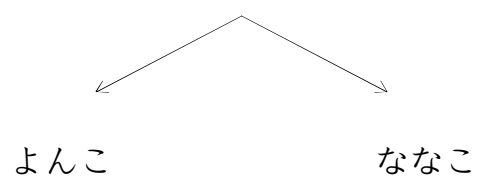
(3)

むっつ



(7)

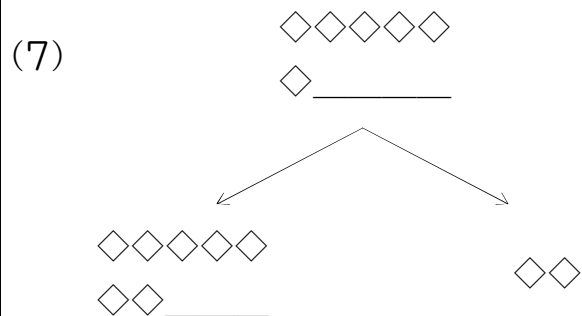
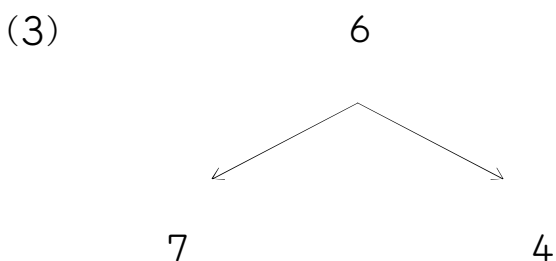
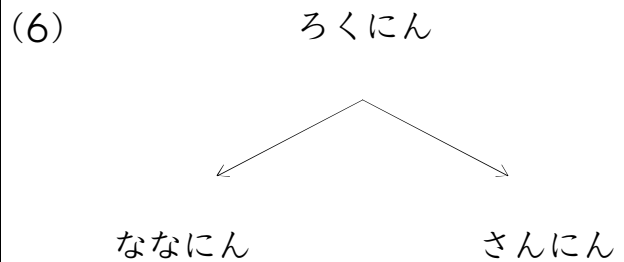
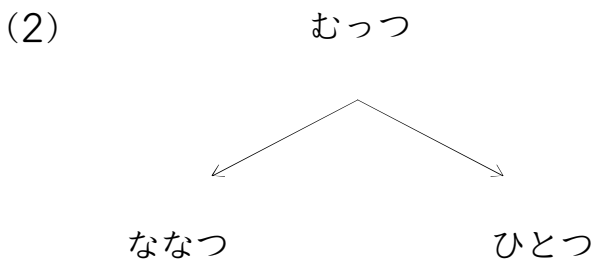
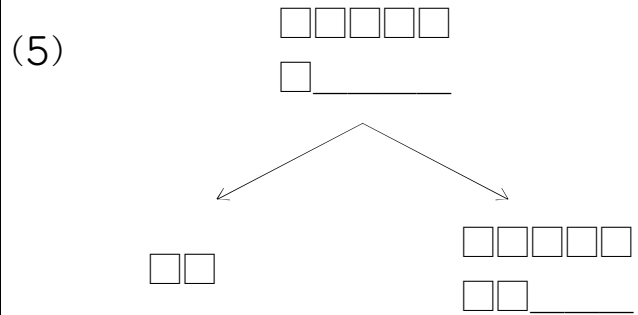
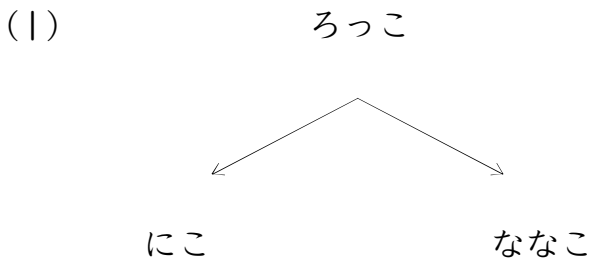
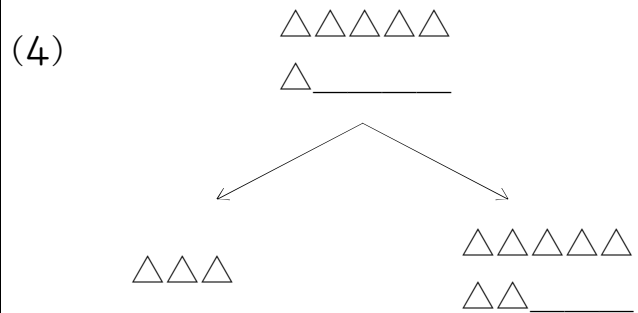
ろっこ



つぎのかずは?(6のつぎは)_01_問題

なまえ: _____

うえの かずの つぎは ひだりの かずかな? みぎの かずかな?
まる(○)をつけよう!



つぎのかずは?(6のつぎは)_01_問題

なまえ : _____

うえの かずの つぎは ひだりの かずかな? みぎの かずかな?
まる(○)をつけよう!

むっつ

ななつ

みっつ

(4)

6

7

1

(1)

□□□□□

□ _____

□□□□□

□□ _____

□□□

(5)

△△△△△

△ _____

△△△△△

△△ _____

△△

(2)

ろっこ

ななこ

よんこ

(6)

◇◇◇◇◇

◇ _____

◇◇◇

◇◇◇◇◇◇

◇◇ _____

(3)

☆☆☆☆☆

☆ _____

☆

☆☆☆☆☆

☆☆ _____

(7)

ろくにん

しちにん

さんにん

つぎのかずは?(6のつぎは)_01_問題

なまえ : _____

うえの かずの つぎは ひだりの かずかな? みぎの かずかな?
まる(○)をつけよう!

ろっこ

ななこ

にこ

(4)

△△△△△

△ _____

△△△

△△△△△

△△ _____

(1)

□□□□□

□ _____

□□□□□

□□ _____

□□

(5)

ろく

さん

しち

(2)

むつつ

ひとつ

ななつ

(6)

6

7

3

(3)

ろくにん

しちにん

ひとり

(7)

◇◇◇◇◇

◇ _____

◇◇◇◇◇

◇◇ _____

◇

なまえ : _____

うえの かずの つぎは ひだりの かずかな? みぎの かずかな?
まる(○)をつけよう!

ろく

なな よん

(4)

◇◇◇◇◇
◇ _____

◇◇◇ ◇◇◇◇◇ _____

(1) 6

7 2

(5) ろっこ

ななこ さんこ

(2) むっつ

よっつ ななつ

(6)

□□□□□
□ _____

□□ □□□□□ _____

(3) ろくにん

しちにん さんにん

(7)

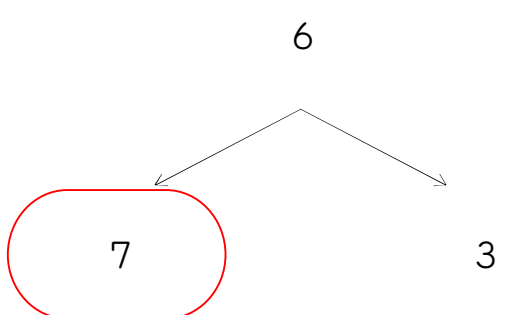
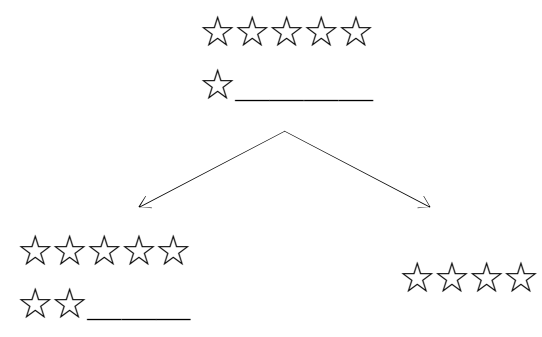
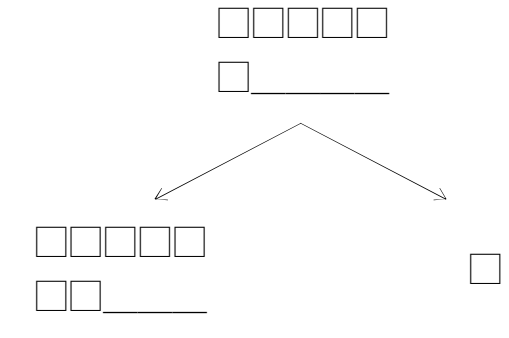
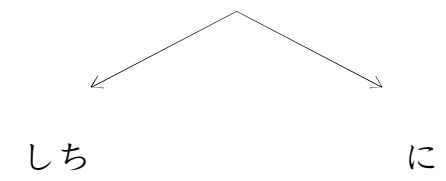
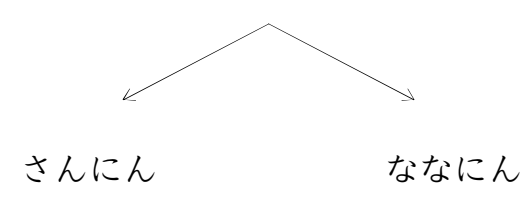
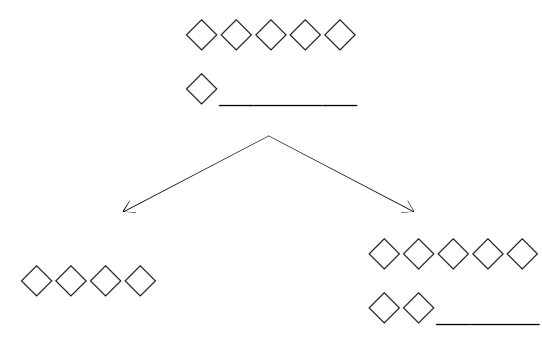
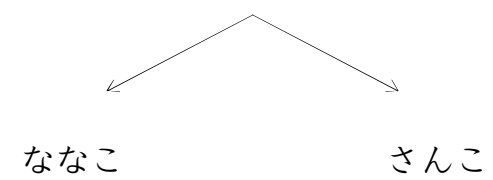
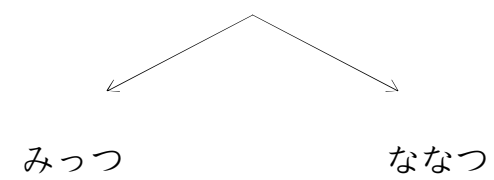
△△△△△
△ _____

△△△△△ △
△△ _____

つぎのかずは?(6のつぎは)_01_問題

なまえ : _____

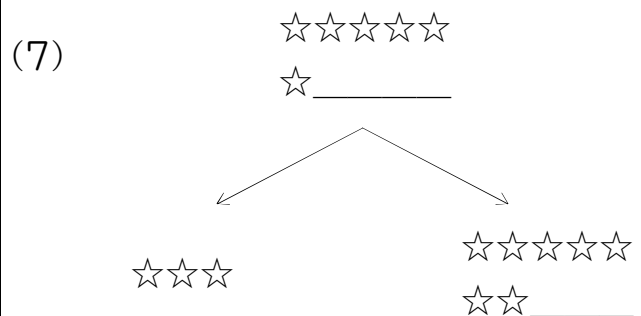
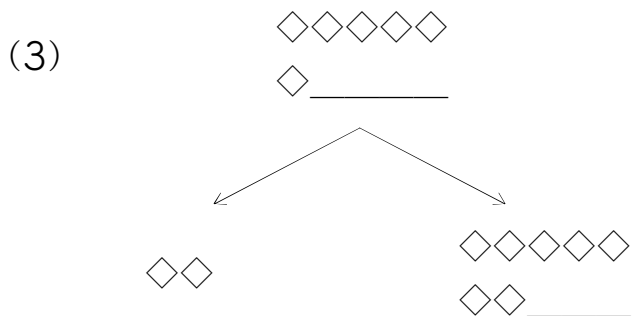
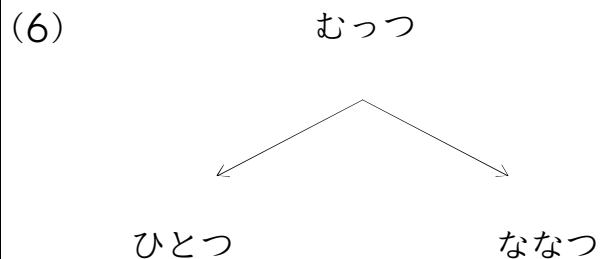
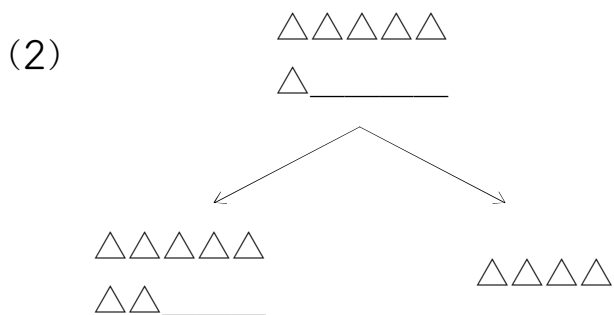
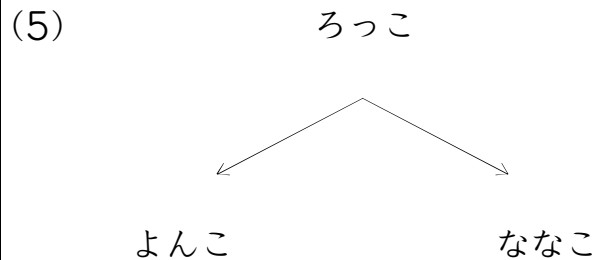
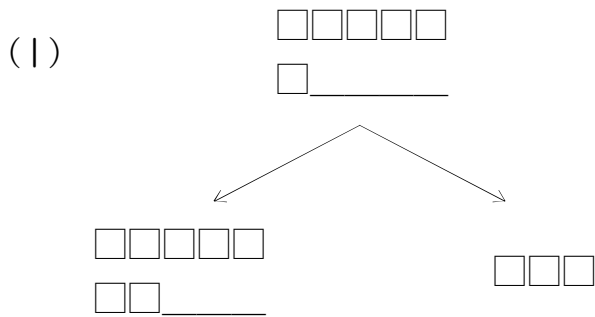
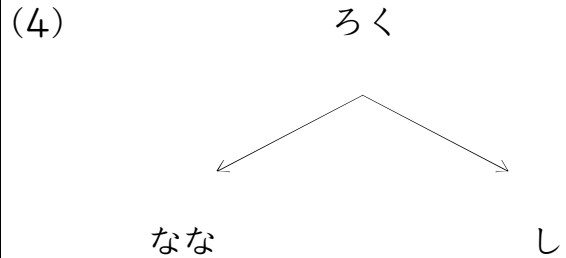
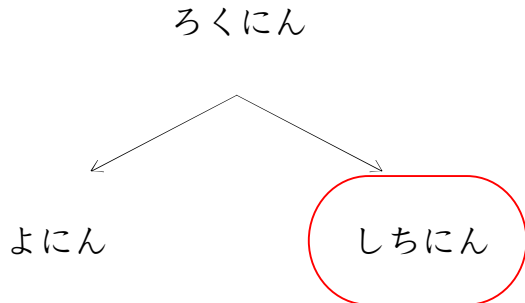
うえの かずの つぎは ひだりの かずかな? みぎの かずかな?
まる(○)をつけよう!

<p>(6)</p> 	<p>(4)</p> 
<p>(1)</p> 	<p>(5)</p> <p>ろく</p> 
<p>(2)</p> <p>ろくにん</p> 	<p>(6)</p> 
<p>(3)</p> <p>ろっこ</p> 	<p>(7)</p> <p>むつつ</p> 

つぎのかずは?(6のつぎは)_01_問題

なまえ: _____

うえの かずの つぎは ひだりの かずかな? みぎの かずかな?
まる(○)をつけよう!

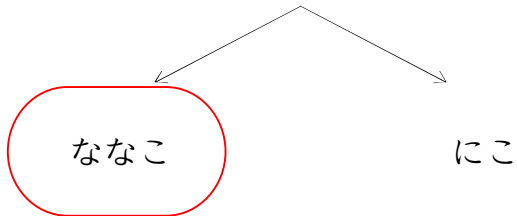


つぎのかずは?(6のつぎは)_01_問題

なまえ : _____

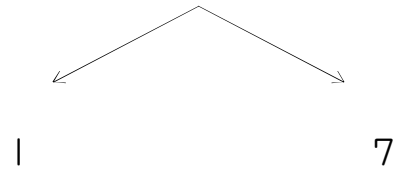
うえの かずの つぎは ひだりの かずかな? みぎの かずかな?
まる(○)をつけよう!

ろっこ

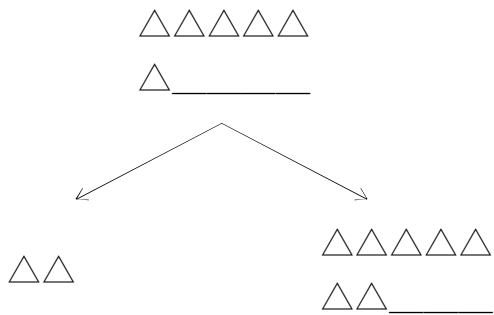


(4)

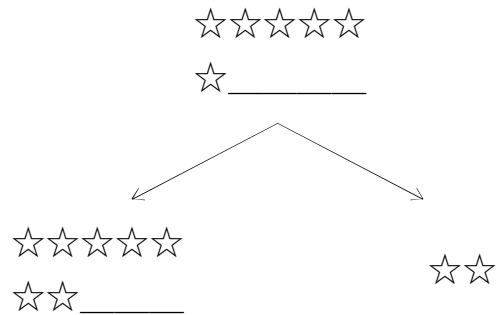
6



(1)

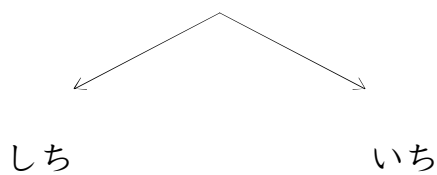


(5)

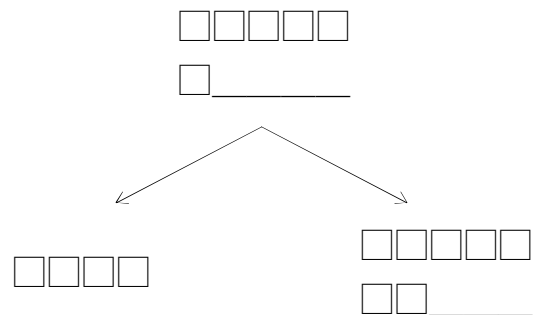


(2)

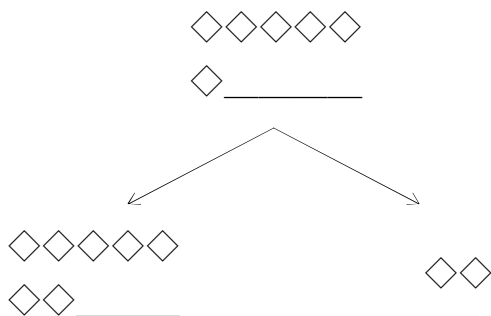
ろく



(6)

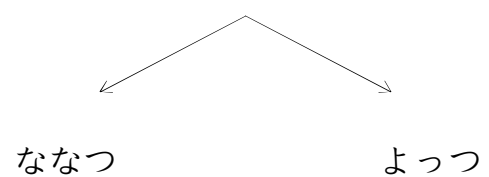


(3)



(7)

むっつ



つぎのかずは?(6のつぎは)_01_問題

なまえ: _____

うえの かずの つぎは ひだりの かずかな? みぎの かずかな?
まる(○)をつけよう!

☆☆☆☆☆

☆ _____

☆☆☆☆☆

☆☆ _____

☆☆☆

(4)

ろくにん

しちにん

ふたり

(1)

◇◇◇◇◇

◇ _____

◇

◇◇◇◇◇

◇◇ _____

(5)

ろく

に

しち

(2)

6

3

7

(6)

□□□□□

□ _____

□□□□□

□□ _____

□□

(3)

むっつ

ななつ

ふたつ

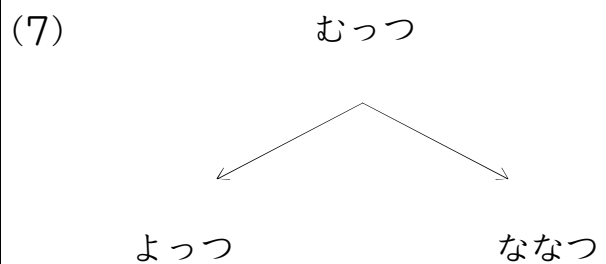
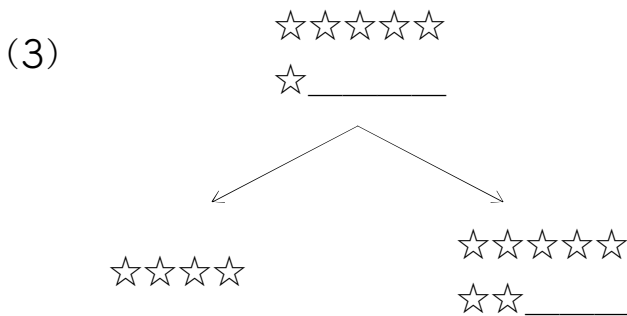
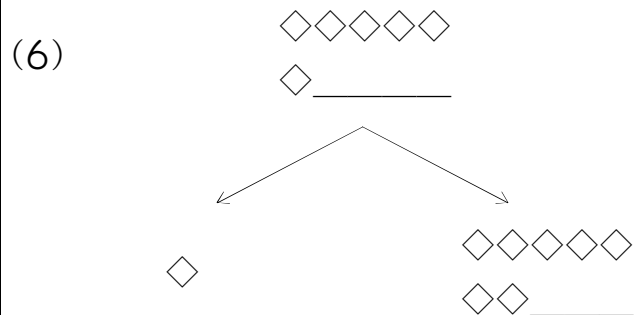
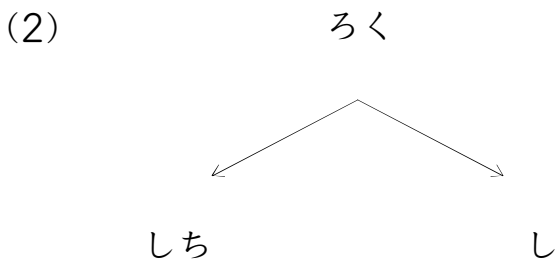
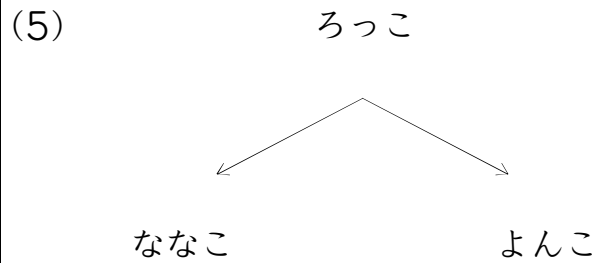
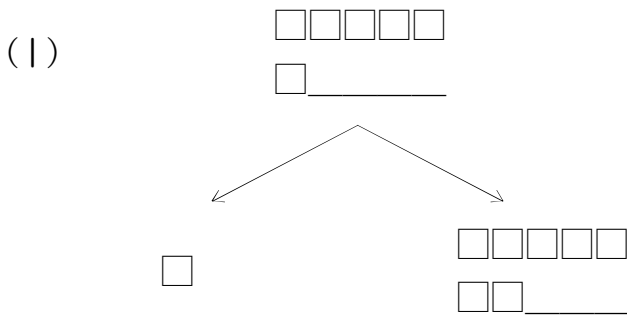
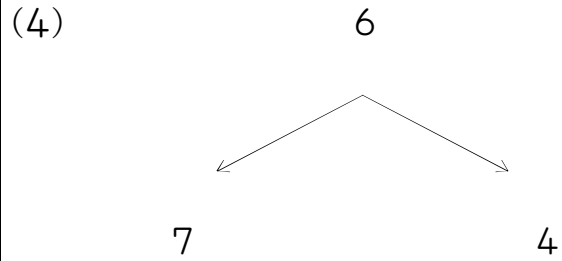
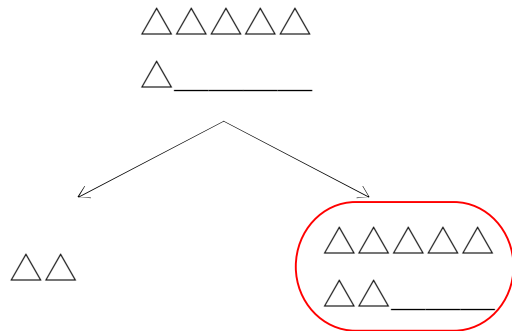
(7)

ろっこ

ななこ

よんこ

うえの かずの つぎは ひだりの かずかな? みぎの かずかな?
まる(○)をつけよう!



つぎのかずは?(6のつぎは)_01_問題

なまえ : _____

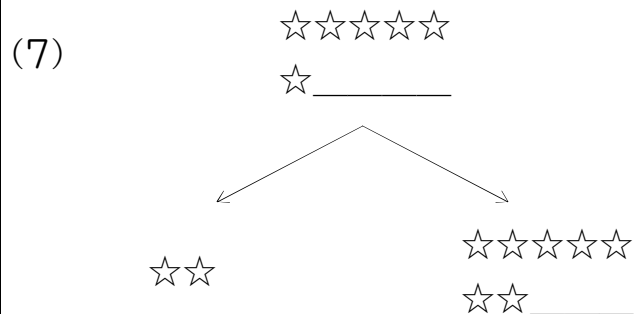
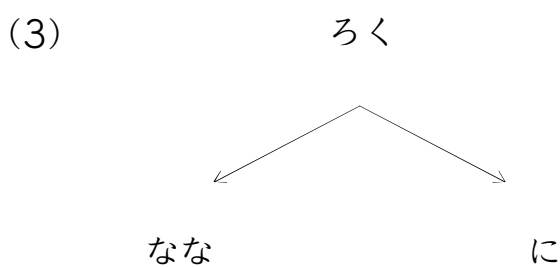
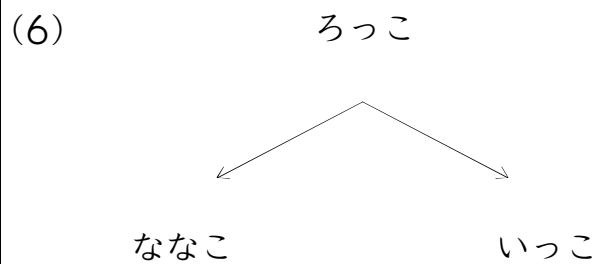
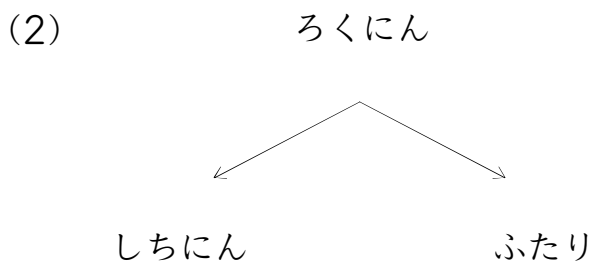
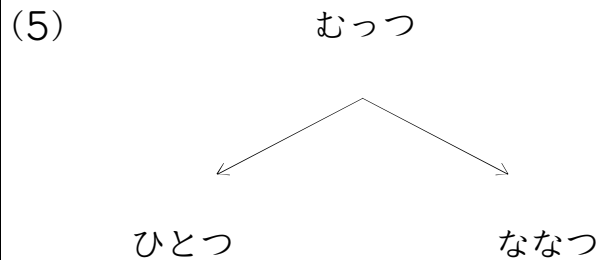
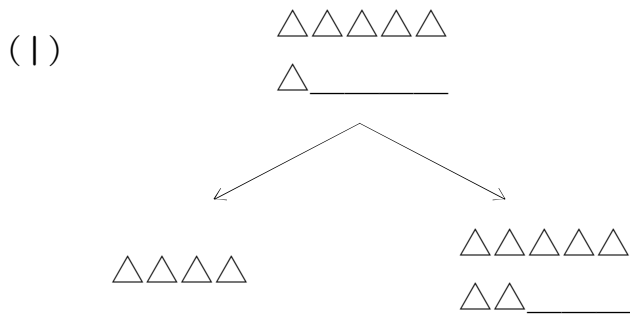
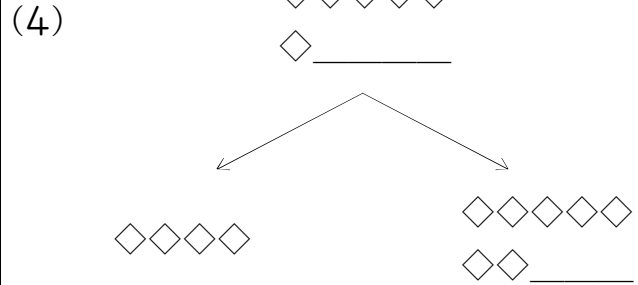
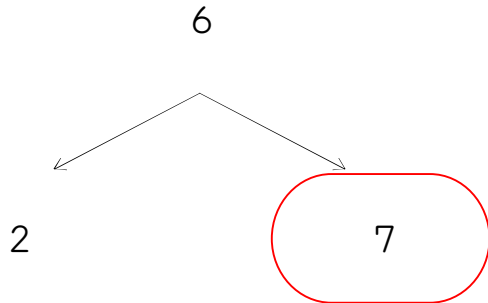
うえの かずの つぎは ひだりの かずかな? みぎの かずかな?
まる(○)をつけよう!

<p style="text-align: center;">むっつ</p>	<p>(4) ろくにん</p>
<p>(1)</p>	<p>(5)</p>
<p>(2) ろく</p>	<p>(6)</p>
<p>(3) ろっこ</p>	<p>(7)</p>

つぎのかずは?(6のつぎは)_01_問題

なまえ : _____

うえの かずの つぎは ひだりの かずかな? みぎの かずかな?
まる(○)をつけよう!

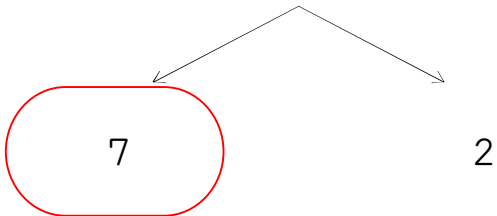


つぎのかずは?(6のつぎは)_01_問題

なまえ : _____

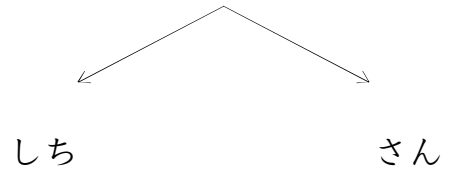
うえの かずの つぎは ひだりの かずかな? みぎの かずかな?
まる(○)をつけよう!

6

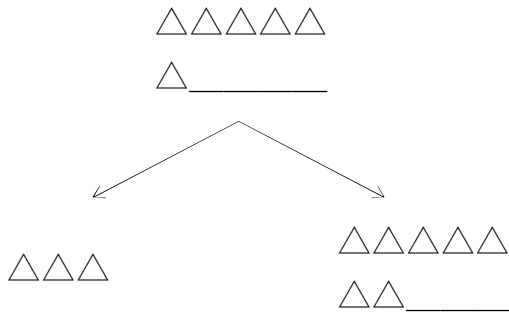


(4)

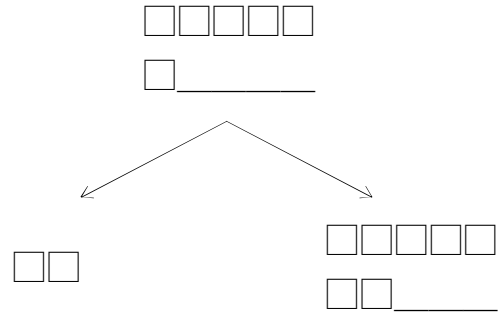
ろく



(1)

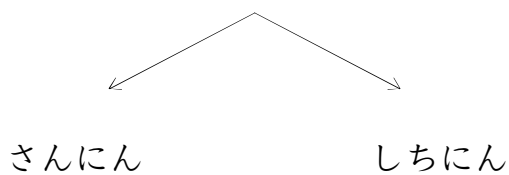


(5)



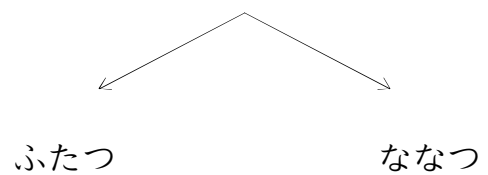
(2)

ろくにん

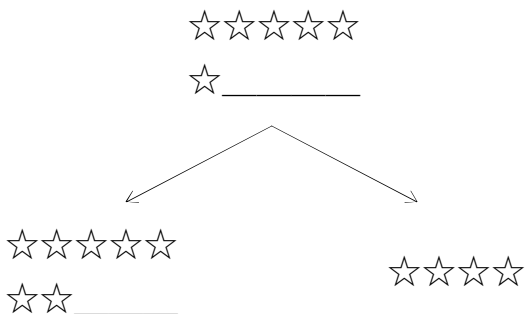


(6)

むつつ

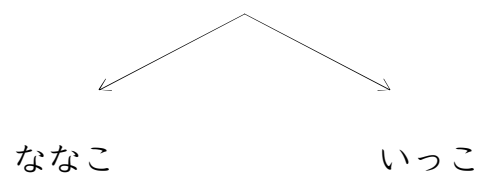


(3)



(7)

ろっこ



つぎのかずは?(6のつぎは)_01_問題

なまえ : _____

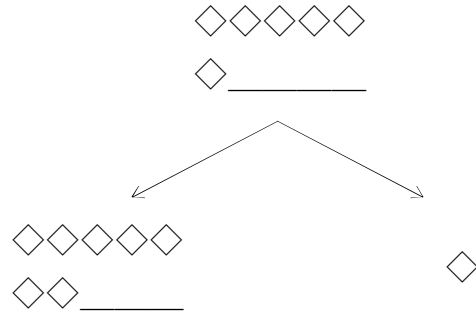
うえの かずの つぎは ひだりの かずかな? みぎの かずかな?
まる(○)をつけよう!

ろく


 なな

に

(4)



(1)

6

7

1

(5)

むっつ

ななつ

ふたつ

(2)

△△△△△

△ _____

△△△△△

△△ _____

△△△

(6)

☆☆☆☆☆

☆ _____

☆☆☆☆☆

☆☆ _____

☆☆☆☆

(3)

ろくにん

ななにん

よにん

(7)

ろっこ

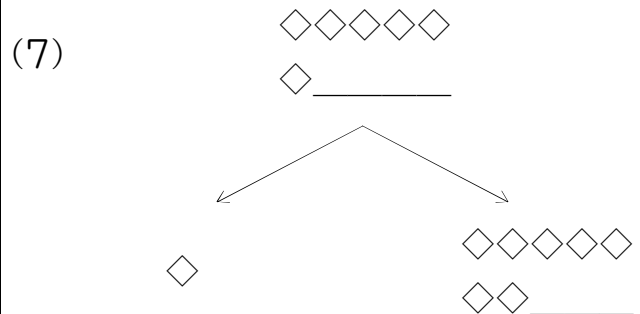
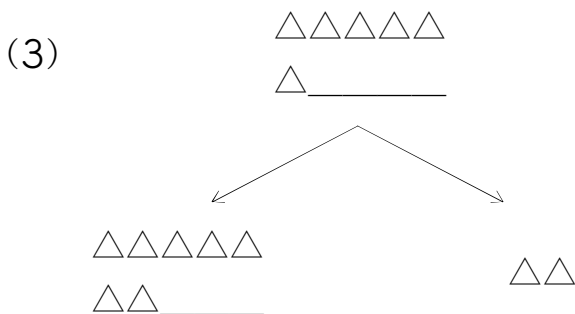
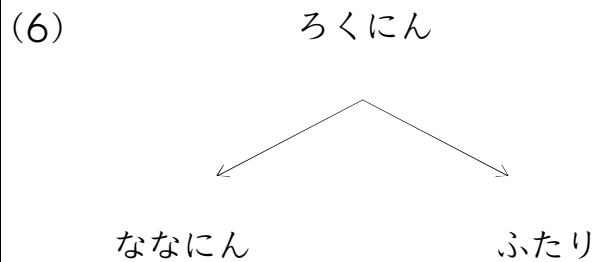
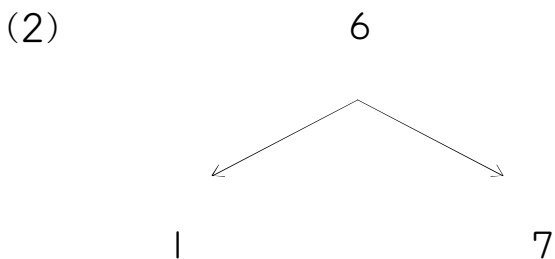
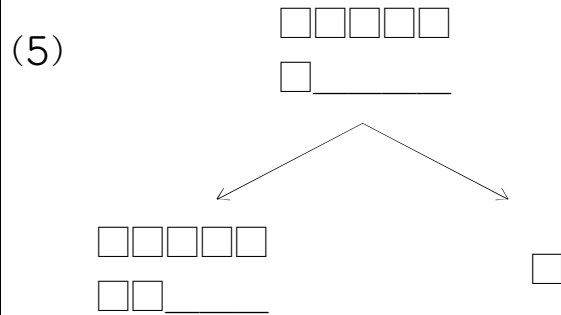
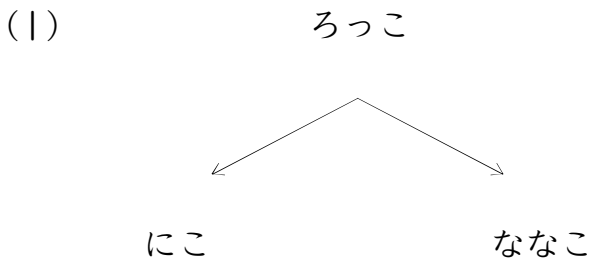
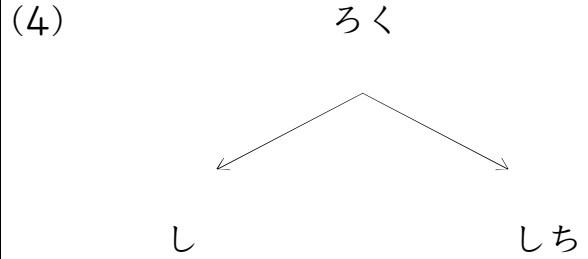
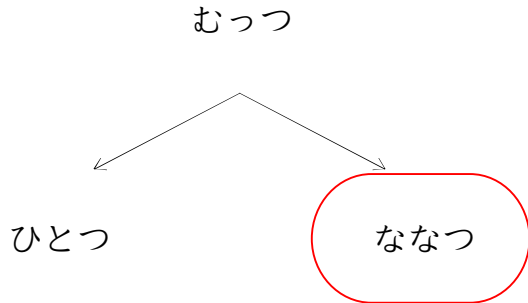
いっこ

ななこ

つぎのかずは?(6のつぎは)_01_問題

なまえ : _____

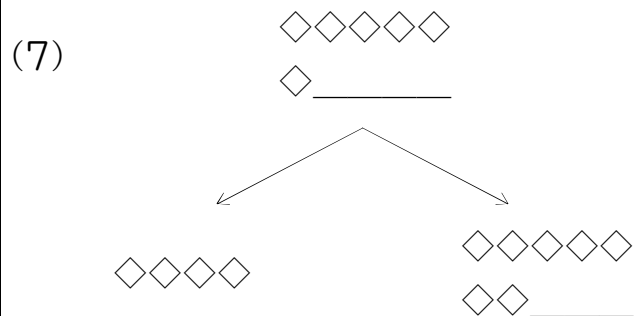
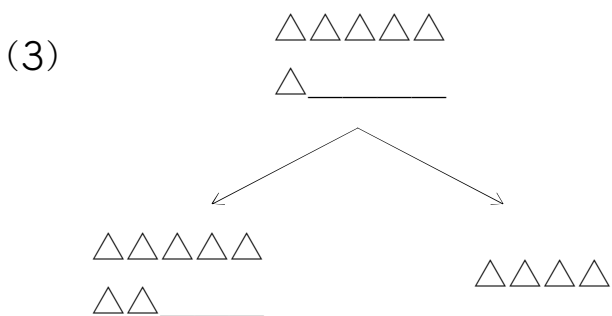
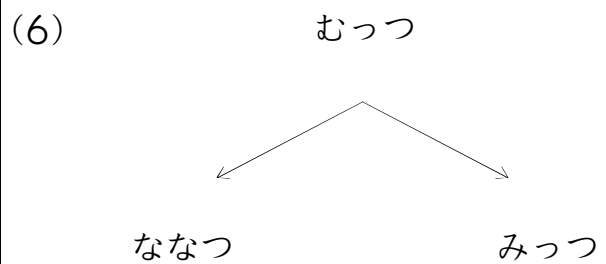
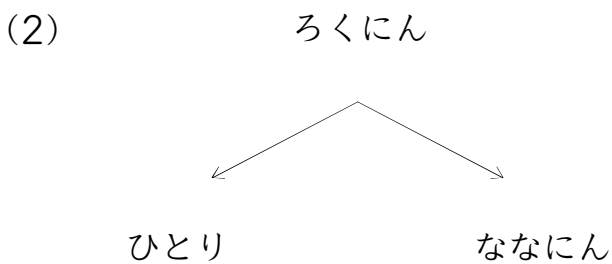
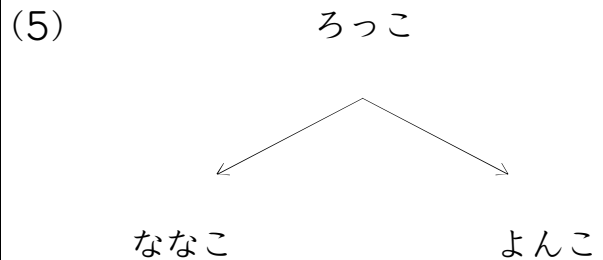
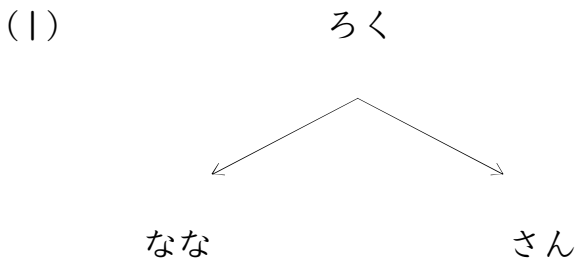
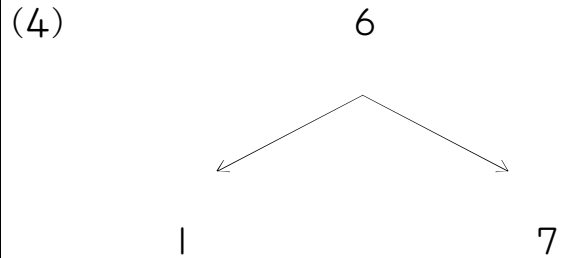
うえの かずの つぎは ひだりの かずかな? みぎの かずかな?
まる(○)をつけよう!



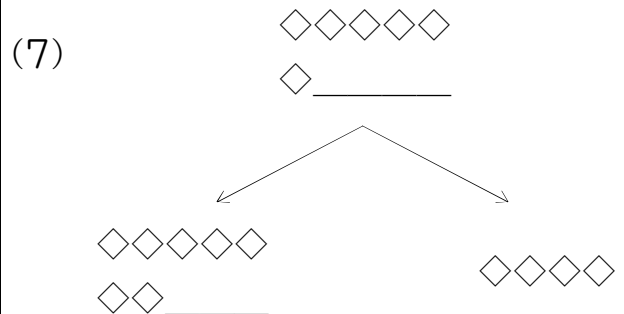
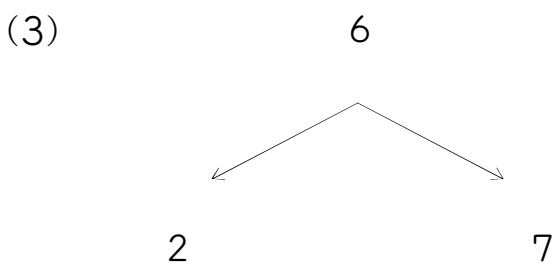
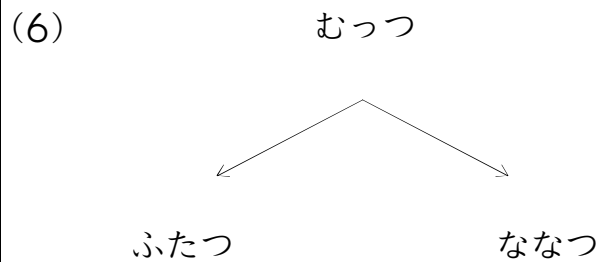
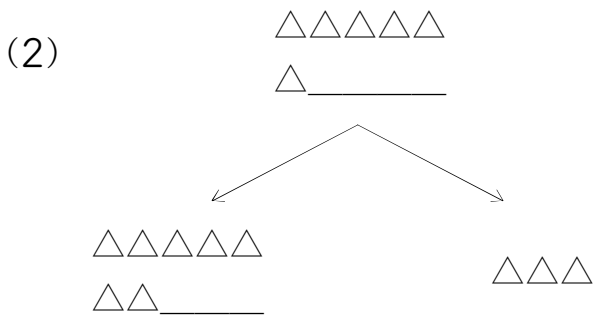
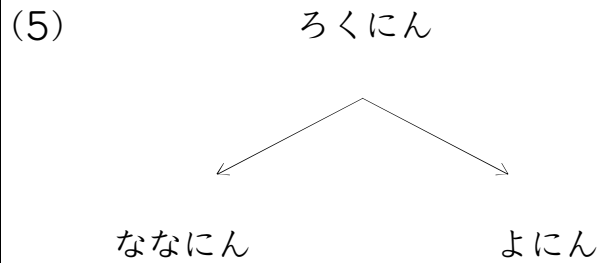
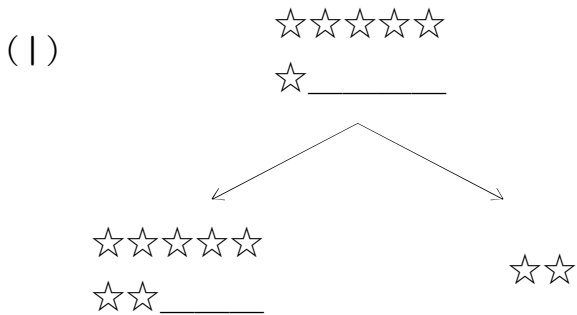
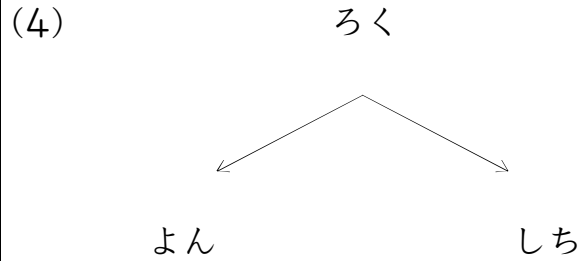
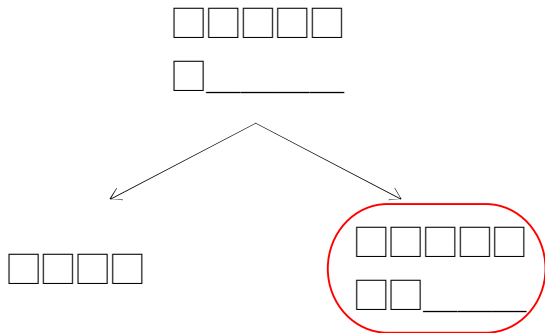
つぎのかずは?(6のつぎは)_01_問題

なまえ: _____

うえの かずの つぎは ひだりの かずかな? みぎの かずかな?
まる(○)をつけよう!



うえの かずの つぎは ひだりの かずかな? みぎの かずかな?
まる(○)をつけよう!



つぎのかずは?(6のつぎは)_01_問題

なまえ: _____

うえの かずの つぎは ひだりの かずかな? みぎの かずかな?
まる(○)をつけよう!

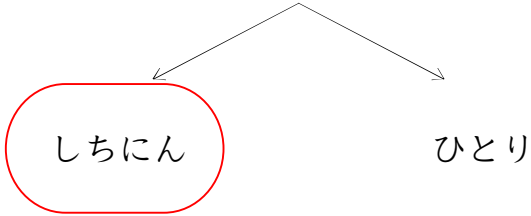
<p>6</p> <p>7 3</p>	<p>(4)</p>
<p>(1) ろく</p> <p>いち なな</p>	<p>(5) むっつ</p> <p>ひとつ ななつ</p>
<p>(2)</p>	<p>(6) ろっこ</p> <p>ななこ にこ</p>
<p>(3) ろくにん</p> <p>ひとり ななにん</p>	<p>(7)</p>

つぎのかずは?(6のつぎは)_01_問題

なまえ : _____

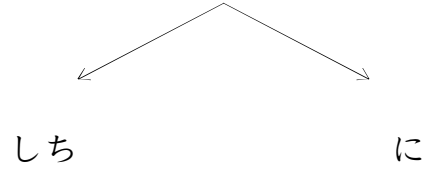
うえの かずの つぎは ひだりの かずかな? みぎの かずかな?
まる(○)をつけよう!

ろくにん

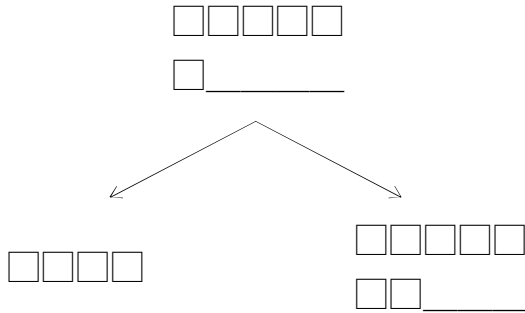


(4)

ろく

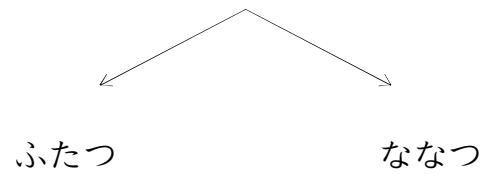


(1)



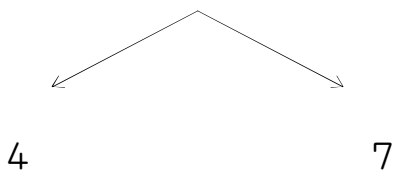
(5)

むつつ

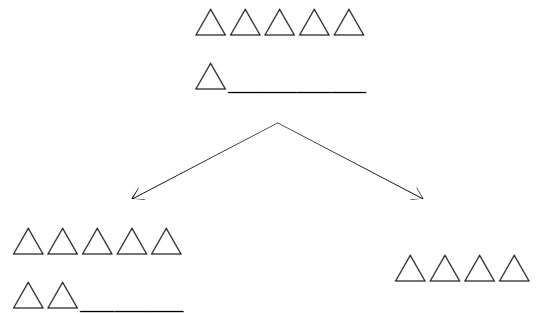


(2)

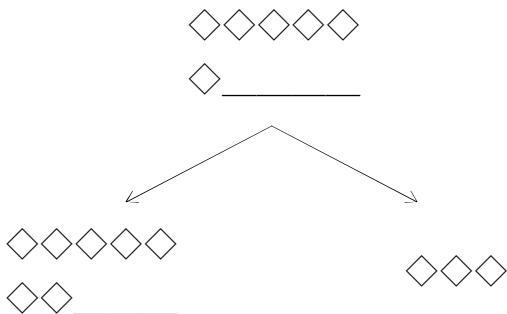
6



(6)

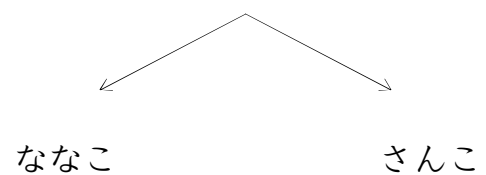


(3)



(7)

ろっこ



つぎのかずは?(6のつぎは)_01_問題

なまえ: _____

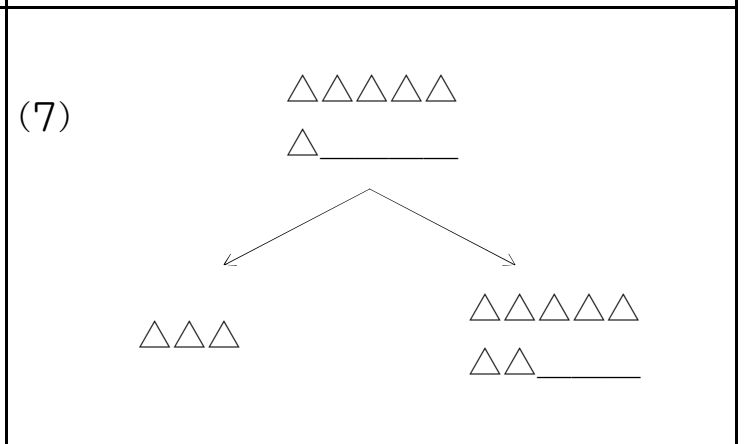
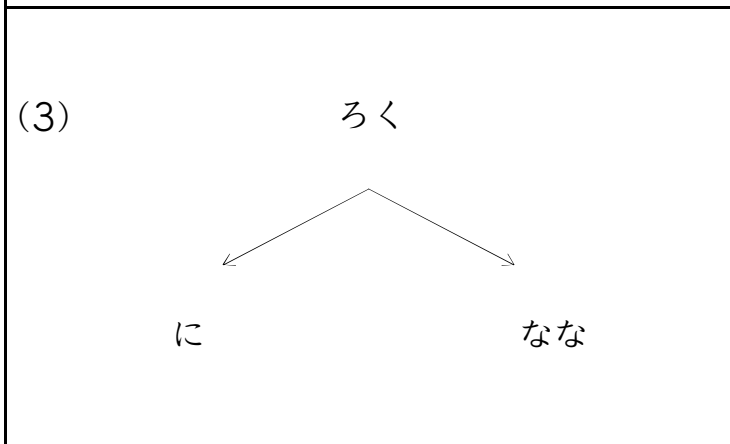
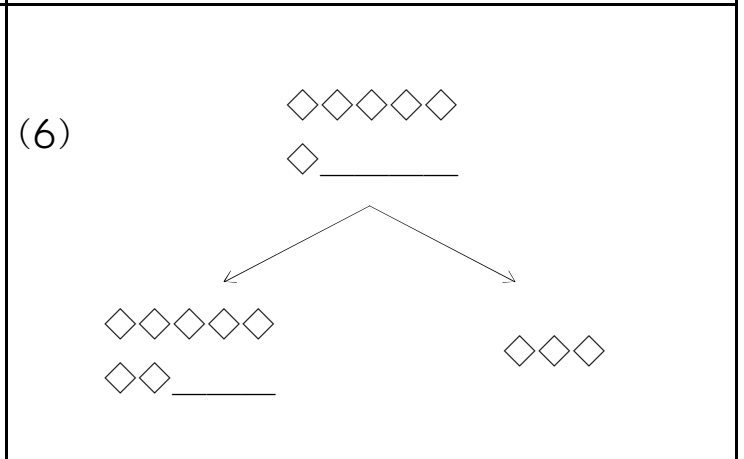
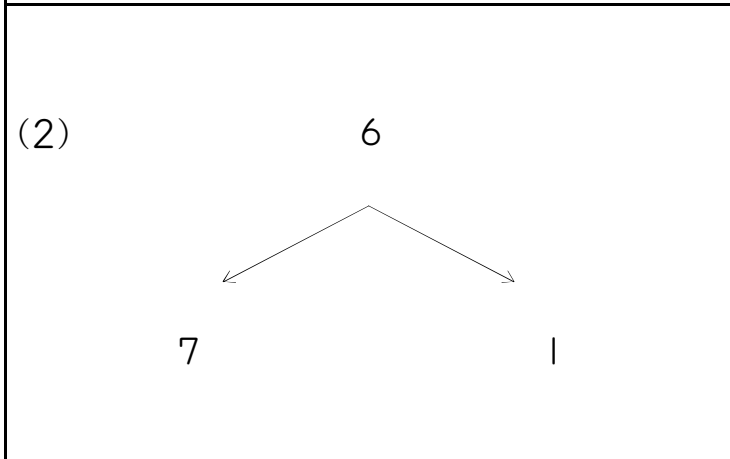
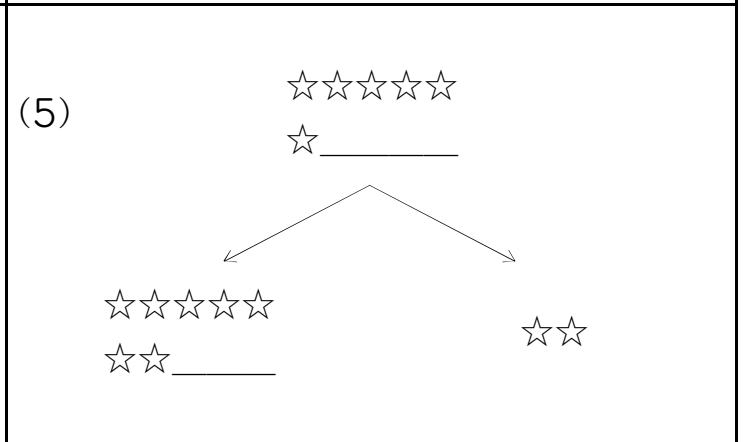
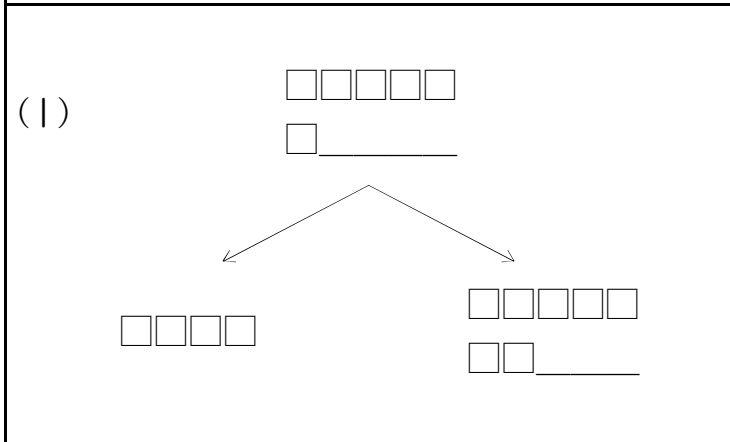
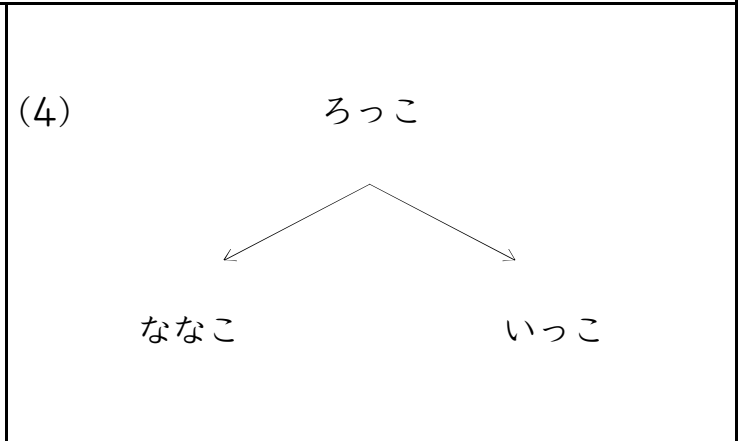
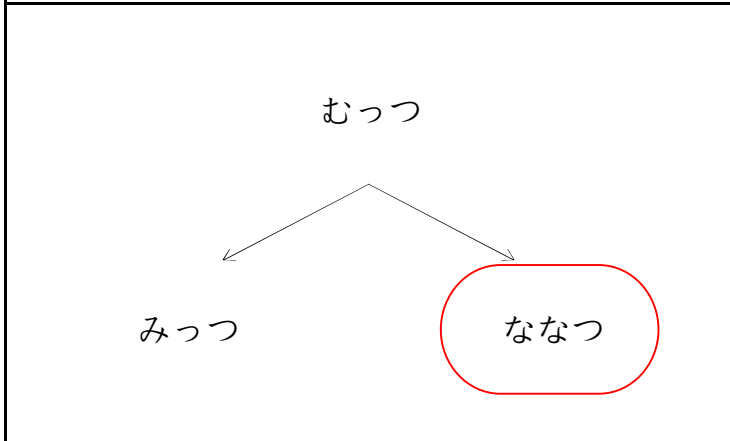
うえの かずの つぎは ひだりの かずかな? みぎの かずかな?
まる(○)をつけよう!

<p>☆☆☆☆☆ ☆ _____</p> <p>☆☆☆☆☆ ☆☆ _____</p> <p>☆☆☆</p>	<p>(4) ろく</p> <p>しち さん</p>
<p>(1) ろっこ</p> <p>よんこ ななこ</p>	<p>(5) △△△△△ △ _____</p> <p>△△△△△ △△ _____</p> <p>△△△△</p>
<p>(2) □□□□□ □ _____</p> <p>□□□ □□□□□ □□ _____</p>	<p>(6) ろくにん</p> <p>ふたり ななにん</p>
<p>(3) 6</p> <p>7 3</p>	<p>(7) ◇◇◇◇◇ ◇ _____</p> <p>◇◇ ◇◇◇◇◇ ◇◇ _____</p>

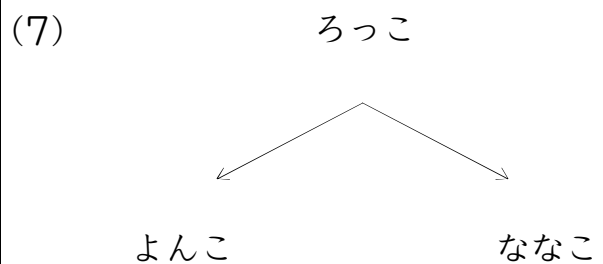
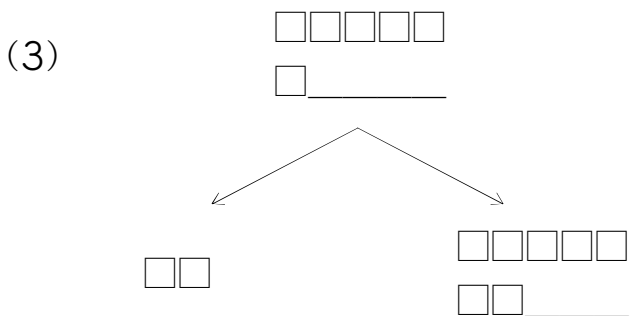
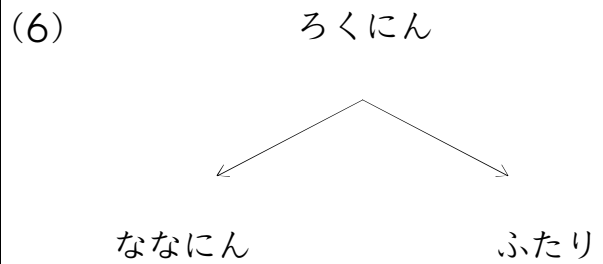
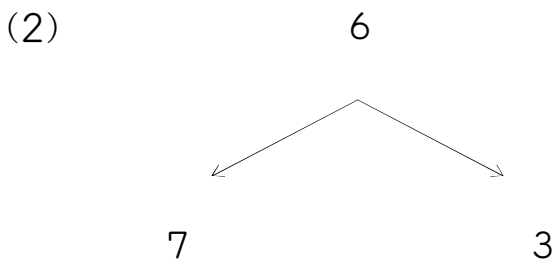
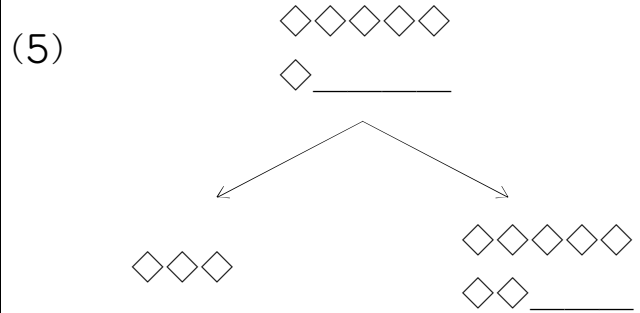
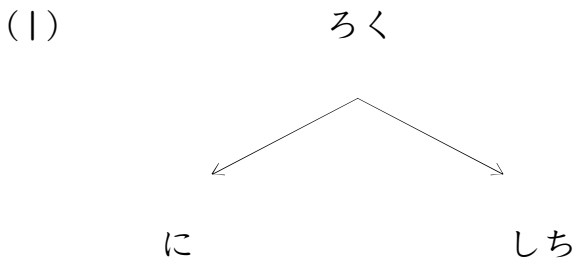
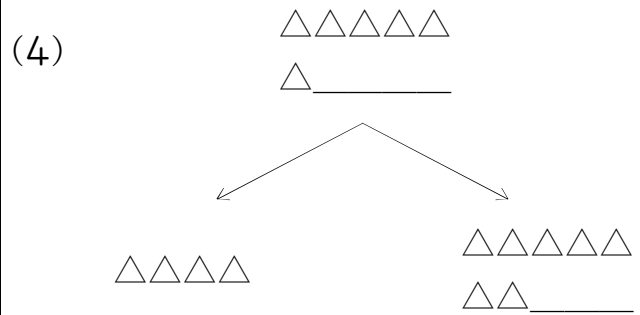
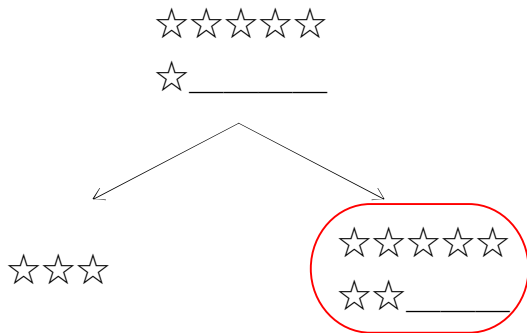
つぎのかずは?(6のつぎは)_01_問題

なまえ : _____

うえの かずの つぎは ひだりの かずかな? みぎの かずかな?
まる(○)をつけよう!



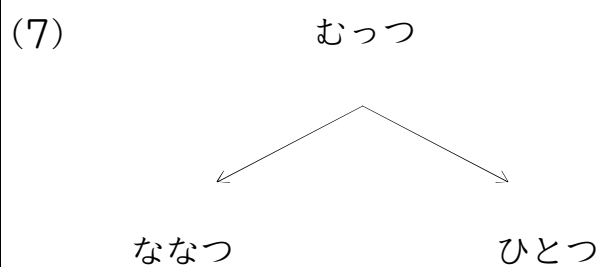
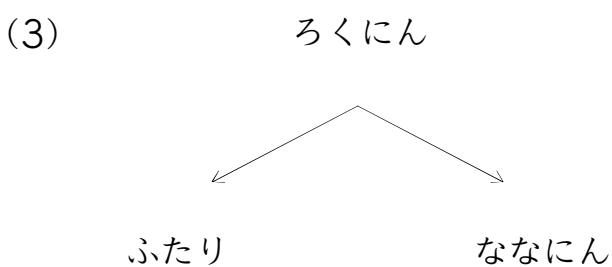
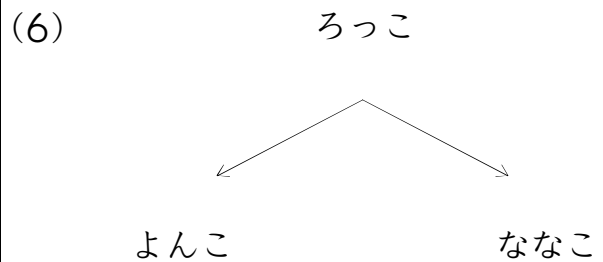
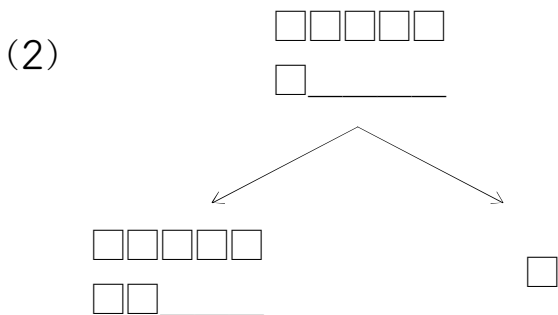
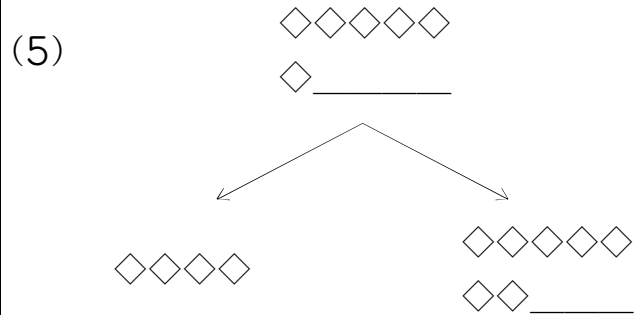
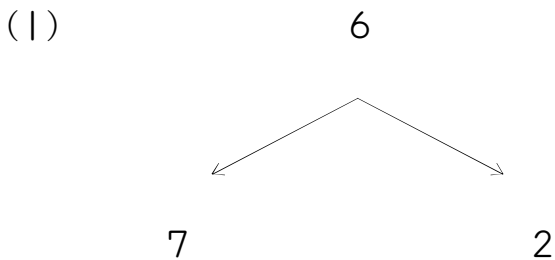
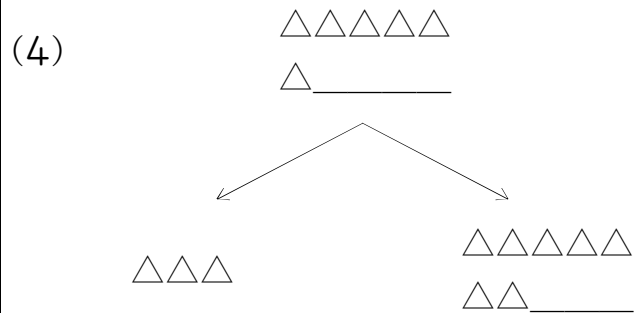
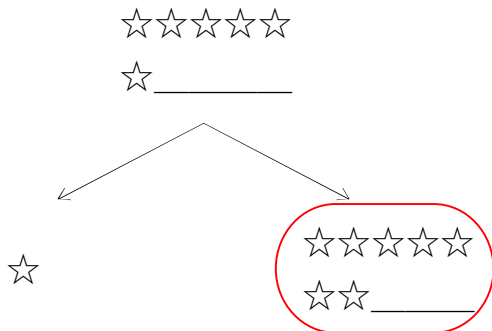
うえの かずの つぎは ひだりの かずかな? みぎの かずかな?
まる(○)をつけよう!



つぎのかずは?(6のつぎは)_01_問題

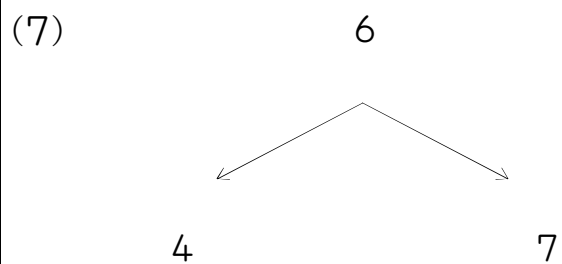
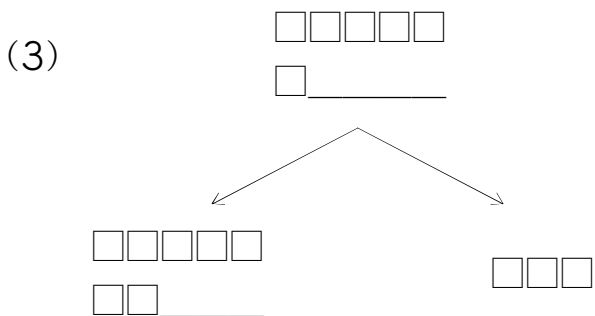
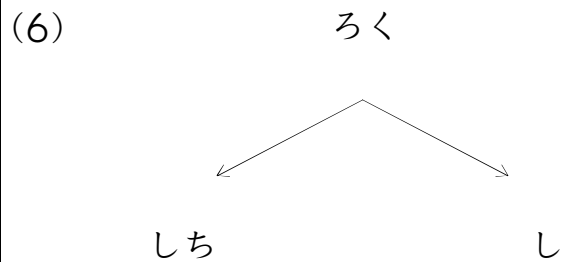
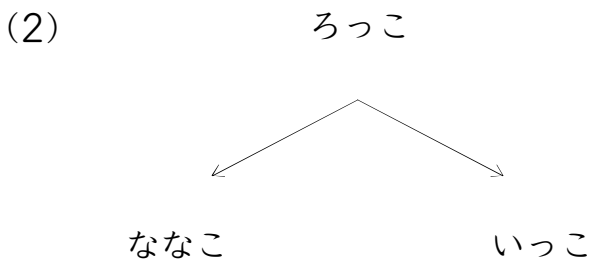
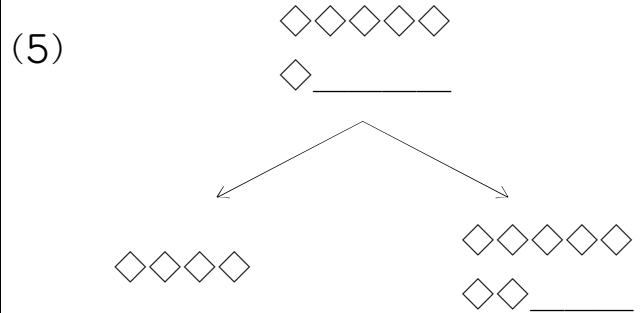
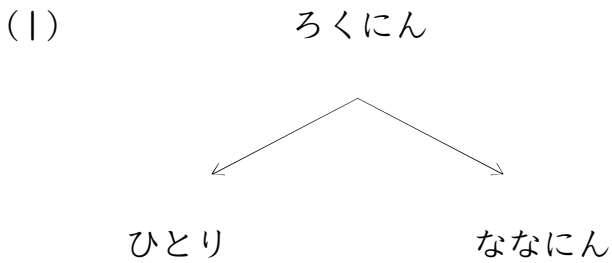
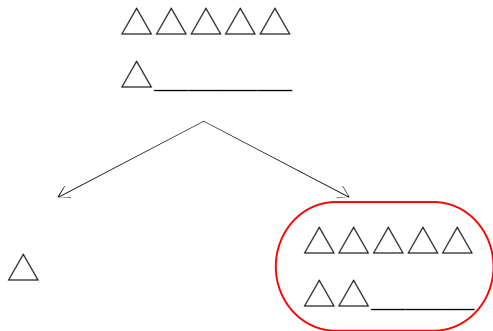
なまえ: _____

うえの かずの つぎは ひだりの かずかな? みぎの かずかな?
まる(○)をつけよう!



なまえ : _____

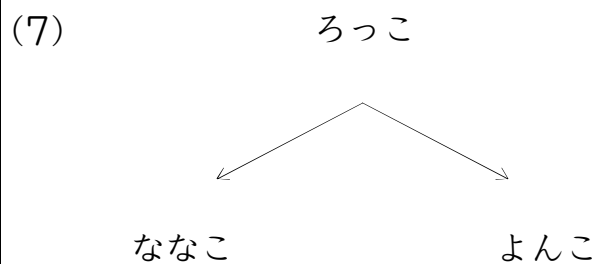
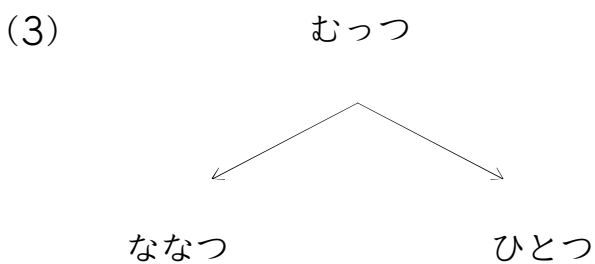
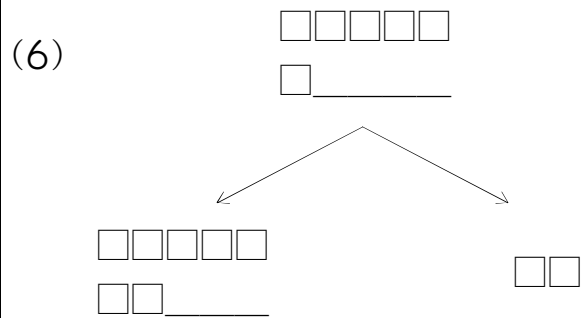
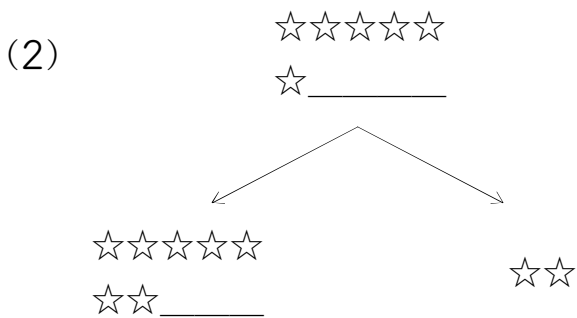
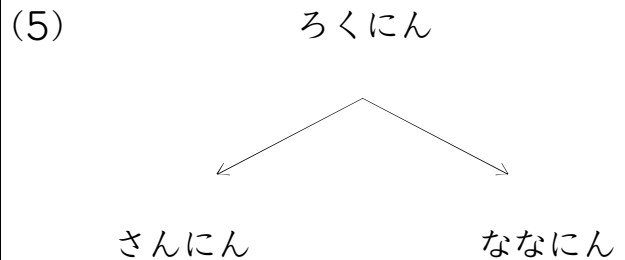
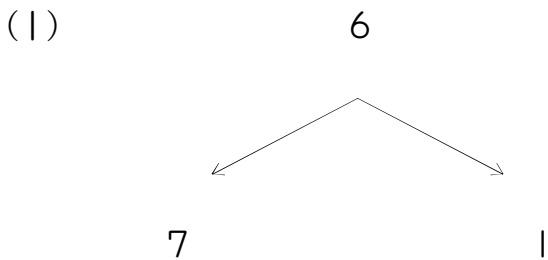
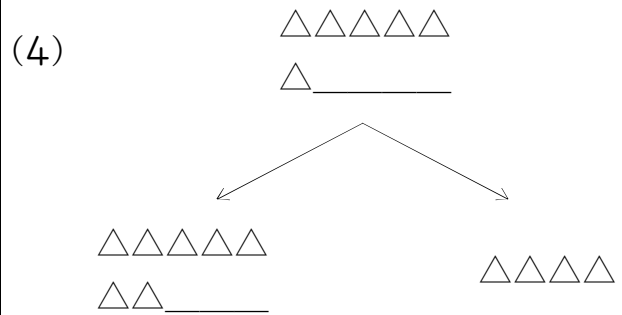
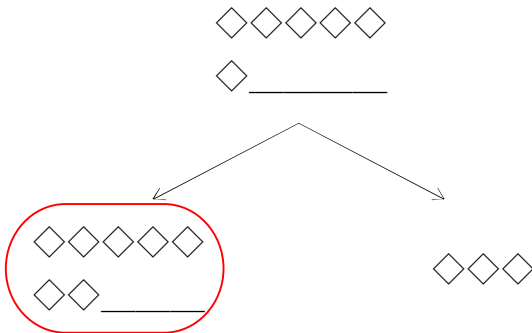
うえの かずの つぎは ひだりの かずかな? みぎの かずかな?
まる(○)をつけよう!



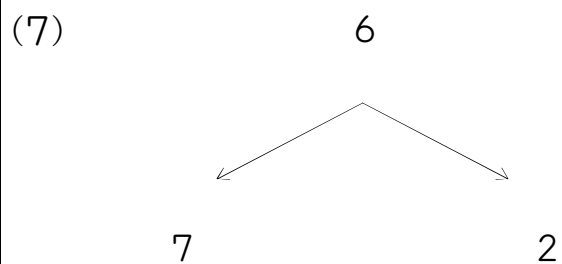
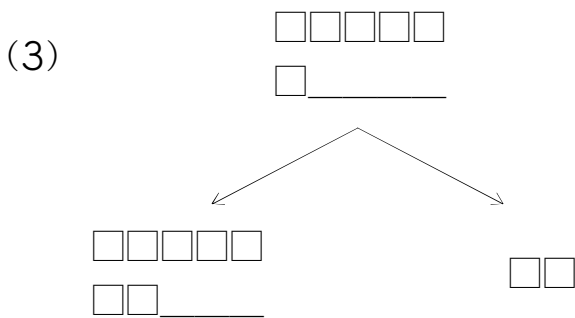
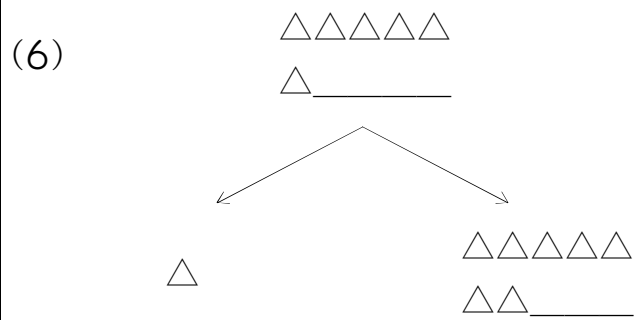
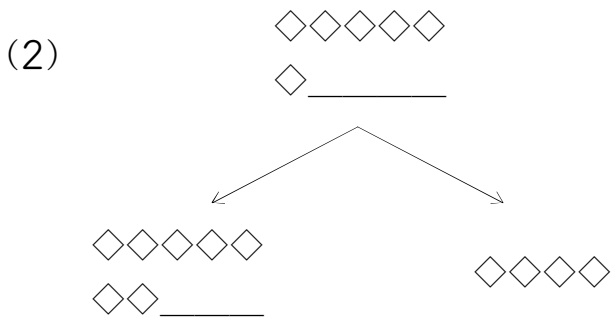
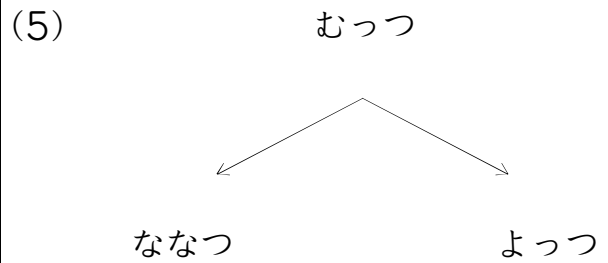
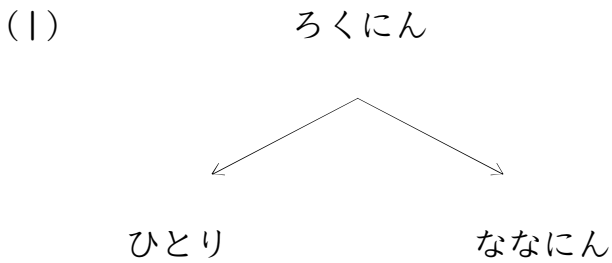
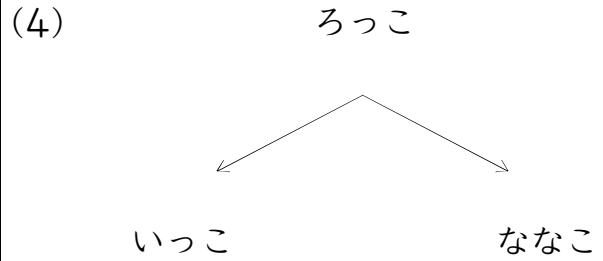
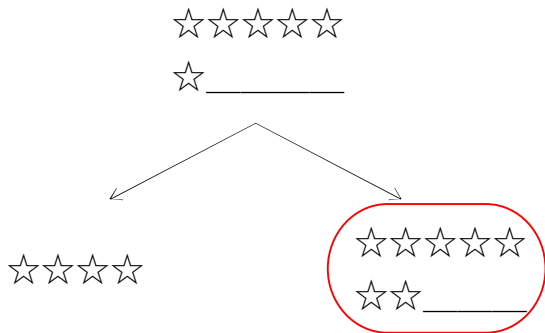
つぎのかずは?(6のつぎは)_01_問題

なまえ : _____

うえの かずの つぎは ひだりの かずかな? みぎの かずかな?
まる(○)をつけよう!



うえの かずの つぎは ひだりの かずかな? みぎの かずかな?
まる(○)をつけよう!



なまえ : _____

うえの かずの つぎは ひだりの かずかな? みぎの かずかな?
まる(○)をつけよう!

<p style="text-align: center;">むっつ</p>	<p>(4) ろく</p>
<p>(1) ろっこ</p>	<p>(5)</p> <p style="text-align: center;">☆☆☆☆☆</p> <p style="text-align: center;">☆ _____</p>
<p>(2)</p> <p style="text-align: center;">◇◇◇◇◇</p> <p style="text-align: center;">◇ _____</p>	<p>(6)</p> <p style="text-align: center;">□□□□□</p> <p style="text-align: center;">□ _____</p>
<p>(3) ろくにん</p>	<p>(7)</p> <p style="text-align: center;">△△△△△</p> <p style="text-align: center;">△ _____</p>

つぎのかずは?(6のつぎは)_01_問題

なまえ: _____

うえの かずの つぎは ひだりの かずかな? みぎの かずかな?
まる(○)をつけよう!

ろく

しち

さん

(4)

ろっこ

ななこ

よんこ

(1)

ろくにん

さんにん

しちにん

(5)

6

7

1

(2)

むつつ

ななつ

ふたつ

(6)

□□□□□

□_____

□□□□□

□□_____

□□□□

(3)

△△△△△

△_____

△

△△△△△

△△_____

(7)

☆☆☆☆☆

☆_____

☆☆☆

☆☆☆☆☆

☆☆_____

つぎのかずは?(6のつぎは)_01_問題

なまえ : _____

うえの かずの つぎは ひだりの かずかな? みぎの かずかな?
まる(○)をつけよう!

<p>ろっこ</p> <p>ななこ さんこ</p>	<p>(4)</p> <p>△△△△△ △_____</p> <p>△△△△△ △△_____ △</p>
<p>(1)</p> <p>むっつ</p> <p>ななつ よっつ</p>	<p>(5)</p> <p>□□□□□ □_____</p> <p>□□□□□ □□_____ □□□□</p>
<p>(2)</p> <p>ろくにん</p> <p>ふたり しちにん</p>	<p>(6)</p> <p>◇◇◇◇◇ ◇_____</p> <p>◇◇◇◇◇ ◇◇_____ ◇◇◇</p>
<p>(3)</p> <p>☆☆☆☆☆ ☆_____</p> <p>☆☆☆ ☆☆☆☆☆ ☆☆_____</p>	<p>(7)</p> <p>ろく</p> <p>さん しち</p>

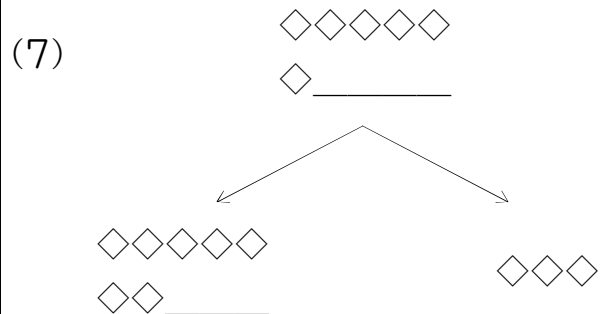
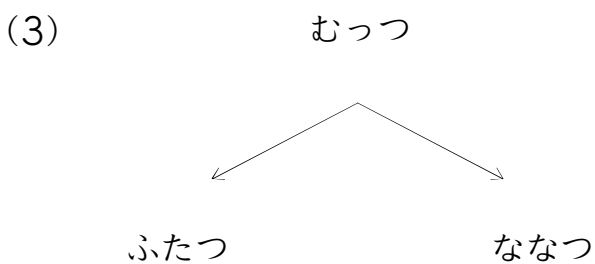
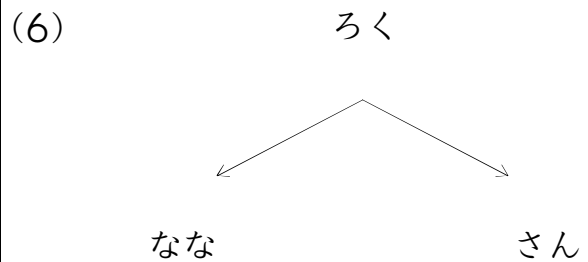
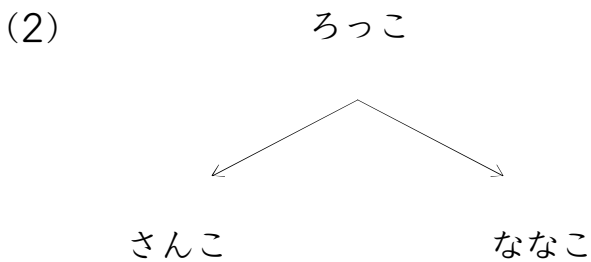
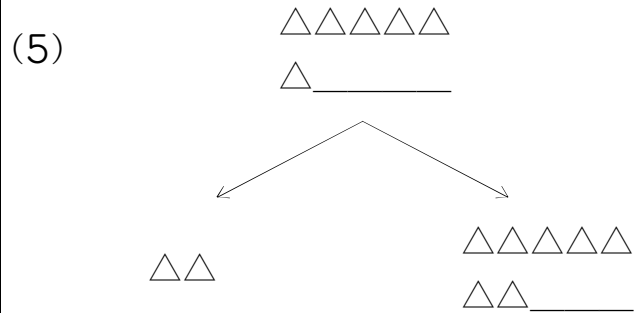
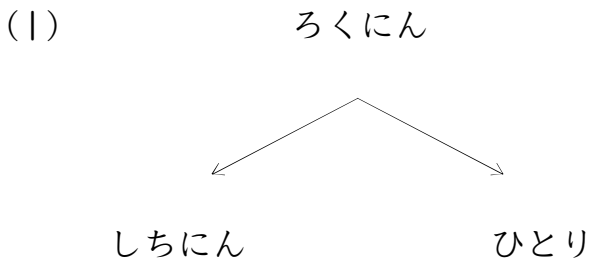
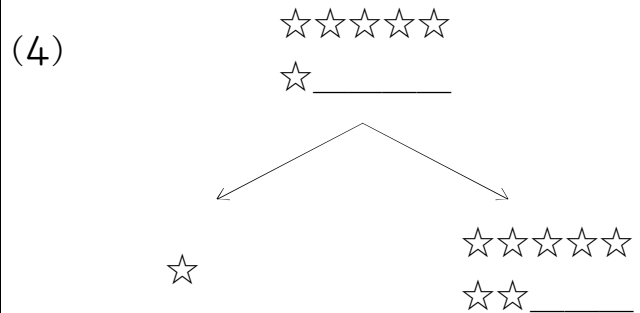
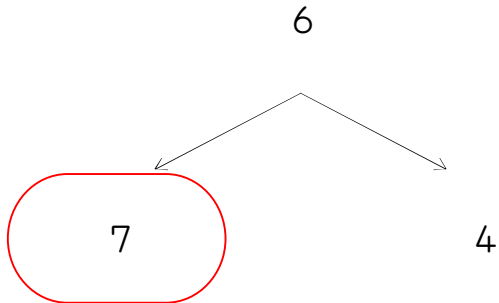
うえの かずの つぎは ひだりの かずかな? みぎの かずかな?
まる(○)をつけよう!

<p>(1) $\triangle\triangle\triangle\triangle\triangle$ \triangle _____</p> <p>$\triangle\triangle\triangle\triangle\triangle$ $\triangle\triangle$ _____</p> <p>$\triangle\triangle\triangle$</p>	<p>(4) $\diamond\diamond\diamond\diamond\diamond$ \diamond _____</p> <p>$\diamond\diamond\diamond$</p> <p>$\diamond\diamond\diamond\diamond\diamond$ $\diamond\diamond$ _____</p>
<p>(1) $\square\square\square\square\square$ \square _____</p> <p>$\square\square\square\square\square$ $\square\square$ _____</p> <p>$\square\square\square\square$</p>	<p>(5) $\star\star\star\star\star$ \star _____</p> <p>$\star\star\star\star\star$ $\star\star$ _____</p> <p>\star</p>
<p>(2) ろっこ</p> <p>にこ ななこ</p>	<p>(6) 6</p> <p>7 3</p>
<p>(3) ろくにん</p> <p>ひとり ななにん</p>	<p>(7) むつつ</p> <p>みつつ ななつ</p>

つぎのかずは?(6のつぎは)_01_問題

なまえ: _____

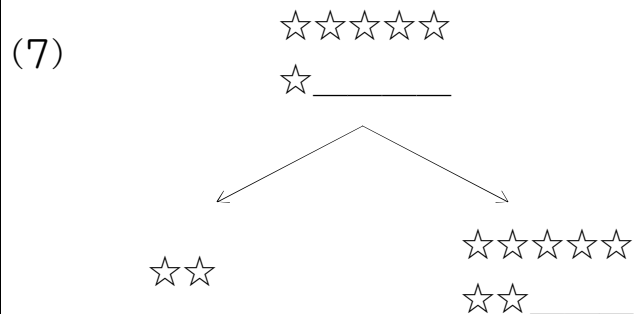
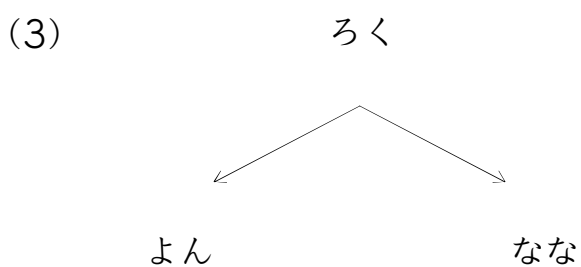
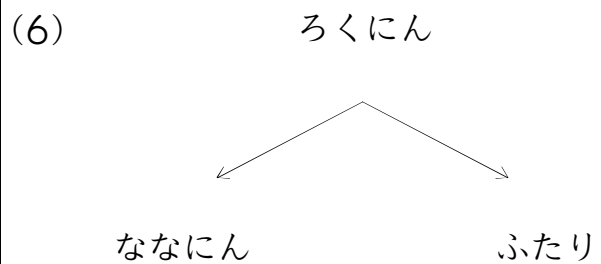
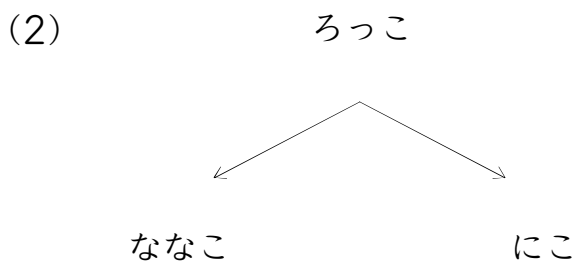
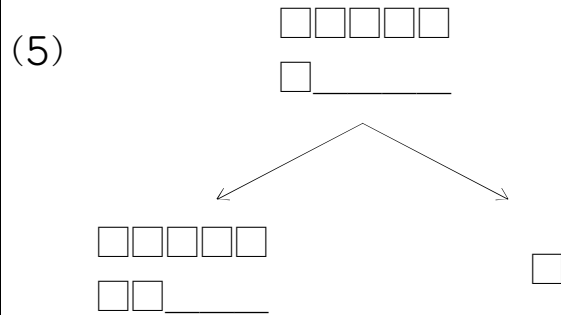
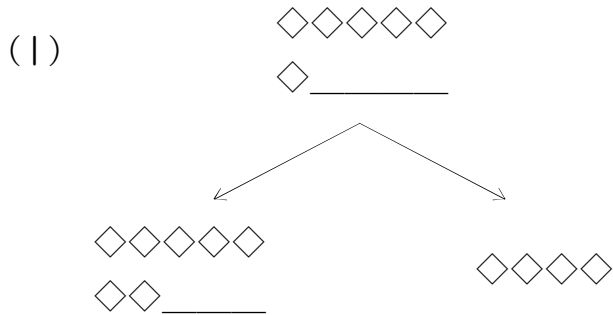
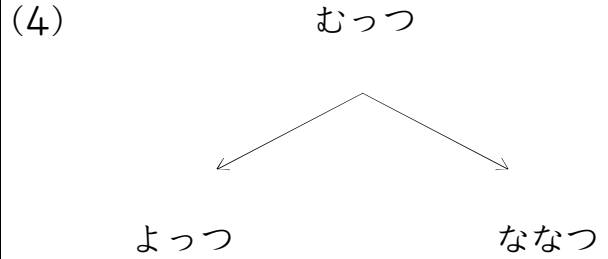
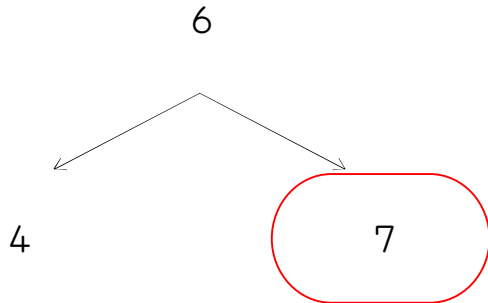
うえの かずの つぎは ひだりの かずかな? みぎの かずかな?
まる(○)をつけよう!



つぎのかずは?(6のつぎは)_01_問題

なまえ: _____

うえの かずの つぎは ひだりの かずかな? みぎの かずかな?
まる(○)をつけよう!



つぎのかずは?(6のつぎは)_01_問題

なまえ : _____

うえの かずの つぎは ひだりの かずかな? みぎの かずかな?
まる(○)をつけよう!

ろく

しち

さん

(4)

ろっこ

ななこ

さんこ

(1)

◇◇◇◇◇

◇ _____

◇◇

◇◇◇◇◇

◇◇ _____

(5)

むっつ

よっつ

ななつ

(2)

△△△△△

△ _____

△△△

△△△△△

△△ _____

(6)

6

3

7

(3)

□□□□□

□ _____

□□□□□

□□ _____

□□□

(7)

☆☆☆☆☆

☆ _____

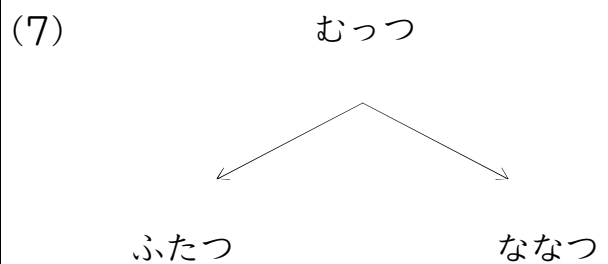
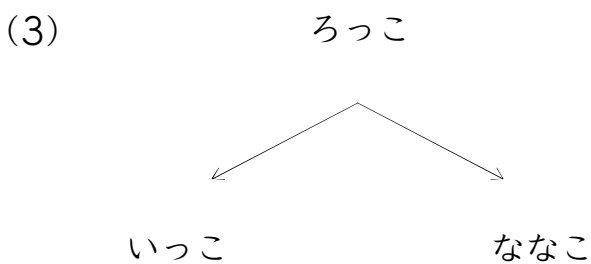
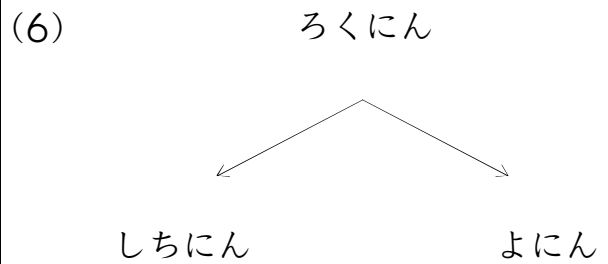
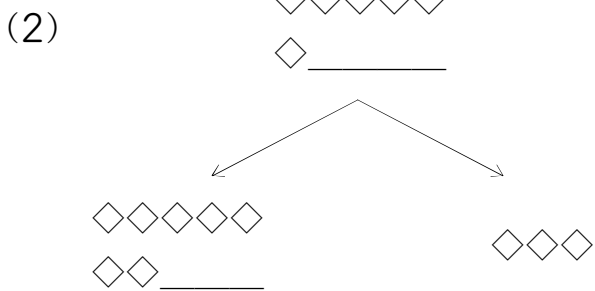
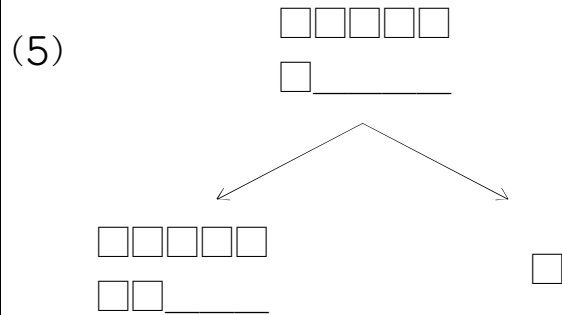
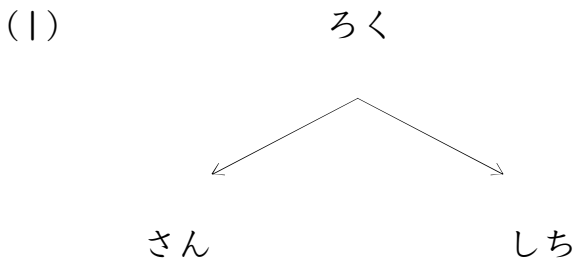
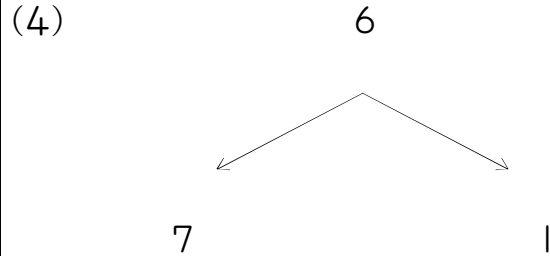
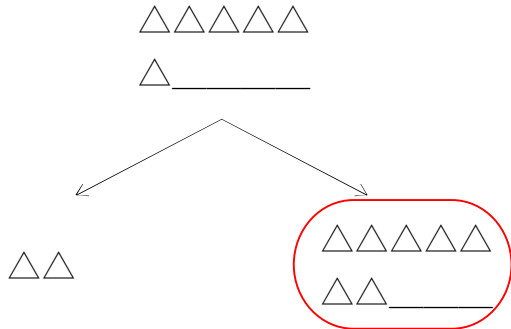
☆☆☆☆☆

☆☆ _____

☆

なまえ : _____

うえの かずの つぎは ひだりの かずかな? みぎの かずかな?
まる(○)をつけよう!



つぎのかずは?(6のつぎは)_01_問題

なまえ : _____

うえの かずの つぎは ひだりの かずかな? みぎの かずかな?
まる(○)をつけよう!

ろく

しち

に

(4)

△△△△△

△_____

△△△△△

△△_____

△△△△

(1)

☆☆☆☆☆

☆_____

☆☆☆☆☆

☆☆_____

☆☆☆☆

(5)

◇◇◇◇◇

◇_____

◇◇◇◇◇

◇◇_____

◇◇

(2)

6

7

4

(6)

ろっこ

さんこ

ななこ

(3)

むっつ

よっつ

ななつ

(7)

ろくにん

しちにん

ひとり

つぎのかずは?(6のつぎは)_01_問題

なまえ : _____

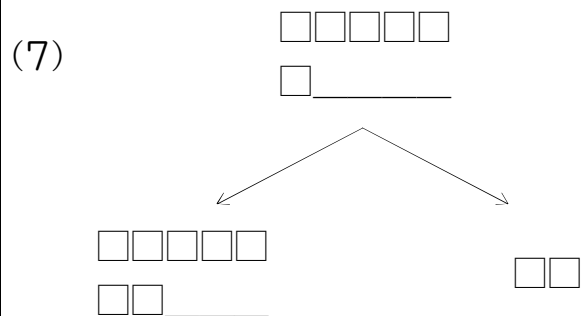
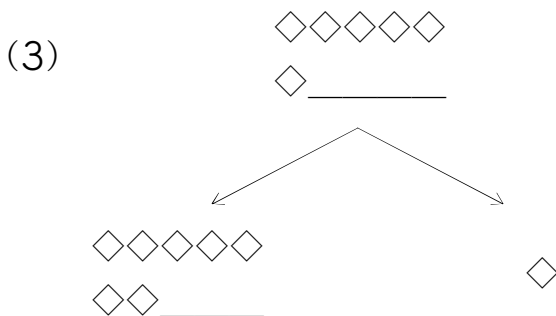
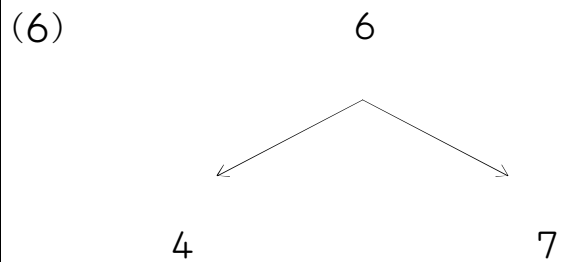
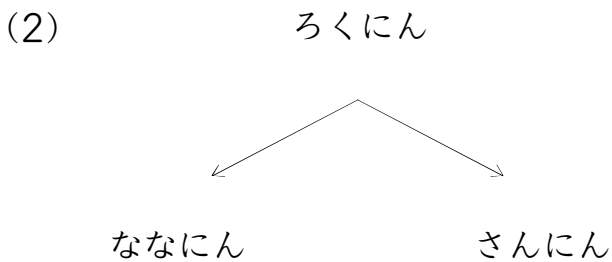
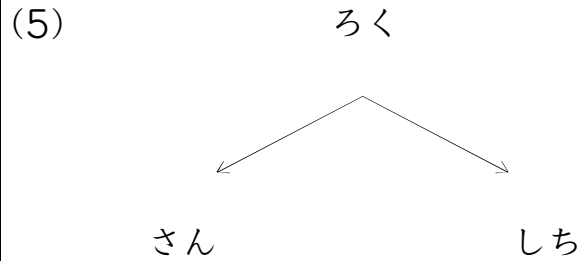
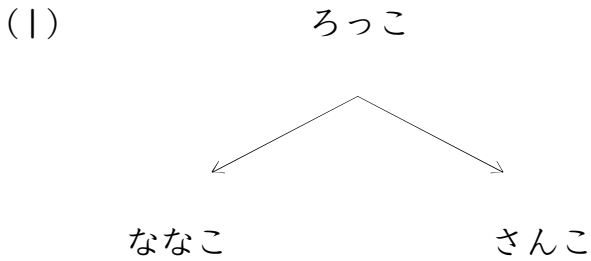
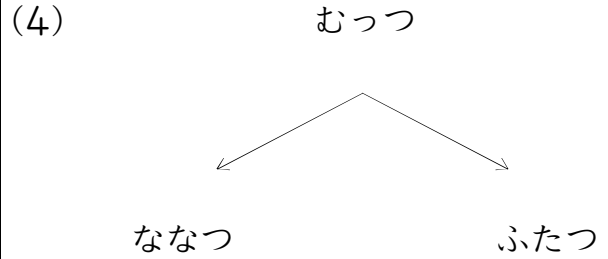
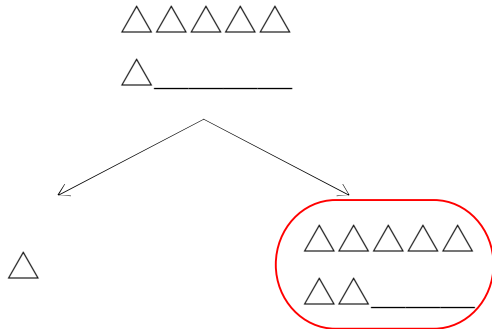
うえのかずの つぎは ひだりの かずかな? みぎのかずかな?
まる(○)をつけよう!

<p>ろっこ</p> <p>ななこ さんこ</p>	<p>(4)</p> <p>☆☆☆☆☆ ☆ _____</p> <p>☆☆☆☆☆ ☆☆☆ ☆☆☆ _____ ☆</p>
<p>(1)</p> <p>6</p> <p>3 7</p>	<p>(5)</p> <p>ろくにん</p> <p>さんにん しちにん</p>
<p>(2)</p> <p>◇◇◇◇◇ ◇ _____</p> <p>◇◇◇◇◇ ◇◇ _____ ◇◇◇</p>	<p>(6)</p> <p>□□□□□ □ _____</p> <p>□□□□ □□□□□ □□ _____</p>
<p>(3)</p> <p>むっつ</p> <p>みっつ ななつ</p>	<p>(7)</p> <p>ろく</p> <p>しち に</p>

つぎのかずは?(6のつぎは)_01_問題

なまえ : _____

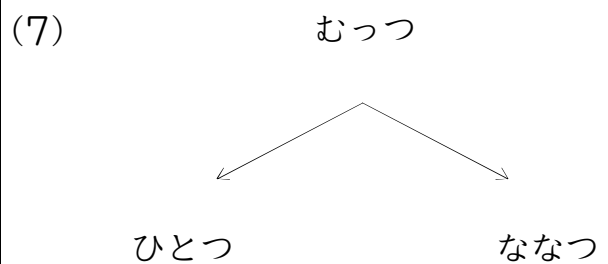
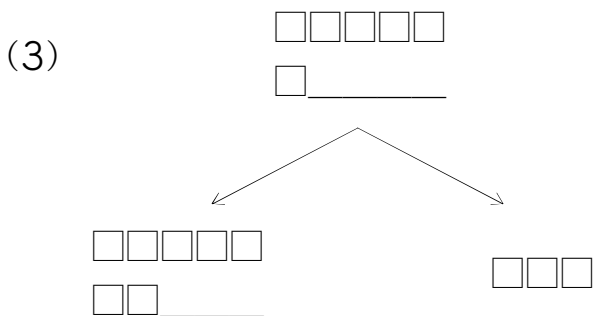
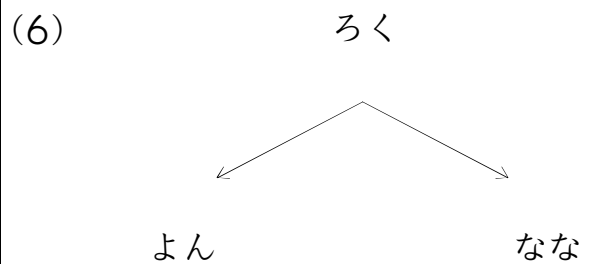
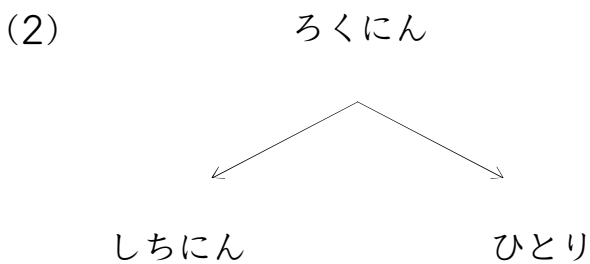
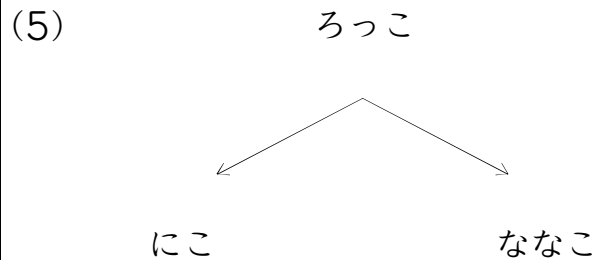
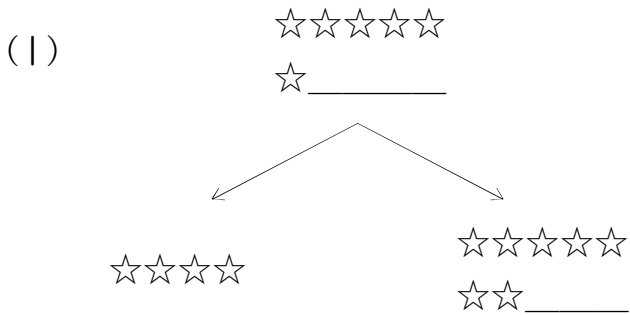
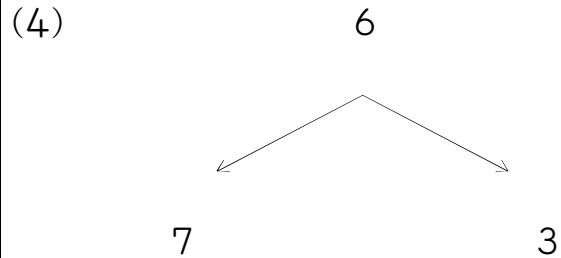
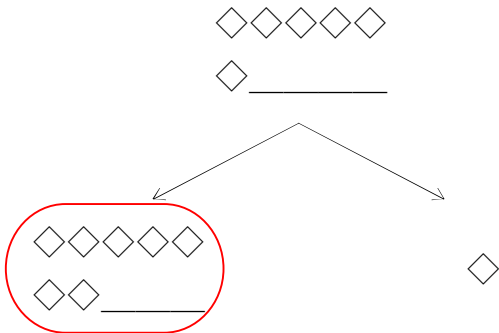
うえの かずの つぎは ひだりの かずかな? みぎの かずかな?
まる(○)をつけよう!



つぎのかずは?(6のつぎは)_01_問題

なまえ : _____

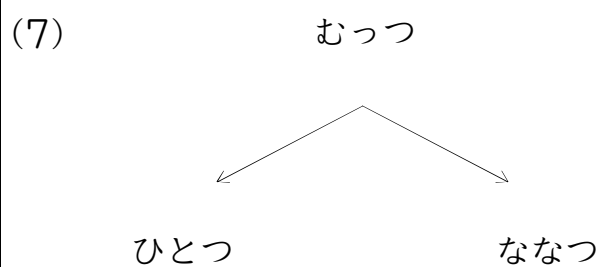
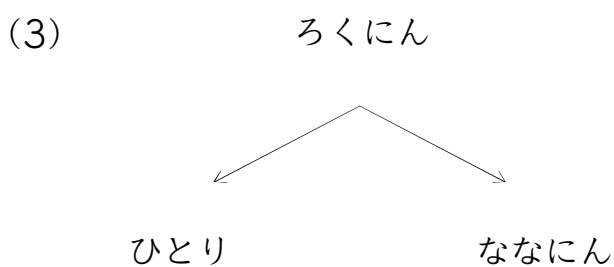
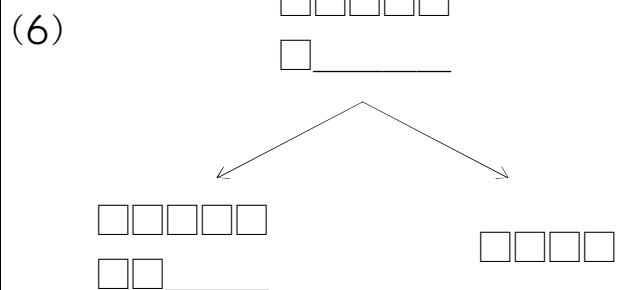
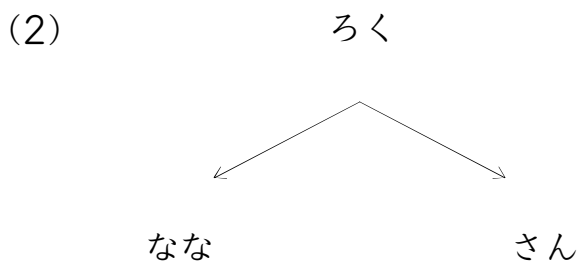
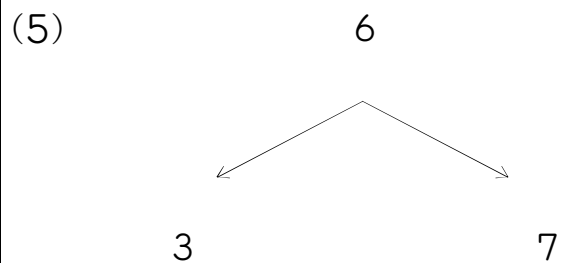
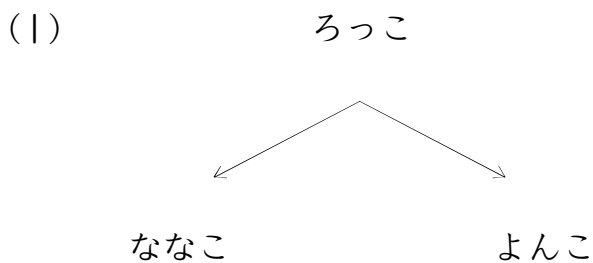
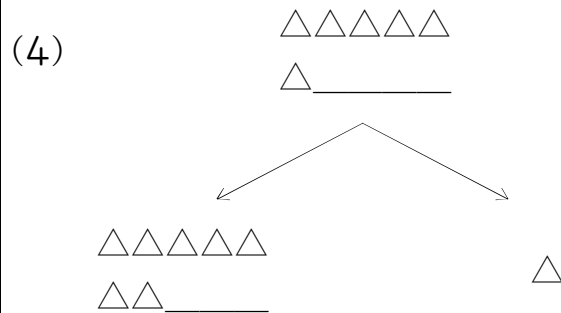
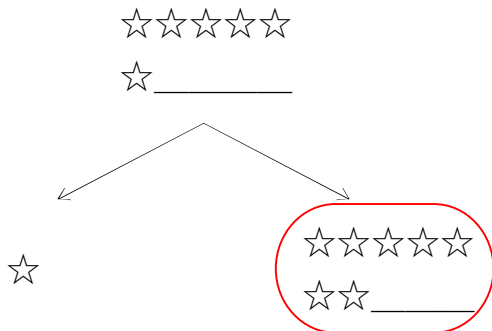
うえの かずの つぎは ひだりの かずかな? みぎの かずかな?
まる(○)をつけよう!



つぎのかずは?(6のつぎは)_01_問題

なまえ : _____

うえの かずの つぎは ひだりの かずかな? みぎの かずかな?
まる(○)をつけよう!



つぎのかずは?(6のつぎは)_01_問題

なまえ : _____

うえの かずの つぎは ひだりの かずかな? みぎの かずかな?
まる(○)をつけよう!

むっつ

ななつ

みっつ

(4)

ろく

さん

しち

(1)

□□□□□

□ _____

□□□□□

□□ _____

□□□

(5)

ろくにん

しちにん

よにん

(2)

ろっこ

さんこ

ななこ

(6)

◇◇◇◇◇

◇ _____

◇◇◇◇◇

◇◇ _____

◇

(3)

6

7

4

(7)

△△△△△

△ _____

△△△

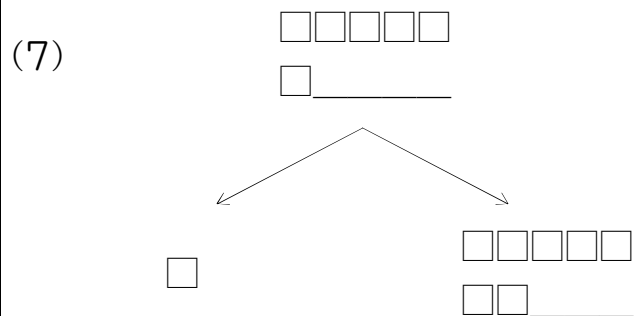
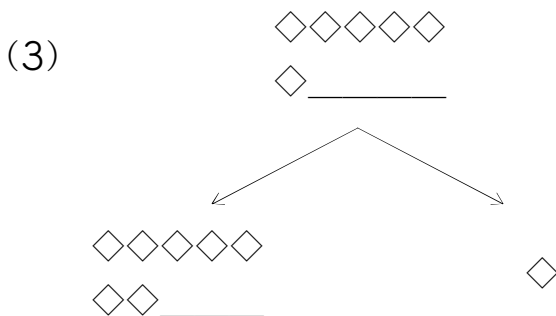
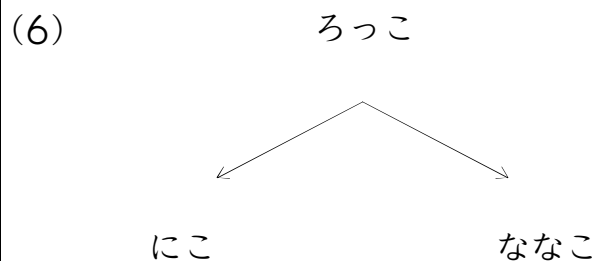
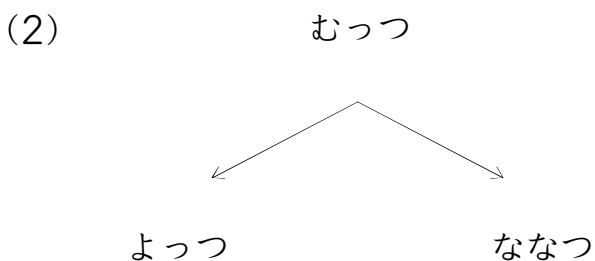
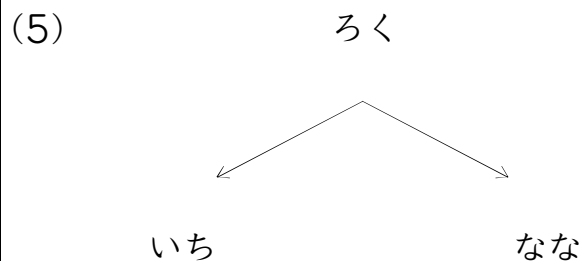
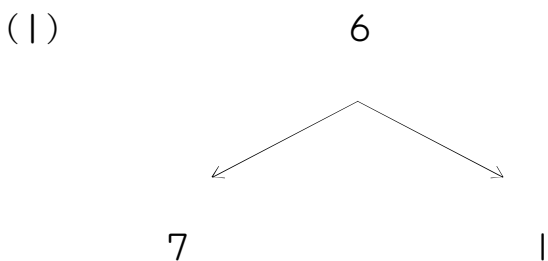
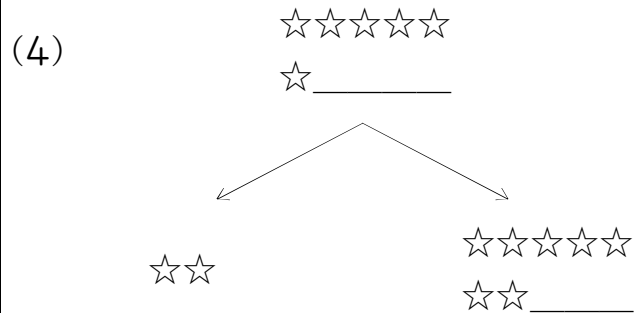
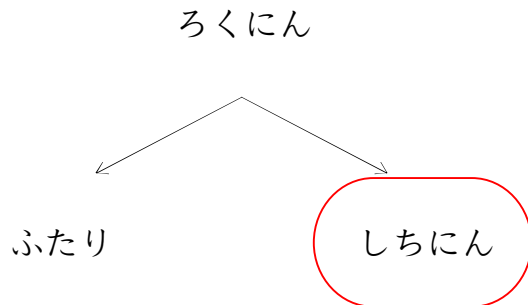
△△△△△

△△ _____

つぎのかずは?(6のつぎは)_01_問題

なまえ : _____

うえの かずの つぎは ひだりの かずかな? みぎの かずかな?
まる(○)をつけよう!

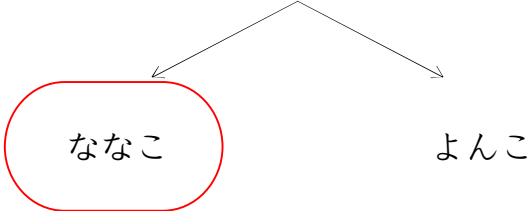


つぎのかずは?(6のつぎは)_01_問題

なまえ : _____

うえの かずの つぎは ひだりの かずかな? みぎの かずかな?
まる(○)をつけよう!

ろっこ


 ななこ

よんこ

(4)


6

2

7

(1)

ろくにん


 ななにん

よにん

(5)

ろく

よん

なな

(2)

☆☆☆☆☆

☆ _____

☆☆☆☆☆

☆☆ _____

☆

(6)

□□□□□

□ _____

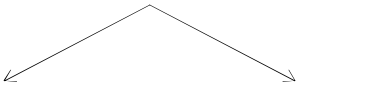
□□□□□

□□ _____

□□

(3)

むつつ


 ななつ

よつつ

(7)

◇◇◇◇◇

◇ _____

◇◇◇◇◇

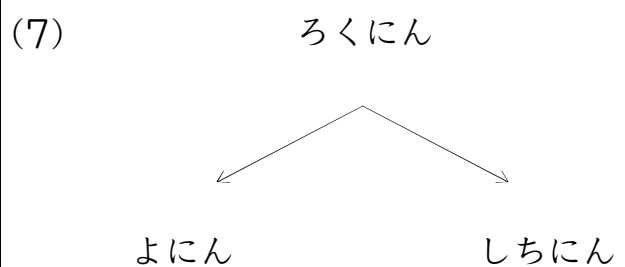
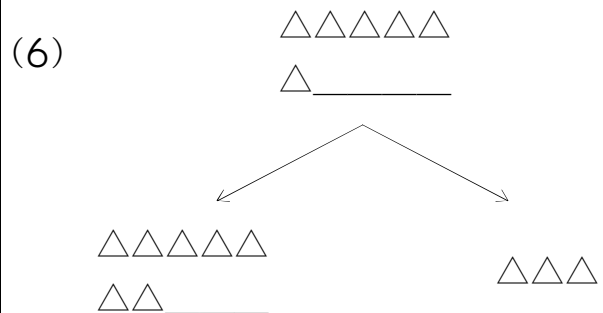
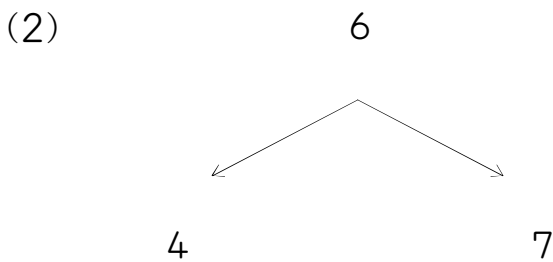
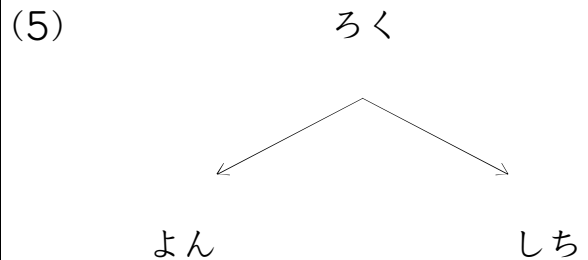
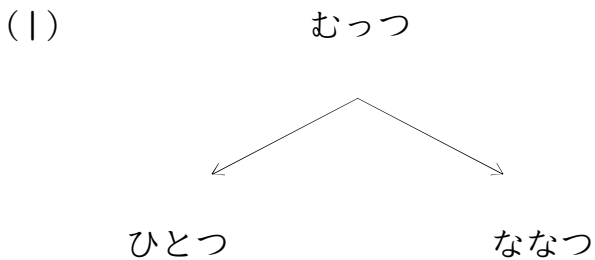
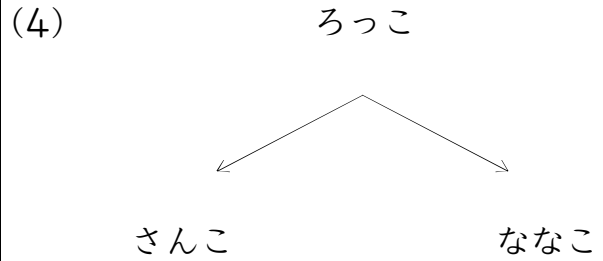
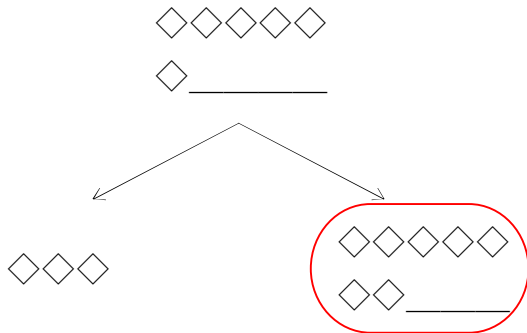
◇◇ _____

◇◇◇

つぎのかずは?(6のつぎは)_01_問題

なまえ: _____

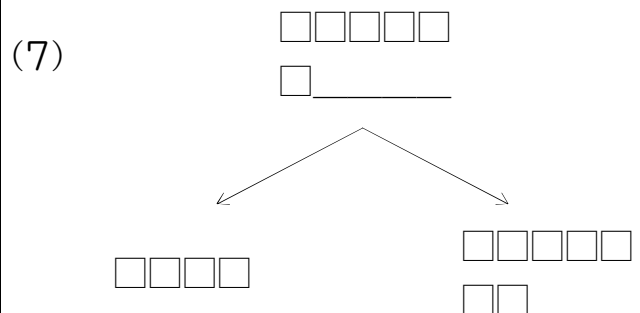
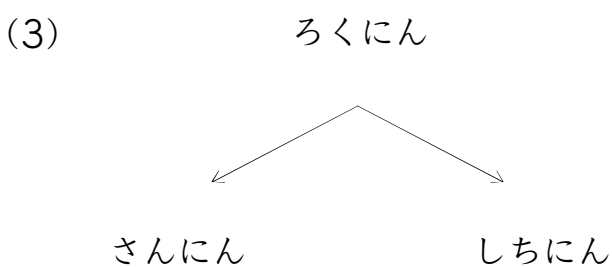
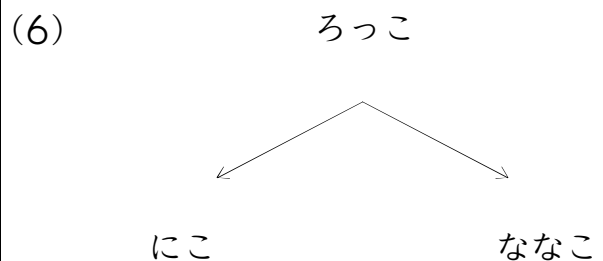
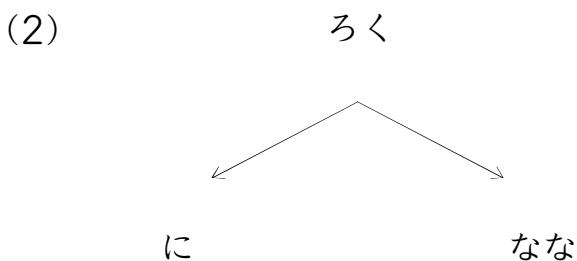
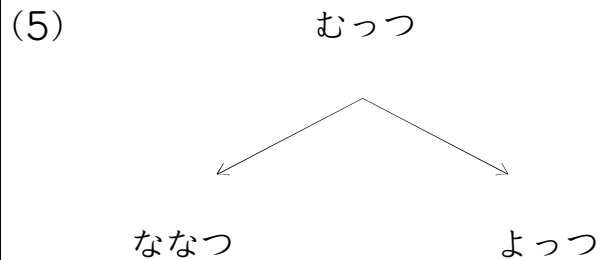
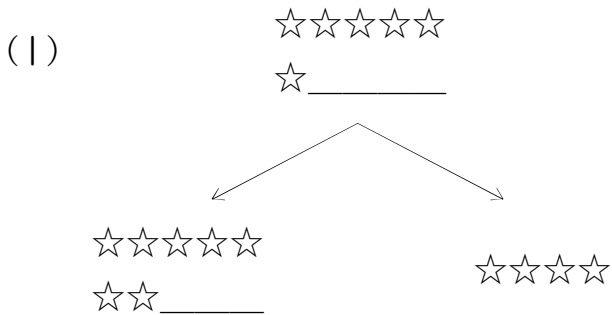
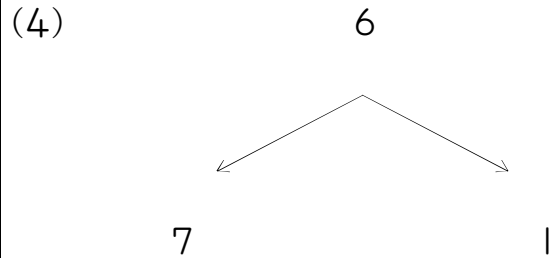
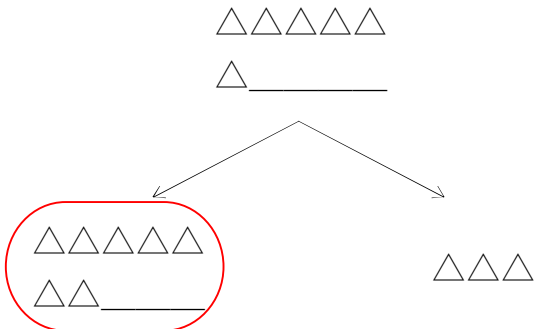
うえの かずの つぎは ひだりの かずかな? みぎの かずかな?
まる(O)をつけよう!



つぎのかずは?(6のつぎは)_01_問題

なまえ: _____

うえの かずの つぎは ひだりの かずかな? みぎの かずかな?
まる(○)をつけよう!



つぎのかずは?(6のつぎは)_01_問題

なまえ : _____

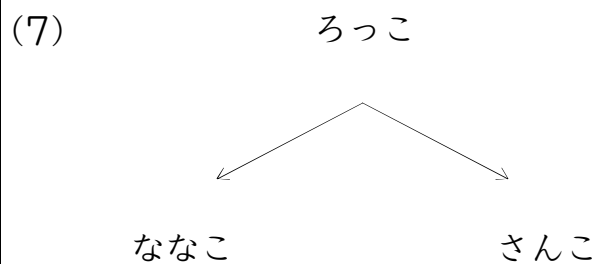
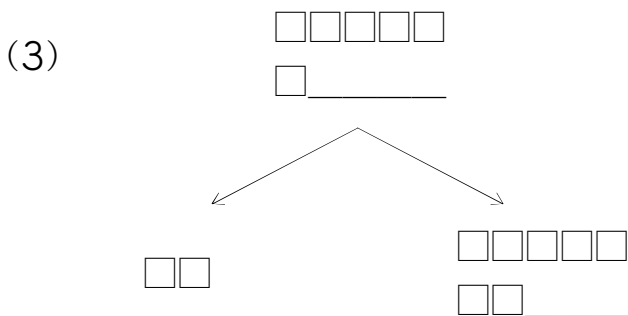
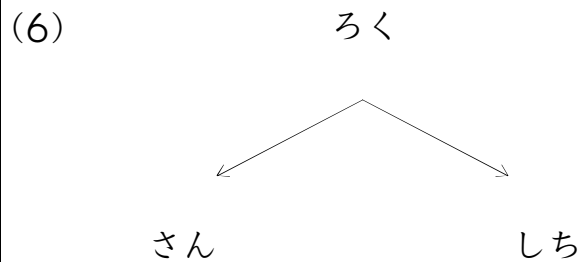
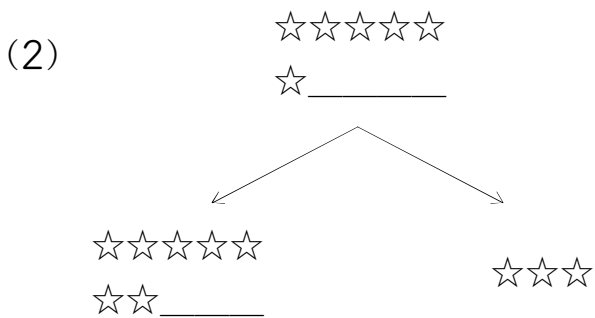
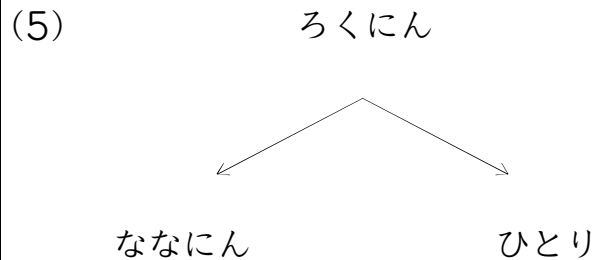
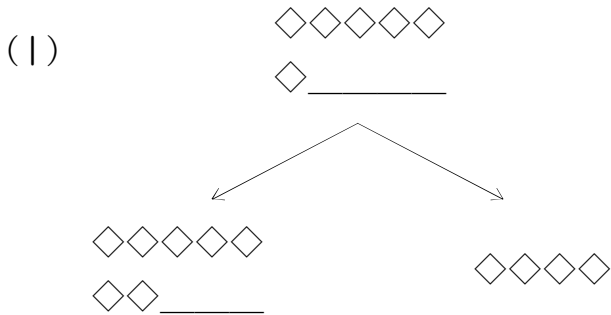
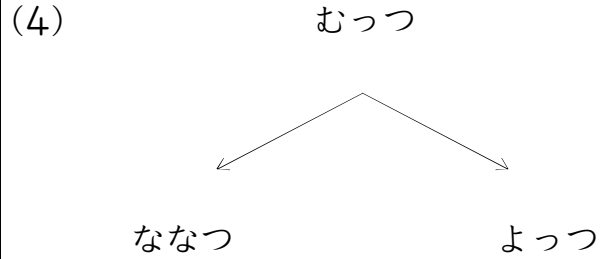
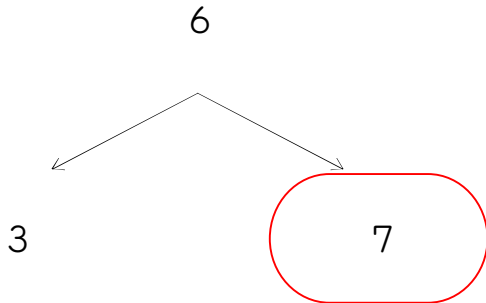
うえの かずの つぎは ひだりの かずかな? みぎの かずかな?
まる(○)をつけよう!

<p style="text-align: center;">△△△△△ △ _____</p> <p style="text-align: center;">↙ ↘</p> <div style="display: flex; justify-content: space-around;"> <div style="border: 2px solid red; border-radius: 50%; padding: 5px; text-align: center;"> <p>△△△△△ △△ _____</p> </div> <div style="text-align: center;"> <p>△△△△</p> </div> </div>	<p>(4) むっつ</p> <p style="text-align: center;">↙ ↘</p> <div style="display: flex; justify-content: space-around;"> <p>ななつ</p> <p>みっつ</p> </div>
<p>(1) ろくにん</p> <p style="text-align: center;">↙ ↘</p> <div style="display: flex; justify-content: space-around;"> <p>よにん</p> <p>ななにん</p> </div>	<p>(5) ろっこ</p> <p style="text-align: center;">↙ ↘</p> <div style="display: flex; justify-content: space-around;"> <p>いっこ</p> <p>ななこ</p> </div>
<p>(2) ろく</p> <p style="text-align: center;">↙ ↘</p> <div style="display: flex; justify-content: space-around;"> <p>さん</p> <p>なな</p> </div>	<p>(6)</p> <p style="text-align: center;">◇◇◇◇◇ ◇ _____</p> <p style="text-align: center;">↙ ↘</p> <div style="display: flex; justify-content: space-around;"> <div style="text-align: center;"> <p>◇◇◇◇◇ ◇◇ _____</p> </div> <div style="text-align: center;"> <p>◇◇◇</p> </div> </div>
<p>(3)</p> <p style="text-align: center;">□□□□□ □ _____</p> <p style="text-align: center;">↙ ↘</p> <div style="display: flex; justify-content: space-around;"> <div style="text-align: center;"> <p>□□□</p> </div> <div style="text-align: center;"> <p>□□□□□ □□ _____</p> </div> </div>	<p>(7)</p> <p style="text-align: center;">☆☆☆☆☆ ☆ _____</p> <p style="text-align: center;">↙ ↘</p> <div style="display: flex; justify-content: space-around;"> <div style="text-align: center;"> <p>☆☆☆☆☆ ☆☆ _____</p> </div> <div style="text-align: center;"> <p>☆</p> </div> </div>

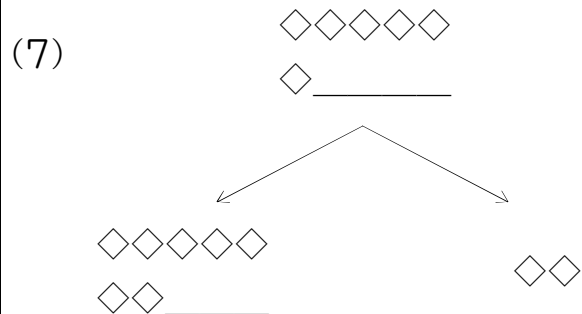
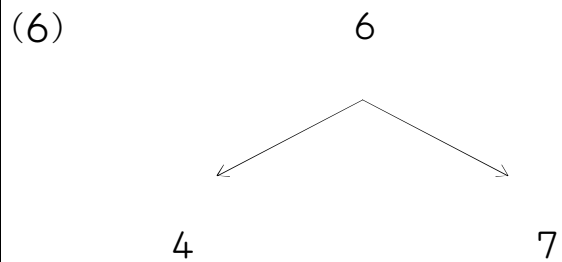
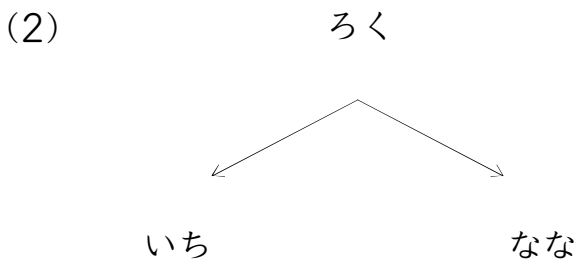
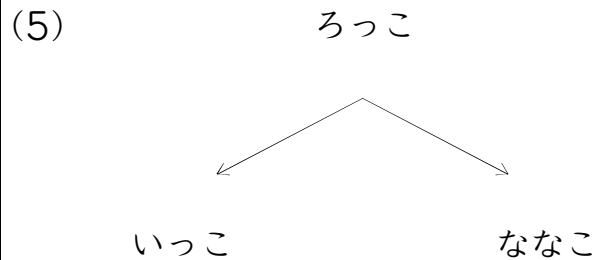
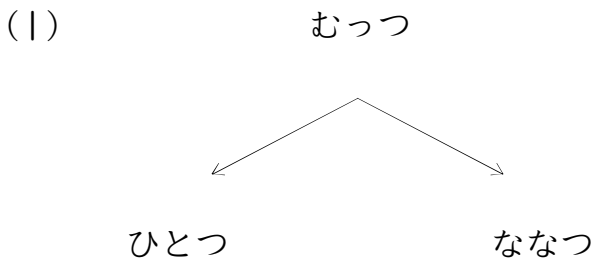
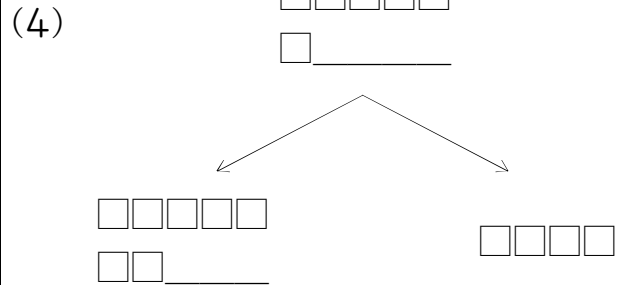
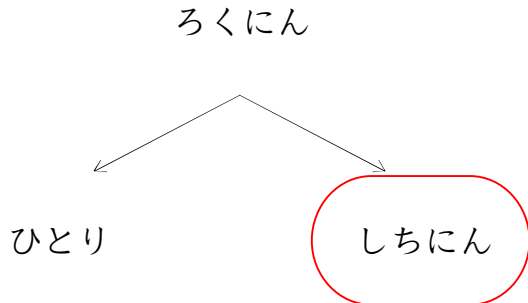
つぎのかずは?(6のつぎは)_01_問題

なまえ: _____

うえの かずの つぎは ひだりの かずかな? みぎの かずかな?
まる(○)をつけよう!



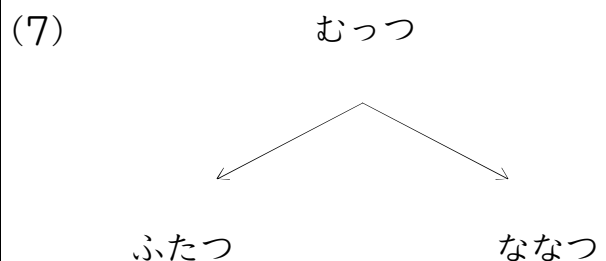
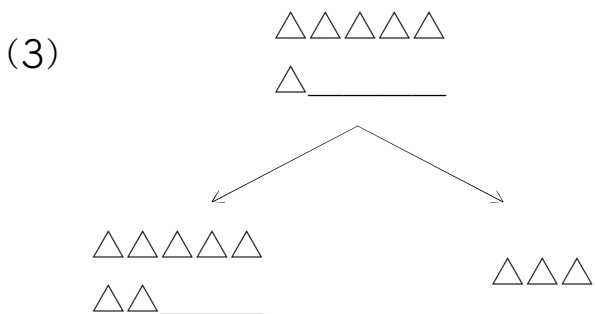
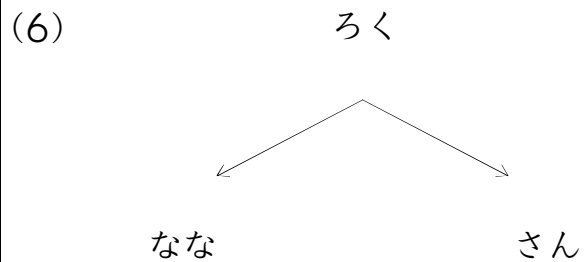
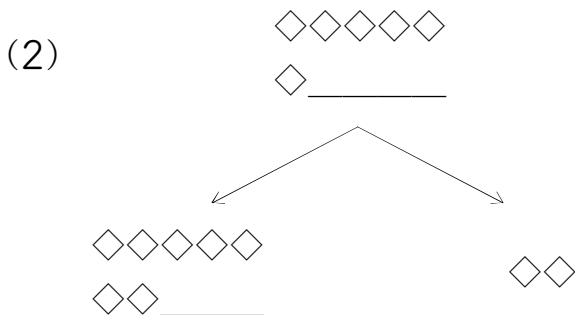
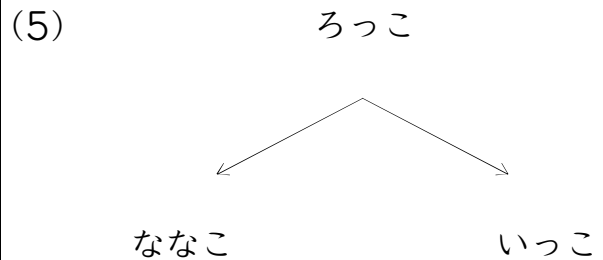
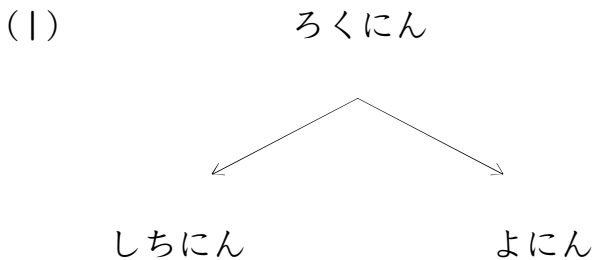
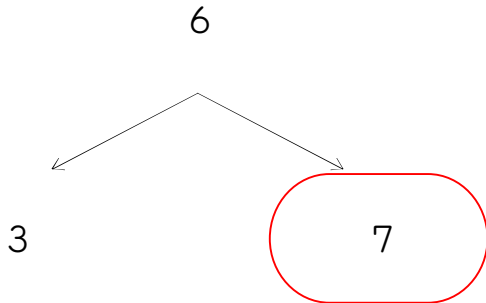
うえの かずの つぎは ひだりの かずかな？ みぎの かずかな？
まる(○)をつけよう！



つぎのかずは?(6のつぎは)_01_問題

なまえ: _____

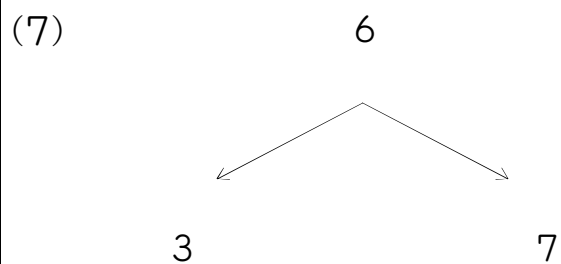
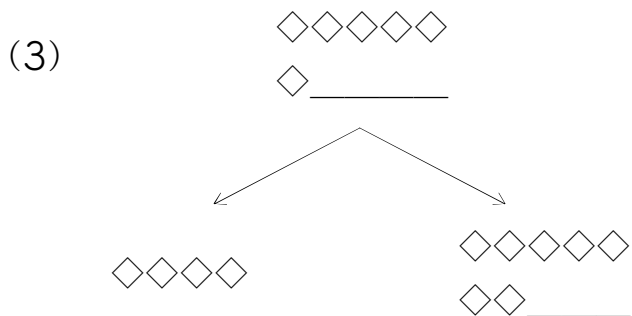
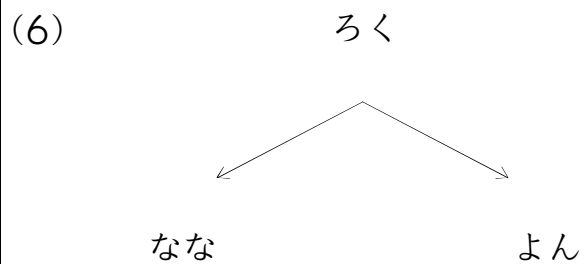
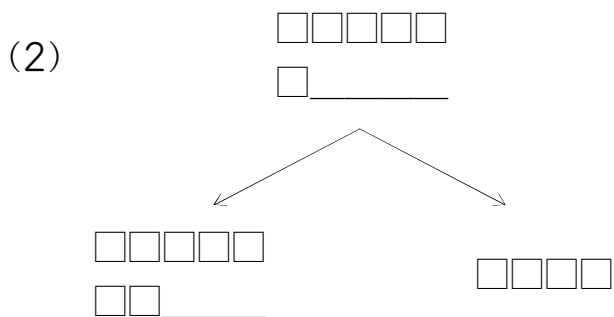
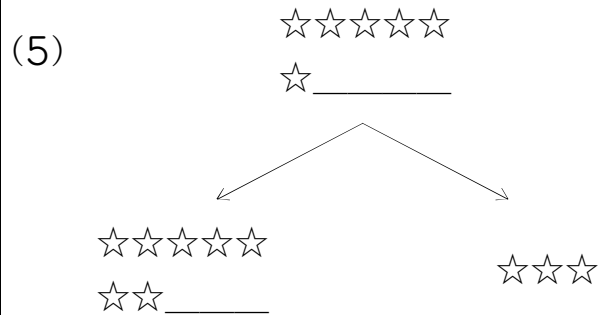
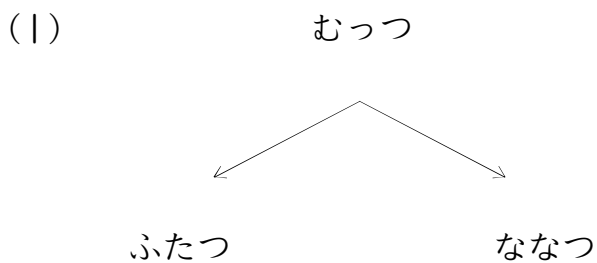
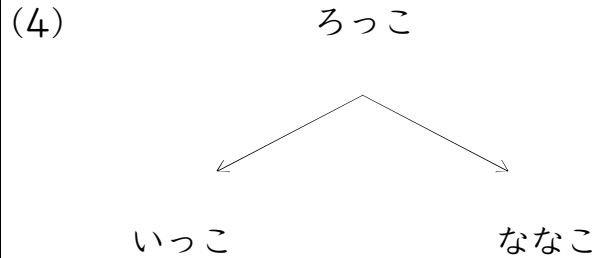
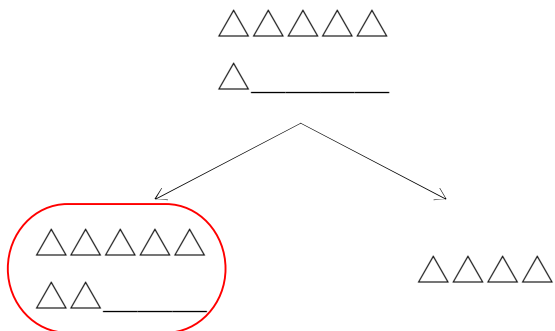
うえの かずの つぎは ひだりの かずかな? みぎの かずかな?
まる(○)をつけよう!



つぎのかずは?(6のつぎは)_01_問題

なまえ: _____

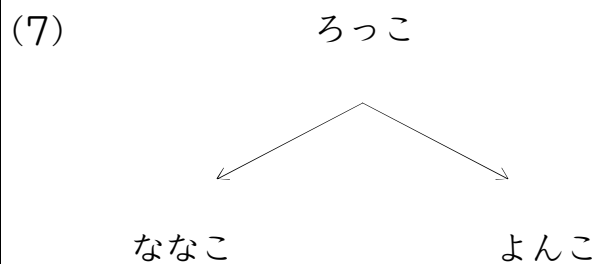
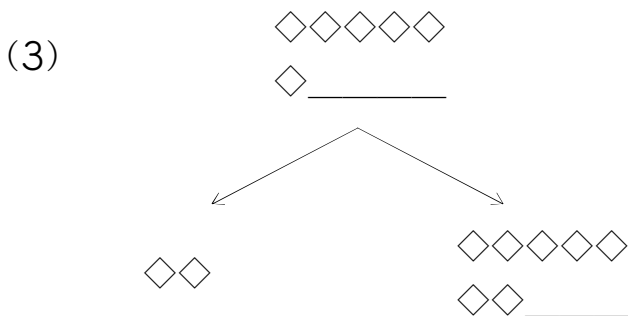
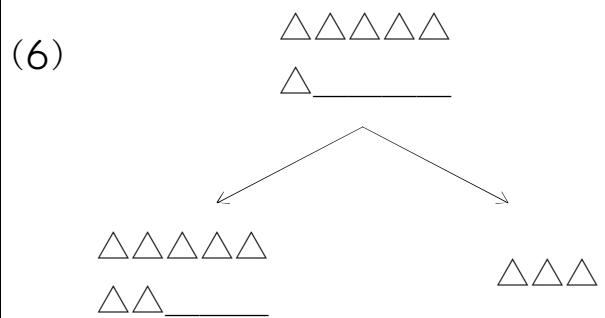
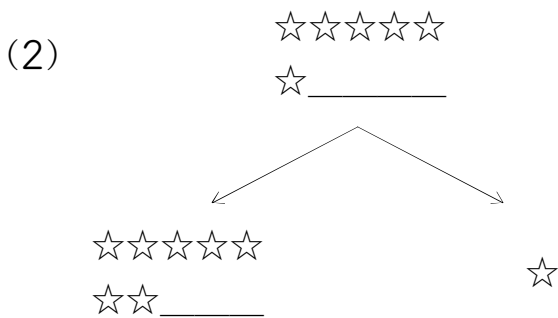
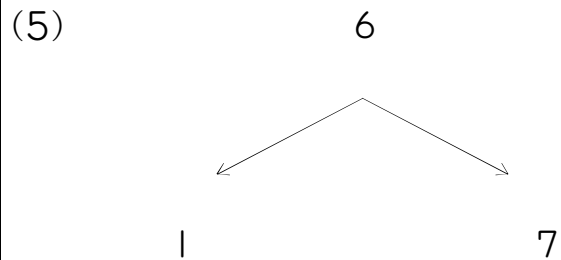
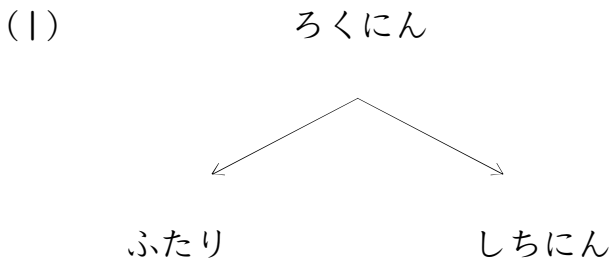
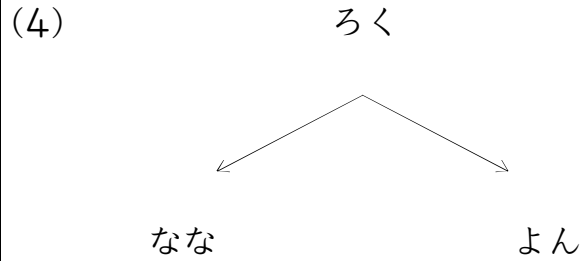
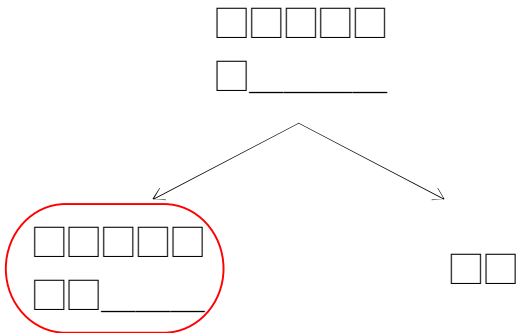
うえの かずの つぎは ひだりの かずかな? みぎの かずかな?
まる(○)をつけよう!



つぎのかずは?(6のつぎは)_01_問題

なまえ : _____

うえの かずの つぎは ひだりの かずかな? みぎの かずかな?
まる(○)をつけよう!

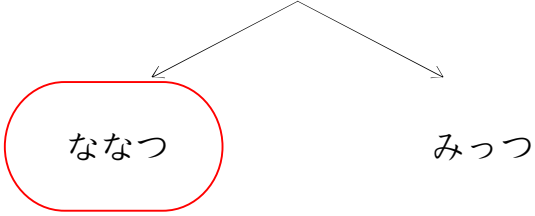


つぎのかずは?(6のつぎは)_01_問題

なまえ : _____

うえの かずの つぎは ひだりの かずかな? みぎの かずかな?
まる(○)をつけよう!

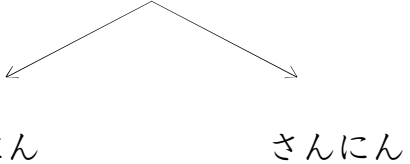
むっつ


 ななつ

みっつ

(4)

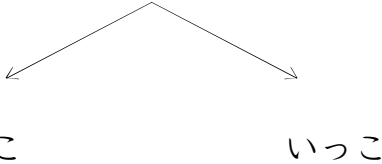
ろくにん


 ななにん

さんにん

(1)

ろっこ


 ななこ

いっこ

(5)

6

4

7

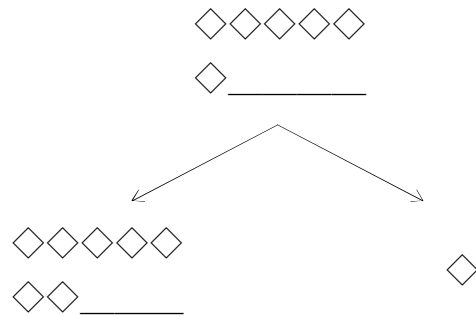
(2)

ろく

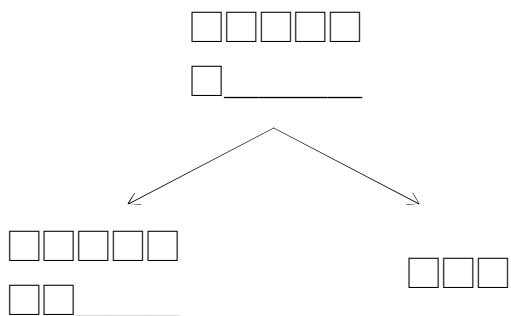

 しち

さん

(6)



(3)



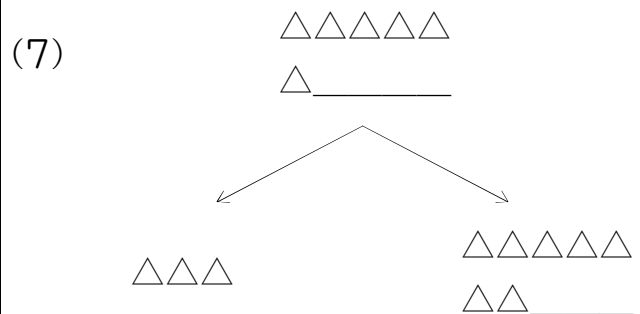
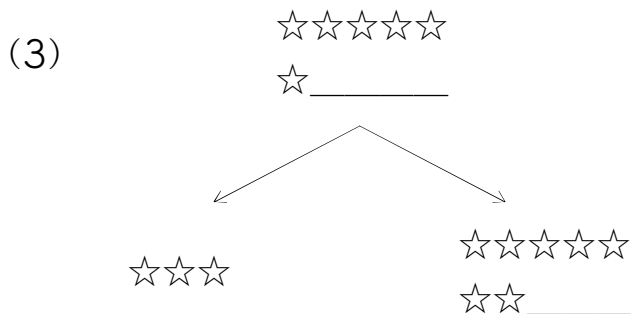
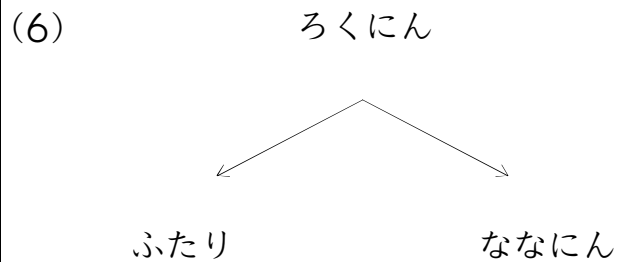
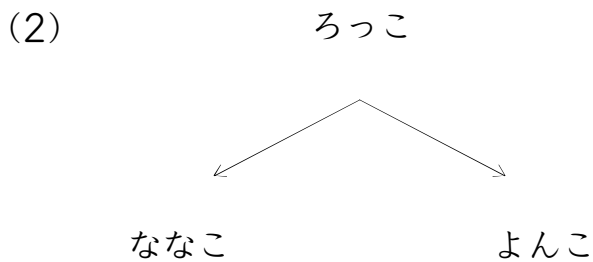
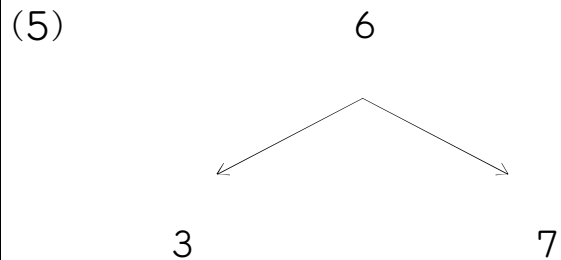
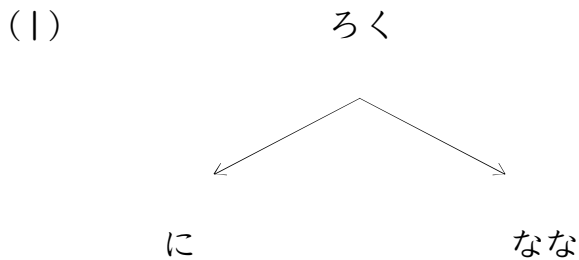
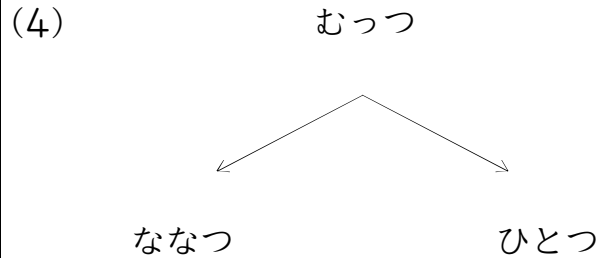
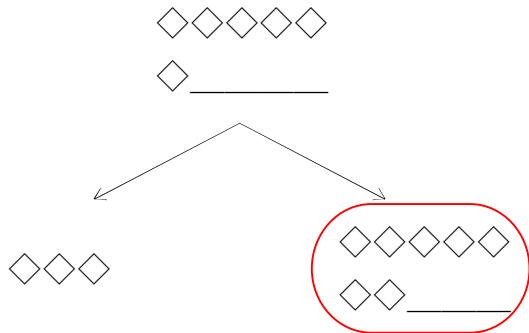
(7)



つぎのかずは?(6のつぎは)_01_問題

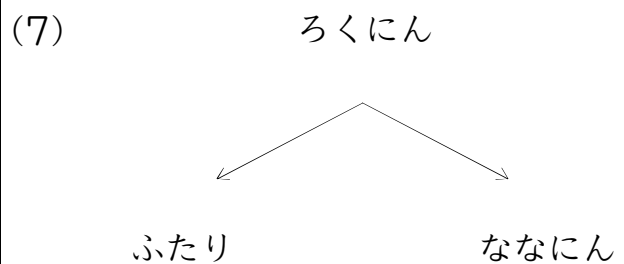
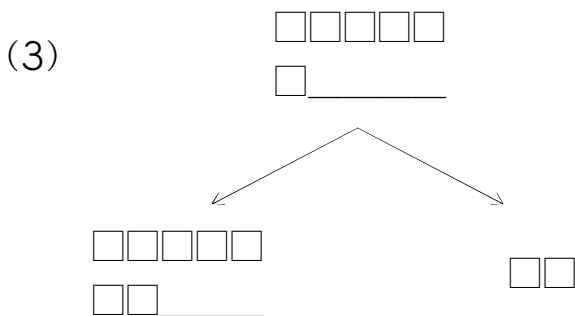
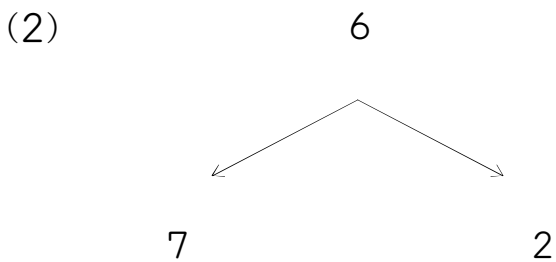
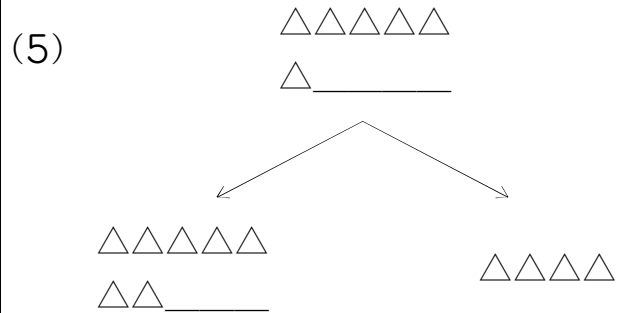
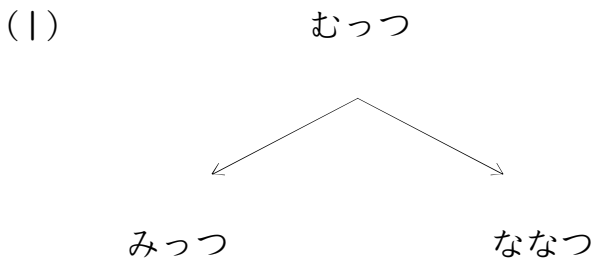
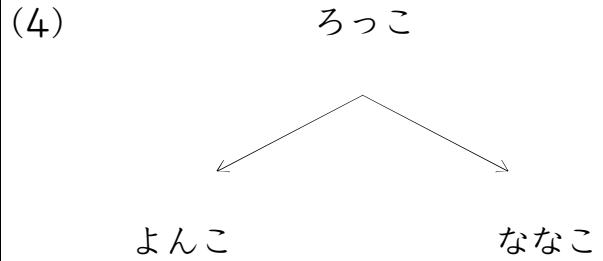
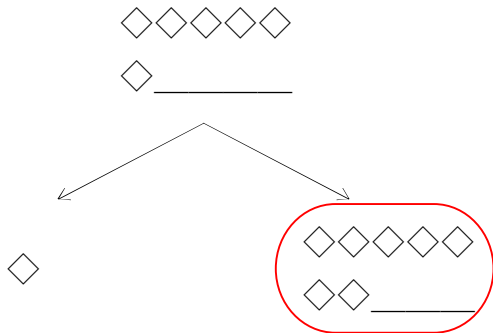
なまえ: _____

うえの かずの つぎは ひだりの かずかな? みぎの かずかな?
まる(○)をつけよう!



なまえ : _____

うえの かずの つぎは ひだりの かずかな? みぎの かずかな?
まる(○)をつけよう!

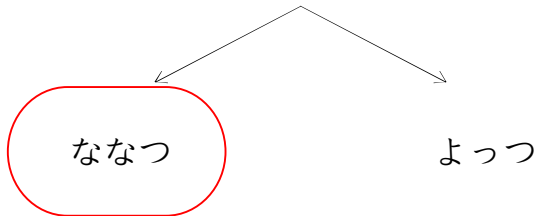


つぎのかずは?(6のつぎは)_01_問題

なまえ : _____

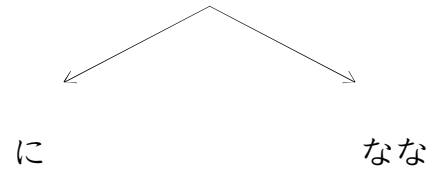
うえの かずの つぎは ひだりの かずかな? みぎの かずかな?
まる(○)をつけよう!

むっつ



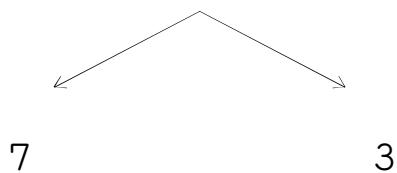
(4)

ろく



(1)

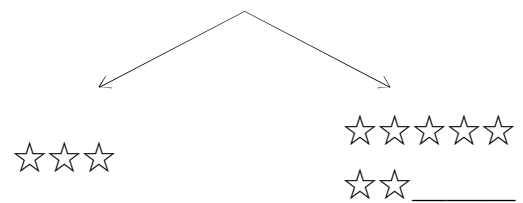
6



(5)

☆☆☆☆☆

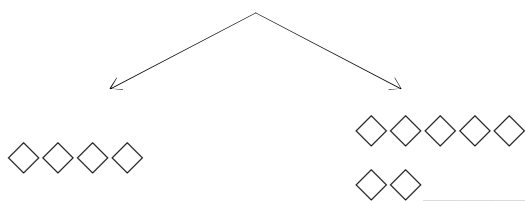
☆ _____



(2)

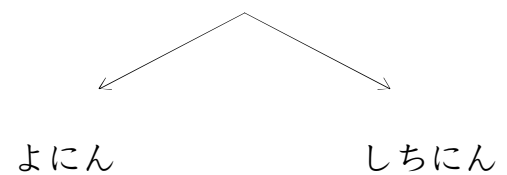
◇◇◇◇◇

◇ _____



(6)

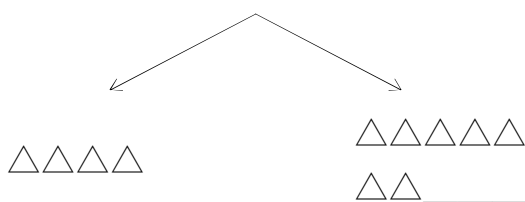
ろくにん



(3)

△△△△△

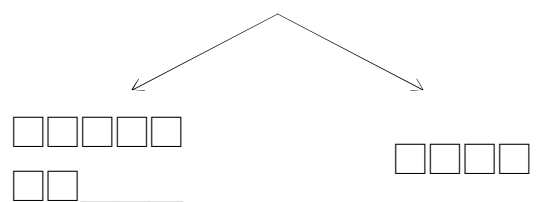
△ _____



(7)

□□□□□

□ _____



つぎのかずは?(6のつぎは)_01_問題

なまえ : _____

うえの かずの つぎは ひだりの かずかな? みぎの かずかな?
まる(○)をつけよう!

むっつ

ななつ

ふたつ

(4)

ろくにん

ふたり

しちにん

(1)

□□□□□

□ _____

□□□□□

□□ _____

□□

(5)

☆☆☆☆☆

☆ _____

☆☆☆☆☆

☆☆ _____

☆☆☆

(2)

△△△△△

△ _____

△△△△△

△△ _____

△△

(6)

6

7

2

(3)

◇◇◇◇◇

◇ _____

◇◇◇◇◇

◇◇ _____

◇◇

(7)

ろく

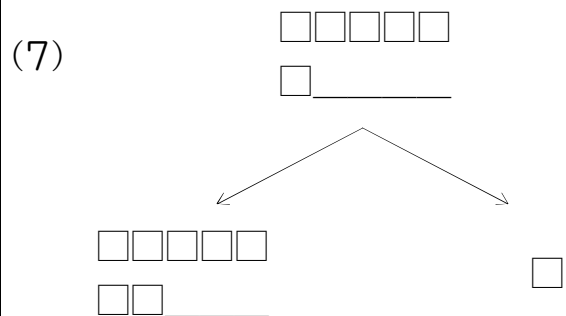
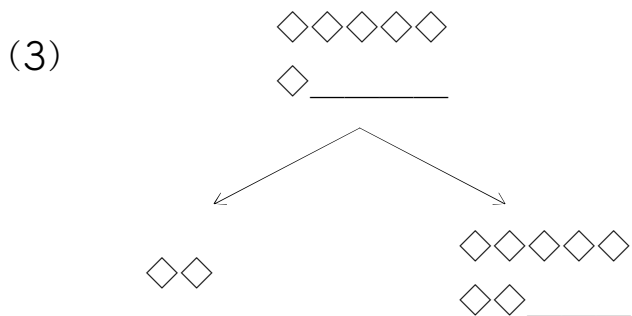
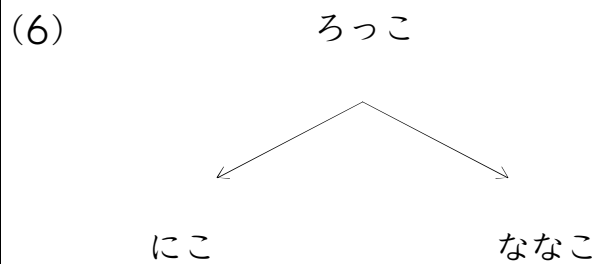
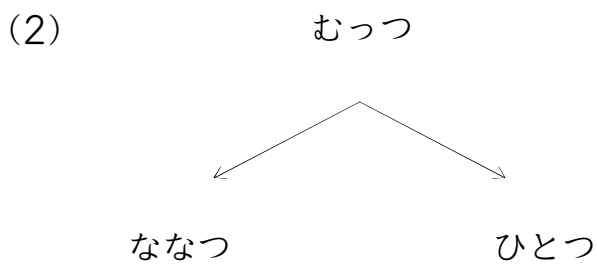
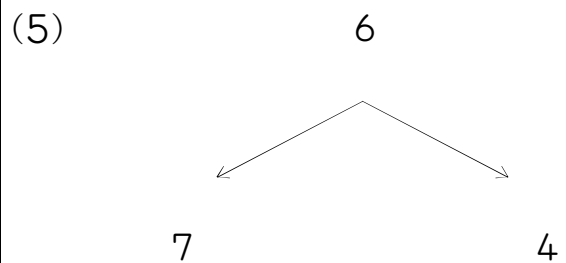
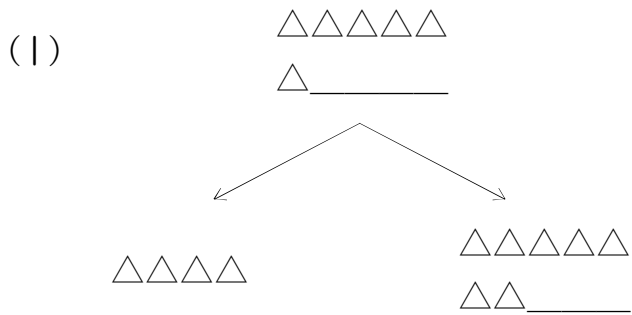
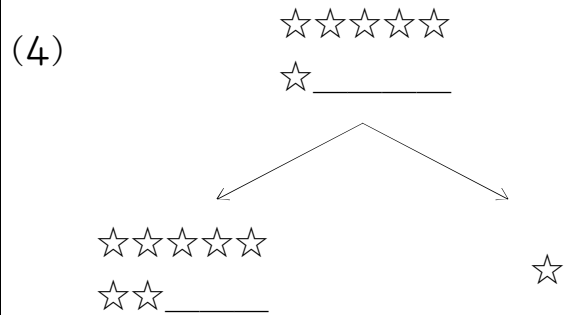
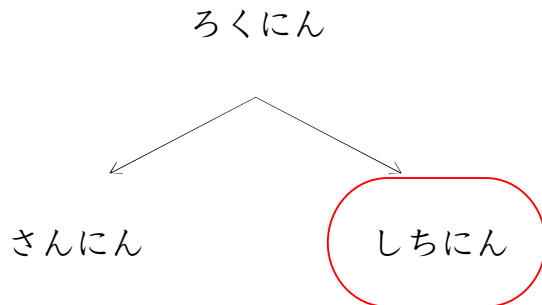
いち

なな

つぎのかずは?(6のつぎは)_01_問題

なまえ : _____

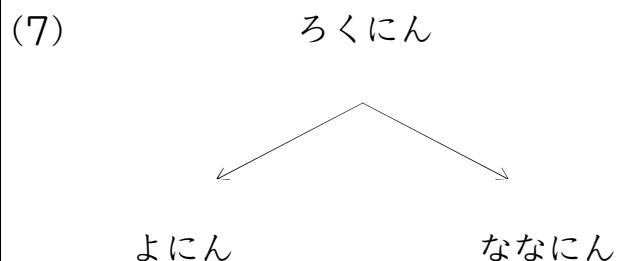
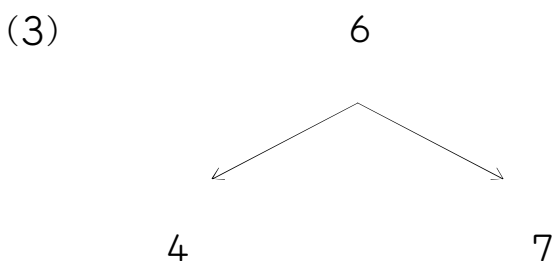
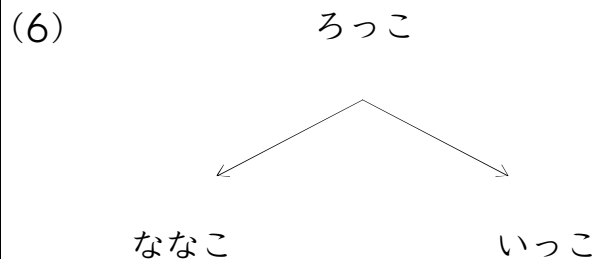
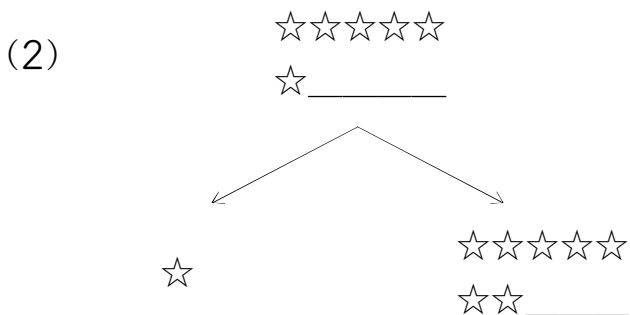
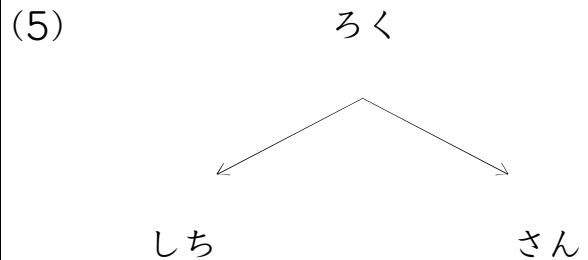
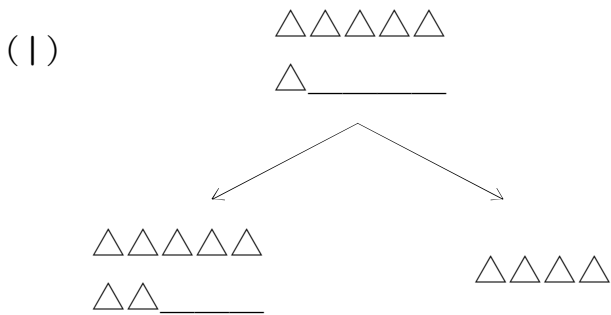
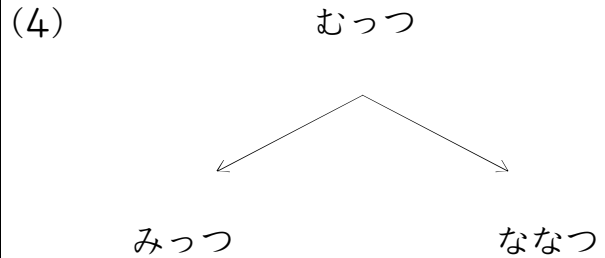
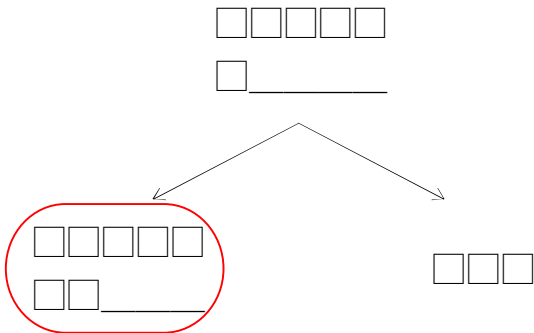
うえの かずの つぎは ひだりの かずかな? みぎの かずかな?
まる(○)をつけよう!



つぎのかずは?(6のつぎは)_01_問題

なまえ : _____

うえの かずの つぎは ひだりの かずかな? みぎの かずかな?
まる(○)をつけよう!



つぎのかずは?(6のつぎは)_01_問題

なまえ : _____

うえの かずの つぎは ひだりの かずかな? みぎの かずかな?
まる(○)をつけよう!

<p>()</p> <p style="text-align: center;">6</p> <p style="text-align: center;">7 3</p>	<p>(4)</p> <p style="text-align: center;">☆☆☆☆☆ ☆ _____</p> <p style="text-align: center;">☆☆☆☆ ☆☆☆☆☆ ☆☆ _____</p>
<p>(1)</p> <p style="text-align: center;">△△△△△ △ _____</p> <p style="text-align: center;">△△△△△ △△△△</p> <p style="text-align: center;">△△ _____</p>	<p>(5)</p> <p style="text-align: center;">□□□□□ □ _____</p> <p style="text-align: center;">□□ □□□□□ □□ _____</p>
<p>(2)</p> <p style="text-align: center;">むっつ</p> <p style="text-align: center;">ななつ ふたつ</p>	<p>(6)</p> <p style="text-align: center;">ろっこ</p> <p style="text-align: center;">ななこ よんこ</p>
<p>(3)</p> <p style="text-align: center;">ろくにん</p> <p style="text-align: center;">ななにん ふたり</p>	<p>(7)</p> <p style="text-align: center;">ろく</p> <p style="text-align: center;">なな いち</p>