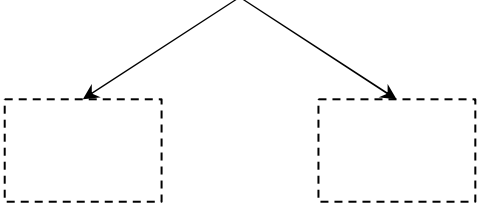
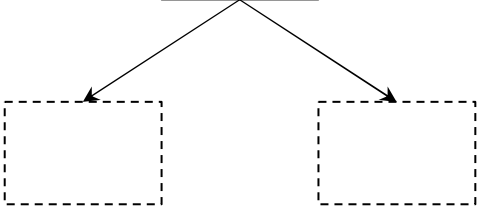
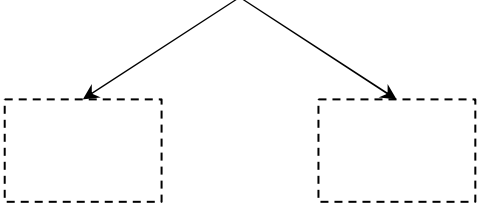


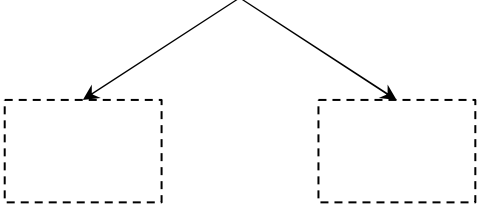
さくらんぼ引き算タイプC(引く数を分ける)\_問題

名前 : \_\_\_\_\_

$$\boxed{13} - \boxed{8} = \underline{\hspace{2cm}}$$


$$\boxed{11} - \boxed{3} = \underline{\hspace{2cm}}$$


$$\boxed{12} - \boxed{5} = \underline{\hspace{2cm}}$$


$$\boxed{14} - \boxed{6} = \underline{\hspace{2cm}}$$


さくらんぼ引き算タイプC(引く数を分ける)\_問題

名前 : \_\_\_\_\_

$$\boxed{14} - \boxed{8} = \underline{\hspace{2cm}}$$

$$\boxed{17} - \boxed{8} = \underline{\hspace{2cm}}$$

$$\boxed{13} - \boxed{8} = \underline{\hspace{2cm}}$$

$$\boxed{11} - \boxed{3} = \underline{\hspace{2cm}}$$

さくらんぼ引き算タイプC(引く数を分ける)\_問題

名前 : \_\_\_\_\_

$$\boxed{14} - \boxed{9} = \underline{\hspace{2cm}}$$

$$\boxed{16} - \boxed{8} = \underline{\hspace{2cm}}$$

$$\boxed{17} - \boxed{9} = \underline{\hspace{2cm}}$$

$$\boxed{15} - \boxed{6} = \underline{\hspace{2cm}}$$

さくらんぼ引き算タイプC(引く数を分ける)\_問題

名前 : \_\_\_\_\_

$$\boxed{14} - \boxed{9} = \underline{\hspace{2cm}}$$

$$\boxed{11} - \boxed{6} = \underline{\hspace{2cm}}$$

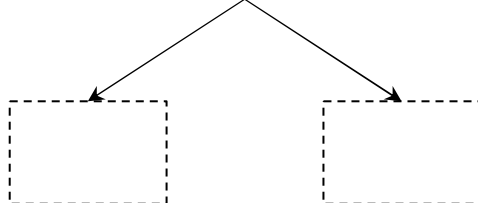
$$\boxed{13} - \boxed{6} = \underline{\hspace{2cm}}$$

$$\boxed{16} - \boxed{7} = \underline{\hspace{2cm}}$$

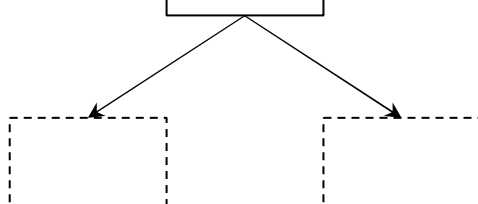
さくらんぼ引き算タイプC(引く数を分ける)\_問題

名前 : \_\_\_\_\_

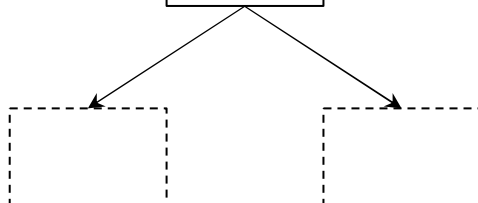
$$\boxed{18} - \boxed{9} = \underline{\hspace{2cm}}$$



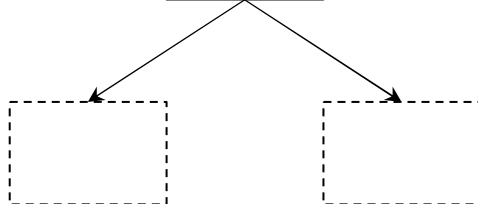
$$\boxed{14} - \boxed{5} = \underline{\hspace{2cm}}$$



$$\boxed{11} - \boxed{5} = \underline{\hspace{2cm}}$$



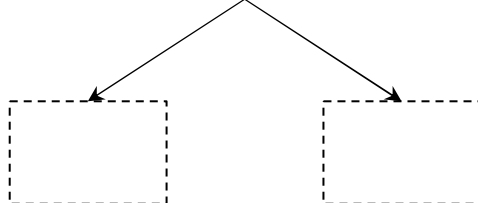
$$\boxed{15} - \boxed{9} = \underline{\hspace{2cm}}$$



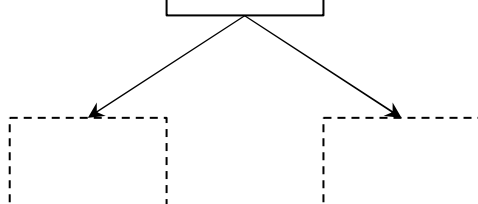
さくらんぼ引き算タイプC(引く数を分ける)\_問題

名前 : \_\_\_\_\_

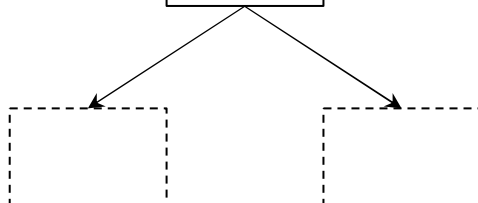
$$\boxed{15} - \boxed{8} = \underline{\hspace{2cm}}$$



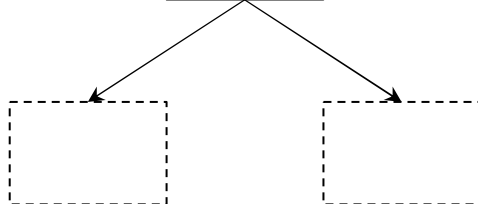
$$\boxed{11} - \boxed{3} = \underline{\hspace{2cm}}$$



$$\boxed{13} - \boxed{6} = \underline{\hspace{2cm}}$$

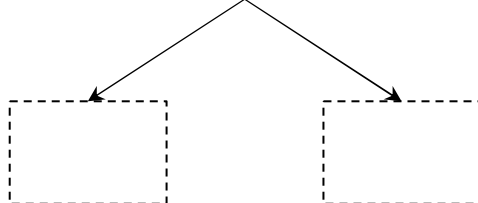


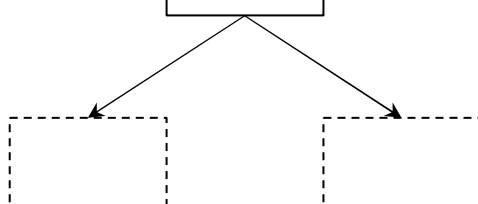
$$\boxed{16} - \boxed{8} = \underline{\hspace{2cm}}$$

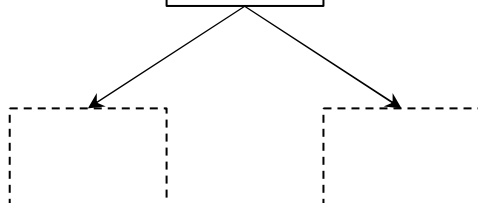


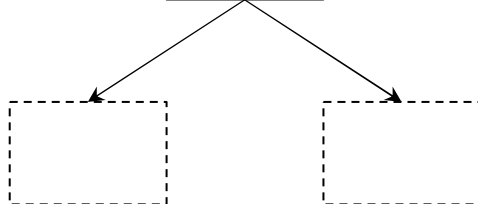
さくらんぼ引き算タイプC(引く数を分ける)\_問題

名前 : \_\_\_\_\_

$$\boxed{13} - \boxed{6} = \underline{\hspace{2cm}}$$


$$\boxed{15} - \boxed{9} = \underline{\hspace{2cm}}$$


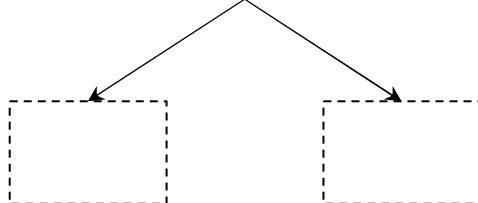
$$\boxed{14} - \boxed{9} = \underline{\hspace{2cm}}$$


$$\boxed{12} - \boxed{5} = \underline{\hspace{2cm}}$$


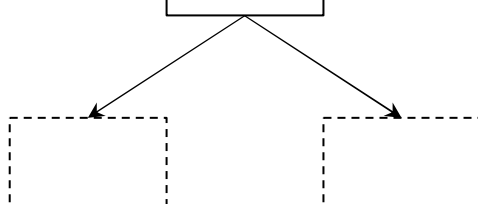
さくらんぼ引き算タイプC(引く数を分ける)\_問題

名前 : \_\_\_\_\_

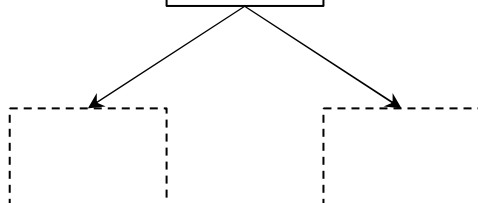
$$\boxed{14} - \boxed{5} = \underline{\hspace{2cm}}$$



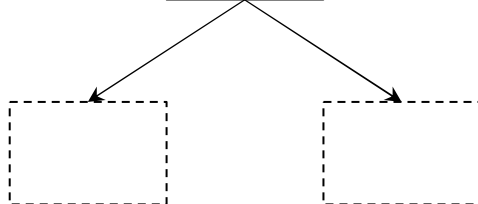
$$\boxed{17} - \boxed{8} = \underline{\hspace{2cm}}$$



$$\boxed{16} - \boxed{9} = \underline{\hspace{2cm}}$$



$$\boxed{13} - \boxed{7} = \underline{\hspace{2cm}}$$





さくらんぼ引き算タイプC(引く数を分ける)\_問題

名前 : \_\_\_\_\_

$$\boxed{11} - \boxed{7} = \underline{\hspace{2cm}}$$

$$\boxed{17} - \boxed{8} = \underline{\hspace{2cm}}$$

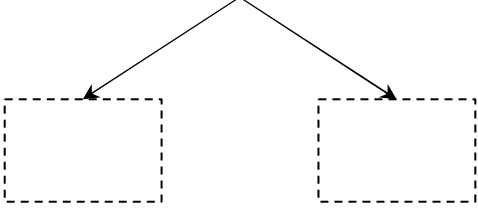
$$\boxed{16} - \boxed{9} = \underline{\hspace{2cm}}$$

$$\boxed{15} - \boxed{7} = \underline{\hspace{2cm}}$$

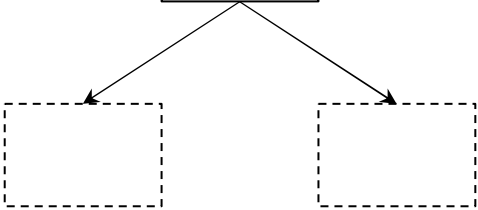
さくらんぼ引き算タイプC(引く数を分ける)\_問題

名前 : \_\_\_\_\_

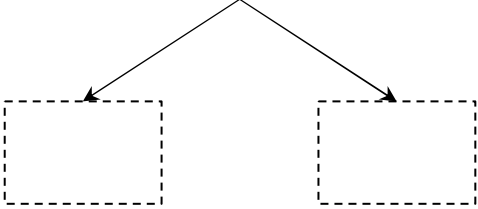
$$\boxed{14} - \boxed{8} = \underline{\hspace{2cm}}$$



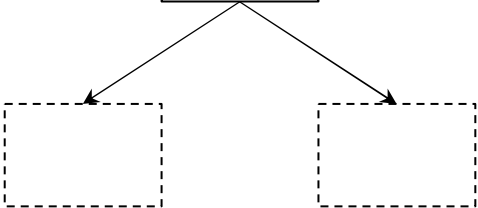
$$\boxed{18} - \boxed{9} = \underline{\hspace{2cm}}$$



$$\boxed{15} - \boxed{6} = \underline{\hspace{2cm}}$$



$$\boxed{16} - \boxed{7} = \underline{\hspace{2cm}}$$



さくらんぼ引き算タイプC(引く数を分ける)\_問題

名前 : \_\_\_\_\_

$$\boxed{16} - \boxed{8} = \underline{\hspace{2cm}}$$

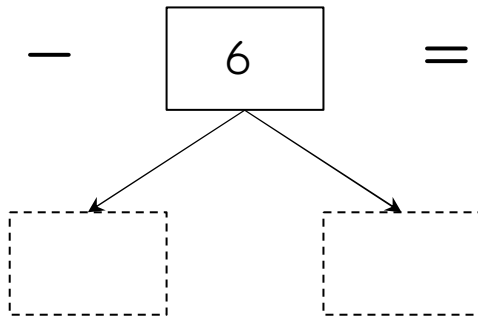
$$\boxed{11} - \boxed{6} = \underline{\hspace{2cm}}$$

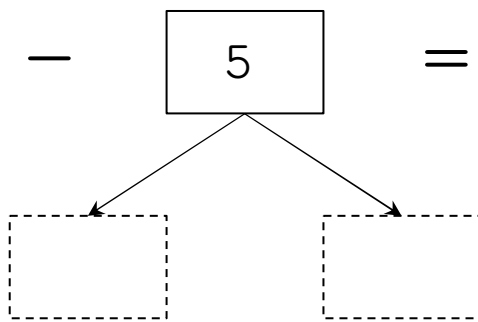
$$\boxed{15} - \boxed{9} = \underline{\hspace{2cm}}$$

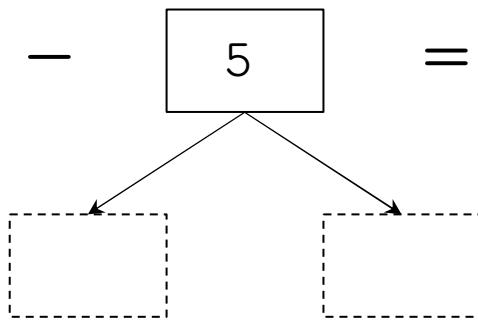
$$\boxed{18} - \boxed{9} = \underline{\hspace{2cm}}$$

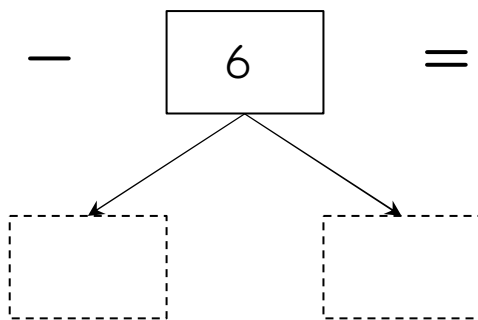
さくらんぼ引き算タイプC(引く数を分ける)\_問題

名前 : \_\_\_\_\_

$$\boxed{13} - \boxed{6} = \underline{\hspace{2cm}}$$


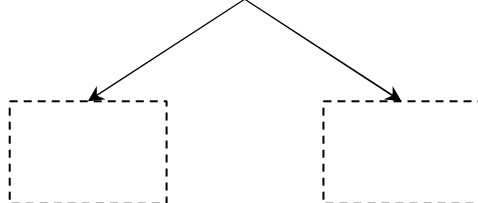
$$\boxed{12} - \boxed{5} = \underline{\hspace{2cm}}$$


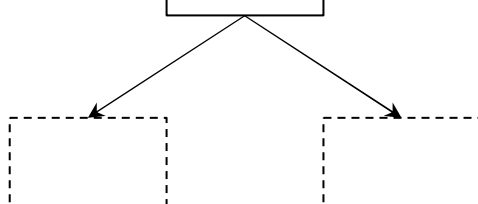
$$\boxed{11} - \boxed{5} = \underline{\hspace{2cm}}$$


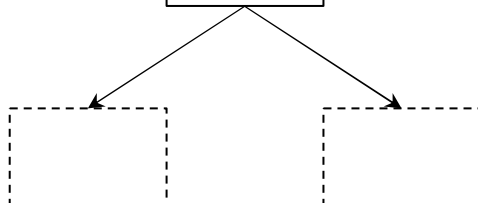
$$\boxed{15} - \boxed{6} = \underline{\hspace{2cm}}$$


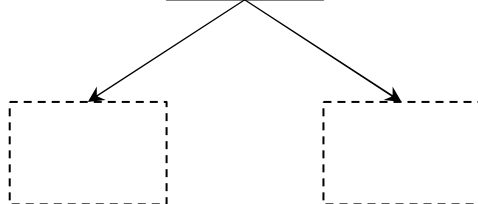
さくらんぼ引き算タイプC(引く数を分ける)\_問題

名前 : \_\_\_\_\_

$$\boxed{11} - \boxed{8} = \underline{\hspace{2cm}}$$


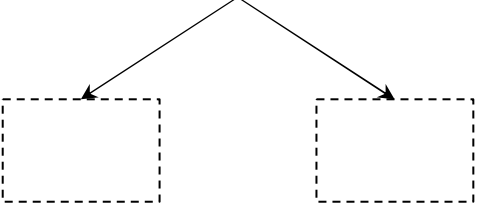
$$\boxed{18} - \boxed{9} = \underline{\hspace{2cm}}$$


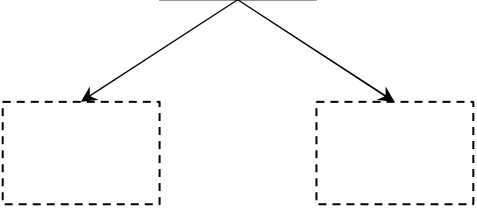
$$\boxed{15} - \boxed{7} = \underline{\hspace{2cm}}$$


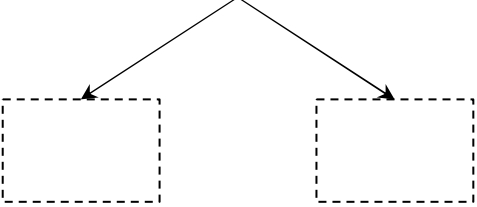
$$\boxed{13} - \boxed{6} = \underline{\hspace{2cm}}$$


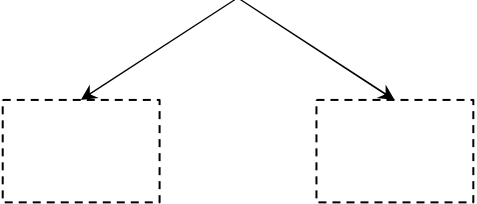
さくらんぼ引き算タイプC(引く数を分ける)\_問題

名前 : \_\_\_\_\_

$$\boxed{11} - \boxed{5} = \underline{\hspace{2cm}}$$


$$\boxed{15} - \boxed{7} = \underline{\hspace{2cm}}$$


$$\boxed{17} - \boxed{8} = \underline{\hspace{2cm}}$$


$$\boxed{14} - \boxed{7} = \underline{\hspace{2cm}}$$


さくらんぼ引き算タイプC(引く数を分ける)\_問題

名前 : \_\_\_\_\_

$$\boxed{11} - \boxed{6} = \underline{\hspace{2cm}}$$

$$\boxed{16} - \boxed{8} = \underline{\hspace{2cm}}$$

$$\boxed{12} - \boxed{6} = \underline{\hspace{2cm}}$$

$$\boxed{13} - \boxed{5} = \underline{\hspace{2cm}}$$

さくらんぼ引き算タイプC(引く数を分ける)\_問題

名前 : \_\_\_\_\_

$$\boxed{11} - \boxed{7} = \underline{\hspace{2cm}}$$

$$\boxed{18} - \boxed{9} = \underline{\hspace{2cm}}$$

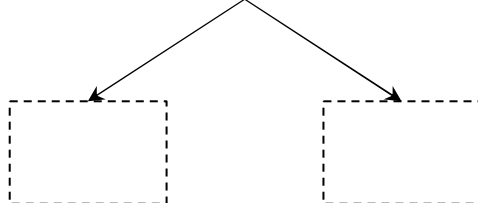
$$\boxed{14} - \boxed{8} = \underline{\hspace{2cm}}$$

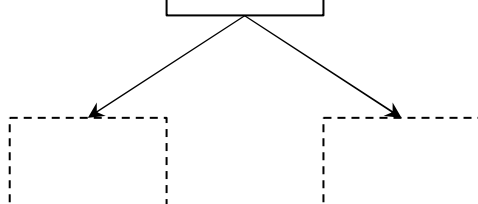
$$\boxed{15} - \boxed{7} = \underline{\hspace{2cm}}$$

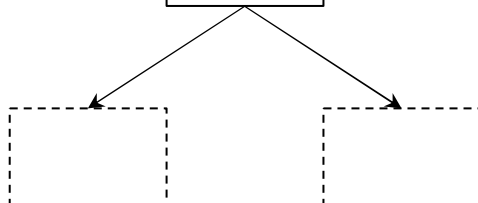


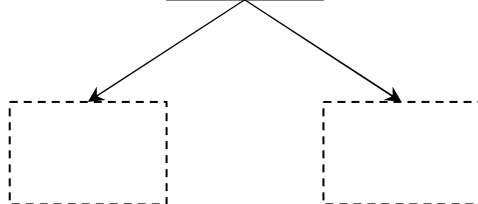
さくらんぼ引き算タイプC(引く数を分ける)\_問題

名前 : \_\_\_\_\_

$$\boxed{14} - \boxed{6} = \underline{\hspace{2cm}}$$


$$\boxed{11} - \boxed{2} = \underline{\hspace{2cm}}$$


$$\boxed{16} - \boxed{7} = \underline{\hspace{2cm}}$$


$$\boxed{18} - \boxed{9} = \underline{\hspace{2cm}}$$


さくらんぼ引き算タイプC(引く数を分ける)\_問題

名前 : \_\_\_\_\_

$$\boxed{14} - \boxed{9} = \underline{\hspace{2cm}}$$

$$\boxed{16} - \boxed{9} = \underline{\hspace{2cm}}$$

$$\boxed{13} - \boxed{4} = \underline{\hspace{2cm}}$$

$$\boxed{18} - \boxed{9} = \underline{\hspace{2cm}}$$

さくらんぼ引き算タイプC(引く数を分ける)\_問題

名前 : \_\_\_\_\_

$$\boxed{11} - \boxed{3} = \underline{\hspace{2cm}}$$

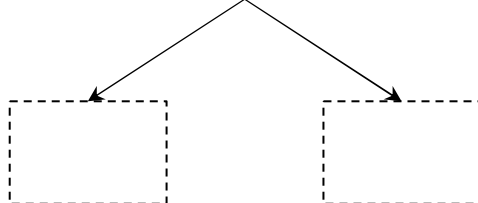
$$\boxed{16} - \boxed{9} = \underline{\hspace{2cm}}$$

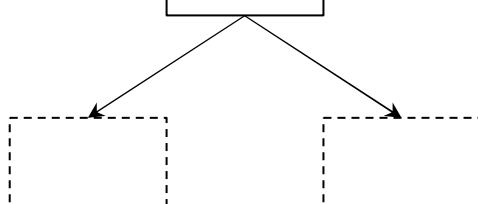
$$\boxed{15} - \boxed{9} = \underline{\hspace{2cm}}$$

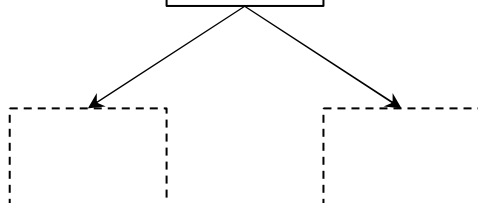
$$\boxed{18} - \boxed{9} = \underline{\hspace{2cm}}$$

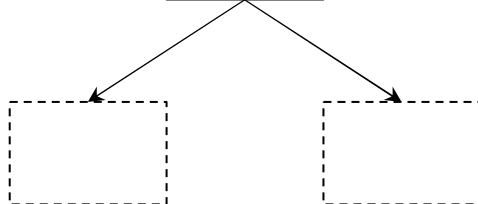
さくらんぼ引き算タイプC(引く数を分ける)\_問題

名前 : \_\_\_\_\_

$$\boxed{17} - \boxed{8} = \underline{\hspace{2cm}}$$


$$\boxed{14} - \boxed{9} = \underline{\hspace{2cm}}$$


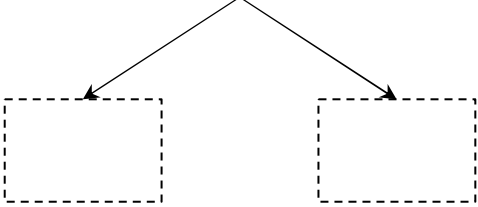
$$\boxed{15} - \boxed{9} = \underline{\hspace{2cm}}$$


$$\boxed{12} - \boxed{4} = \underline{\hspace{2cm}}$$


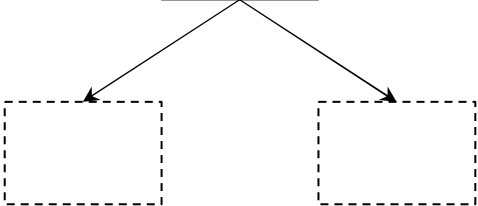
さくらんぼ引き算タイプC(引く数を分ける)\_問題

名前 : \_\_\_\_\_

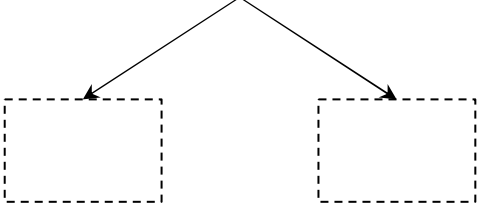
$$\boxed{16} - \boxed{7} = \underline{\hspace{2cm}}$$



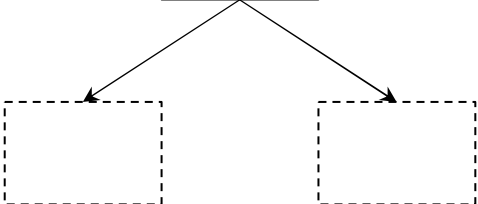
$$\boxed{12} - \boxed{5} = \underline{\hspace{2cm}}$$



$$\boxed{18} - \boxed{9} = \underline{\hspace{2cm}}$$



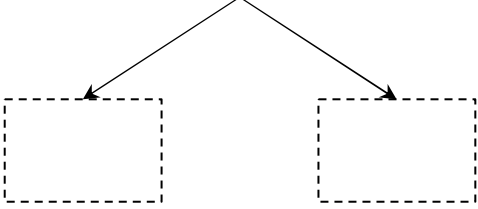
$$\boxed{14} - \boxed{9} = \underline{\hspace{2cm}}$$



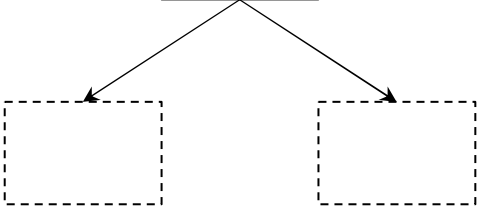
さくらんぼ引き算タイプC(引く数を分ける)\_問題

名前 : \_\_\_\_\_

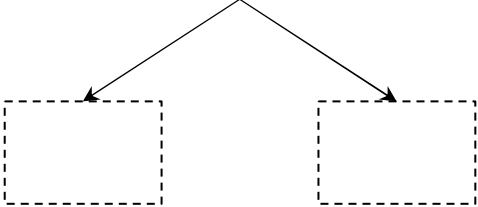
$$\boxed{18} - \boxed{9} = \underline{\hspace{2cm}}$$



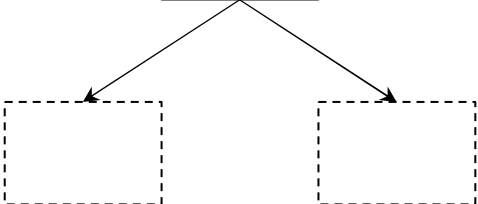
$$\boxed{11} - \boxed{7} = \underline{\hspace{2cm}}$$



$$\boxed{15} - \boxed{9} = \underline{\hspace{2cm}}$$

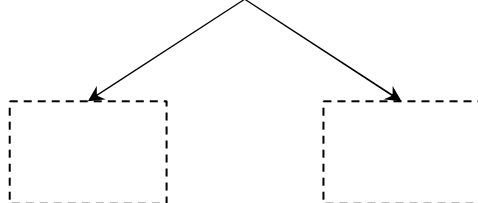


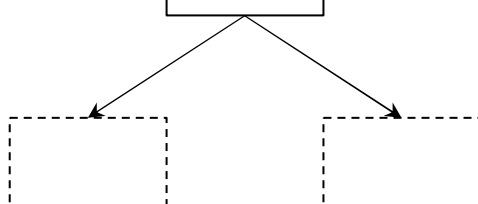
$$\boxed{16} - \boxed{7} = \underline{\hspace{2cm}}$$

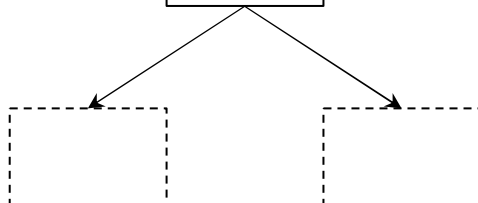


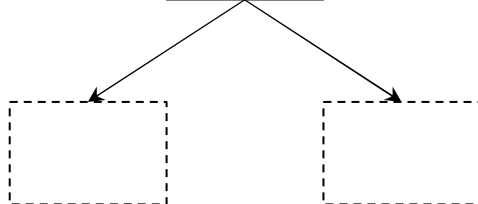
さくらんぼ引き算タイプC(引く数を分ける)\_問題

名前 : \_\_\_\_\_

$$\boxed{13} - \boxed{9} = \underline{\hspace{2cm}}$$


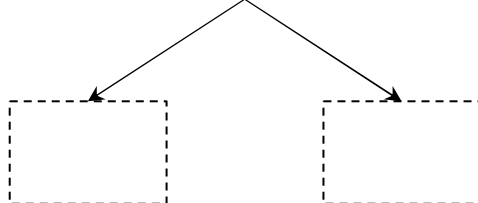
$$\boxed{11} - \boxed{7} = \underline{\hspace{2cm}}$$


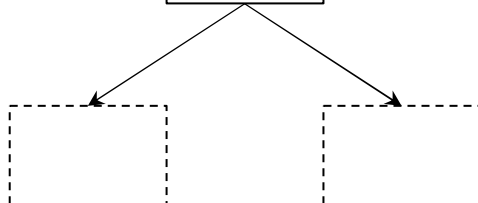
$$\boxed{18} - \boxed{9} = \underline{\hspace{2cm}}$$


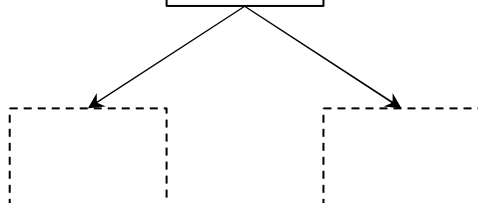
$$\boxed{15} - \boxed{6} = \underline{\hspace{2cm}}$$


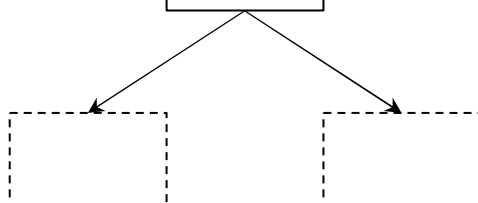
さくらんぼ引き算タイプC(引く数を分ける)\_問題

名前 : \_\_\_\_\_

$$\boxed{13} - \boxed{8} = \underline{\hspace{2cm}}$$


$$\boxed{11} - \boxed{8} = \underline{\hspace{2cm}}$$


$$\boxed{14} - \boxed{5} = \underline{\hspace{2cm}}$$


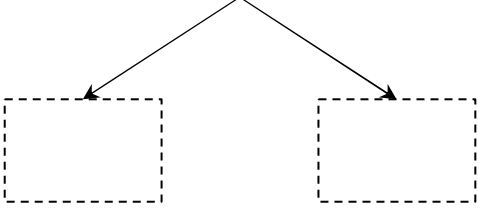
$$\boxed{17} - \boxed{9} = \underline{\hspace{2cm}}$$




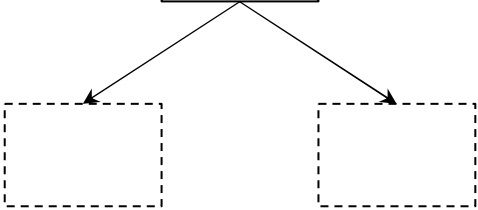
さくらんぼ引き算タイプC(引く数を分ける)\_問題

名前 : \_\_\_\_\_

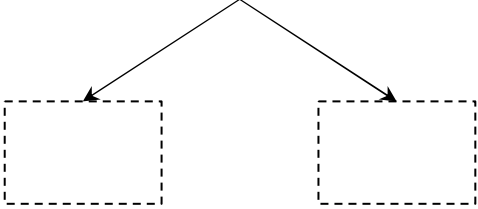
$$\boxed{11} - \boxed{4} = \underline{\hspace{2cm}}$$



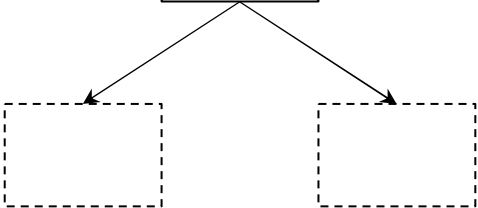
$$\boxed{13} - \boxed{7} = \underline{\hspace{2cm}}$$



$$\boxed{12} - \boxed{8} = \underline{\hspace{2cm}}$$



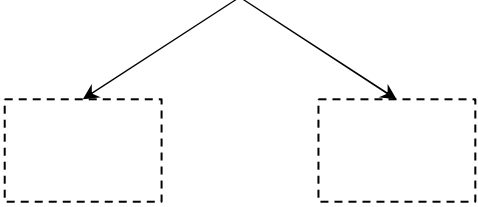
$$\boxed{16} - \boxed{9} = \underline{\hspace{2cm}}$$



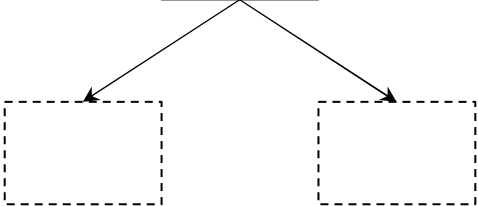
さくらんぼ引き算タイプC(引く数を分ける)\_問題

名前 : \_\_\_\_\_

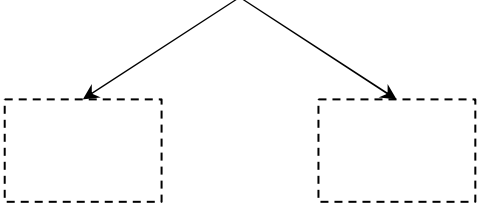
$$\boxed{11} - \boxed{8} = \underline{\hspace{2cm}}$$



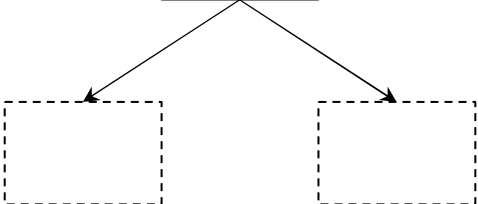
$$\boxed{15} - \boxed{7} = \underline{\hspace{2cm}}$$



$$\boxed{18} - \boxed{9} = \underline{\hspace{2cm}}$$



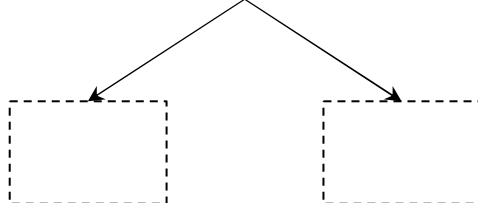
$$\boxed{14} - \boxed{7} = \underline{\hspace{2cm}}$$



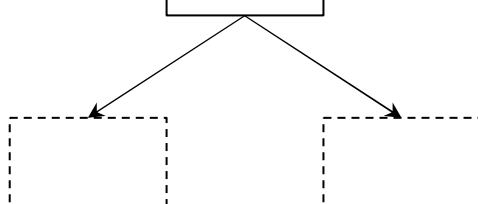
さくらんぼ引き算タイプC(引く数を分ける)\_問題

名前 : \_\_\_\_\_

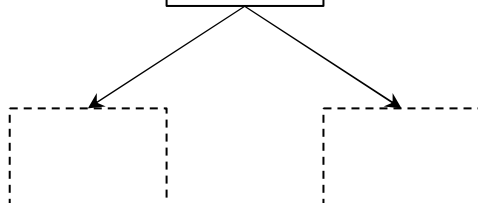
$$\boxed{13} - \boxed{4} = \underline{\hspace{2cm}}$$



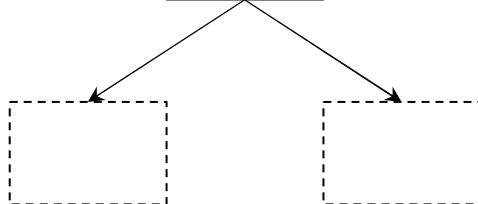
$$\boxed{12} - \boxed{6} = \underline{\hspace{2cm}}$$



$$\boxed{15} - \boxed{8} = \underline{\hspace{2cm}}$$



$$\boxed{16} - \boxed{7} = \underline{\hspace{2cm}}$$



さくらんぼ引き算タイプC(引く数を分ける)\_問題

名前 : \_\_\_\_\_

$$\boxed{17} - \boxed{8} = \underline{\hspace{2cm}}$$


$$\boxed{12} - \boxed{3} = \underline{\hspace{2cm}}$$

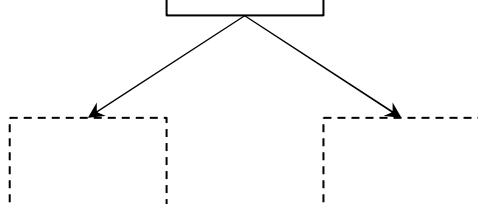
$$\boxed{16} - \boxed{8} = \underline{\hspace{2cm}}$$

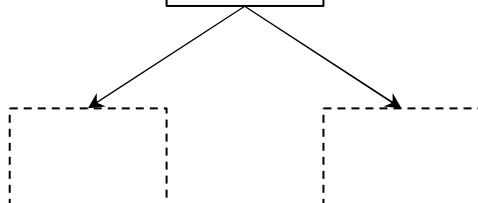
$$\boxed{15} - \boxed{8} = \underline{\hspace{2cm}}$$

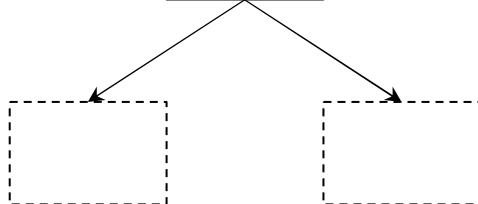
さくらんぼ引き算タイプC(引く数を分ける)\_問題

名前 : \_\_\_\_\_

$$\boxed{18} - \boxed{9} = \underline{\hspace{2cm}}$$


$$\boxed{12} - \boxed{4} = \underline{\hspace{2cm}}$$


$$\boxed{16} - \boxed{9} = \underline{\hspace{2cm}}$$


$$\boxed{13} - \boxed{9} = \underline{\hspace{2cm}}$$


さくらんぼ引き算タイプC(引く数を分ける)\_問題

名前 : \_\_\_\_\_

$$\boxed{11} - \boxed{4} = \underline{\hspace{2cm}}$$

$$\boxed{13} - \boxed{9} = \underline{\hspace{2cm}}$$

$$\boxed{15} - \boxed{6} = \underline{\hspace{2cm}}$$

$$\boxed{12} - \boxed{7} = \underline{\hspace{2cm}}$$

さくらんぼ引き算タイプC(引く数を分ける)\_問題

名前 : \_\_\_\_\_

$$\boxed{11} - \boxed{7} = \underline{\hspace{2cm}}$$

$$\boxed{16} - \boxed{9} = \underline{\hspace{2cm}}$$

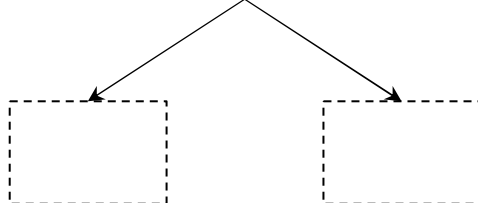
$$\boxed{18} - \boxed{9} = \underline{\hspace{2cm}}$$

$$\boxed{13} - \boxed{7} = \underline{\hspace{2cm}}$$

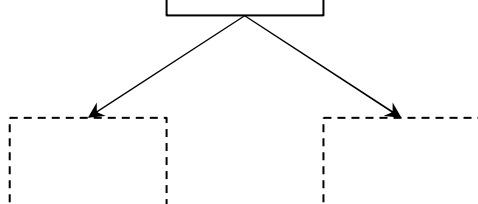
さくらんぼ引き算タイプC(引く数を分ける)\_問題

名前 : \_\_\_\_\_

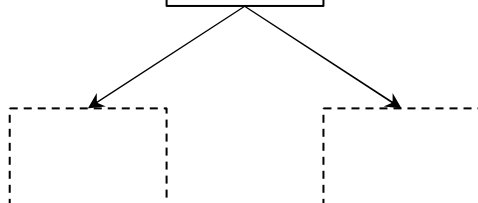
$$\boxed{13} - \boxed{9} = \underline{\hspace{2cm}}$$



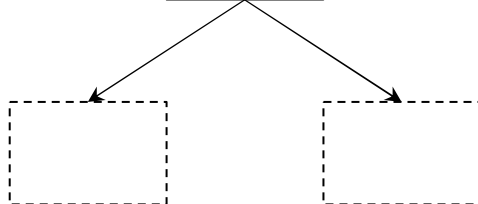
$$\boxed{11} - \boxed{6} = \underline{\hspace{2cm}}$$



$$\boxed{18} - \boxed{9} = \underline{\hspace{2cm}}$$



$$\boxed{15} - \boxed{7} = \underline{\hspace{2cm}}$$





さくらんぼ引き算タイプC(引く数を分ける)\_問題

名前 : \_\_\_\_\_

$$\boxed{18} - \boxed{9} = \underline{\hspace{2cm}}$$

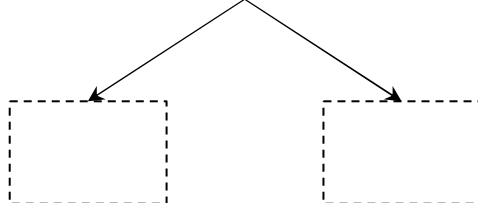
$$\boxed{15} - \boxed{6} = \underline{\hspace{2cm}}$$

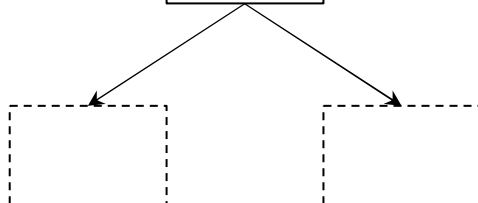
$$\boxed{16} - \boxed{9} = \underline{\hspace{2cm}}$$

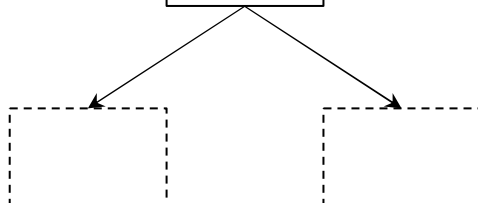
$$\boxed{17} - \boxed{8} = \underline{\hspace{2cm}}$$

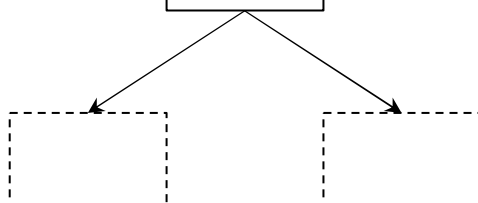
さくらんぼ引き算タイプC(引く数を分ける)\_問題

名前 : \_\_\_\_\_

$$\boxed{17} - \boxed{9} = \underline{\hspace{2cm}}$$


$$\boxed{15} - \boxed{9} = \underline{\hspace{2cm}}$$


$$\boxed{18} - \boxed{9} = \underline{\hspace{2cm}}$$


$$\boxed{14} - \boxed{6} = \underline{\hspace{2cm}}$$


さくらんぼ引き算タイプC(引く数を分ける)\_問題

名前 : \_\_\_\_\_

$$\boxed{12} - \boxed{6} = \underline{\hspace{2cm}}$$

$$\boxed{14} - \boxed{7} = \underline{\hspace{2cm}}$$

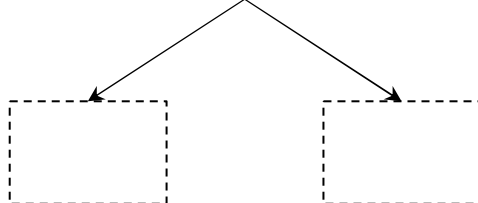
$$\boxed{18} - \boxed{9} = \underline{\hspace{2cm}}$$

$$\boxed{11} - \boxed{9} = \underline{\hspace{2cm}}$$

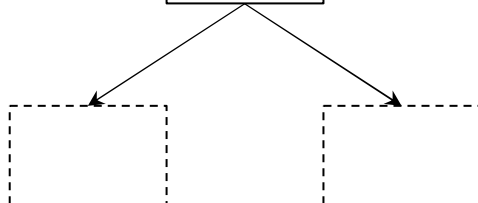
さくらんぼ引き算タイプC(引く数を分ける)\_問題

名前 : \_\_\_\_\_

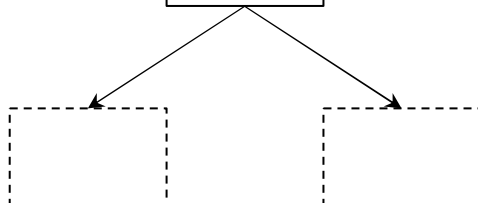
$$\boxed{11} - \boxed{4} = \underline{\hspace{2cm}}$$



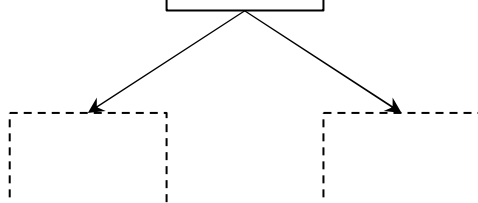
$$\boxed{16} - \boxed{7} = \underline{\hspace{2cm}}$$



$$\boxed{17} - \boxed{8} = \underline{\hspace{2cm}}$$



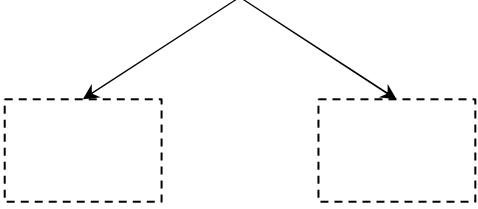
$$\boxed{13} - \boxed{4} = \underline{\hspace{2cm}}$$



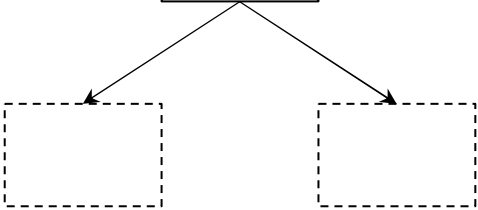
さくらんぼ引き算タイプC(引く数を分ける)\_問題

名前 : \_\_\_\_\_

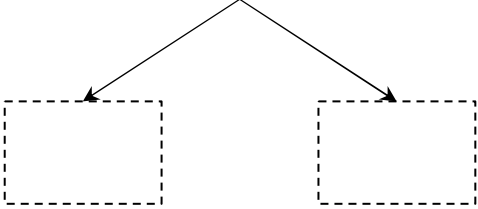
$$\boxed{12} - \boxed{9} = \underline{\hspace{2cm}}$$



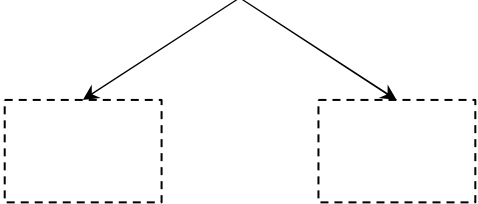
$$\boxed{17} - \boxed{9} = \underline{\hspace{2cm}}$$



$$\boxed{14} - \boxed{8} = \underline{\hspace{2cm}}$$



$$\boxed{13} - \boxed{5} = \underline{\hspace{2cm}}$$



さくらんぼ引き算タイプC(引く数を分ける)\_問題

名前 : \_\_\_\_\_

$$\boxed{15} - \boxed{7} = \underline{\hspace{2cm}}$$

$$\boxed{16} - \boxed{7} = \underline{\hspace{2cm}}$$

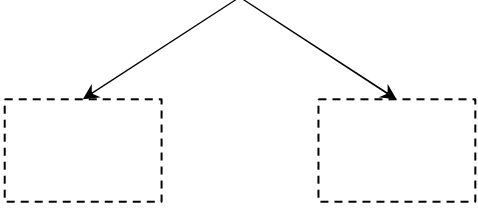
$$\boxed{18} - \boxed{9} = \underline{\hspace{2cm}}$$

$$\boxed{17} - \boxed{8} = \underline{\hspace{2cm}}$$

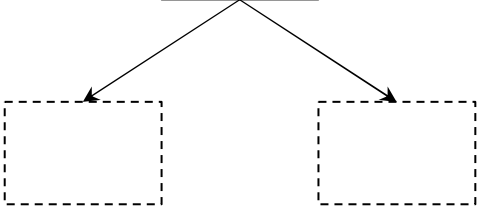
さくらんぼ引き算タイプC(引く数を分ける)\_問題

名前 : \_\_\_\_\_

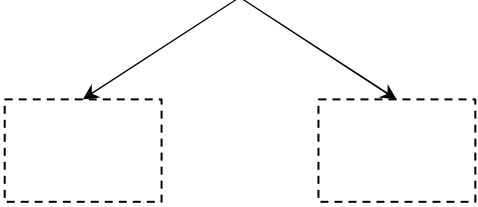
$$\boxed{16} - \boxed{9} = \underline{\hspace{2cm}}$$



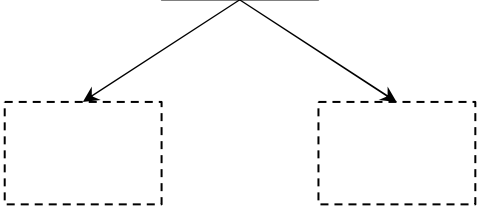
$$\boxed{13} - \boxed{7} = \underline{\hspace{2cm}}$$



$$\boxed{17} - \boxed{9} = \underline{\hspace{2cm}}$$



$$\boxed{12} - \boxed{7} = \underline{\hspace{2cm}}$$



さくらんぼ引き算タイプC(引く数を分ける)\_問題

名前 : \_\_\_\_\_

$$\boxed{11} - \boxed{7} = \underline{\hspace{2cm}}$$

$$\boxed{17} - \boxed{8} = \underline{\hspace{2cm}}$$

$$\boxed{14} - \boxed{5} = \underline{\hspace{2cm}}$$

$$\boxed{12} - \boxed{4} = \underline{\hspace{2cm}}$$



さくらんぼ引き算タイプC(引く数を分ける)\_問題

名前 : \_\_\_\_\_

$$\boxed{12} - \boxed{3} = \underline{\hspace{2cm}}$$

$$\boxed{13} - \boxed{6} = \underline{\hspace{2cm}}$$

$$\boxed{11} - \boxed{3} = \underline{\hspace{2cm}}$$

$$\boxed{18} - \boxed{9} = \underline{\hspace{2cm}}$$

さくらんぼ引き算タイプC(引く数を分ける)\_問題

名前 : \_\_\_\_\_

$$\boxed{11} - \boxed{6} = \underline{\hspace{2cm}}$$

$$\boxed{14} - \boxed{9} = \underline{\hspace{2cm}}$$

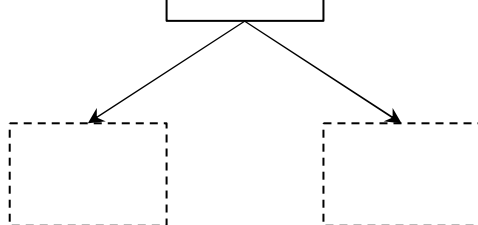
$$\boxed{13} - \boxed{5} = \underline{\hspace{2cm}}$$

$$\boxed{15} - \boxed{7} = \underline{\hspace{2cm}}$$

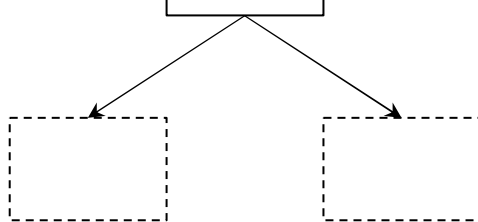
さくらんぼ引き算タイプC(引く数を分ける)\_問題

名前 : \_\_\_\_\_

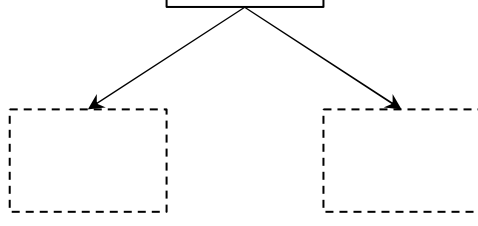
$$\boxed{14} - \boxed{9} = \underline{\hspace{2cm}}$$



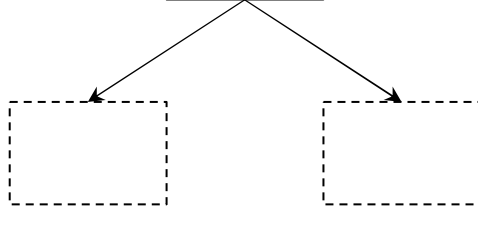
$$\boxed{16} - \boxed{8} = \underline{\hspace{2cm}}$$



$$\boxed{17} - \boxed{8} = \underline{\hspace{2cm}}$$



$$\boxed{18} - \boxed{9} = \underline{\hspace{2cm}}$$



さくらんぼ引き算タイプC(引く数を分ける)\_問題

名前 : \_\_\_\_\_

$$\boxed{12} - \boxed{8} = \underline{\hspace{2cm}}$$

$$\boxed{16} - \boxed{7} = \underline{\hspace{2cm}}$$

$$\boxed{18} - \boxed{9} = \underline{\hspace{2cm}}$$

$$\boxed{17} - \boxed{9} = \underline{\hspace{2cm}}$$

さくらんぼ引き算タイプC(引く数を分ける)\_問題

名前 : \_\_\_\_\_

$$\boxed{17} - \boxed{9} = \underline{\hspace{2cm}}$$

$$\boxed{16} - \boxed{9} = \underline{\hspace{2cm}}$$

$$\boxed{15} - \boxed{8} = \underline{\hspace{2cm}}$$

$$\boxed{13} - \boxed{8} = \underline{\hspace{2cm}}$$

さくらんぼ引き算タイプC(引く数を分ける)\_問題

名前 : \_\_\_\_\_

$$\boxed{17} - \boxed{9} = \underline{\hspace{2cm}}$$

$$\boxed{11} - \boxed{4} = \underline{\hspace{2cm}}$$

$$\boxed{14} - \boxed{7} = \underline{\hspace{2cm}}$$

$$\boxed{18} - \boxed{9} = \underline{\hspace{2cm}}$$

さくらんぼ引き算タイプC(引く数を分ける)\_問題

名前 : \_\_\_\_\_

$$\boxed{11} - \boxed{5} = \underline{\hspace{2cm}}$$

$$\boxed{17} - \boxed{9} = \underline{\hspace{2cm}}$$

$$\boxed{12} - \boxed{4} = \underline{\hspace{2cm}}$$

$$\boxed{14} - \boxed{7} = \underline{\hspace{2cm}}$$

さくらんぼ引き算タイプC(引く数を分ける)\_問題

名前 : \_\_\_\_\_

$$\boxed{16} - \boxed{7} = \underline{\hspace{2cm}}$$

$$\boxed{17} - \boxed{9} = \underline{\hspace{2cm}}$$

$$\boxed{12} - \boxed{3} = \underline{\hspace{2cm}}$$

$$\boxed{18} - \boxed{9} = \underline{\hspace{2cm}}$$



さくらんぼ引き算タイプC(引く数を分ける)\_問題

名前 : \_\_\_\_\_

$$\boxed{12} - \boxed{9} = \underline{\hspace{2cm}}$$

$$\boxed{17} - \boxed{9} = \underline{\hspace{2cm}}$$

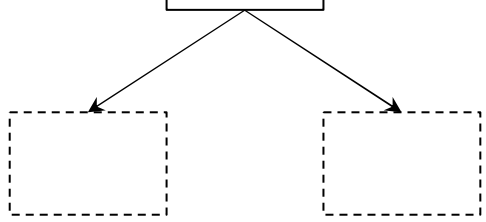
$$\boxed{16} - \boxed{9} = \underline{\hspace{2cm}}$$

$$\boxed{13} - \boxed{7} = \underline{\hspace{2cm}}$$

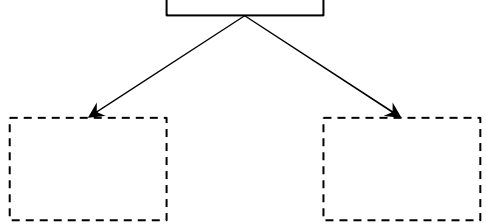
さくらんぼ引き算タイプC(引く数を分ける)\_問題

名前 : \_\_\_\_\_

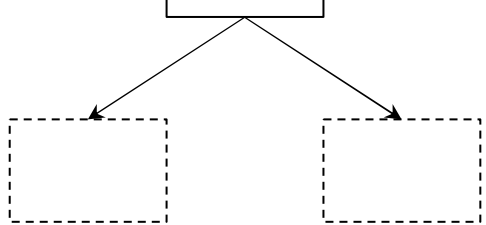
$$\boxed{16} - \boxed{9} = \underline{\hspace{2cm}}$$



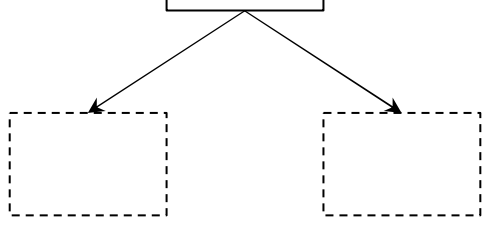
$$\boxed{15} - \boxed{8} = \underline{\hspace{2cm}}$$



$$\boxed{18} - \boxed{9} = \underline{\hspace{2cm}}$$



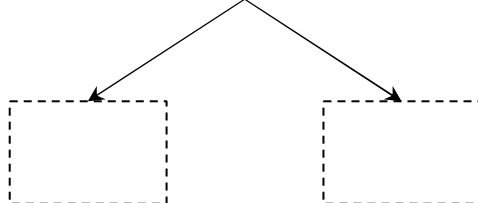
$$\boxed{12} - \boxed{4} = \underline{\hspace{2cm}}$$



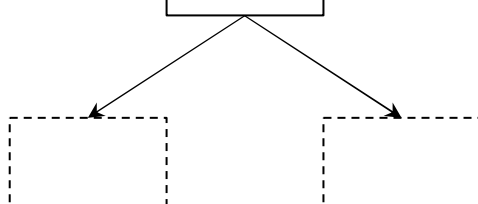
さくらんぼ引き算タイプC(引く数を分ける)\_問題

名前 : \_\_\_\_\_

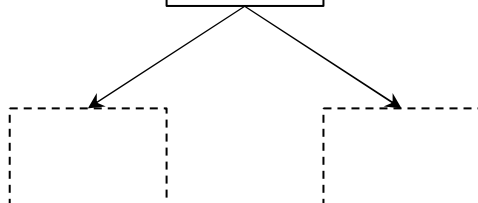
$$\boxed{14} - \boxed{8} = \underline{\hspace{2cm}}$$



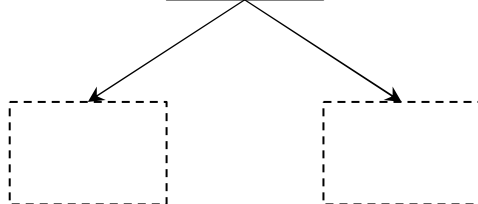
$$\boxed{18} - \boxed{9} = \underline{\hspace{2cm}}$$



$$\boxed{17} - \boxed{8} = \underline{\hspace{2cm}}$$



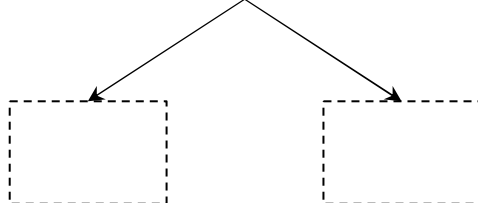
$$\boxed{12} - \boxed{4} = \underline{\hspace{2cm}}$$



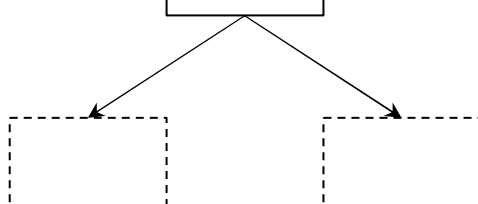
さくらんぼ引き算タイプC(引く数を分ける)\_問題

名前 : \_\_\_\_\_

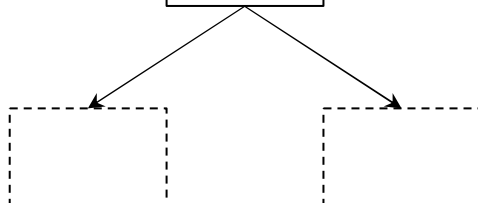
$$\boxed{17} - \boxed{9} = \underline{\hspace{2cm}}$$



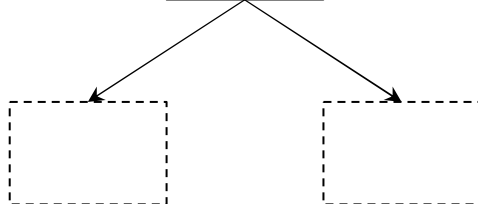
$$\boxed{11} - \boxed{6} = \underline{\hspace{2cm}}$$



$$\boxed{12} - \boxed{3} = \underline{\hspace{2cm}}$$



$$\boxed{14} - \boxed{8} = \underline{\hspace{2cm}}$$



さくらんぼ引き算タイプC(引く数を分ける)\_問題

名前 : \_\_\_\_\_

$$\boxed{16} - \boxed{8} = \underline{\hspace{2cm}}$$

$$\boxed{18} - \boxed{9} = \underline{\hspace{2cm}}$$

$$\boxed{17} - \boxed{8} = \underline{\hspace{2cm}}$$

$$\boxed{14} - \boxed{9} = \underline{\hspace{2cm}}$$

さくらんぼ引き算タイプC(引く数を分ける)\_問題

名前 : \_\_\_\_\_

$$\boxed{18} - \boxed{9} = \underline{\hspace{2cm}}$$

$$\boxed{15} - \boxed{8} = \underline{\hspace{2cm}}$$

$$\boxed{16} - \boxed{9} = \underline{\hspace{2cm}}$$

$$\boxed{11} - \boxed{4} = \underline{\hspace{2cm}}$$

さくらんぼ引き算タイプC(引く数を分ける)\_問題

名前 : \_\_\_\_\_

$$\boxed{15} - \boxed{7} = \underline{\hspace{2cm}}$$

$$\boxed{16} - \boxed{9} = \underline{\hspace{2cm}}$$

$$\boxed{17} - \boxed{8} = \underline{\hspace{2cm}}$$

$$\boxed{11} - \boxed{2} = \underline{\hspace{2cm}}$$

さくらんぼ引き算タイプC(引く数を分ける)\_問題

名前 : \_\_\_\_\_

$$\boxed{14} - \boxed{8} = \underline{\hspace{2cm}}$$

$$\boxed{13} - \boxed{6} = \underline{\hspace{2cm}}$$

$$\boxed{17} - \boxed{9} = \underline{\hspace{2cm}}$$

$$\boxed{11} - \boxed{8} = \underline{\hspace{2cm}}$$



さくらんぼ引き算タイプC(引く数を分ける)\_問題

名前 : \_\_\_\_\_

$$\boxed{14} - \boxed{5} = \underline{\hspace{2cm}}$$

$$\boxed{12} - \boxed{3} = \underline{\hspace{2cm}}$$

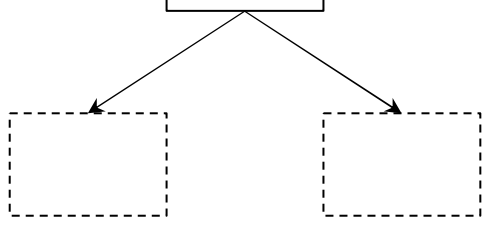
$$\boxed{18} - \boxed{9} = \underline{\hspace{2cm}}$$

$$\boxed{16} - \boxed{9} = \underline{\hspace{2cm}}$$

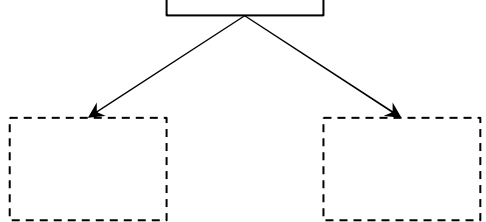
さくらんぼ引き算タイプC(引く数を分ける)\_問題

名前 : \_\_\_\_\_

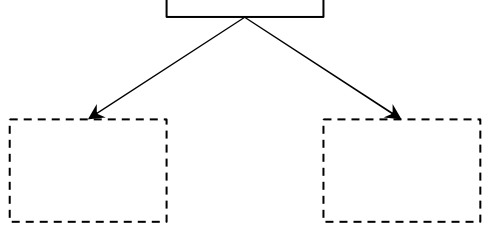
$$\boxed{18} - \boxed{9} = \underline{\hspace{2cm}}$$



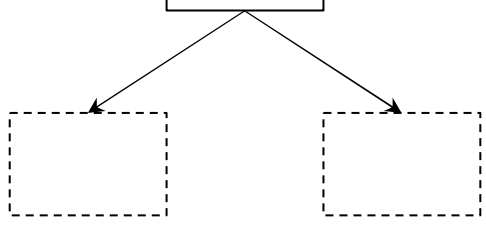
$$\boxed{15} - \boxed{7} = \underline{\hspace{2cm}}$$



$$\boxed{11} - \boxed{7} = \underline{\hspace{2cm}}$$



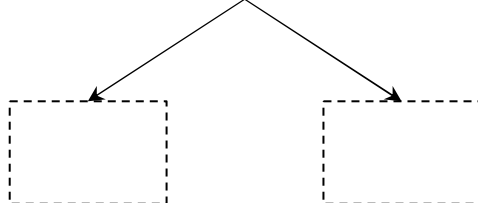
$$\boxed{17} - \boxed{9} = \underline{\hspace{2cm}}$$




さくらんぼ引き算タイプC(引く数を分ける)\_問題

名前 : \_\_\_\_\_

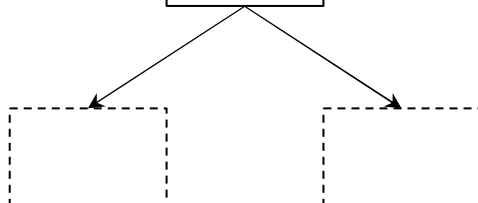
$$\boxed{12} - \boxed{7} = \underline{\hspace{2cm}}$$



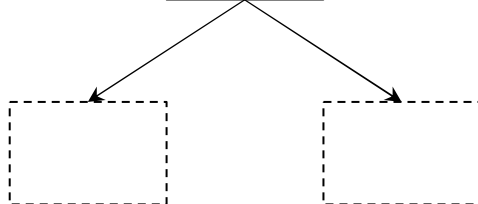
$$\boxed{18} - \boxed{9} = \underline{\hspace{2cm}}$$



$$\boxed{14} - \boxed{7} = \underline{\hspace{2cm}}$$



$$\boxed{15} - \boxed{7} = \underline{\hspace{2cm}}$$



さくらんぼ引き算タイプC(引く数を分ける)\_問題

名前 : \_\_\_\_\_

$$\boxed{12} - \boxed{6} = \underline{\hspace{2cm}}$$

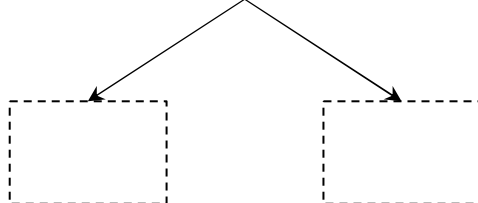
$$\boxed{11} - \boxed{6} = \underline{\hspace{2cm}}$$

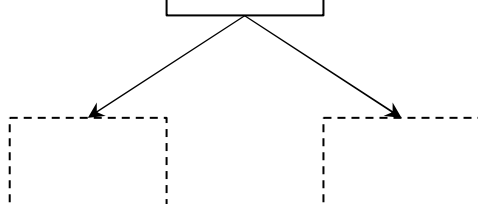
$$\boxed{18} - \boxed{9} = \underline{\hspace{2cm}}$$

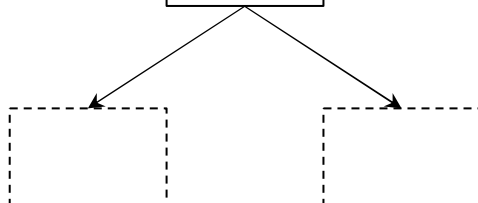
$$\boxed{13} - \boxed{7} = \underline{\hspace{2cm}}$$

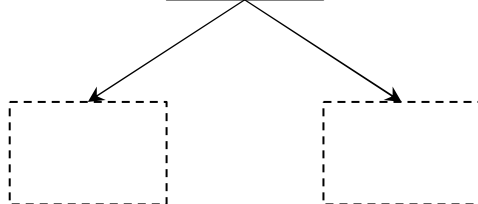
さくらんぼ引き算タイプC(引く数を分ける)\_問題

名前 : \_\_\_\_\_

$$\boxed{16} - \boxed{9} = \underline{\hspace{2cm}}$$


$$\boxed{13} - \boxed{7} = \underline{\hspace{2cm}}$$


$$\boxed{14} - \boxed{8} = \underline{\hspace{2cm}}$$


$$\boxed{18} - \boxed{9} = \underline{\hspace{2cm}}$$


さくらんぼ引き算タイプC(引く数を分ける)\_問題

名前 : \_\_\_\_\_

$$\boxed{11} - \boxed{7} = \underline{\hspace{2cm}}$$

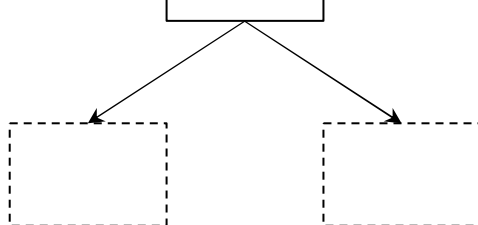
$$\boxed{17} - \boxed{9} = \underline{\hspace{2cm}}$$

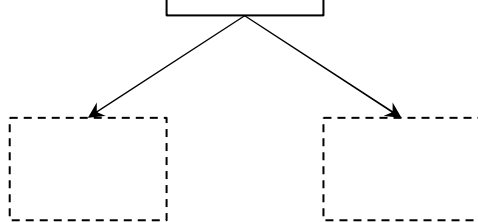
$$\boxed{18} - \boxed{9} = \underline{\hspace{2cm}}$$

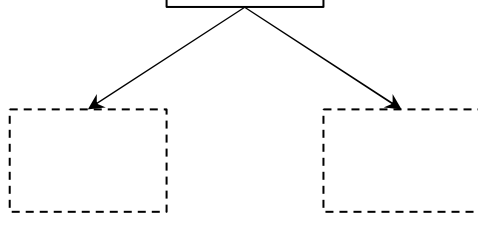
$$\boxed{12} - \boxed{6} = \underline{\hspace{2cm}}$$

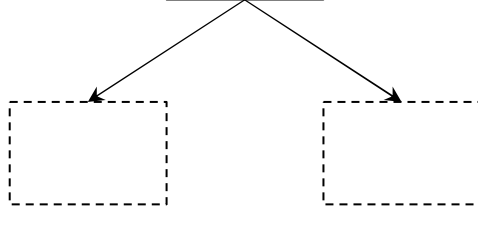
さくらんぼ引き算タイプC(引く数を分ける)\_問題

名前 : \_\_\_\_\_

$$\boxed{16} - \boxed{9} = \underline{\hspace{2cm}}$$


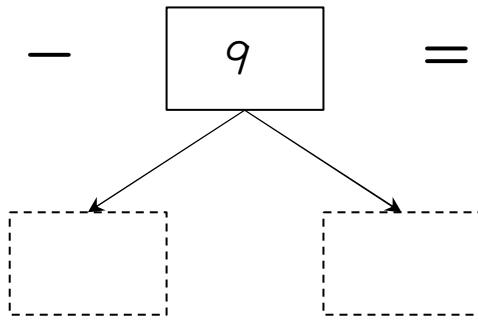
$$\boxed{15} - \boxed{6} = \underline{\hspace{2cm}}$$


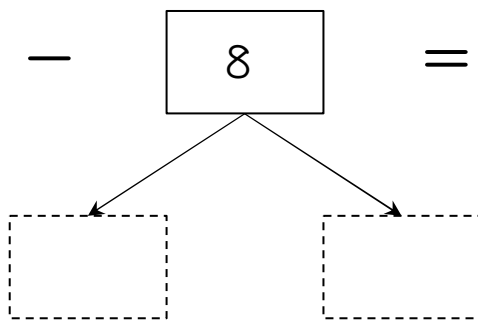
$$\boxed{12} - \boxed{7} = \underline{\hspace{2cm}}$$


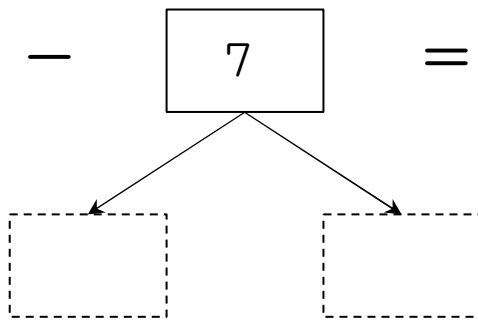
$$\boxed{18} - \boxed{9} = \underline{\hspace{2cm}}$$


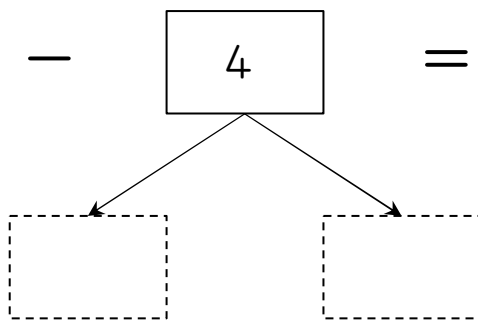
さくらんぼ引き算タイプC(引く数を分ける)\_問題

名前 : \_\_\_\_\_

$$\boxed{18} - \boxed{9} = \underline{\hspace{2cm}}$$


$$\boxed{14} - \boxed{8} = \underline{\hspace{2cm}}$$


$$\boxed{15} - \boxed{7} = \underline{\hspace{2cm}}$$


$$\boxed{11} - \boxed{4} = \underline{\hspace{2cm}}$$




さくらんぼ引き算タイプC(引く数を分ける)\_問題

名前 : \_\_\_\_\_

$$\boxed{11} - \boxed{9} = \underline{\hspace{2cm}}$$

$$\boxed{14} - \boxed{8} = \underline{\hspace{2cm}}$$

$$\boxed{15} - \boxed{7} = \underline{\hspace{2cm}}$$

$$\boxed{12} - \boxed{8} = \underline{\hspace{2cm}}$$

さくらんぼ引き算タイプC(引く数を分ける)\_問題

名前 : \_\_\_\_\_

$$\boxed{17} - \boxed{8} = \underline{\hspace{2cm}}$$

$$\boxed{14} - \boxed{7} = \underline{\hspace{2cm}}$$

$$\boxed{15} - \boxed{8} = \underline{\hspace{2cm}}$$

$$\boxed{16} - \boxed{8} = \underline{\hspace{2cm}}$$

さくらんぼ引き算タイプC(引く数を分ける)\_問題

名前 : \_\_\_\_\_

$$\boxed{17} - \boxed{9} = \underline{\hspace{2cm}}$$

$$\boxed{15} - \boxed{8} = \underline{\hspace{2cm}}$$

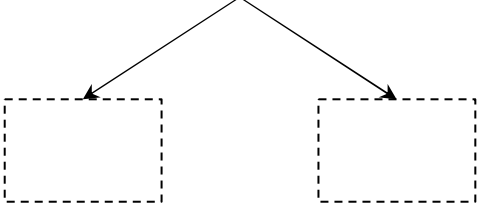
$$\boxed{16} - \boxed{8} = \underline{\hspace{2cm}}$$

$$\boxed{13} - \boxed{9} = \underline{\hspace{2cm}}$$

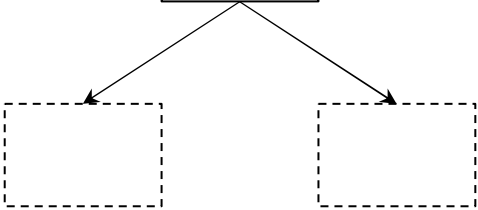
さくらんぼ引き算タイプC(引く数を分ける)\_問題

名前 : \_\_\_\_\_

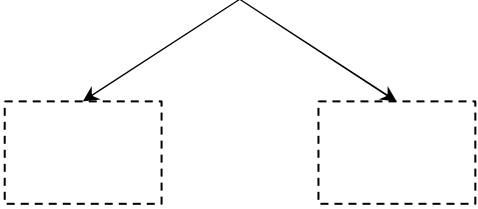
$$\boxed{18} - \boxed{9} = \underline{\hspace{2cm}}$$



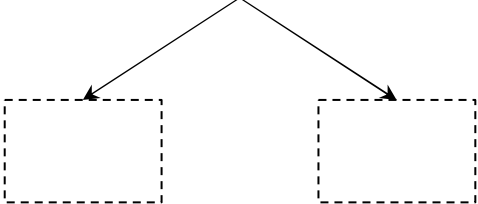
$$\boxed{12} - \boxed{6} = \underline{\hspace{2cm}}$$



$$\boxed{14} - \boxed{9} = \underline{\hspace{2cm}}$$



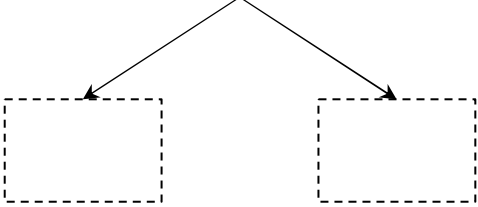
$$\boxed{16} - \boxed{8} = \underline{\hspace{2cm}}$$



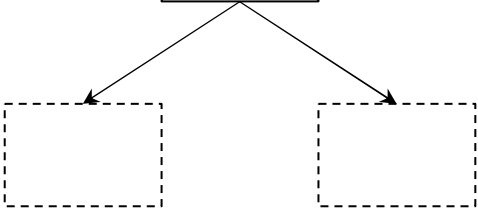
さくらんぼ引き算タイプC(引く数を分ける)\_問題

名前 : \_\_\_\_\_

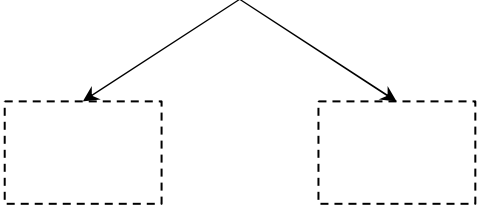
$$\boxed{12} - \boxed{4} = \underline{\hspace{2cm}}$$



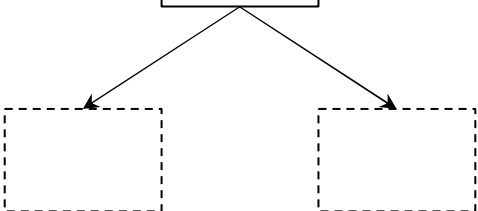
$$\boxed{11} - \boxed{3} = \underline{\hspace{2cm}}$$



$$\boxed{16} - \boxed{7} = \underline{\hspace{2cm}}$$



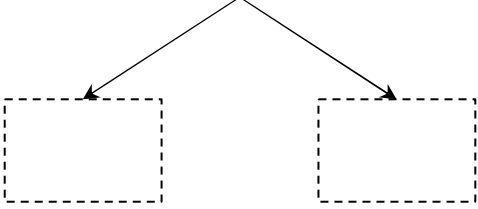
$$\boxed{17} - \boxed{8} = \underline{\hspace{2cm}}$$



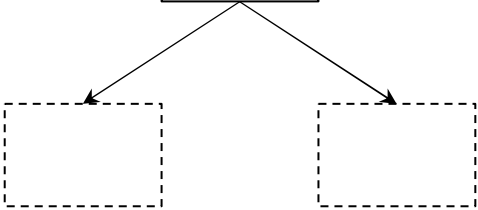
さくらんぼ引き算タイプC(引く数を分ける)\_問題

名前 : \_\_\_\_\_

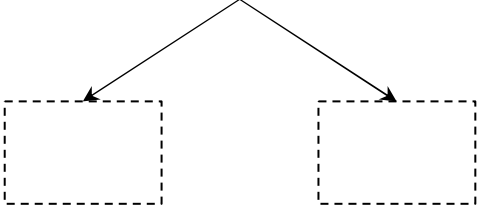
$$\boxed{14} - \boxed{7} = \underline{\hspace{2cm}}$$



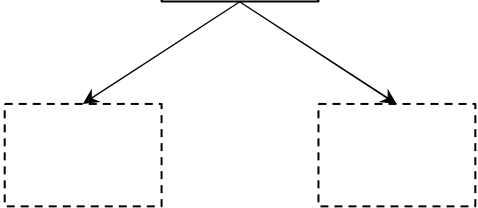
$$\boxed{12} - \boxed{9} = \underline{\hspace{2cm}}$$



$$\boxed{17} - \boxed{8} = \underline{\hspace{2cm}}$$



$$\boxed{13} - \boxed{6} = \underline{\hspace{2cm}}$$



さくらんぼ引き算タイプC(引く数を分ける)\_問題

名前 : \_\_\_\_\_

$$\boxed{12} - \boxed{8} = \underline{\hspace{2cm}}$$

$$\boxed{13} - \boxed{8} = \underline{\hspace{2cm}}$$

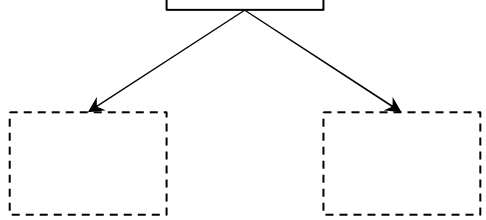
$$\boxed{11} - \boxed{3} = \underline{\hspace{2cm}}$$

$$\boxed{18} - \boxed{9} = \underline{\hspace{2cm}}$$

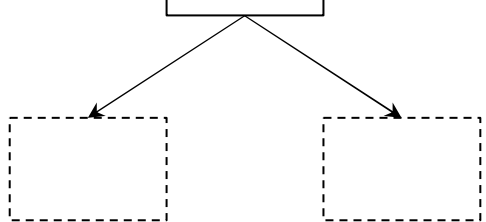
さくらんぼ引き算タイプC(引く数を分ける)\_問題

名前 : \_\_\_\_\_

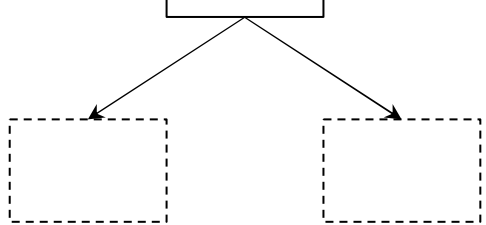
$$\boxed{13} - \boxed{8} = \underline{\hspace{2cm}}$$



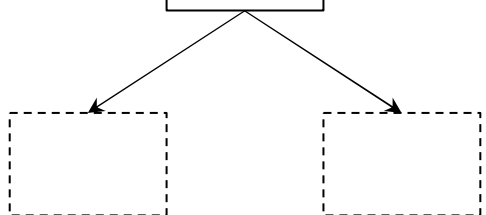
$$\boxed{18} - \boxed{9} = \underline{\hspace{2cm}}$$



$$\boxed{12} - \boxed{8} = \underline{\hspace{2cm}}$$



$$\boxed{15} - \boxed{6} = \underline{\hspace{2cm}}$$

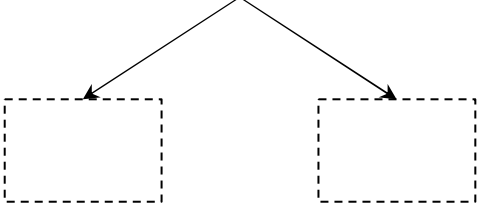




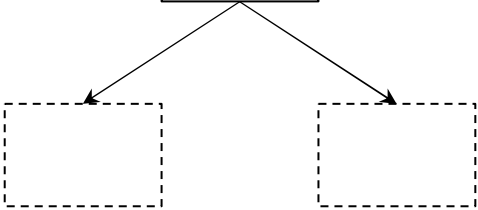
さくらんぼ引き算タイプC(引く数を分ける)\_問題

名前 : \_\_\_\_\_

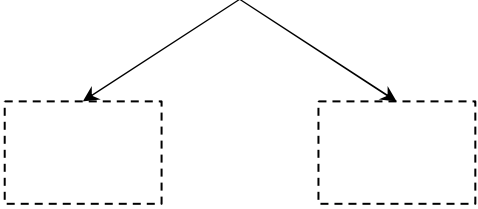
$$\boxed{11} - \boxed{9} = \underline{\hspace{2cm}}$$



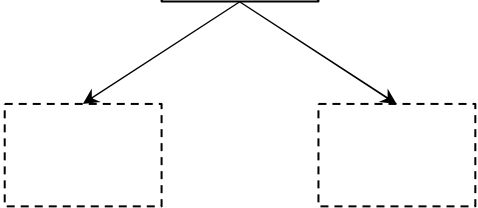
$$\boxed{16} - \boxed{9} = \underline{\hspace{2cm}}$$



$$\boxed{15} - \boxed{6} = \underline{\hspace{2cm}}$$



$$\boxed{12} - \boxed{8} = \underline{\hspace{2cm}}$$



さくらんぼ引き算タイプC(引く数を分ける)\_問題

名前 : \_\_\_\_\_

$$\boxed{18} - \boxed{9} = \underline{\hspace{2cm}}$$

$$\boxed{16} - \boxed{7} = \underline{\hspace{2cm}}$$

$$\boxed{13} - \boxed{5} = \underline{\hspace{2cm}}$$

$$\boxed{12} - \boxed{9} = \underline{\hspace{2cm}}$$

さくらんぼ引き算タイプC(引く数を分ける)\_問題

名前 : \_\_\_\_\_

$$\boxed{16} - \boxed{7} = \underline{\hspace{2cm}}$$

$$\boxed{15} - \boxed{9} = \underline{\hspace{2cm}}$$

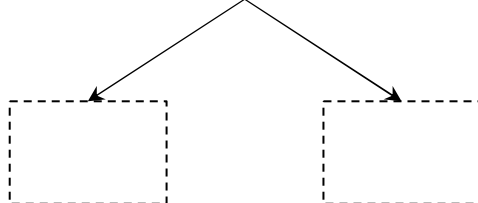
$$\boxed{18} - \boxed{9} = \underline{\hspace{2cm}}$$

$$\boxed{11} - \boxed{3} = \underline{\hspace{2cm}}$$

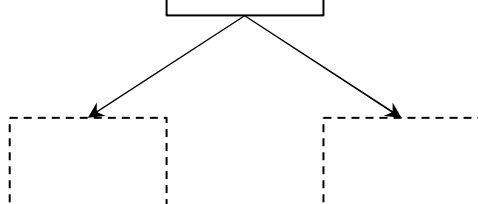
さくらんぼ引き算タイプC(引く数を分ける)\_問題

名前 : \_\_\_\_\_

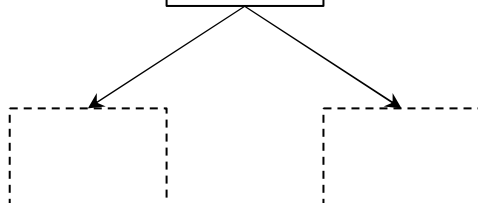
$$\boxed{12} - \boxed{3} = \underline{\hspace{2cm}}$$




$$\boxed{18} - \boxed{9} = \underline{\hspace{2cm}}$$



$$\boxed{17} - \boxed{9} = \underline{\hspace{2cm}}$$



$$\boxed{14} - \boxed{8} = \underline{\hspace{2cm}}$$



さくらんぼ引き算タイプC(引く数を分ける)\_問題

名前 : \_\_\_\_\_

$$\boxed{16} - \boxed{8} = \underline{\hspace{2cm}}$$

$$\boxed{15} - \boxed{9} = \underline{\hspace{2cm}}$$

$$\boxed{13} - \boxed{5} = \underline{\hspace{2cm}}$$

$$\boxed{12} - \boxed{5} = \underline{\hspace{2cm}}$$

さくらんぼ引き算タイプC(引く数を分ける)\_問題

名前 : \_\_\_\_\_

$$\boxed{13} - \boxed{8} = \underline{\hspace{2cm}}$$

$$\boxed{17} - \boxed{9} = \underline{\hspace{2cm}}$$

$$\boxed{11} - \boxed{2} = \underline{\hspace{2cm}}$$

$$\boxed{12} - \boxed{5} = \underline{\hspace{2cm}}$$

さくらんぼ引き算タイプC(引く数を分ける)\_問題

名前 : \_\_\_\_\_

$$\boxed{18} - \boxed{9} = \underline{\hspace{2cm}}$$

$$\boxed{17} - \boxed{9} = \underline{\hspace{2cm}}$$

$$\boxed{14} - \boxed{6} = \underline{\hspace{2cm}}$$

$$\boxed{12} - \boxed{6} = \underline{\hspace{2cm}}$$

さくらんぼ引き算タイプC(引く数を分ける)\_問題

名前 : \_\_\_\_\_

$$\boxed{18} - \boxed{9} = \underline{\hspace{2cm}}$$

$$\boxed{11} - \boxed{9} = \underline{\hspace{2cm}}$$

$$\boxed{13} - \boxed{8} = \underline{\hspace{2cm}}$$

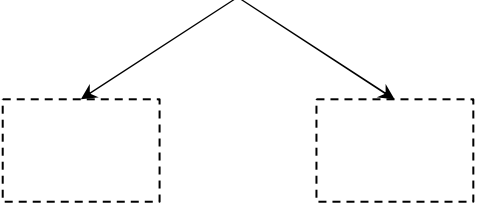
$$\boxed{15} - \boxed{8} = \underline{\hspace{2cm}}$$



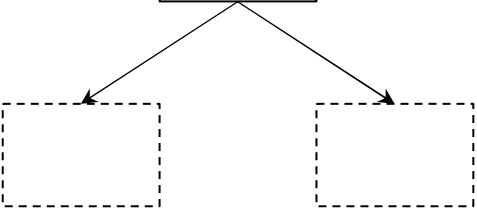
さくらんぼ引き算タイプC(引く数を分ける)\_問題

名前 : \_\_\_\_\_

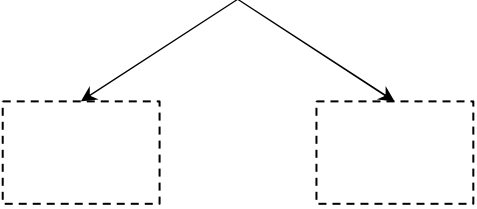
$$\boxed{13} - \boxed{6} = \underline{\hspace{2cm}}$$



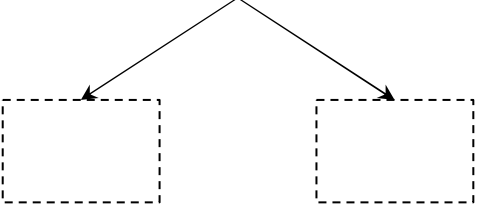
$$\boxed{12} - \boxed{5} = \underline{\hspace{2cm}}$$



$$\boxed{14} - \boxed{8} = \underline{\hspace{2cm}}$$



$$\boxed{11} - \boxed{2} = \underline{\hspace{2cm}}$$



さくらんぼ引き算タイプC(引く数を分ける)\_問題

名前 : \_\_\_\_\_

$$\boxed{16} - \boxed{9} = \underline{\hspace{2cm}}$$

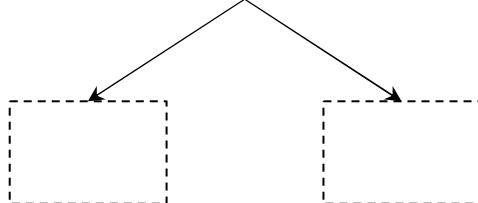
$$\boxed{17} - \boxed{9} = \underline{\hspace{2cm}}$$


$$\boxed{18} - \boxed{9} = \underline{\hspace{2cm}}$$

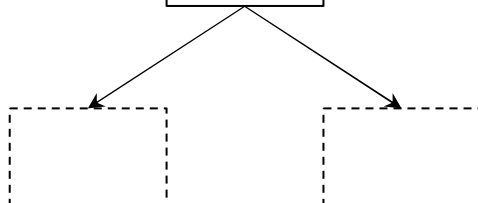
$$\boxed{14} - \boxed{7} = \underline{\hspace{2cm}}$$

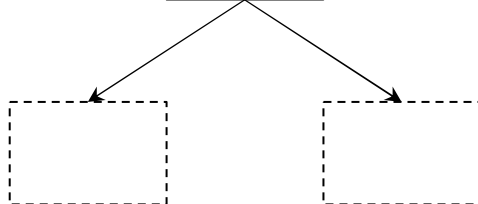
さくらんぼ引き算タイプC(引く数を分ける)\_問題

名前 : \_\_\_\_\_

$$\boxed{12} - \boxed{6} = \underline{\hspace{2cm}}$$


$$\boxed{18} - \boxed{9} = \underline{\hspace{2cm}}$$


$$\boxed{11} - \boxed{8} = \underline{\hspace{2cm}}$$


$$\boxed{14} - \boxed{5} = \underline{\hspace{2cm}}$$


さくらんぼ引き算タイプC(引く数を分ける)\_問題

名前 : \_\_\_\_\_

$$\boxed{12} - \boxed{4} = \underline{\hspace{2cm}}$$

$$\boxed{15} - \boxed{7} = \underline{\hspace{2cm}}$$

$$\boxed{18} - \boxed{9} = \underline{\hspace{2cm}}$$

$$\boxed{17} - \boxed{8} = \underline{\hspace{2cm}}$$

さくらんぼ引き算タイプC(引く数を分ける)\_問題

名前 : \_\_\_\_\_

$$\boxed{17} - \boxed{9} = \underline{\hspace{2cm}}$$

$$\boxed{16} - \boxed{9} = \underline{\hspace{2cm}}$$

$$\boxed{11} - \boxed{2} = \underline{\hspace{2cm}}$$

$$\boxed{12} - \boxed{7} = \underline{\hspace{2cm}}$$

さくらんぼ引き算タイプC(引く数を分ける)\_問題

名前 : \_\_\_\_\_

$$\boxed{11} - \boxed{4} = \underline{\hspace{2cm}}$$

$$\boxed{15} - \boxed{9} = \underline{\hspace{2cm}}$$

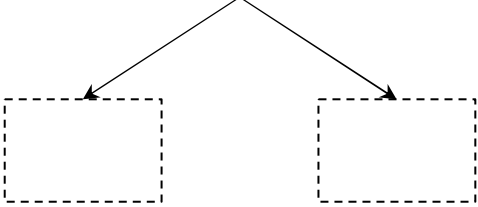
$$\boxed{17} - \boxed{8} = \underline{\hspace{2cm}}$$

$$\boxed{18} - \boxed{9} = \underline{\hspace{2cm}}$$

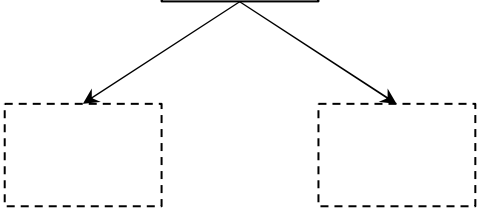
さくらんぼ引き算タイプC(引く数を分ける)\_問題

名前 : \_\_\_\_\_

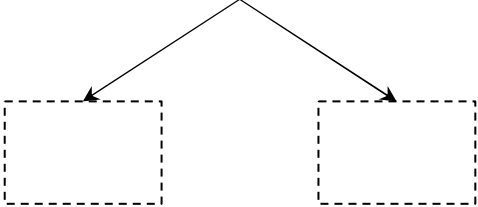
$$\boxed{14} - \boxed{8} = \underline{\hspace{2cm}}$$



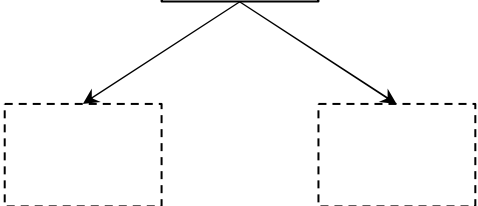
$$\boxed{18} - \boxed{9} = \underline{\hspace{2cm}}$$



$$\boxed{17} - \boxed{9} = \underline{\hspace{2cm}}$$



$$\boxed{15} - \boxed{9} = \underline{\hspace{2cm}}$$



さくらんぼ引き算タイプC(引く数を分ける)\_問題

名前 : \_\_\_\_\_

$$\boxed{13} - \boxed{8} = \underline{\hspace{2cm}}$$

$$\boxed{18} - \boxed{9} = \underline{\hspace{2cm}}$$

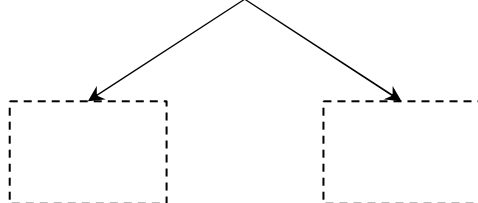
$$\boxed{15} - \boxed{8} = \underline{\hspace{2cm}}$$

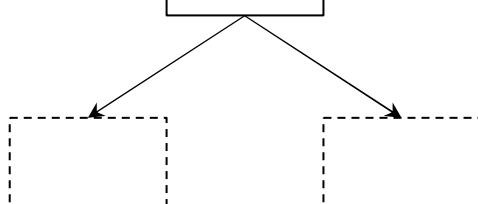
$$\boxed{11} - \boxed{7} = \underline{\hspace{2cm}}$$

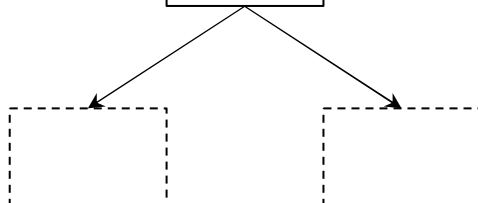


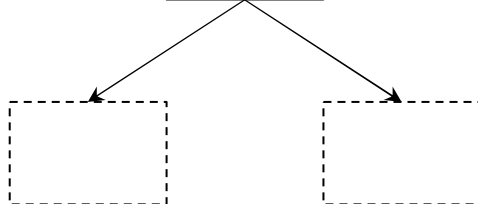
さくらんぼ引き算タイプC(引く数を分ける)\_問題

名前 : \_\_\_\_\_

$$\boxed{12} - \boxed{5} = \underline{\hspace{2cm}}$$


$$\boxed{14} - \boxed{7} = \underline{\hspace{2cm}}$$


$$\boxed{17} - \boxed{8} = \underline{\hspace{2cm}}$$


$$\boxed{15} - \boxed{8} = \underline{\hspace{2cm}}$$


さくらんぼ引き算タイプC(引く数を分ける)\_問題

名前 : \_\_\_\_\_

$$\boxed{12} - \boxed{5} = \underline{\hspace{2cm}}$$

$$\boxed{11} - \boxed{6} = \underline{\hspace{2cm}}$$

$$\boxed{18} - \boxed{9} = \underline{\hspace{2cm}}$$

$$\boxed{16} - \boxed{7} = \underline{\hspace{2cm}}$$

さくらんぼ引き算タイプC(引く数を分ける)\_問題

名前 : \_\_\_\_\_

$$\boxed{14} - \boxed{9} = \underline{\hspace{2cm}}$$

$$\boxed{16} - \boxed{7} = \underline{\hspace{2cm}}$$

$$\boxed{17} - \boxed{9} = \underline{\hspace{2cm}}$$

$$\boxed{13} - \boxed{9} = \underline{\hspace{2cm}}$$

さくらんぼ引き算タイプC(引く数を分ける)\_問題

名前 : \_\_\_\_\_

$$\boxed{15} - \boxed{9} = \underline{\hspace{2cm}}$$

$$\boxed{16} - \boxed{7} = \underline{\hspace{2cm}}$$

$$\boxed{18} - \boxed{9} = \underline{\hspace{2cm}}$$

$$\boxed{14} - \boxed{7} = \underline{\hspace{2cm}}$$

さくらんぼ引き算タイプC(引く数を分ける)\_問題

名前 : \_\_\_\_\_

$$\boxed{14} - \boxed{8} = \underline{\hspace{2cm}}$$

$$\boxed{18} - \boxed{9} = \underline{\hspace{2cm}}$$

$$\boxed{16} - \boxed{9} = \underline{\hspace{2cm}}$$

$$\boxed{13} - \boxed{8} = \underline{\hspace{2cm}}$$

さくらんぼ引き算タイプC(引く数を分ける)\_問題

名前 : \_\_\_\_\_

$$\boxed{18} - \boxed{9} = \underline{\hspace{2cm}}$$

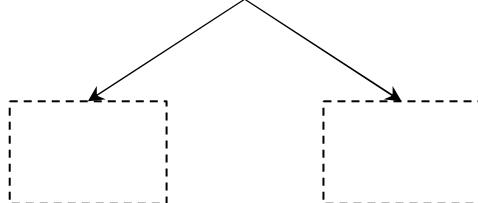
$$\boxed{12} - \boxed{5} = \underline{\hspace{2cm}}$$

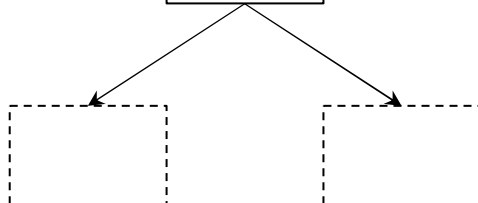
$$\boxed{16} - \boxed{8} = \underline{\hspace{2cm}}$$

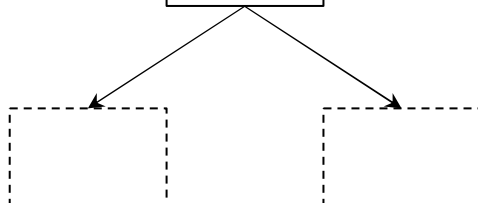
$$\boxed{17} - \boxed{9} = \underline{\hspace{2cm}}$$

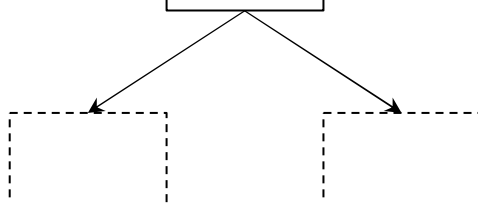
さくらんぼ引き算タイプC(引く数を分ける)\_問題

名前 : \_\_\_\_\_

$$\boxed{17} - \boxed{9} = \underline{\hspace{2cm}}$$


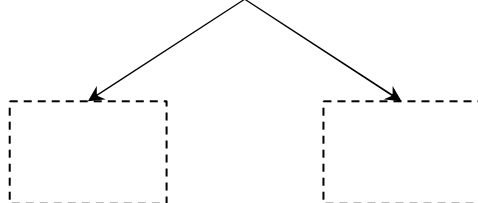
$$\boxed{16} - \boxed{7} = \underline{\hspace{2cm}}$$


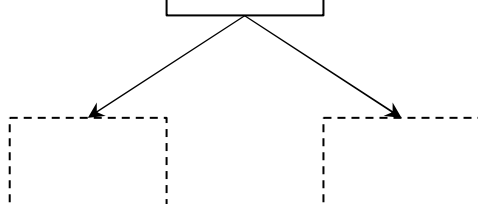
$$\boxed{15} - \boxed{6} = \underline{\hspace{2cm}}$$


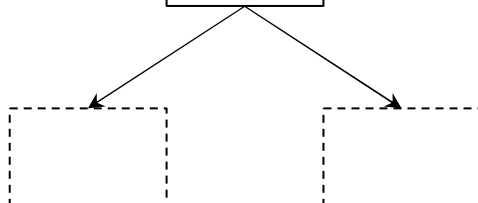
$$\boxed{13} - \boxed{6} = \underline{\hspace{2cm}}$$


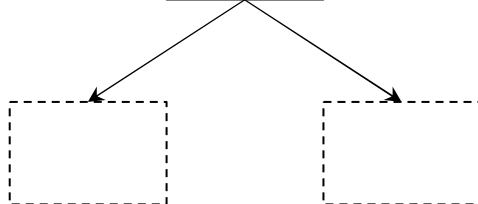
さくらんぼ引き算タイプC(引く数を分ける)\_問題

名前 : \_\_\_\_\_

$$\boxed{13} - \boxed{4} = \underline{\hspace{2cm}}$$


$$\boxed{11} - \boxed{2} = \underline{\hspace{2cm}}$$


$$\boxed{14} - \boxed{7} = \underline{\hspace{2cm}}$$


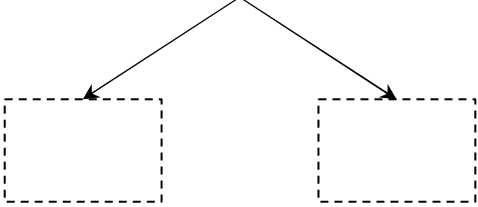
$$\boxed{16} - \boxed{7} = \underline{\hspace{2cm}}$$




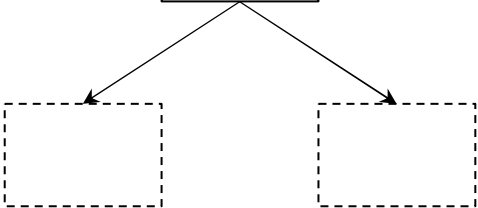
さくらんぼ引き算タイプC(引く数を分ける)\_問題

名前 : \_\_\_\_\_

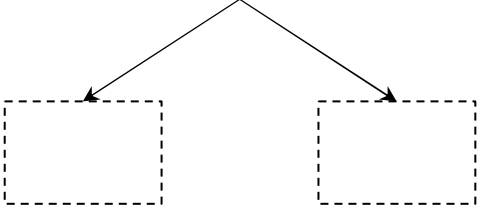
$$\boxed{17} - \boxed{8} = \underline{\hspace{2cm}}$$



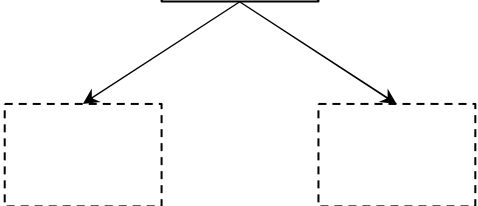
$$\boxed{18} - \boxed{9} = \underline{\hspace{2cm}}$$



$$\boxed{16} - \boxed{7} = \underline{\hspace{2cm}}$$



$$\boxed{13} - \boxed{6} = \underline{\hspace{2cm}}$$



さくらんぼ引き算タイプC(引く数を分ける)\_問題

名前 : \_\_\_\_\_

$$\boxed{17} - \boxed{8} = \underline{\hspace{2cm}}$$

$$\boxed{14} - \boxed{7} = \underline{\hspace{2cm}}$$

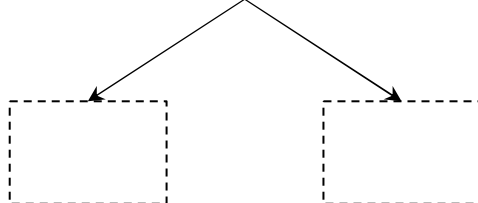
$$\boxed{16} - \boxed{9} = \underline{\hspace{2cm}}$$

$$\boxed{11} - \boxed{6} = \underline{\hspace{2cm}}$$

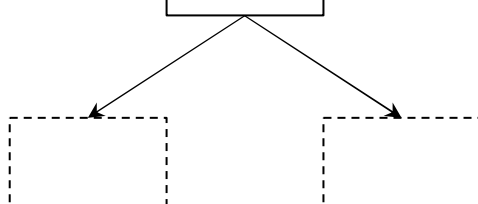
さくらんぼ引き算タイプC(引く数を分ける)\_問題

名前 : \_\_\_\_\_

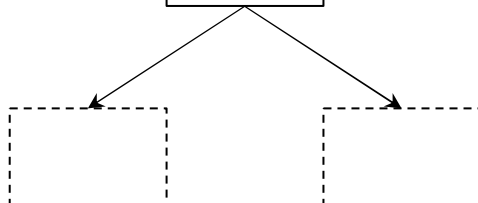
$$\boxed{16} - \boxed{8} = \underline{\hspace{2cm}}$$



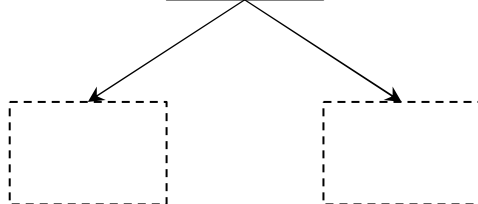
$$\boxed{15} - \boxed{6} = \underline{\hspace{2cm}}$$



$$\boxed{13} - \boxed{7} = \underline{\hspace{2cm}}$$

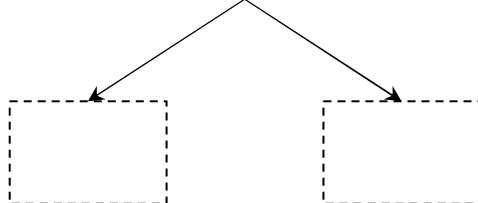


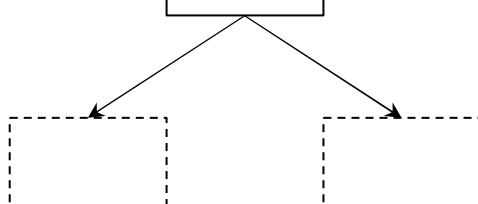
$$\boxed{11} - \boxed{7} = \underline{\hspace{2cm}}$$

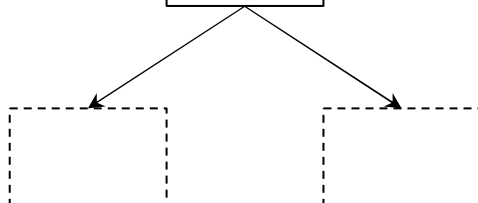


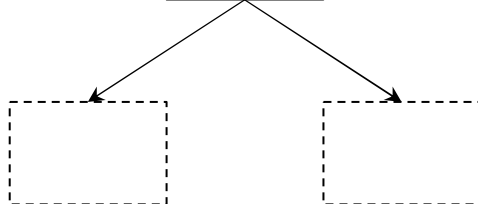
さくらんぼ引き算タイプC(引く数を分ける)\_問題

名前 : \_\_\_\_\_

$$\boxed{15} - \boxed{6} = \underline{\hspace{2cm}}$$


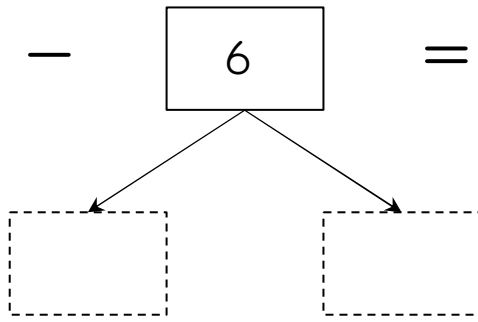
$$\boxed{12} - \boxed{4} = \underline{\hspace{2cm}}$$


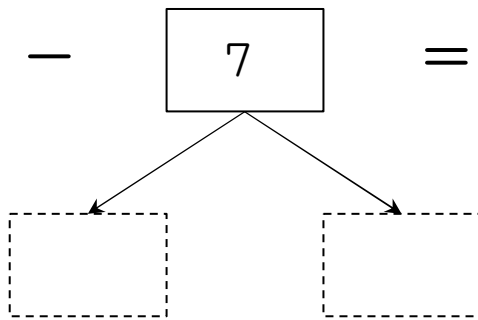
$$\boxed{13} - \boxed{7} = \underline{\hspace{2cm}}$$


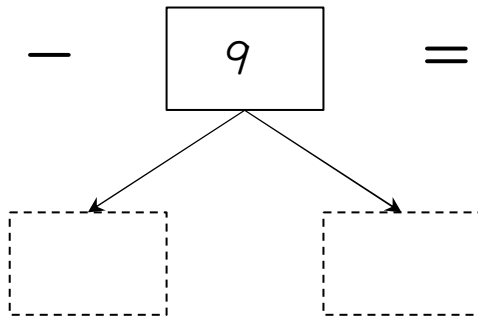
$$\boxed{14} - \boxed{7} = \underline{\hspace{2cm}}$$


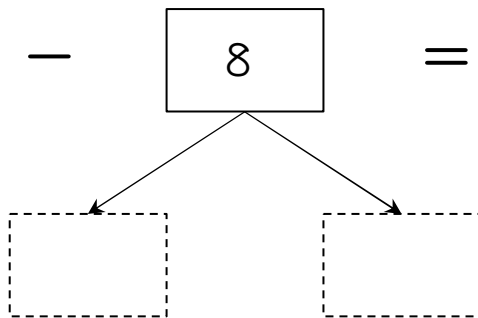
さくらんぼ引き算タイプC(引く数を分ける)\_問題

名前 : \_\_\_\_\_

$$\boxed{12} - \boxed{6} = \underline{\hspace{2cm}}$$


$$\boxed{14} - \boxed{7} = \underline{\hspace{2cm}}$$


$$\boxed{18} - \boxed{9} = \underline{\hspace{2cm}}$$


$$\boxed{17} - \boxed{8} = \underline{\hspace{2cm}}$$


さくらんぼ引き算タイプC(引く数を分ける)\_問題

名前 : \_\_\_\_\_

$$\boxed{13} - \boxed{9} = \underline{\hspace{2cm}}$$

A subtraction problem:  $13 - 9 = \underline{\hspace{2cm}}$ . Below the number 9 is a ten-frame diagram consisting of two rows of five boxes. The number 9 is written in a box above the ten-frame. Two arrows point from the 9 box to two empty boxes below the ten-frame, one in each row, representing the decomposition of 9 into 5 and 4.

$$\boxed{14} - \boxed{7} = \underline{\hspace{2cm}}$$

A subtraction problem:  $14 - 7 = \underline{\hspace{2cm}}$ . Below the number 7 is a ten-frame diagram consisting of two rows of five boxes. The number 7 is written in a box above the ten-frame. Two arrows point from the 7 box to two empty boxes below the ten-frame, one in each row, representing the decomposition of 7 into 5 and 2.

$$\boxed{18} - \boxed{9} = \underline{\hspace{2cm}}$$

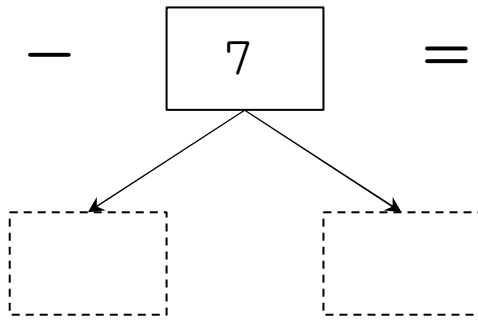
A subtraction problem:  $18 - 9 = \underline{\hspace{2cm}}$ . Below the number 9 is a ten-frame diagram consisting of two rows of five boxes. The number 9 is written in a box above the ten-frame. Two arrows point from the 9 box to two empty boxes below the ten-frame, one in each row, representing the decomposition of 9 into 5 and 4.

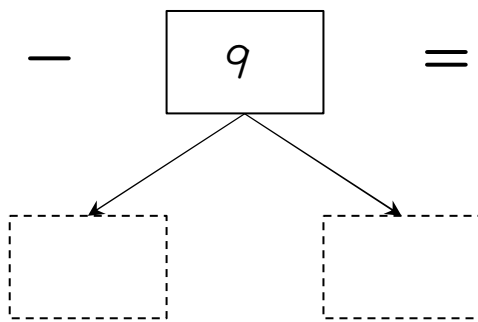
$$\boxed{11} - \boxed{3} = \underline{\hspace{2cm}}$$

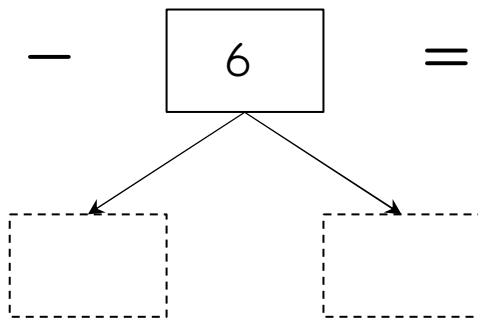
A subtraction problem:  $11 - 3 = \underline{\hspace{2cm}}$ . Below the number 3 is a ten-frame diagram consisting of two rows of five boxes. The number 3 is written in a box above the ten-frame. Two arrows point from the 3 box to two empty boxes below the ten-frame, one in each row, representing the decomposition of 3 into 2 and 1.

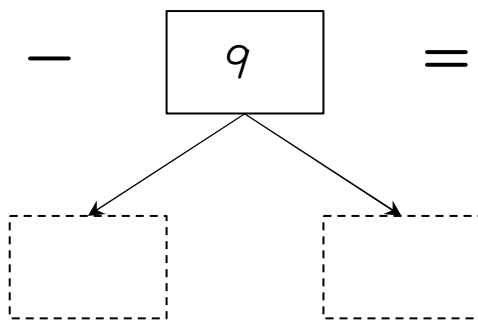
さくらんぼ引き算タイプC(引く数を分ける)\_問題

名前 : \_\_\_\_\_

$$\boxed{16} - \boxed{7} = \underline{\hspace{2cm}}$$


$$\boxed{18} - \boxed{9} = \underline{\hspace{2cm}}$$


$$\boxed{12} - \boxed{6} = \underline{\hspace{2cm}}$$


$$\boxed{17} - \boxed{9} = \underline{\hspace{2cm}}$$


さくらんぼ引き算タイプC(引く数を分ける)\_問題

名前 : \_\_\_\_\_

$$\boxed{16} - \boxed{9} = \underline{\hspace{2cm}}$$

$$\boxed{15} - \boxed{6} = \underline{\hspace{2cm}}$$

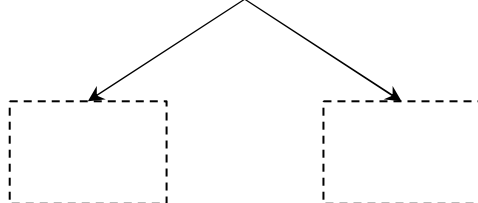
$$\boxed{12} - \boxed{6} = \underline{\hspace{2cm}}$$

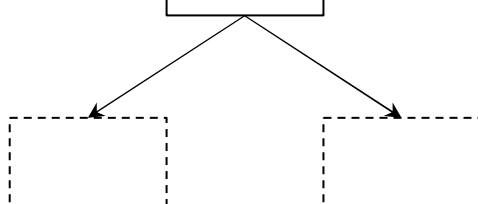
$$\boxed{11} - \boxed{8} = \underline{\hspace{2cm}}$$

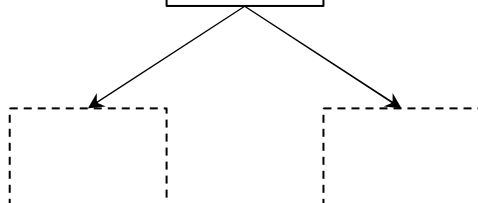


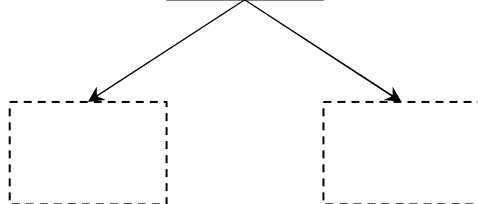
さくらんぼ引き算タイプC(引く数を分ける)\_問題

名前 : \_\_\_\_\_

$$\boxed{16} - \boxed{7} = \underline{\hspace{2cm}}$$


$$\boxed{17} - \boxed{8} = \underline{\hspace{2cm}}$$


$$\boxed{11} - \boxed{6} = \underline{\hspace{2cm}}$$


$$\boxed{15} - \boxed{9} = \underline{\hspace{2cm}}$$


さくらんぼ引き算タイプC(引く数を分ける)\_問題

名前 : \_\_\_\_\_

$$\boxed{11} - \boxed{7} = \underline{\hspace{2cm}}$$

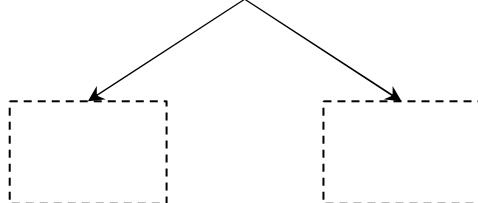
$$\boxed{12} - \boxed{9} = \underline{\hspace{2cm}}$$

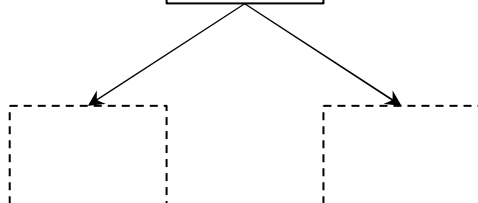
$$\boxed{16} - \boxed{7} = \underline{\hspace{2cm}}$$

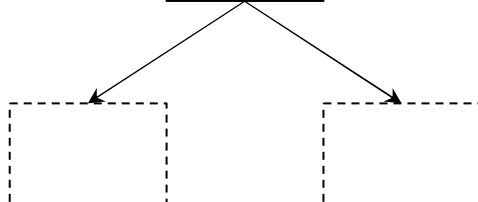
$$\boxed{13} - \boxed{5} = \underline{\hspace{2cm}}$$

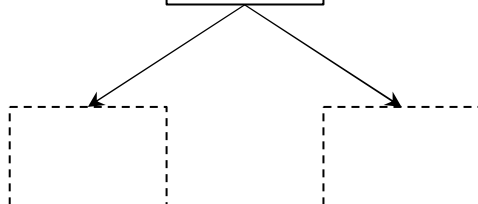
さくらんぼ引き算タイプC(引く数を分ける)\_問題

名前 : \_\_\_\_\_

$$\boxed{18} - \boxed{9} = \underline{\hspace{2cm}}$$


$$\boxed{15} - \boxed{8} = \underline{\hspace{2cm}}$$


$$\boxed{16} - \boxed{8} = \underline{\hspace{2cm}}$$


$$\boxed{12} - \boxed{7} = \underline{\hspace{2cm}}$$


さくらんぼ引き算タイプC(引く数を分ける)\_問題

名前 : \_\_\_\_\_

$$\boxed{13} - \boxed{9} = \underline{\hspace{2cm}}$$

$$\boxed{12} - \boxed{4} = \underline{\hspace{2cm}}$$

$$\boxed{18} - \boxed{9} = \underline{\hspace{2cm}}$$

$$\boxed{17} - \boxed{9} = \underline{\hspace{2cm}}$$

さくらんぼ引き算タイプC(引く数を分ける)\_問題

名前 : \_\_\_\_\_

$$\boxed{18} - \boxed{9} = \underline{\hspace{2cm}}$$

$$\boxed{16} - \boxed{9} = \underline{\hspace{2cm}}$$

$$\boxed{17} - \boxed{9} = \underline{\hspace{2cm}}$$

$$\boxed{15} - \boxed{9} = \underline{\hspace{2cm}}$$

さくらんぼ引き算タイプC(引く数を分ける)\_問題

名前 : \_\_\_\_\_

$$\boxed{16} - \boxed{8} = \underline{\hspace{2cm}}$$

$$\boxed{18} - \boxed{9} = \underline{\hspace{2cm}}$$

$$\boxed{11} - \boxed{6} = \underline{\hspace{2cm}}$$

$$\boxed{14} - \boxed{6} = \underline{\hspace{2cm}}$$

さくらんぼ引き算タイプC(引く数を分ける)\_問題

名前 : \_\_\_\_\_

$$\boxed{15} - \boxed{9} = \underline{\hspace{2cm}}$$

$$\boxed{11} - \boxed{5} = \underline{\hspace{2cm}}$$

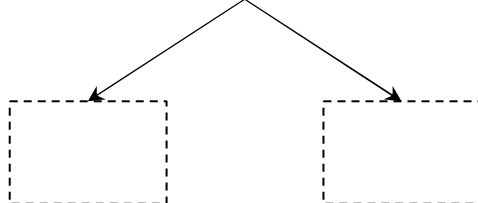
$$\boxed{12} - \boxed{9} = \underline{\hspace{2cm}}$$

$$\boxed{18} - \boxed{9} = \underline{\hspace{2cm}}$$

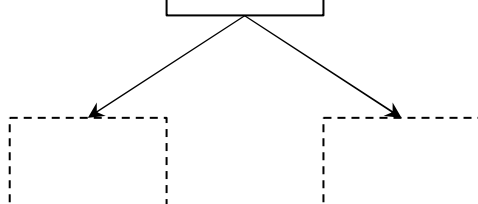
さくらんぼ引き算タイプC(引く数を分ける)\_問題

名前 : \_\_\_\_\_

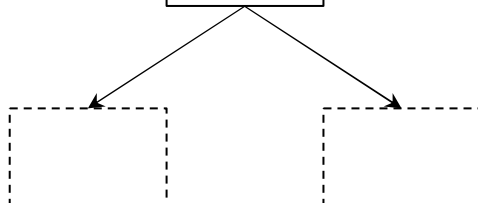
$$\boxed{12} - \boxed{5} = \underline{\hspace{2cm}}$$



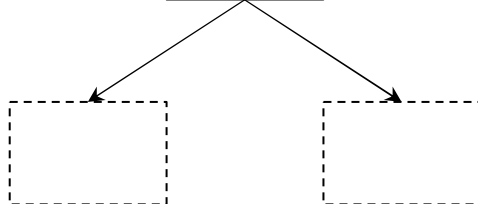
$$\boxed{18} - \boxed{9} = \underline{\hspace{2cm}}$$



$$\boxed{16} - \boxed{7} = \underline{\hspace{2cm}}$$



$$\boxed{13} - \boxed{6} = \underline{\hspace{2cm}}$$





さくらんぼ引き算タイプC(引く数を分ける)\_問題

名前 : \_\_\_\_\_

$$\boxed{13} - \boxed{8} = \underline{\hspace{2cm}}$$

$$\boxed{15} - \boxed{8} = \underline{\hspace{2cm}}$$

$$\boxed{12} - \boxed{9} = \underline{\hspace{2cm}}$$

$$\boxed{14} - \boxed{5} = \underline{\hspace{2cm}}$$

さくらんぼ引き算タイプC(引く数を分ける)\_問題

名前 : \_\_\_\_\_

$$\boxed{18} - \boxed{9} = \underline{\hspace{2cm}}$$

$$\boxed{15} - \boxed{9} = \underline{\hspace{2cm}}$$

$$\boxed{17} - \boxed{9} = \underline{\hspace{2cm}}$$

$$\boxed{16} - \boxed{8} = \underline{\hspace{2cm}}$$

さくらんぼ引き算タイプC(引く数を分ける)\_問題

名前 : \_\_\_\_\_

$$\boxed{18} - \boxed{9} = \underline{\hspace{2cm}}$$

$$\boxed{11} - \boxed{2} = \underline{\hspace{2cm}}$$

$$\boxed{17} - \boxed{9} = \underline{\hspace{2cm}}$$

$$\boxed{15} - \boxed{7} = \underline{\hspace{2cm}}$$

さくらんぼ引き算タイプC(引く数を分ける)\_問題

名前 : \_\_\_\_\_

$$\boxed{17} - \boxed{9} = \underline{\hspace{2cm}}$$

$$\boxed{14} - \boxed{7} = \underline{\hspace{2cm}}$$

$$\boxed{15} - \boxed{8} = \underline{\hspace{2cm}}$$

$$\boxed{16} - \boxed{8} = \underline{\hspace{2cm}}$$

さくらんぼ引き算タイプC(引く数を分ける)\_問題

名前 : \_\_\_\_\_

$$\boxed{12} - \boxed{6} = \underline{\hspace{2cm}}$$

$$\boxed{11} - \boxed{9} = \underline{\hspace{2cm}}$$

$$\boxed{16} - \boxed{8} = \underline{\hspace{2cm}}$$

$$\boxed{15} - \boxed{6} = \underline{\hspace{2cm}}$$

さくらんぼ引き算タイプC(引く数を分ける)\_問題

名前 : \_\_\_\_\_

$$\boxed{11} - \boxed{8} = \underline{\hspace{2cm}}$$

$$\boxed{13} - \boxed{7} = \underline{\hspace{2cm}}$$

$$\boxed{12} - \boxed{6} = \underline{\hspace{2cm}}$$

$$\boxed{14} - \boxed{5} = \underline{\hspace{2cm}}$$

さくらんぼ引き算タイプC(引く数を分ける)\_問題

名前 : \_\_\_\_\_

$$\boxed{11} - \boxed{5} = \underline{\hspace{2cm}}$$

$$\boxed{14} - \boxed{7} = \underline{\hspace{2cm}}$$

$$\boxed{16} - \boxed{9} = \underline{\hspace{2cm}}$$

$$\boxed{18} - \boxed{9} = \underline{\hspace{2cm}}$$

さくらんぼ引き算タイプC(引く数を分ける)\_問題

名前 : \_\_\_\_\_

$$\boxed{15} - \boxed{8} = \underline{\hspace{2cm}}$$

$$\boxed{12} - \boxed{3} = \underline{\hspace{2cm}}$$

$$\boxed{14} - \boxed{8} = \underline{\hspace{2cm}}$$

$$\boxed{18} - \boxed{9} = \underline{\hspace{2cm}}$$



さくらんぼ引き算タイプC(引く数を分ける)\_問題

名前 : \_\_\_\_\_

$$\boxed{11} - \boxed{4} = \underline{\hspace{2cm}}$$

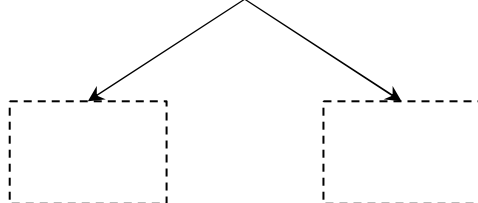
$$\boxed{18} - \boxed{9} = \underline{\hspace{2cm}}$$

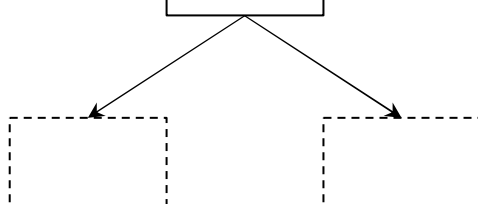
$$\boxed{17} - \boxed{8} = \underline{\hspace{2cm}}$$

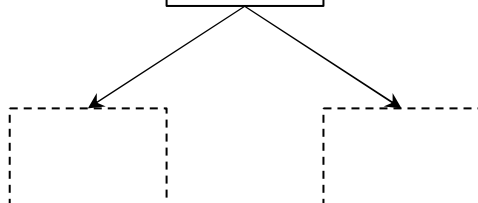
$$\boxed{16} - \boxed{7} = \underline{\hspace{2cm}}$$

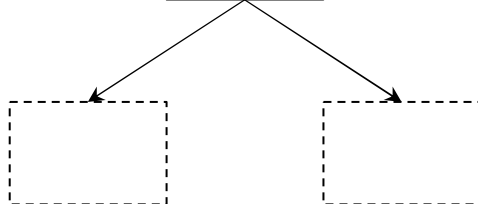
さくらんぼ引き算タイプC(引く数を分ける)\_問題

名前 : \_\_\_\_\_

$$\boxed{11} - \boxed{2} = \underline{\hspace{2cm}}$$


$$\boxed{16} - \boxed{8} = \underline{\hspace{2cm}}$$


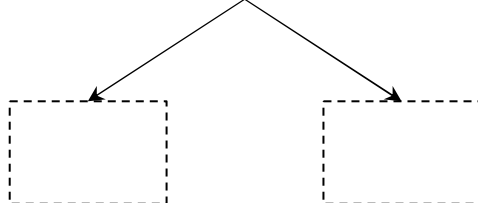
$$\boxed{14} - \boxed{8} = \underline{\hspace{2cm}}$$


$$\boxed{13} - \boxed{4} = \underline{\hspace{2cm}}$$


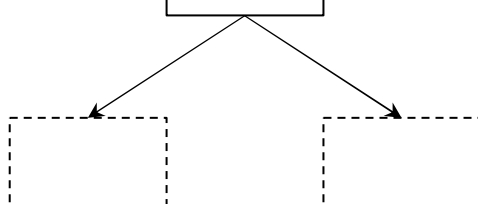
さくらんぼ引き算タイプC(引く数を分ける)\_問題

名前 : \_\_\_\_\_

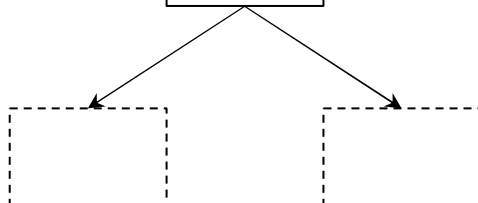
$$\boxed{17} - \boxed{8} = \underline{\hspace{2cm}}$$



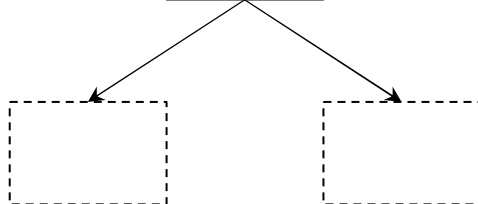
$$\boxed{15} - \boxed{7} = \underline{\hspace{2cm}}$$



$$\boxed{14} - \boxed{9} = \underline{\hspace{2cm}}$$

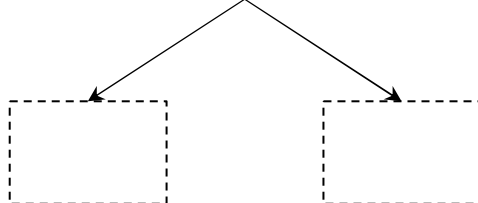


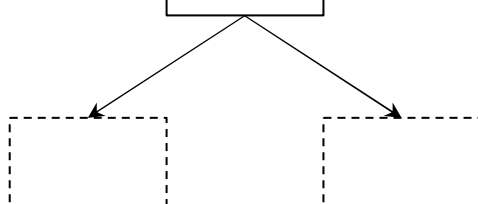
$$\boxed{13} - \boxed{4} = \underline{\hspace{2cm}}$$

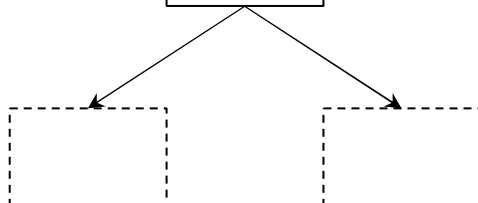


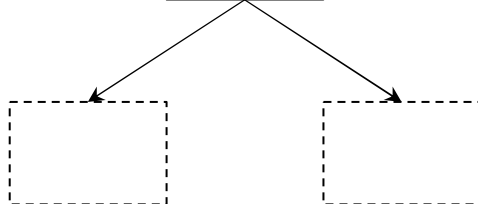
さくらんぼ引き算タイプC(引く数を分ける)\_問題

名前 : \_\_\_\_\_

$$\boxed{16} - \boxed{7} = \underline{\hspace{2cm}}$$


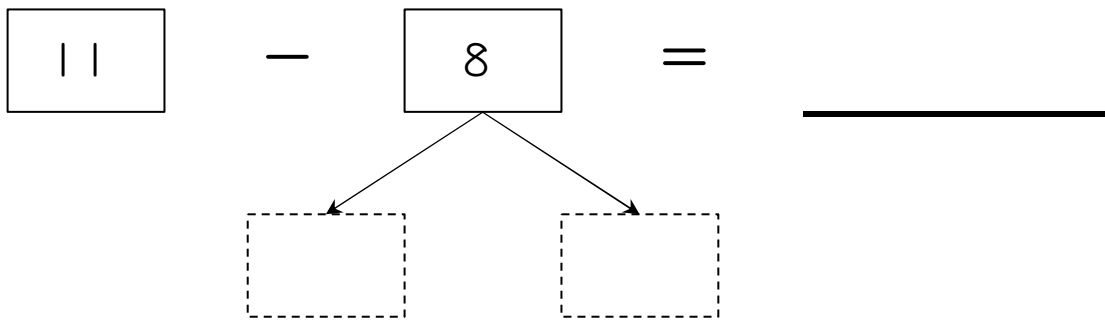
$$\boxed{11} - \boxed{6} = \underline{\hspace{2cm}}$$


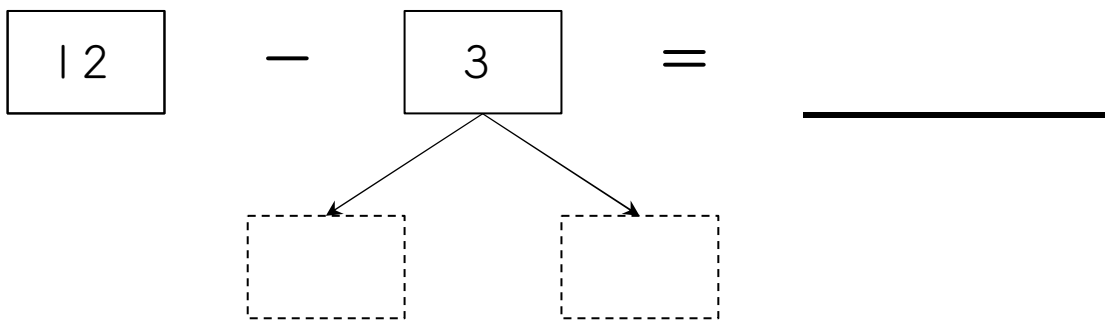
$$\boxed{15} - \boxed{6} = \underline{\hspace{2cm}}$$


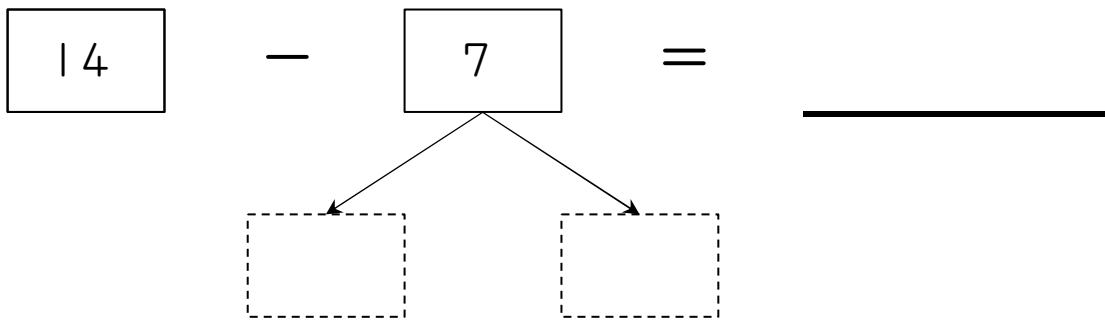
$$\boxed{14} - \boxed{9} = \underline{\hspace{2cm}}$$


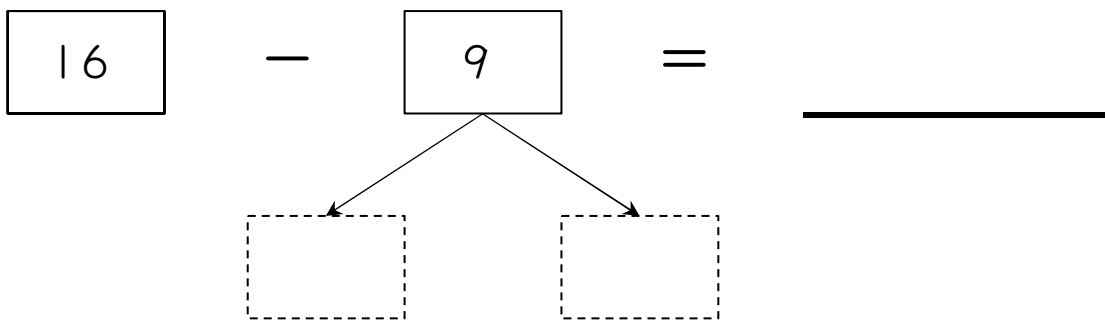
さくらんぼ引き算タイプC(引く数を分ける)\_問題

名前 : \_\_\_\_\_

$$\boxed{11} - \boxed{8} = \underline{\hspace{2cm}}$$


$$\boxed{12} - \boxed{3} = \underline{\hspace{2cm}}$$


$$\boxed{14} - \boxed{7} = \underline{\hspace{2cm}}$$


$$\boxed{16} - \boxed{9} = \underline{\hspace{2cm}}$$


さくらんぼ引き算タイプC(引く数を分ける)\_問題

名前： \_\_\_\_\_

$$\boxed{17} - \boxed{8} = \underline{\hspace{2cm}}$$

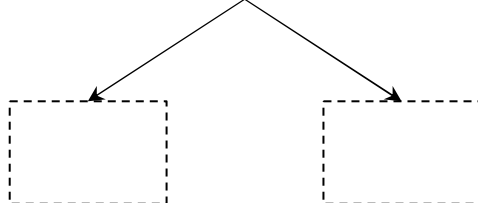
$$\boxed{11} - \boxed{9} = \underline{\hspace{2cm}}$$

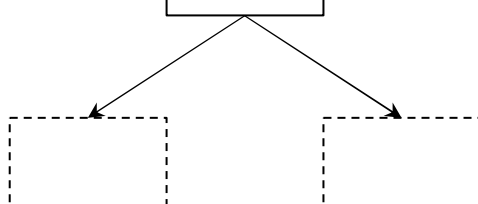
$$\boxed{14} - \boxed{5} = \underline{\hspace{2cm}}$$

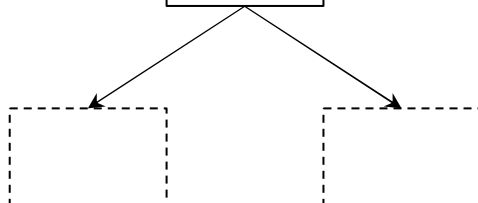
$$\boxed{15} - \boxed{6} = \underline{\hspace{2cm}}$$

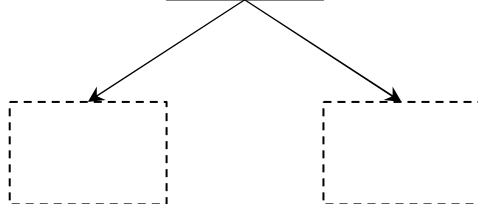
さくらんぼ引き算タイプC(引く数を分ける)\_問題

名前 : \_\_\_\_\_

$$\boxed{13} - \boxed{6} = \underline{\hspace{2cm}}$$


$$\boxed{14} - \boxed{6} = \underline{\hspace{2cm}}$$


$$\boxed{17} - \boxed{9} = \underline{\hspace{2cm}}$$


$$\boxed{12} - \boxed{7} = \underline{\hspace{2cm}}$$


さくらんぼ引き算タイプC(引く数を分ける)\_問題

名前 : \_\_\_\_\_

$$\boxed{16} - \boxed{7} = \underline{\hspace{2cm}}$$

$$\boxed{13} - \boxed{6} = \underline{\hspace{2cm}}$$

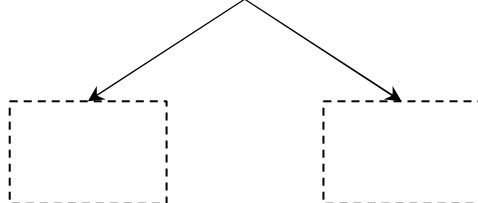
$$\boxed{18} - \boxed{9} = \underline{\hspace{2cm}}$$

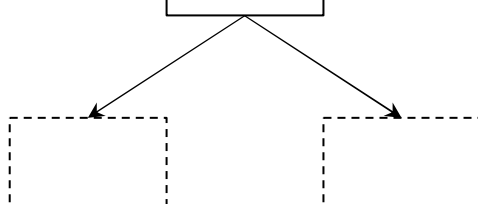
$$\boxed{17} - \boxed{9} = \underline{\hspace{2cm}}$$

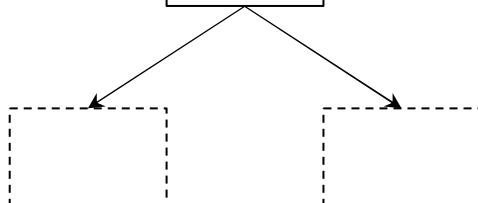


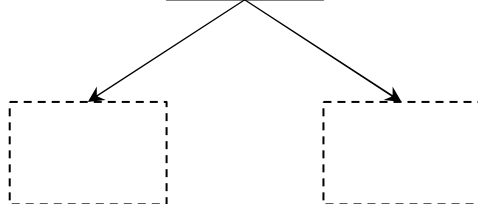
さくらんぼ引き算タイプC(引く数を分ける)\_問題

名前 : \_\_\_\_\_

$$\boxed{16} - \boxed{7} = \underline{\hspace{2cm}}$$


$$\boxed{18} - \boxed{9} = \underline{\hspace{2cm}}$$


$$\boxed{11} - \boxed{3} = \underline{\hspace{2cm}}$$


$$\boxed{15} - \boxed{6} = \underline{\hspace{2cm}}$$


さくらんぼ引き算タイプC(引く数を分ける)\_問題

名前 : \_\_\_\_\_

$$\boxed{18} - \boxed{9} = \underline{\hspace{2cm}}$$

$$\boxed{11} - \boxed{3} = \underline{\hspace{2cm}}$$

$$\boxed{16} - \boxed{9} = \underline{\hspace{2cm}}$$

$$\boxed{14} - \boxed{6} = \underline{\hspace{2cm}}$$

さくらんぼ引き算タイプC(引く数を分ける)\_問題

名前 : \_\_\_\_\_

$$\boxed{15} - \boxed{6} = \underline{\hspace{2cm}}$$

$$\boxed{11} - \boxed{5} = \underline{\hspace{2cm}}$$

$$\boxed{16} - \boxed{7} = \underline{\hspace{2cm}}$$

$$\boxed{12} - \boxed{3} = \underline{\hspace{2cm}}$$

さくらんぼ引き算タイプC(引く数を分ける)\_問題

名前 : \_\_\_\_\_

$$\boxed{14} - \boxed{5} = \underline{\hspace{2cm}}$$

$$\boxed{17} - \boxed{8} = \underline{\hspace{2cm}}$$

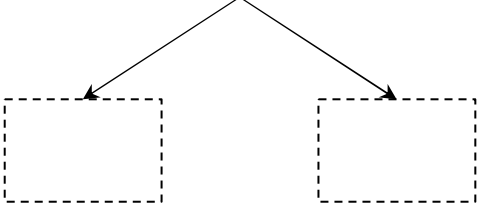
$$\boxed{18} - \boxed{9} = \underline{\hspace{2cm}}$$

$$\boxed{12} - \boxed{7} = \underline{\hspace{2cm}}$$

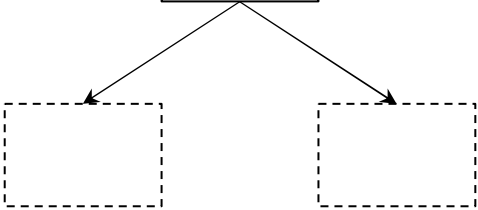
さくらんぼ引き算タイプC(引く数を分ける)\_問題

名前 : \_\_\_\_\_

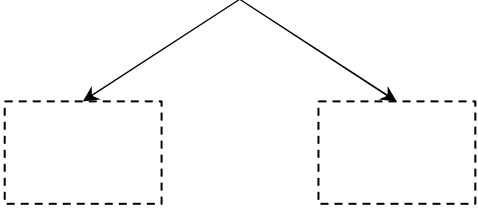
$$\boxed{11} - \boxed{3} = \underline{\hspace{2cm}}$$



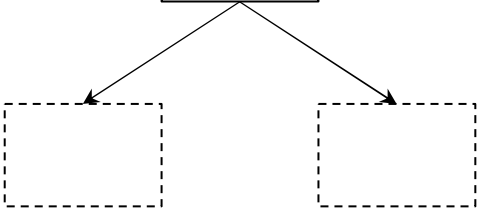
$$\boxed{16} - \boxed{9} = \underline{\hspace{2cm}}$$



$$\boxed{12} - \boxed{7} = \underline{\hspace{2cm}}$$



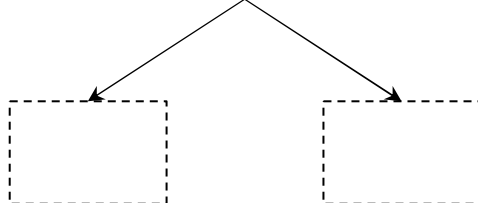
$$\boxed{13} - \boxed{6} = \underline{\hspace{2cm}}$$



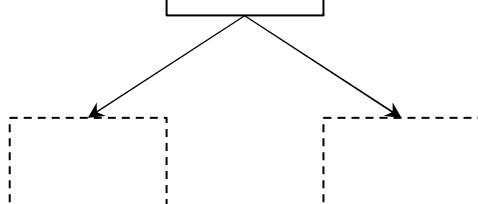
さくらんぼ引き算タイプC(引く数を分ける)\_問題

名前 : \_\_\_\_\_

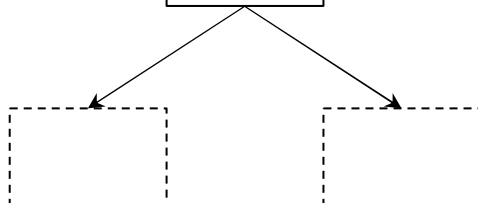
$$\boxed{18} - \boxed{9} = \underline{\hspace{2cm}}$$



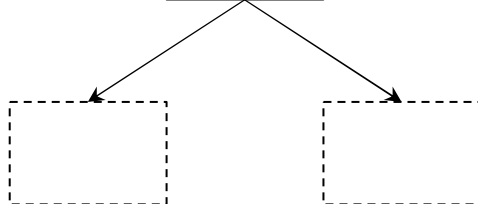
$$\boxed{15} - \boxed{6} = \underline{\hspace{2cm}}$$



$$\boxed{12} - \boxed{9} = \underline{\hspace{2cm}}$$



$$\boxed{17} - \boxed{8} = \underline{\hspace{2cm}}$$



さくらんぼ引き算タイプC(引く数を分ける)\_問題

名前 : \_\_\_\_\_

$$\boxed{16} - \boxed{8} = \underline{\hspace{2cm}}$$

$$\boxed{17} - \boxed{8} = \underline{\hspace{2cm}}$$

$$\boxed{13} - \boxed{4} = \underline{\hspace{2cm}}$$

$$\boxed{14} - \boxed{9} = \underline{\hspace{2cm}}$$

さくらんぼ引き算タイプC(引く数を分ける)\_問題

名前 : \_\_\_\_\_

$$\boxed{18} - \boxed{9} = \underline{\hspace{2cm}}$$

$$\boxed{13} - \boxed{8} = \underline{\hspace{2cm}}$$

$$\boxed{16} - \boxed{8} = \underline{\hspace{2cm}}$$

$$\boxed{17} - \boxed{8} = \underline{\hspace{2cm}}$$



さくらんぼ引き算タイプC(引く数を分ける)\_問題

名前 : \_\_\_\_\_

$$\boxed{12} - \boxed{9} = \underline{\hspace{2cm}}$$

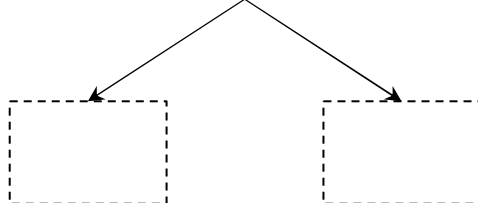
$$\boxed{17} - \boxed{8} = \underline{\hspace{2cm}}$$

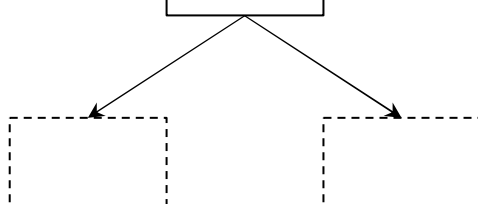
$$\boxed{11} - \boxed{9} = \underline{\hspace{2cm}}$$

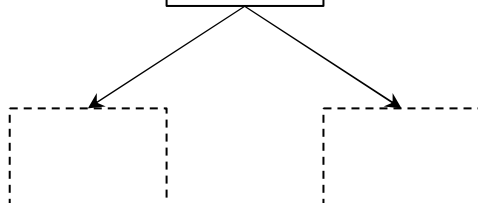
$$\boxed{14} - \boxed{7} = \underline{\hspace{2cm}}$$

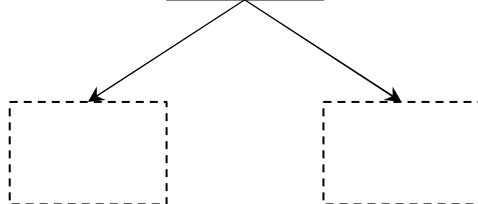
さくらんぼ引き算タイプC(引く数を分ける)\_問題

名前 : \_\_\_\_\_

$$\boxed{18} - \boxed{9} = \underline{\hspace{2cm}}$$


$$\boxed{13} - \boxed{7} = \underline{\hspace{2cm}}$$


$$\boxed{12} - \boxed{4} = \underline{\hspace{2cm}}$$


$$\boxed{11} - \boxed{4} = \underline{\hspace{2cm}}$$


さくらんぼ引き算タイプC(引く数を分ける)\_問題

名前 : \_\_\_\_\_

$$\boxed{15} - \boxed{9} = \underline{\hspace{2cm}}$$

$$\boxed{12} - \boxed{7} = \underline{\hspace{2cm}}$$

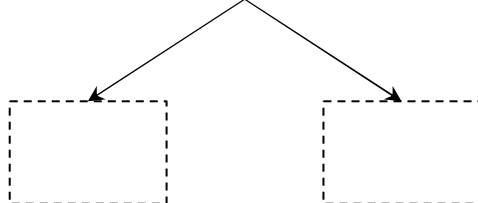
$$\boxed{13} - \boxed{5} = \underline{\hspace{2cm}}$$

$$\boxed{16} - \boxed{9} = \underline{\hspace{2cm}}$$

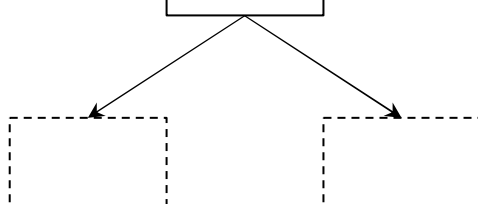
さくらんぼ引き算タイプC(引く数を分ける)\_問題

名前 : \_\_\_\_\_

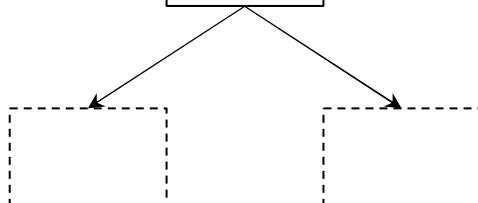
$$\boxed{16} - \boxed{9} = \underline{\hspace{2cm}}$$



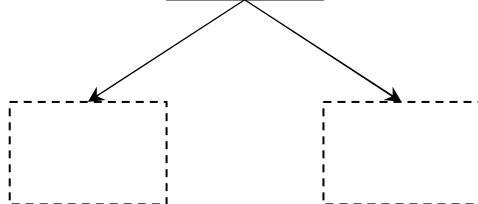
$$\boxed{15} - \boxed{8} = \underline{\hspace{2cm}}$$



$$\boxed{14} - \boxed{7} = \underline{\hspace{2cm}}$$



$$\boxed{18} - \boxed{9} = \underline{\hspace{2cm}}$$



さくらんぼ引き算タイプC(引く数を分ける)\_問題

名前 : \_\_\_\_\_

$$\boxed{12} - \boxed{3} = \underline{\hspace{2cm}}$$

$$\boxed{16} - \boxed{9} = \underline{\hspace{2cm}}$$

$$\boxed{15} - \boxed{8} = \underline{\hspace{2cm}}$$

$$\boxed{11} - \boxed{5} = \underline{\hspace{2cm}}$$

さくらんぼ引き算タイプC(引く数を分ける)\_問題

名前 : \_\_\_\_\_

$$\boxed{11} - \boxed{6} = \underline{\hspace{2cm}}$$

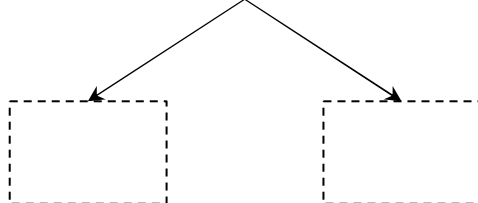
$$\boxed{18} - \boxed{9} = \underline{\hspace{2cm}}$$

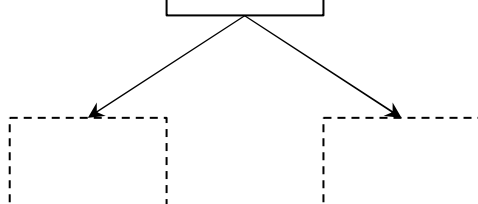
$$\boxed{17} - \boxed{8} = \underline{\hspace{2cm}}$$

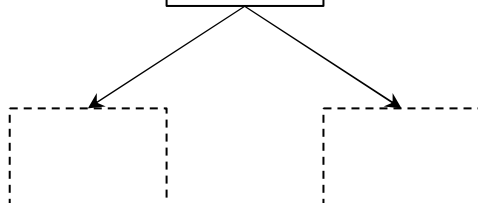
$$\boxed{15} - \boxed{7} = \underline{\hspace{2cm}}$$

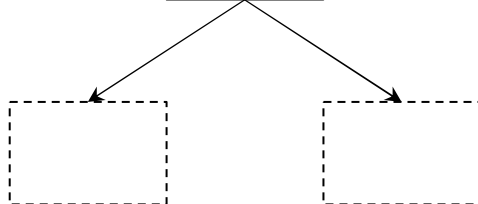
さくらんぼ引き算タイプC(引く数を分ける)\_問題

名前 : \_\_\_\_\_

$$\boxed{15} - \boxed{7} = \underline{\hspace{2cm}}$$


$$\boxed{11} - \boxed{3} = \underline{\hspace{2cm}}$$


$$\boxed{13} - \boxed{8} = \underline{\hspace{2cm}}$$


$$\boxed{16} - \boxed{9} = \underline{\hspace{2cm}}$$


さくらんぼ引き算タイプC(引く数を分ける)\_問題

名前 : \_\_\_\_\_

$$\boxed{16} - \boxed{8} = \underline{\hspace{2cm}}$$

$$\boxed{11} - \boxed{7} = \underline{\hspace{2cm}}$$

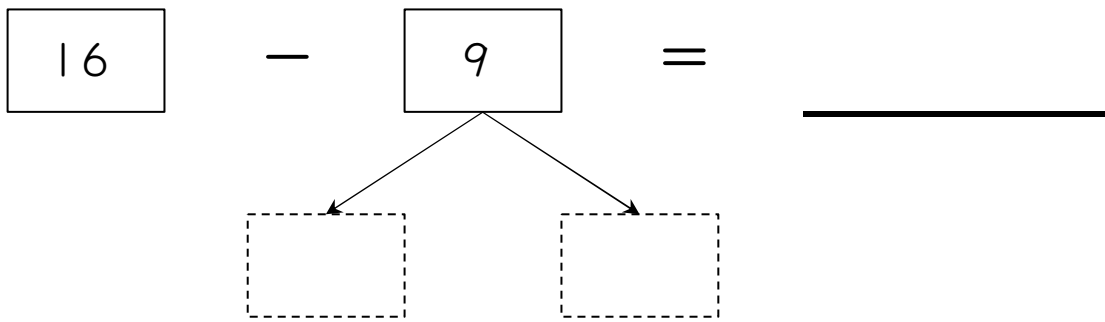
$$\boxed{14} - \boxed{8} = \underline{\hspace{2cm}}$$

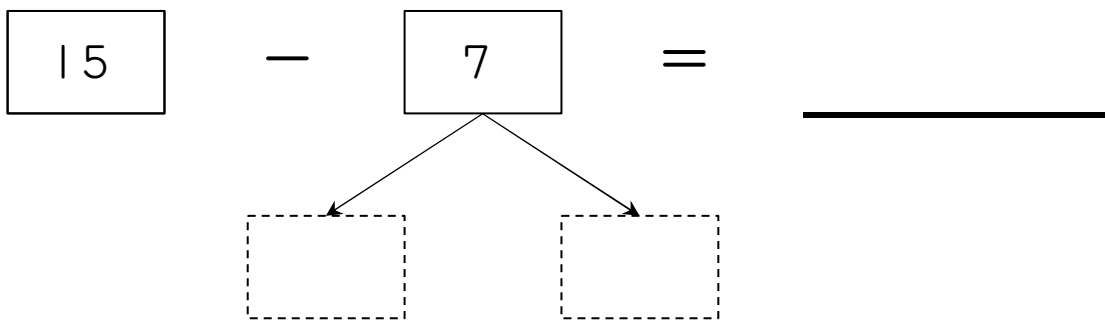
$$\boxed{18} - \boxed{9} = \underline{\hspace{2cm}}$$

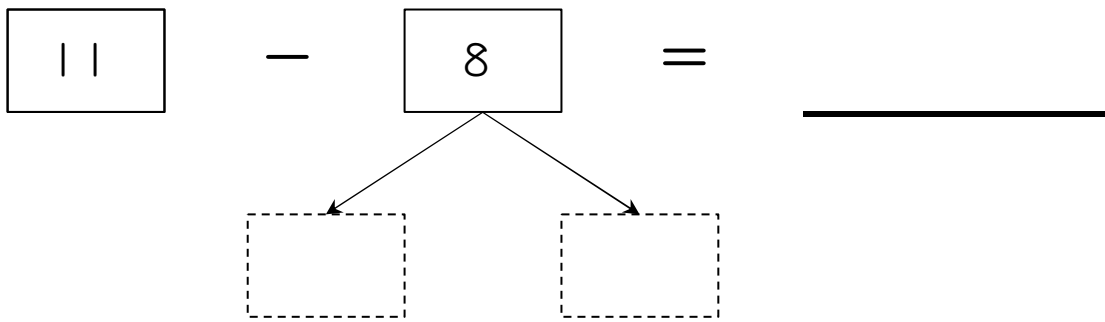


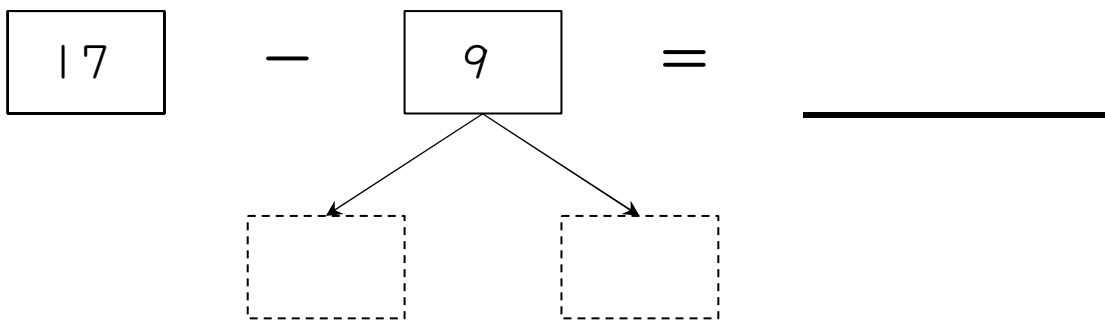
さくらんぼ引き算タイプC(引く数を分ける)\_問題

名前 : \_\_\_\_\_

$$\boxed{16} - \boxed{9} = \underline{\hspace{2cm}}$$


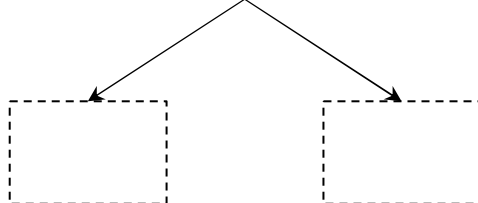
$$\boxed{15} - \boxed{7} = \underline{\hspace{2cm}}$$


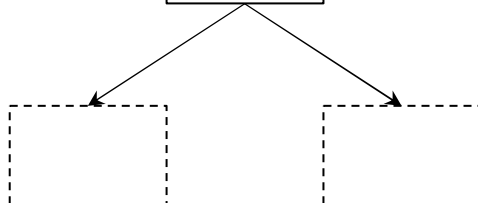
$$\boxed{11} - \boxed{8} = \underline{\hspace{2cm}}$$


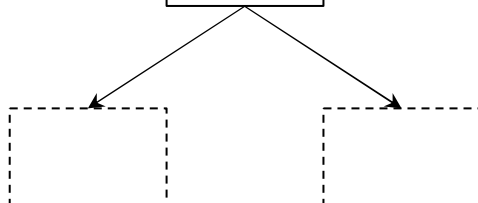
$$\boxed{17} - \boxed{9} = \underline{\hspace{2cm}}$$


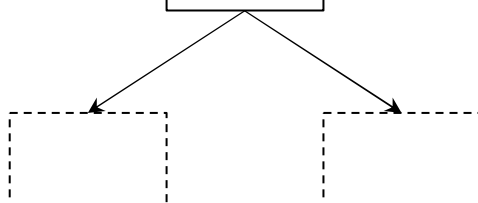
さくらんぼ引き算タイプC(引く数を分ける)\_問題

名前 : \_\_\_\_\_

$$\boxed{15} - \boxed{8} = \underline{\hspace{2cm}}$$


$$\boxed{14} - \boxed{9} = \underline{\hspace{2cm}}$$


$$\boxed{17} - \boxed{9} = \underline{\hspace{2cm}}$$


$$\boxed{11} - \boxed{2} = \underline{\hspace{2cm}}$$


さくらんぼ引き算タイプC(引く数を分ける)\_問題

名前 : \_\_\_\_\_

$$\boxed{12} - \boxed{5} = \underline{\hspace{2cm}}$$

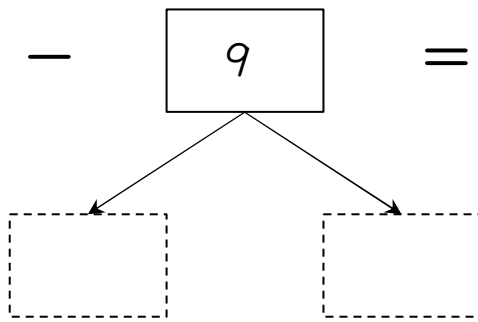
$$\boxed{11} - \boxed{9} = \underline{\hspace{2cm}}$$

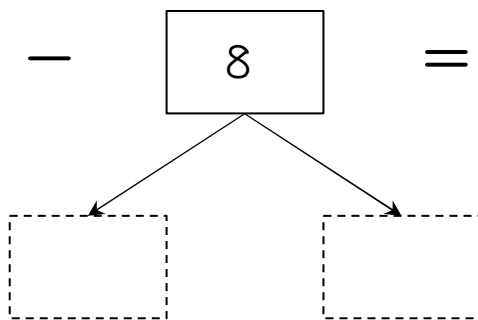
$$\boxed{18} - \boxed{9} = \underline{\hspace{2cm}}$$

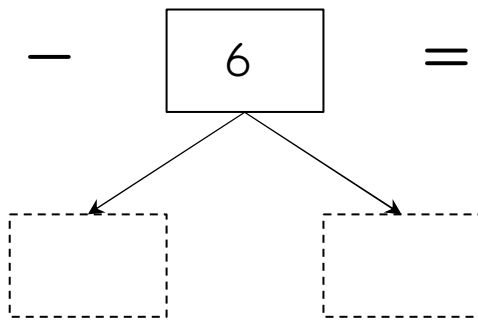
$$\boxed{17} - \boxed{8} = \underline{\hspace{2cm}}$$

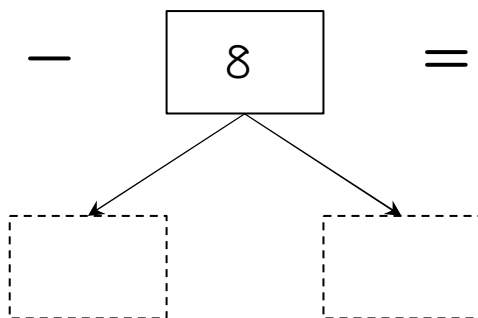
さくらんぼ引き算タイプC(引く数を分ける)\_問題

名前 : \_\_\_\_\_

$$\boxed{18} - \boxed{9} = \underline{\hspace{2cm}}$$


$$\boxed{14} - \boxed{8} = \underline{\hspace{2cm}}$$


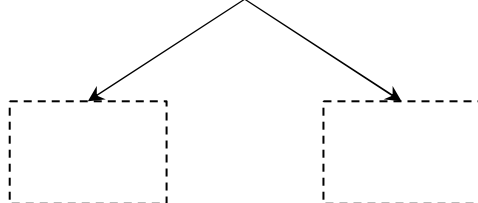
$$\boxed{15} - \boxed{6} = \underline{\hspace{2cm}}$$


$$\boxed{17} - \boxed{8} = \underline{\hspace{2cm}}$$


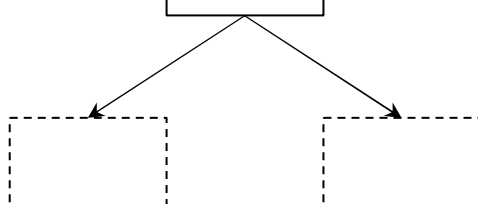
さくらんぼ引き算タイプC(引く数を分ける)\_問題

名前 : \_\_\_\_\_

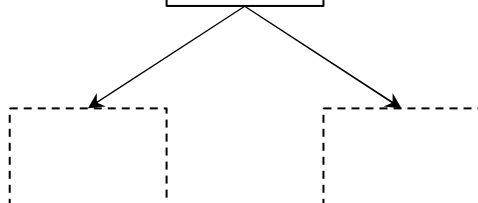
$$\boxed{13} - \boxed{6} = \underline{\hspace{2cm}}$$



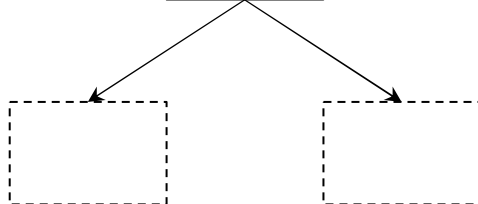
$$\boxed{14} - \boxed{6} = \underline{\hspace{2cm}}$$



$$\boxed{17} - \boxed{9} = \underline{\hspace{2cm}}$$

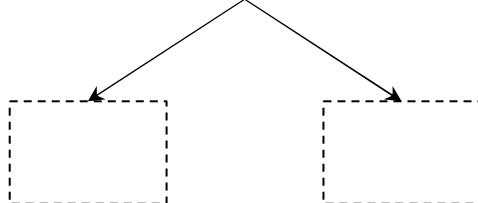


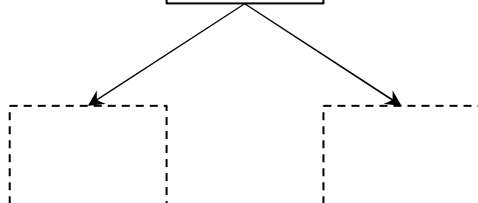
$$\boxed{12} - \boxed{9} = \underline{\hspace{2cm}}$$

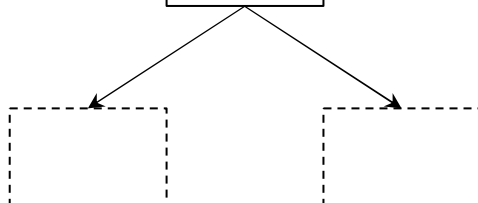


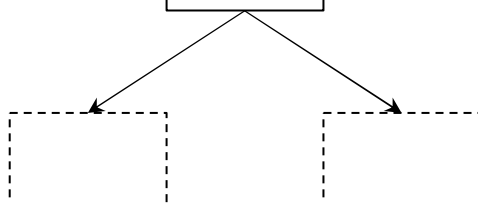
さくらんぼ引き算タイプC(引く数を分ける)\_問題

名前 : \_\_\_\_\_

$$\boxed{16} - \boxed{7} = \underline{\hspace{2cm}}$$


$$\boxed{13} - \boxed{7} = \underline{\hspace{2cm}}$$


$$\boxed{18} - \boxed{9} = \underline{\hspace{2cm}}$$


$$\boxed{12} - \boxed{4} = \underline{\hspace{2cm}}$$


さくらんぼ引き算タイプC(引く数を分ける)\_問題

名前 : \_\_\_\_\_

$$\boxed{17} - \boxed{8} = \underline{\hspace{2cm}}$$

$$\boxed{16} - \boxed{7} = \underline{\hspace{2cm}}$$

$$\boxed{12} - \boxed{9} = \underline{\hspace{2cm}}$$

$$\boxed{18} - \boxed{9} = \underline{\hspace{2cm}}$$

さくらんぼ引き算タイプC(引く数を分ける)\_問題

名前 : \_\_\_\_\_

$$\boxed{13} - \boxed{7} = \underline{\hspace{2cm}}$$

$$\boxed{16} - \boxed{9} = \underline{\hspace{2cm}}$$

$$\boxed{12} - \boxed{5} = \underline{\hspace{2cm}}$$

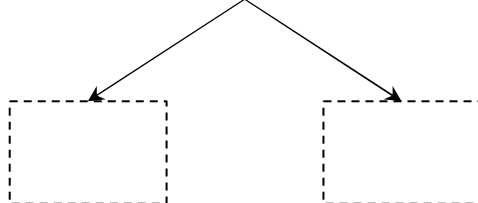
$$\boxed{17} - \boxed{8} = \underline{\hspace{2cm}}$$



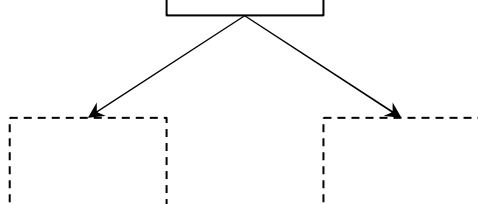
さくらんぼ引き算タイプC(引く数を分ける)\_問題

名前 : \_\_\_\_\_

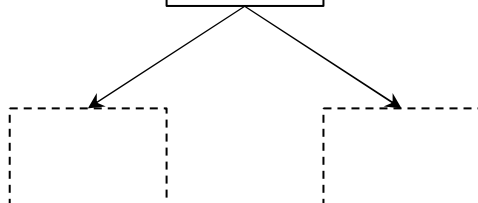
$$\boxed{12} - \boxed{6} = \underline{\hspace{2cm}}$$



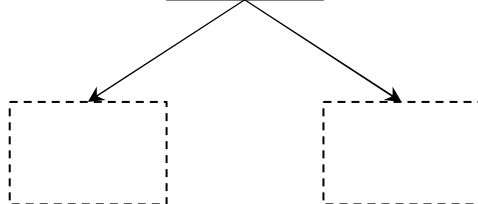
$$\boxed{16} - \boxed{8} = \underline{\hspace{2cm}}$$



$$\boxed{18} - \boxed{9} = \underline{\hspace{2cm}}$$



$$\boxed{11} - \boxed{4} = \underline{\hspace{2cm}}$$



さくらんぼ引き算タイプC(引く数を分ける)\_問題

名前 : \_\_\_\_\_

$$\boxed{13} - \boxed{5} = \underline{\hspace{2cm}}$$

$$\boxed{16} - \boxed{8} = \underline{\hspace{2cm}}$$

$$\boxed{17} - \boxed{9} = \underline{\hspace{2cm}}$$

$$\boxed{14} - \boxed{8} = \underline{\hspace{2cm}}$$

さくらんぼ引き算タイプC(引く数を分ける)\_問題

名前 : \_\_\_\_\_

$$\boxed{13} - \boxed{6} = \underline{\hspace{2cm}}$$

$$\boxed{17} - \boxed{8} = \underline{\hspace{2cm}}$$

$$\boxed{16} - \boxed{7} = \underline{\hspace{2cm}}$$

$$\boxed{15} - \boxed{9} = \underline{\hspace{2cm}}$$

さくらんぼ引き算タイプC(引く数を分ける)\_問題

名前 : \_\_\_\_\_

$$\boxed{16} - \boxed{8} = \underline{\hspace{2cm}}$$

$$\boxed{15} - \boxed{8} = \underline{\hspace{2cm}}$$

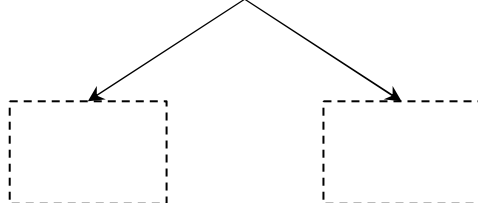
$$\boxed{18} - \boxed{9} = \underline{\hspace{2cm}}$$

$$\boxed{17} - \boxed{8} = \underline{\hspace{2cm}}$$

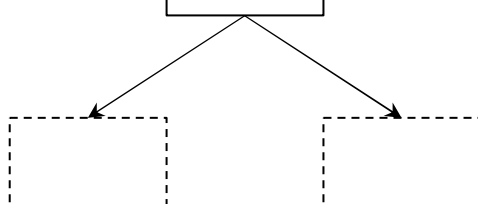
さくらんぼ引き算タイプC(引く数を分ける)\_問題

名前 : \_\_\_\_\_

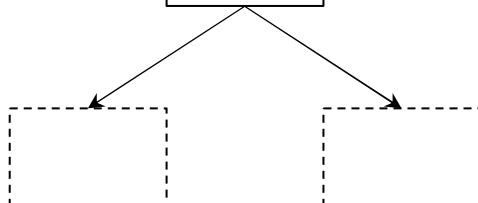
$$\boxed{13} - \boxed{7} = \underline{\hspace{2cm}}$$



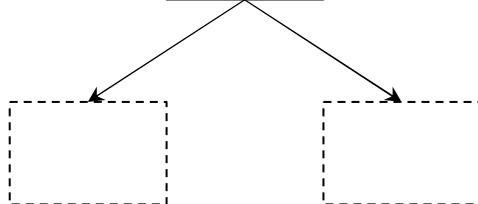
$$\boxed{18} - \boxed{9} = \underline{\hspace{2cm}}$$



$$\boxed{12} - \boxed{6} = \underline{\hspace{2cm}}$$



$$\boxed{16} - \boxed{7} = \underline{\hspace{2cm}}$$



さくらんぼ引き算タイプC(引く数を分ける)\_問題

名前 : \_\_\_\_\_

$$\boxed{17} - \boxed{9} = \underline{\hspace{2cm}}$$

A subtraction problem:  $17 - 9 = \underline{\hspace{2cm}}$ . Below the number 9 is a ten-frame diagram consisting of two rows of five boxes. The number 9 is written in a box above the ten-frame. Two arrows point from the 9 box to two empty boxes below the ten-frame, one in each row, representing the decomposition of 9 into 5 and 4.

$$\boxed{11} - \boxed{2} = \underline{\hspace{2cm}}$$

A subtraction problem:  $11 - 2 = \underline{\hspace{2cm}}$ . Below the number 2 is a ten-frame diagram consisting of two rows of five boxes. The number 2 is written in a box above the ten-frame. Two arrows point from the 2 box to two empty boxes below the ten-frame, one in each row, representing the decomposition of 2 into 2 and 0.

$$\boxed{18} - \boxed{9} = \underline{\hspace{2cm}}$$

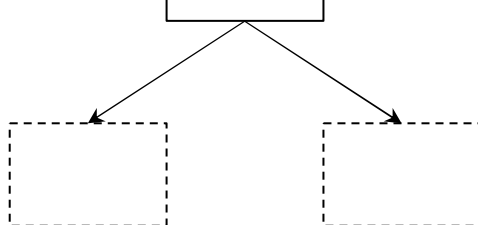
A subtraction problem:  $18 - 9 = \underline{\hspace{2cm}}$ . Below the number 9 is a ten-frame diagram consisting of two rows of five boxes. The number 9 is written in a box above the ten-frame. Two arrows point from the 9 box to two empty boxes below the ten-frame, one in each row, representing the decomposition of 9 into 5 and 4.

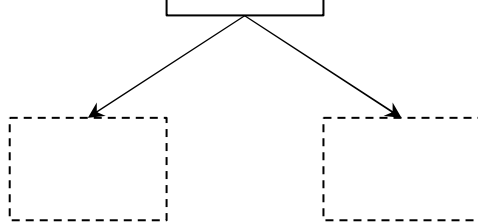
$$\boxed{12} - \boxed{3} = \underline{\hspace{2cm}}$$

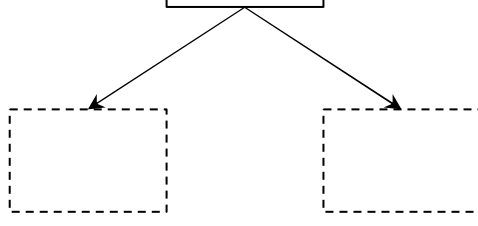
A subtraction problem:  $12 - 3 = \underline{\hspace{2cm}}$ . Below the number 3 is a ten-frame diagram consisting of two rows of five boxes. The number 3 is written in a box above the ten-frame. Two arrows point from the 3 box to two empty boxes below the ten-frame, one in each row, representing the decomposition of 3 into 2 and 1.

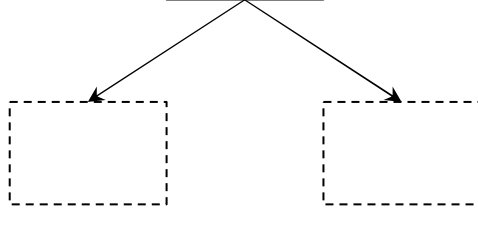
さくらんぼ引き算タイプC(引く数を分ける)\_問題

名前 : \_\_\_\_\_

$$\boxed{14} - \boxed{8} = \underline{\hspace{2cm}}$$


$$\boxed{17} - \boxed{9} = \underline{\hspace{2cm}}$$


$$\boxed{13} - \boxed{5} = \underline{\hspace{2cm}}$$


$$\boxed{18} - \boxed{9} = \underline{\hspace{2cm}}$$


さくらんぼ引き算タイプC(引く数を分ける)\_問題

名前 : \_\_\_\_\_

$$\boxed{17} - \boxed{8} = \underline{\hspace{2cm}}$$

$$\boxed{12} - \boxed{7} = \underline{\hspace{2cm}}$$

$$\boxed{16} - \boxed{8} = \underline{\hspace{2cm}}$$

$$\boxed{13} - \boxed{9} = \underline{\hspace{2cm}}$$



さくらんぼ引き算タイプC(引く数を分ける)\_問題

名前 : \_\_\_\_\_

$$\boxed{15} - \boxed{7} = \underline{\hspace{2cm}}$$

$$\boxed{18} - \boxed{9} = \underline{\hspace{2cm}}$$

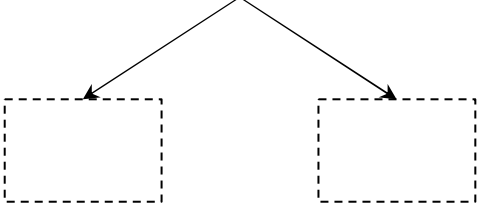
$$\boxed{11} - \boxed{8} = \underline{\hspace{2cm}}$$

$$\boxed{14} - \boxed{7} = \underline{\hspace{2cm}}$$

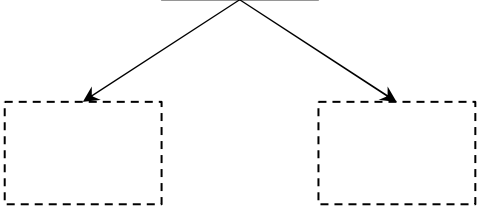
さくらんぼ引き算タイプC(引く数を分ける)\_問題

名前 : \_\_\_\_\_

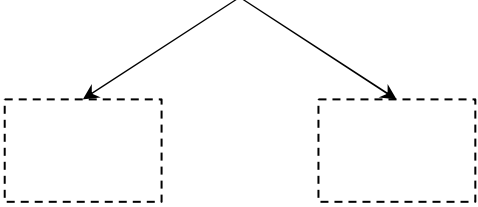
$$\boxed{18} - \boxed{9} = \underline{\hspace{2cm}}$$



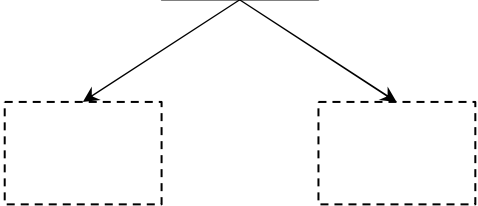
$$\boxed{16} - \boxed{9} = \underline{\hspace{2cm}}$$



$$\boxed{17} - \boxed{8} = \underline{\hspace{2cm}}$$

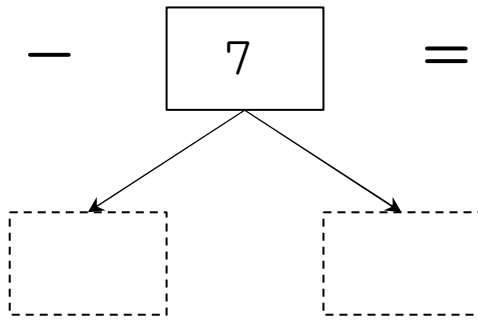


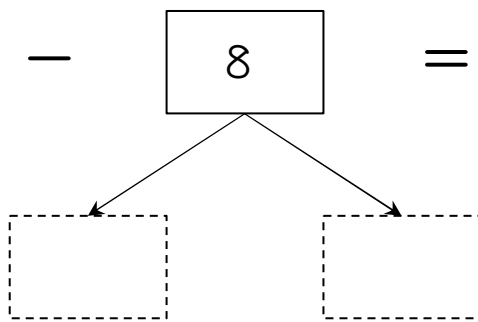
$$\boxed{12} - \boxed{8} = \underline{\hspace{2cm}}$$

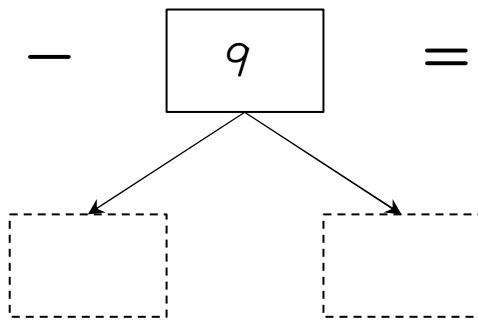


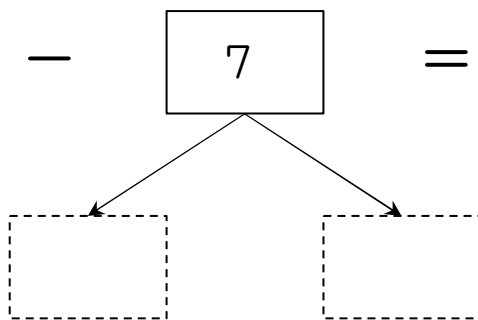
さくらんぼ引き算タイプC(引く数を分ける)\_問題

名前 : \_\_\_\_\_

$$\boxed{14} - \boxed{7} = \underline{\hspace{2cm}}$$


$$\boxed{12} - \boxed{8} = \underline{\hspace{2cm}}$$


$$\boxed{17} - \boxed{9} = \underline{\hspace{2cm}}$$


$$\boxed{13} - \boxed{7} = \underline{\hspace{2cm}}$$


さくらんぼ引き算タイプC(引く数を分ける)\_問題

名前 : \_\_\_\_\_

$$\boxed{12} - \boxed{6} = \underline{\hspace{2cm}}$$

$$\boxed{14} - \boxed{7} = \underline{\hspace{2cm}}$$

$$\boxed{17} - \boxed{8} = \underline{\hspace{2cm}}$$

$$\boxed{13} - \boxed{9} = \underline{\hspace{2cm}}$$

さくらんぼ引き算タイプC(引く数を分ける)\_問題

名前 : \_\_\_\_\_

$$\boxed{14} - \boxed{7} = \underline{\hspace{2cm}}$$

$$\boxed{18} - \boxed{9} = \underline{\hspace{2cm}}$$

$$\boxed{16} - \boxed{8} = \underline{\hspace{2cm}}$$

$$\boxed{13} - \boxed{7} = \underline{\hspace{2cm}}$$

さくらんぼ引き算タイプC(引く数を分ける)\_問題

名前 : \_\_\_\_\_

$$\boxed{12} - \boxed{7} = \underline{\hspace{2cm}}$$

$$\boxed{15} - \boxed{7} = \underline{\hspace{2cm}}$$

$$\boxed{17} - \boxed{9} = \underline{\hspace{2cm}}$$

$$\boxed{13} - \boxed{6} = \underline{\hspace{2cm}}$$

さくらんぼ引き算タイプC(引く数を分ける)問題

名前： \_\_\_\_\_

$$\boxed{11} - \boxed{3} = \underline{\hspace{2cm}}$$

$$\boxed{13} - \boxed{5} = \underline{\hspace{2cm}}$$

$$\boxed{15} - \boxed{8} = \underline{\hspace{2cm}}$$

$$\boxed{12} - \boxed{3} = \underline{\hspace{2cm}}$$

さくらんぼ引き算タイプC(引く数を分ける)\_問題

名前 : \_\_\_\_\_

$$\boxed{15} - \boxed{7} = \underline{\hspace{2cm}}$$

$$\boxed{14} - \boxed{8} = \underline{\hspace{2cm}}$$

$$\boxed{13} - \boxed{5} = \underline{\hspace{2cm}}$$

$$\boxed{18} - \boxed{9} = \underline{\hspace{2cm}}$$



さくらんぼ引き算タイプC(引く数を分ける)\_問題

名前 : \_\_\_\_\_

$$\boxed{17} - \boxed{8} = \underline{\hspace{2cm}}$$

$$\boxed{16} - \boxed{9} = \underline{\hspace{2cm}}$$

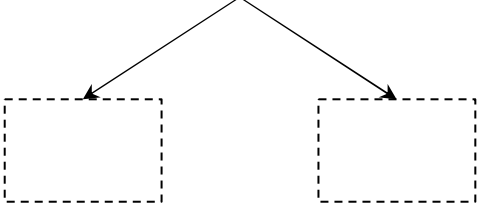
$$\boxed{13} - \boxed{5} = \underline{\hspace{2cm}}$$

$$\boxed{18} - \boxed{9} = \underline{\hspace{2cm}}$$

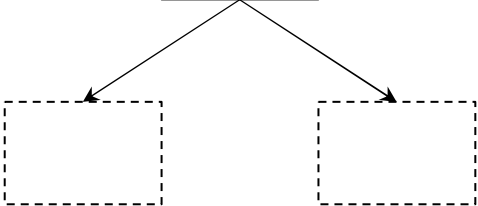
さくらんぼ引き算タイプC(引く数を分ける)\_問題

名前 : \_\_\_\_\_

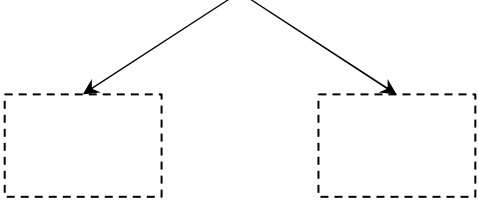
$$\boxed{16} - \boxed{8} = \underline{\hspace{2cm}}$$



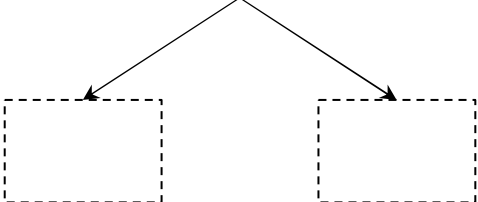
$$\boxed{12} - \boxed{5} = \underline{\hspace{2cm}}$$



$$\boxed{18} - \boxed{9} = \underline{\hspace{2cm}}$$



$$\boxed{13} - \boxed{7} = \underline{\hspace{2cm}}$$



さくらんぼ引き算タイプC(引く数を分ける)\_問題

名前 : \_\_\_\_\_

$$\boxed{12} - \boxed{3} = \underline{\hspace{2cm}}$$

$$\boxed{13} - \boxed{8} = \underline{\hspace{2cm}}$$

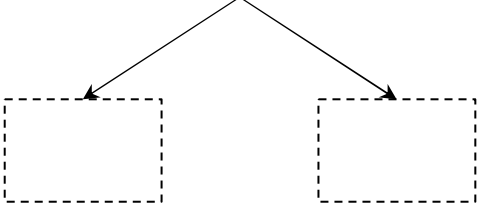
$$\boxed{14} - \boxed{8} = \underline{\hspace{2cm}}$$

$$\boxed{11} - \boxed{2} = \underline{\hspace{2cm}}$$

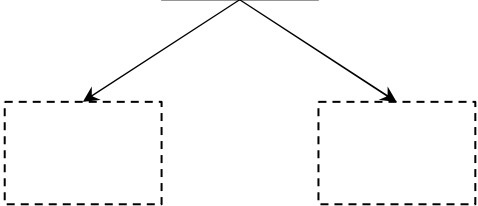
さくらんぼ引き算タイプC(引く数を分ける)\_問題

名前 : \_\_\_\_\_

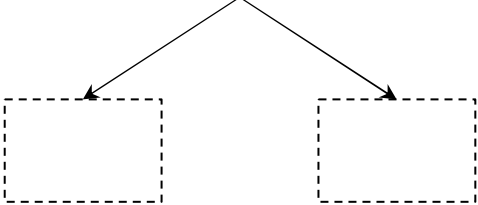
$$\boxed{17} - \boxed{8} = \underline{\hspace{2cm}}$$



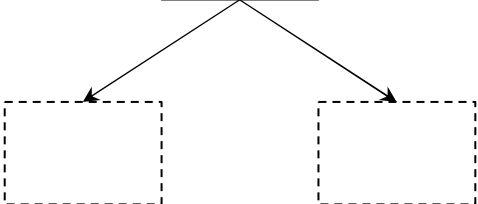
$$\boxed{12} - \boxed{3} = \underline{\hspace{2cm}}$$



$$\boxed{16} - \boxed{8} = \underline{\hspace{2cm}}$$



$$\boxed{13} - \boxed{9} = \underline{\hspace{2cm}}$$



さくらんぼ引き算タイプC(引く数を分ける)\_問題

名前 : \_\_\_\_\_

$$\boxed{14} - \boxed{5} = \underline{\hspace{2cm}}$$

$$\boxed{11} - \boxed{8} = \underline{\hspace{2cm}}$$

$$\boxed{17} - \boxed{9} = \underline{\hspace{2cm}}$$

$$\boxed{15} - \boxed{9} = \underline{\hspace{2cm}}$$

さくらんぼ引き算タイプC(引く数を分ける)\_問題

名前 : \_\_\_\_\_

$$\boxed{11} - \boxed{8} = \underline{\hspace{2cm}}$$

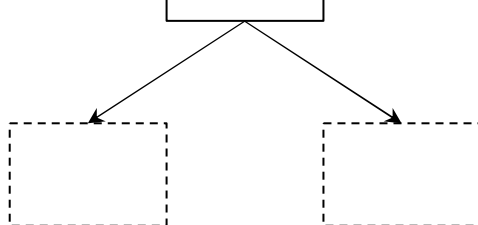
$$\boxed{16} - \boxed{8} = \underline{\hspace{2cm}}$$

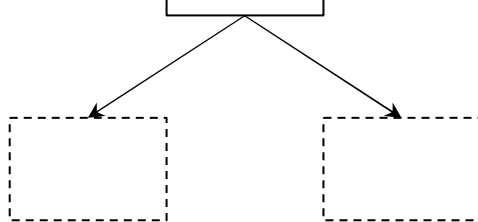
$$\boxed{17} - \boxed{9} = \underline{\hspace{2cm}}$$

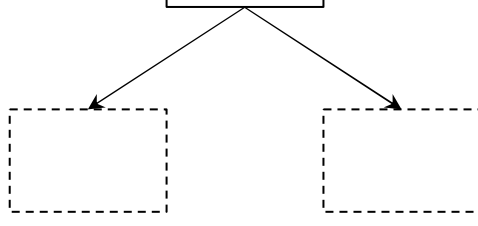
$$\boxed{14} - \boxed{6} = \underline{\hspace{2cm}}$$

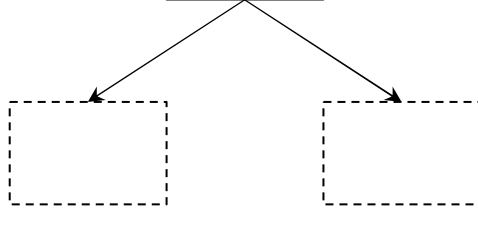
さくらんぼ引き算タイプC(引く数を分ける)\_問題

名前 : \_\_\_\_\_

$$\boxed{12} - \boxed{8} = \underline{\hspace{2cm}}$$


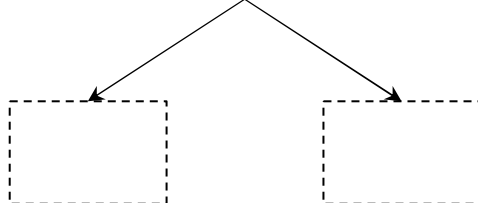
$$\boxed{13} - \boxed{8} = \underline{\hspace{2cm}}$$


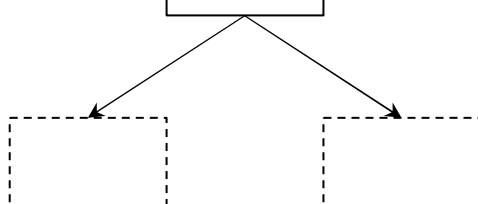
$$\boxed{16} - \boxed{8} = \underline{\hspace{2cm}}$$


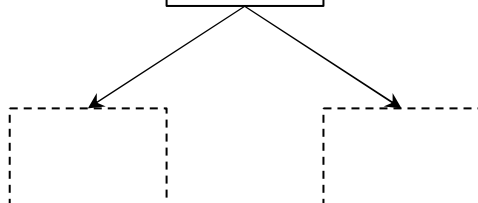
$$\boxed{14} - \boxed{8} = \underline{\hspace{2cm}}$$


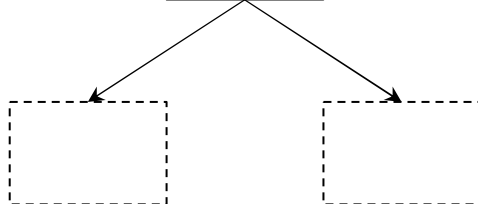
さくらんぼ引き算タイプC(引く数を分ける)\_問題

名前 : \_\_\_\_\_

$$\boxed{15} - \boxed{6} = \underline{\hspace{2cm}}$$


$$\boxed{18} - \boxed{9} = \underline{\hspace{2cm}}$$


$$\boxed{13} - \boxed{7} = \underline{\hspace{2cm}}$$


$$\boxed{14} - \boxed{9} = \underline{\hspace{2cm}}$$




さくらんぼ引き算タイプC(引く数を分ける)\_問題

名前 : \_\_\_\_\_

$$\boxed{14} - \boxed{6} = \underline{\hspace{2cm}}$$

$$\boxed{16} - \boxed{9} = \underline{\hspace{2cm}}$$

$$\boxed{11} - \boxed{3} = \underline{\hspace{2cm}}$$

$$\boxed{18} - \boxed{9} = \underline{\hspace{2cm}}$$

さくらんぼ引き算タイプC(引く数を分ける)\_問題

名前 : \_\_\_\_\_

$$\boxed{12} - \boxed{5} = \underline{\hspace{2cm}}$$

$$\boxed{16} - \boxed{7} = \underline{\hspace{2cm}}$$


$$\boxed{18} - \boxed{9} = \underline{\hspace{2cm}}$$

$$\boxed{11} - \boxed{8} = \underline{\hspace{2cm}}$$

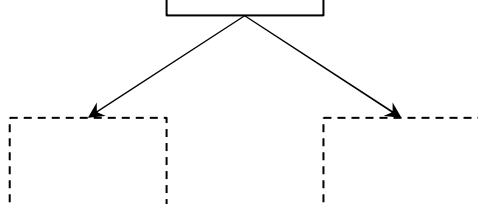
さくらんぼ引き算タイプC(引く数を分ける)\_問題

名前 : \_\_\_\_\_

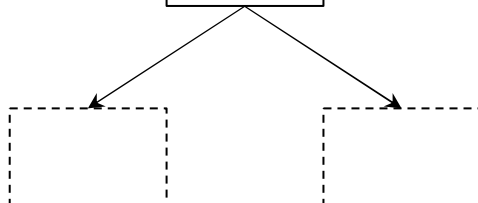
$$\boxed{16} - \boxed{8} = \underline{\hspace{2cm}}$$



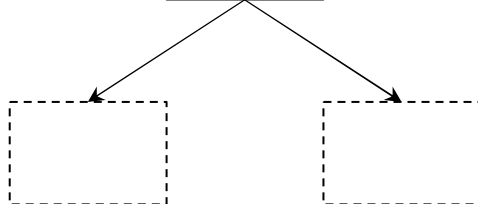
$$\boxed{14} - \boxed{5} = \underline{\hspace{2cm}}$$



$$\boxed{12} - \boxed{4} = \underline{\hspace{2cm}}$$



$$\boxed{13} - \boxed{9} = \underline{\hspace{2cm}}$$



さくらんぼ引き算タイプC(引く数を分ける)\_問題

名前 : \_\_\_\_\_

$$\boxed{16} - \boxed{9} = \underline{\hspace{2cm}}$$

$$\boxed{13} - \boxed{8} = \underline{\hspace{2cm}}$$

$$\boxed{11} - \boxed{6} = \underline{\hspace{2cm}}$$

$$\boxed{15} - \boxed{9} = \underline{\hspace{2cm}}$$

さくらんぼ引き算タイプC(引く数を分ける)\_問題

名前 : \_\_\_\_\_

$$\boxed{16} - \boxed{8} = \underline{\hspace{2cm}}$$

$$\boxed{12} - \boxed{5} = \underline{\hspace{2cm}}$$

$$\boxed{18} - \boxed{9} = \underline{\hspace{2cm}}$$

$$\boxed{14} - \boxed{8} = \underline{\hspace{2cm}}$$

さくらんぼ引き算タイプC(引く数を分ける)\_問題

名前 : \_\_\_\_\_

$$\boxed{17} - \boxed{9} = \underline{\hspace{2cm}}$$

$$\boxed{16} - \boxed{9} = \underline{\hspace{2cm}}$$

$$\boxed{11} - \boxed{9} = \underline{\hspace{2cm}}$$

$$\boxed{14} - \boxed{7} = \underline{\hspace{2cm}}$$

さくらんぼ引き算タイプC(引く数を分ける)\_問題

名前 : \_\_\_\_\_

$$\boxed{12} - \boxed{4} = \underline{\hspace{2cm}}$$

$$\boxed{15} - \boxed{8} = \underline{\hspace{2cm}}$$

$$\boxed{13} - \boxed{4} = \underline{\hspace{2cm}}$$

$$\boxed{17} - \boxed{9} = \underline{\hspace{2cm}}$$

さくらんぼ引き算タイプC(引く数を分ける)\_問題

名前 : \_\_\_\_\_

$$\boxed{18} - \boxed{9} = \underline{\hspace{2cm}}$$

$$\boxed{13} - \boxed{9} = \underline{\hspace{2cm}}$$

$$\boxed{17} - \boxed{8} = \underline{\hspace{2cm}}$$

$$\boxed{16} - \boxed{8} = \underline{\hspace{2cm}}$$



さくらんぼ引き算タイプC(引く数を分ける)\_問題

名前 : \_\_\_\_\_

$$\boxed{14} - \boxed{7} = \underline{\hspace{2cm}}$$

$$\boxed{16} - \boxed{7} = \underline{\hspace{2cm}}$$

$$\boxed{18} - \boxed{9} = \underline{\hspace{2cm}}$$

$$\boxed{17} - \boxed{9} = \underline{\hspace{2cm}}$$

さくらんぼ引き算タイプC(引く数を分ける)\_問題

名前 : \_\_\_\_\_

$$\boxed{11} - \boxed{9} = \underline{\hspace{2cm}}$$

$$\boxed{15} - \boxed{6} = \underline{\hspace{2cm}}$$

$$\boxed{12} - \boxed{6} = \underline{\hspace{2cm}}$$

$$\boxed{18} - \boxed{9} = \underline{\hspace{2cm}}$$

さくらんぼ引き算タイプC(引く数を分ける)\_問題

名前 : \_\_\_\_\_

$$\boxed{12} - \boxed{4} = \underline{\hspace{2cm}}$$

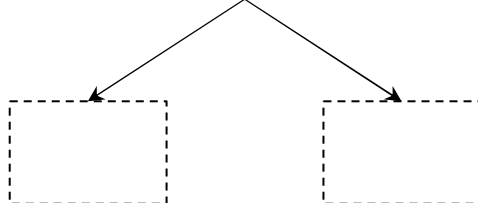
$$\boxed{18} - \boxed{9} = \underline{\hspace{2cm}}$$

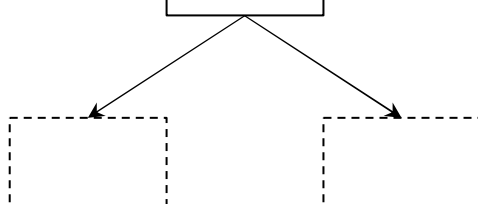
$$\boxed{17} - \boxed{8} = \underline{\hspace{2cm}}$$

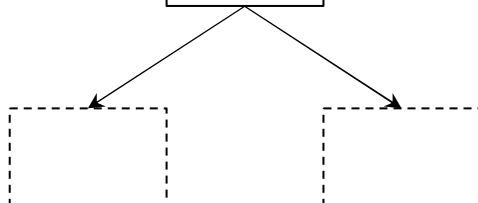
$$\boxed{13} - \boxed{9} = \underline{\hspace{2cm}}$$

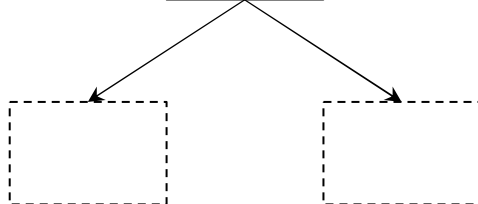
さくらんぼ引き算タイプC(引く数を分ける)\_問題

名前 : \_\_\_\_\_

$$\boxed{18} - \boxed{9} = \underline{\hspace{2cm}}$$


$$\boxed{12} - \boxed{8} = \underline{\hspace{2cm}}$$


$$\boxed{15} - \boxed{8} = \underline{\hspace{2cm}}$$


$$\boxed{14} - \boxed{6} = \underline{\hspace{2cm}}$$


さくらんぼ引き算タイプC(引く数を分ける)\_問題

名前： \_\_\_\_\_

$$\boxed{14} - \boxed{5} = \underline{\hspace{2cm}}$$

$$\boxed{12} - \boxed{5} = \underline{\hspace{2cm}}$$

$$\boxed{18} - \boxed{9} = \underline{\hspace{2cm}}$$

$$\boxed{11} - \boxed{5} = \underline{\hspace{2cm}}$$

さくらんぼ引き算タイプC(引く数を分ける)\_問題

名前 : \_\_\_\_\_

$$\boxed{12} - \boxed{8} = \underline{\hspace{2cm}}$$

$$\boxed{11} - \boxed{8} = \underline{\hspace{2cm}}$$

$$\boxed{16} - \boxed{7} = \underline{\hspace{2cm}}$$

$$\boxed{14} - \boxed{9} = \underline{\hspace{2cm}}$$

さくらんぼ引き算タイプC(引く数を分ける)\_問題

名前 : \_\_\_\_\_

$$\boxed{15} - \boxed{7} = \underline{\hspace{2cm}}$$

$$\boxed{17} - \boxed{8} = \underline{\hspace{2cm}}$$

$$\boxed{13} - \boxed{9} = \underline{\hspace{2cm}}$$

$$\boxed{18} - \boxed{9} = \underline{\hspace{2cm}}$$

さくらんぼ引き算タイプC(引く数を分ける)\_問題

名前 : \_\_\_\_\_

$$\boxed{16} - \boxed{9} = \underline{\hspace{2cm}}$$

$$\boxed{17} - \boxed{9} = \underline{\hspace{2cm}}$$

$$\boxed{14} - \boxed{6} = \underline{\hspace{2cm}}$$

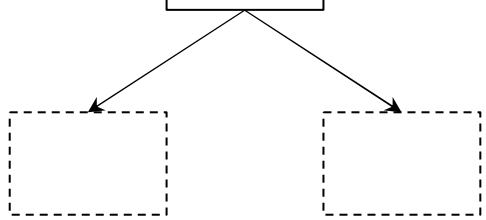
$$\boxed{18} - \boxed{9} = \underline{\hspace{2cm}}$$



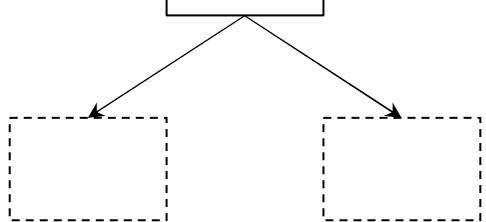
さくらんぼ引き算タイプC(引く数を分ける)\_問題

名前 : \_\_\_\_\_

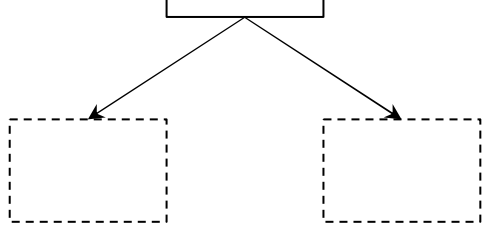
$$\boxed{12} - \boxed{4} = \underline{\hspace{2cm}}$$



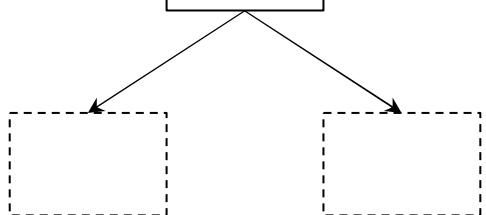
$$\boxed{15} - \boxed{7} = \underline{\hspace{2cm}}$$



$$\boxed{16} - \boxed{9} = \underline{\hspace{2cm}}$$



$$\boxed{11} - \boxed{4} = \underline{\hspace{2cm}}$$



さくらんぼ引き算タイプC(引く数を分ける)\_問題

名前 : \_\_\_\_\_

$$\boxed{15} - \boxed{8} = \underline{\hspace{2cm}}$$

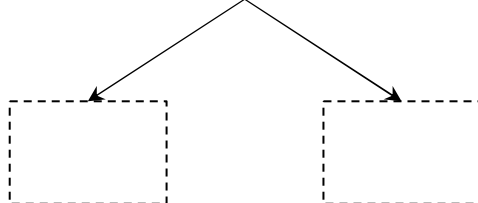
$$\boxed{12} - \boxed{3} = \underline{\hspace{2cm}}$$

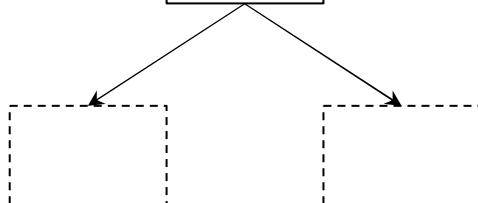
$$\boxed{16} - \boxed{8} = \underline{\hspace{2cm}}$$


$$\boxed{13} - \boxed{7} = \underline{\hspace{2cm}}$$

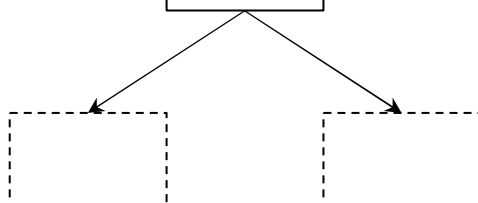
さくらんぼ引き算タイプC(引く数を分ける)\_問題

名前 : \_\_\_\_\_

$$\boxed{17} - \boxed{9} = \underline{\hspace{2cm}}$$


$$\boxed{16} - \boxed{7} = \underline{\hspace{2cm}}$$


$$\boxed{13} - \boxed{7} = \underline{\hspace{2cm}}$$


$$\boxed{18} - \boxed{9} = \underline{\hspace{2cm}}$$


さくらんぼ引き算タイプC(引く数を分ける)\_問題

名前 : \_\_\_\_\_

$$\boxed{16} - \boxed{8} = \underline{\hspace{2cm}}$$

$$\boxed{15} - \boxed{8} = \underline{\hspace{2cm}}$$

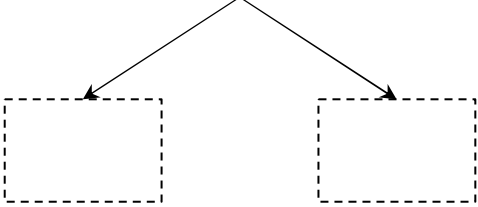
$$\boxed{18} - \boxed{9} = \underline{\hspace{2cm}}$$

$$\boxed{13} - \boxed{5} = \underline{\hspace{2cm}}$$

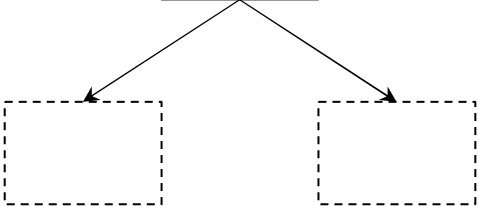
さくらんぼ引き算タイプC(引く数を分ける)\_問題

名前 : \_\_\_\_\_

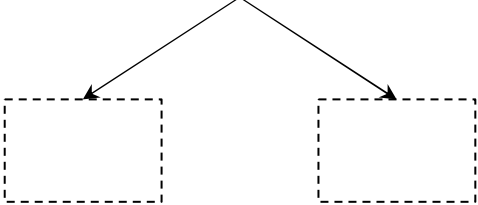
$$\boxed{11} - \boxed{7} = \underline{\hspace{2cm}}$$



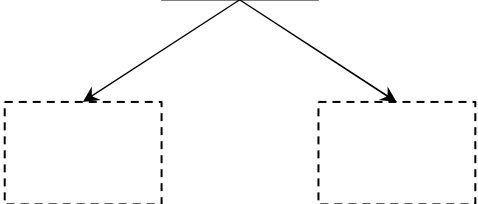
$$\boxed{18} - \boxed{9} = \underline{\hspace{2cm}}$$



$$\boxed{15} - \boxed{8} = \underline{\hspace{2cm}}$$



$$\boxed{13} - \boxed{8} = \underline{\hspace{2cm}}$$



さくらんぼ引き算タイプC(引く数を分ける)\_問題

名前 : \_\_\_\_\_

$$\boxed{16} - \boxed{7} = \underline{\hspace{2cm}}$$

$$\boxed{18} - \boxed{9} = \underline{\hspace{2cm}}$$

$$\boxed{14} - \boxed{9} = \underline{\hspace{2cm}}$$

$$\boxed{12} - \boxed{6} = \underline{\hspace{2cm}}$$

さくらんぼ引き算タイプC(引く数を分ける)\_問題

名前 : \_\_\_\_\_

$$\boxed{11} - \boxed{9} = \underline{\hspace{2cm}}$$

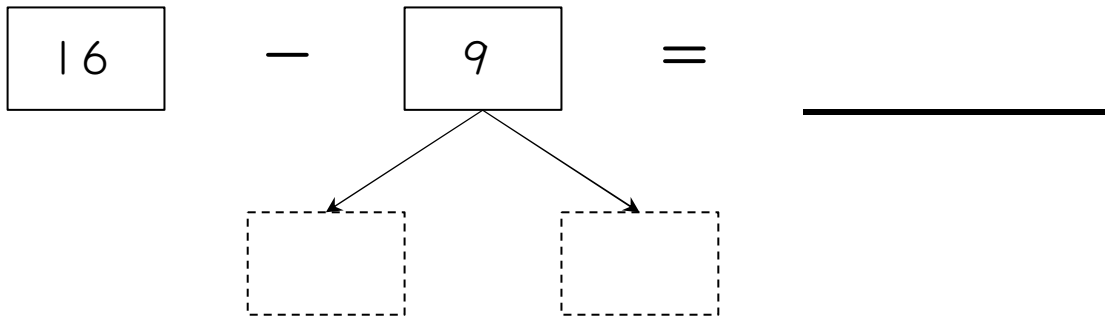
$$\boxed{16} - \boxed{8} = \underline{\hspace{2cm}}$$

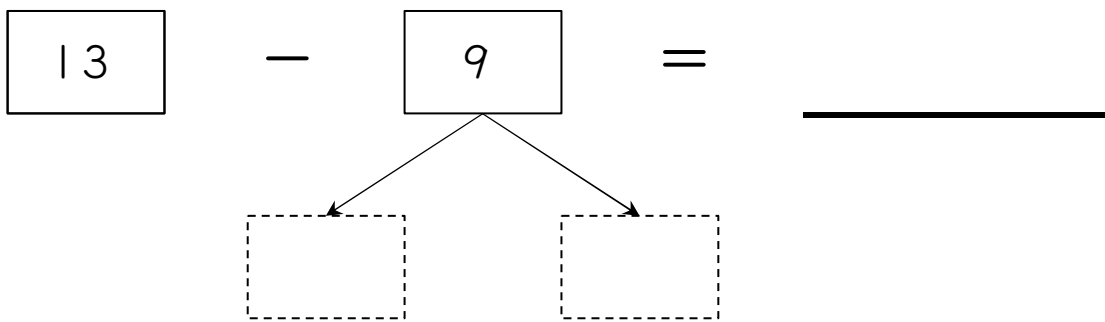
$$\boxed{12} - \boxed{6} = \underline{\hspace{2cm}}$$

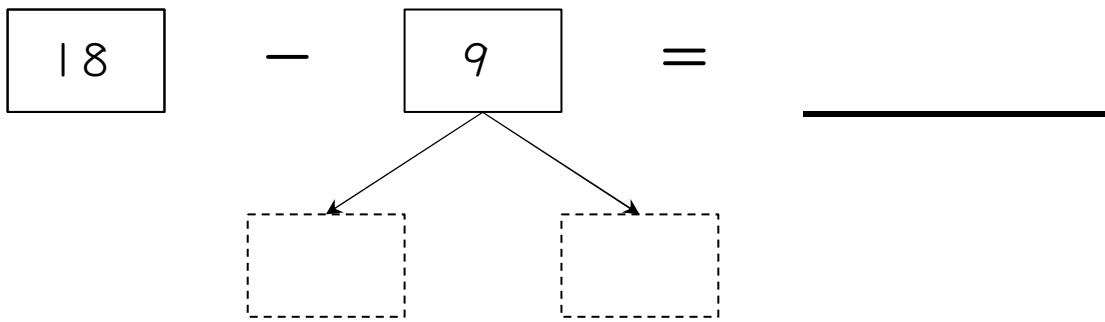
$$\boxed{17} - \boxed{9} = \underline{\hspace{2cm}}$$

さくらんぼ引き算タイプC(引く数を分ける)問題

名前 : \_\_\_\_\_

$$\boxed{16} - \boxed{9} = \underline{\hspace{2cm}}$$


$$\boxed{13} - \boxed{9} = \underline{\hspace{2cm}}$$


$$\boxed{18} - \boxed{9} = \underline{\hspace{2cm}}$$


$$\boxed{12} - \boxed{5} = \underline{\hspace{2cm}}$$
