

さくらんぼ計算 引き算問題

名前: _____

$$13 - 9 = \underline{\hspace{2cm}}$$

$$13 - 4 = \underline{\hspace{2cm}}$$

$$13 - 6 = \underline{\hspace{2cm}}$$

$$17 - 9 = \underline{\hspace{2cm}}$$

さくらんぼ計算 引き算問題

名前: _____

$$14 - 7 = \underline{\hspace{2cm}}$$

$$17 - 8 = \underline{\hspace{2cm}}$$

$$12 - 3 = \underline{\hspace{2cm}}$$

$$14 - 7 = \underline{\hspace{2cm}}$$

さくらんぼ計算 引き算問題

名前: _____

$$12 - 7 = \underline{\hspace{2cm}}$$

$$15 - 7 = \underline{\hspace{2cm}}$$

$$13 - 9 = \underline{\hspace{2cm}}$$

$$14 - 9 = \underline{\hspace{2cm}}$$

さくらんぼ計算 引き算問題

名前: _____

$$17 - 9 = \underline{\hspace{2cm}}$$

$$16 - 8 = \underline{\hspace{2cm}}$$

$$15 - 7 = \underline{\hspace{2cm}}$$

$$17 - 8 = \underline{\hspace{2cm}}$$

さくらんぼ計算 引き算問題

名前: _____

$$17 - 9 = \underline{\hspace{2cm}}$$

$$11 - 3 = \underline{\hspace{2cm}}$$

$$13 - 7 = \underline{\hspace{2cm}}$$

$$17 - 9 = \underline{\hspace{2cm}}$$

さくらんぼ計算 引き算問題

名前: _____

$$18 - 9 = \underline{\hspace{2cm}}$$

$$15 - 8 = \underline{\hspace{2cm}}$$

$$18 - 9 = \underline{\hspace{2cm}}$$

$$17 - 9 = \underline{\hspace{2cm}}$$

さくらんぼ計算 引き算問題

名前: _____

$$12 - 5 = \underline{\hspace{2cm}}$$

$$14 - 5 = \underline{\hspace{2cm}}$$

$$13 - 7 = \underline{\hspace{2cm}}$$

$$11 - 3 = \underline{\hspace{2cm}}$$

さくらんぼ計算 引き算問題

名前: _____

$$14 - 6 = \underline{\hspace{2cm}}$$

$$17 - 8 = \underline{\hspace{2cm}}$$

$$15 - 8 = \underline{\hspace{2cm}}$$

$$11 - 4 = \underline{\hspace{2cm}}$$

さくらんぼ計算 引き算問題

名前: _____

$$18 - 9 = \underline{\hspace{2cm}}$$

$$11 - 3 = \underline{\hspace{2cm}}$$

$$12 - 7 = \underline{\hspace{2cm}}$$

$$18 - 9 = \underline{\hspace{2cm}}$$

さくらんぼ計算 引き算問題

名前: _____

$$16 - 7 = \underline{\hspace{2cm}}$$

$$17 - 9 = \underline{\hspace{2cm}}$$

$$11 - 9 = \underline{\hspace{2cm}}$$

$$17 - 9 = \underline{\hspace{2cm}}$$

さくらんぼ計算 引き算問題

名前: _____

$$17 - 9 = \underline{\hspace{2cm}}$$

$$11 - 6 = \underline{\hspace{2cm}}$$

$$17 - 9 = \underline{\hspace{2cm}}$$

$$18 - 9 = \underline{\hspace{2cm}}$$

さくらんぼ計算 引き算問題

名前: _____

$$17 - 8 = \underline{\hspace{2cm}}$$

$$16 - 8 = \underline{\hspace{2cm}}$$

$$18 - 9 = \underline{\hspace{2cm}}$$

$$11 - 2 = \underline{\hspace{2cm}}$$

さくらんぼ計算 引き算問題

名前: _____

$$16 - 9 = \underline{\hspace{2cm}}$$

$$11 - 2 = \underline{\hspace{2cm}}$$

$$15 - 9 = \underline{\hspace{2cm}}$$

$$14 - 9 = \underline{\hspace{2cm}}$$

さくらんぼ計算 引き算問題

名前: _____

$$13 - 7 = \underline{\hspace{2cm}}$$

$$18 - 9 = \underline{\hspace{2cm}}$$

$$14 - 8 = \underline{\hspace{2cm}}$$

$$13 - 4 = \underline{\hspace{2cm}}$$

さくらんぼ計算 引き算問題

名前: _____

$$12 - 7 = \underline{\hspace{2cm}}$$

$$14 - 8 = \underline{\hspace{2cm}}$$

$$16 - 7 = \underline{\hspace{2cm}}$$

$$13 - 4 = \underline{\hspace{2cm}}$$

さくらんぼ計算 引き算問題

名前: _____

$$12 - 9 = \underline{\hspace{2cm}}$$

$$17 - 9 = \underline{\hspace{2cm}}$$

$$14 - 9 = \underline{\hspace{2cm}}$$

$$14 - 8 = \underline{\hspace{2cm}}$$

さくらんぼ計算 引き算問題

名前: _____

$$18 - 9 = \underline{\hspace{2cm}}$$

$$11 - 5 = \underline{\hspace{2cm}}$$

$$15 - 9 = \underline{\hspace{2cm}}$$

$$14 - 5 = \underline{\hspace{2cm}}$$

さくらんぼ計算 引き算問題

名前: _____

$$12 - 9 = \underline{\hspace{2cm}}$$

$$16 - 9 = \underline{\hspace{2cm}}$$

$$16 - 7 = \underline{\hspace{2cm}}$$

$$13 - 6 = \underline{\hspace{2cm}}$$

さくらんぼ計算 引き算問題

名前: _____

$$12 - 8 = \underline{\hspace{2cm}}$$

$$15 - 9 = \underline{\hspace{2cm}}$$

$$17 - 9 = \underline{\hspace{2cm}}$$

$$13 - 8 = \underline{\hspace{2cm}}$$

さくらんぼ計算 引き算問題

名前: _____

$$11 - 5 = \underline{\hspace{2cm}}$$

$$14 - 9 = \underline{\hspace{2cm}}$$

$$18 - 9 = \underline{\hspace{2cm}}$$

$$17 - 9 = \underline{\hspace{2cm}}$$

さくらんぼ計算 引き算問題

名前: _____

$$11 - 9 = \underline{\hspace{2cm}}$$

The diagram shows the number 11 above a solid rectangular box. To its right is a dashed rectangular box. A line connects the top of the solid box to the top of the dashed box. Below the solid box is another solid rectangular box, and below the dashed box is another dashed rectangular box. A line connects the bottom of the solid box to the bottom of the dashed box. An arrow points from the dashed box to the right, towards the result line.

$$18 - 9 = \underline{\hspace{2cm}}$$

The diagram shows the number 18 above a solid rectangular box. To its right is a dashed rectangular box. A line connects the top of the solid box to the top of the dashed box. Below the solid box is another solid rectangular box, and below the dashed box is another dashed rectangular box. A line connects the bottom of the solid box to the bottom of the dashed box. An arrow points from the dashed box to the right, towards the result line.

$$13 - 4 = \underline{\hspace{2cm}}$$

The diagram shows the number 13 above a solid rectangular box. To its right is a dashed rectangular box. A line connects the top of the solid box to the top of the dashed box. Below the solid box is another solid rectangular box, and below the dashed box is another dashed rectangular box. A line connects the bottom of the solid box to the bottom of the dashed box. An arrow points from the dashed box to the right, towards the result line.

$$12 - 9 = \underline{\hspace{2cm}}$$

The diagram shows the number 12 above a solid rectangular box. To its right is a dashed rectangular box. A line connects the top of the solid box to the top of the dashed box. Below the solid box is another solid rectangular box, and below the dashed box is another dashed rectangular box. A line connects the bottom of the solid box to the bottom of the dashed box. An arrow points from the dashed box to the right, towards the result line.

さくらんぼ計算 引き算問題

名前: _____

$$15 - 6 = \underline{\hspace{2cm}}$$

$$18 - 9 = \underline{\hspace{2cm}}$$

$$12 - 8 = \underline{\hspace{2cm}}$$

$$14 - 5 = \underline{\hspace{2cm}}$$

さくらんぼ計算 引き算問題

名前: _____

$$13 - 6 = \underline{\hspace{2cm}}$$

$$11 - 2 = \underline{\hspace{2cm}}$$

$$13 - 8 = \underline{\hspace{2cm}}$$

$$12 - 6 = \underline{\hspace{2cm}}$$

さくらんぼ計算 引き算問題

名前: _____

$$18 - 9 = \underline{\hspace{2cm}}$$

$$18 - 9 = \underline{\hspace{2cm}}$$

$$16 - 7 = \underline{\hspace{2cm}}$$

$$17 - 8 = \underline{\hspace{2cm}}$$

さくらんぼ計算 引き算問題

名前: _____

$$17 - 8 = \underline{\hspace{2cm}}$$

$$17 - 9 = \underline{\hspace{2cm}}$$

$$18 - 9 = \underline{\hspace{2cm}}$$

$$11 - 8 = \underline{\hspace{2cm}}$$

さくらんぼ計算 引き算問題

名前: _____

$$11 - 7 = \underline{\hspace{2cm}}$$

$$16 - 8 = \underline{\hspace{2cm}}$$

$$13 - 4 = \underline{\hspace{2cm}}$$

$$15 - 6 = \underline{\hspace{2cm}}$$

さくらんぼ計算 引き算問題

名前: _____

$$17 - 8 = \underline{\hspace{2cm}}$$

$$15 - 7 = \underline{\hspace{2cm}}$$

$$13 - 8 = \underline{\hspace{2cm}}$$

$$11 - 6 = \underline{\hspace{2cm}}$$

さくらんぼ計算 引き算問題

名前: _____

$$11 - 3 = \underline{\hspace{2cm}}$$

$$12 - 4 = \underline{\hspace{2cm}}$$

$$17 - 8 = \underline{\hspace{2cm}}$$

$$13 - 4 = \underline{\hspace{2cm}}$$

さくらんぼ計算 引き算問題

名前: _____

$$15 - 9 = \underline{\hspace{2cm}}$$

$$11 - 7 = \underline{\hspace{2cm}}$$

$$17 - 9 = \underline{\hspace{2cm}}$$

$$16 - 7 = \underline{\hspace{2cm}}$$

さくらんぼ計算 引き算問題

名前: _____

$$16 - 7 = \underline{\hspace{2cm}}$$

$$11 - 2 = \underline{\hspace{2cm}}$$

$$14 - 8 = \underline{\hspace{2cm}}$$

$$11 - 5 = \underline{\hspace{2cm}}$$

さくらんぼ計算 引き算問題

名前: _____

$$18 - 9 = \underline{\hspace{2cm}}$$

$$14 - 8 = \underline{\hspace{2cm}}$$

$$15 - 6 = \underline{\hspace{2cm}}$$

$$13 - 8 = \underline{\hspace{2cm}}$$

さくらんぼ計算 引き算問題

名前: _____

$$18 - 9 = \underline{\hspace{2cm}}$$

$$13 - 9 = \underline{\hspace{2cm}}$$

$$12 - 3 = \underline{\hspace{2cm}}$$

$$14 - 5 = \underline{\hspace{2cm}}$$

さくらんぼ計算 引き算問題

名前: _____

$$18 - 9 = \underline{\hspace{2cm}}$$

$$18 - 9 = \underline{\hspace{2cm}}$$

$$18 - 9 = \underline{\hspace{2cm}}$$

$$16 - 7 = \underline{\hspace{2cm}}$$

さくらんぼ計算 引き算問題

名前: _____

$$11 - 2 = \underline{\hspace{2cm}}$$

$$13 - 5 = \underline{\hspace{2cm}}$$

$$11 - 5 = \underline{\hspace{2cm}}$$

$$14 - 9 = \underline{\hspace{2cm}}$$

さくらんぼ計算 引き算問題

名前: _____

$$14 - 5 = \underline{\hspace{2cm}}$$

$$18 - 9 = \underline{\hspace{2cm}}$$

$$13 - 5 = \underline{\hspace{2cm}}$$

$$11 - 4 = \underline{\hspace{2cm}}$$

さくらんぼ計算 引き算問題

名前: _____

$$18 - 9 = \underline{\hspace{2cm}}$$

$$18 - 9 = \underline{\hspace{2cm}}$$

$$17 - 9 = \underline{\hspace{2cm}}$$

$$13 - 9 = \underline{\hspace{2cm}}$$

さくらんぼ計算 引き算問題

名前: _____

$$11 - 4 = \underline{\hspace{2cm}}$$

$$18 - 9 = \underline{\hspace{2cm}}$$

$$11 - 9 = \underline{\hspace{2cm}}$$

$$18 - 9 = \underline{\hspace{2cm}}$$

さくらんぼ計算 引き算問題

名前: _____

$$11 - 8 = \underline{\hspace{2cm}}$$

$$15 - 6 = \underline{\hspace{2cm}}$$

$$12 - 6 = \underline{\hspace{2cm}}$$

$$13 - 4 = \underline{\hspace{2cm}}$$

さくらんぼ計算 引き算問題

名前: _____

$$15 - 9 = \underline{\hspace{2cm}}$$

$$11 - 2 = \underline{\hspace{2cm}}$$

$$18 - 9 = \underline{\hspace{2cm}}$$

$$15 - 9 = \underline{\hspace{2cm}}$$

さくらんぼ計算 引き算問題

名前: _____

$$18 - 9 = \underline{\hspace{2cm}}$$

$$17 - 8 = \underline{\hspace{2cm}}$$

$$16 - 8 = \underline{\hspace{2cm}}$$

$$15 - 6 = \underline{\hspace{2cm}}$$

さくらんぼ計算 引き算問題

名前: _____

$$17 - 8 = \underline{\hspace{2cm}}$$

$$18 - 9 = \underline{\hspace{2cm}}$$

$$17 - 8 = \underline{\hspace{2cm}}$$

$$18 - 9 = \underline{\hspace{2cm}}$$

さくらんぼ計算 引き算問題

名前: _____

$$12 - 9 = \underline{\hspace{2cm}}$$

$$17 - 9 = \underline{\hspace{2cm}}$$

$$16 - 7 = \underline{\hspace{2cm}}$$

$$12 - 7 = \underline{\hspace{2cm}}$$

さくらんぼ計算 引き算問題

名前: _____

$$13 - 7 = \underline{\hspace{2cm}}$$

$$16 - 9 = \underline{\hspace{2cm}}$$

$$14 - 6 = \underline{\hspace{2cm}}$$

$$11 - 3 = \underline{\hspace{2cm}}$$

さくらんぼ計算 引き算問題

名前: _____

$$18 - 9 = \underline{\hspace{2cm}}$$

$$13 - 9 = \underline{\hspace{2cm}}$$

$$18 - 9 = \underline{\hspace{2cm}}$$

$$14 - 8 = \underline{\hspace{2cm}}$$

さくらんぼ計算 引き算問題

名前: _____

$$17 - 8 = \underline{\hspace{2cm}}$$

$$14 - 6 = \underline{\hspace{2cm}}$$

$$13 - 5 = \underline{\hspace{2cm}}$$

$$14 - 6 = \underline{\hspace{2cm}}$$

さくらんぼ計算 引き算問題

名前: _____

$$17 - 8 = \underline{\hspace{2cm}}$$

$$16 - 8 = \underline{\hspace{2cm}}$$

$$16 - 9 = \underline{\hspace{2cm}}$$

$$13 - 6 = \underline{\hspace{2cm}}$$

さくらんぼ計算 引き算問題

名前: _____

$$12 - 9 = \underline{\hspace{2cm}}$$

$$13 - 7 = \underline{\hspace{2cm}}$$

$$13 - 6 = \underline{\hspace{2cm}}$$

$$12 - 7 = \underline{\hspace{2cm}}$$

さくらんぼ計算 引き算問題

名前: _____

$$15 - 6 = \underline{\hspace{2cm}}$$

$$12 - 4 = \underline{\hspace{2cm}}$$

$$17 - 8 = \underline{\hspace{2cm}}$$

$$12 - 6 = \underline{\hspace{2cm}}$$

さくらんぼ計算 引き算問題

名前: _____

$$12 - 8 = \underline{\hspace{2cm}}$$

$$18 - 9 = \underline{\hspace{2cm}}$$

$$15 - 6 = \underline{\hspace{2cm}}$$

$$15 - 8 = \underline{\hspace{2cm}}$$

さくらんぼ計算 引き算問題

名前: _____

$$12 - 6 = \underline{\hspace{2cm}}$$

$$12 - 7 = \underline{\hspace{2cm}}$$

$$14 - 7 = \underline{\hspace{2cm}}$$

$$15 - 8 = \underline{\hspace{2cm}}$$

さくらんぼ計算 引き算問題

名前: _____

$$13 - 4 = \underline{\hspace{2cm}}$$

$$16 - 7 = \underline{\hspace{2cm}}$$

$$14 - 5 = \underline{\hspace{2cm}}$$

$$11 - 8 = \underline{\hspace{2cm}}$$

さくらんぼ計算 引き算問題

名前: _____

$$18 - 9 = \underline{\hspace{2cm}}$$

$$16 - 7 = \underline{\hspace{2cm}}$$

$$13 - 6 = \underline{\hspace{2cm}}$$

$$16 - 9 = \underline{\hspace{2cm}}$$

さくらんぼ計算 引き算問題

名前: _____

$$12 - 5 = \underline{\hspace{2cm}}$$

$$11 - 6 = \underline{\hspace{2cm}}$$

$$12 - 3 = \underline{\hspace{2cm}}$$

$$11 - 2 = \underline{\hspace{2cm}}$$

さくらんぼ計算 引き算問題

名前: _____

$$14 - 5 = \underline{\hspace{2cm}}$$

$$12 - 6 = \underline{\hspace{2cm}}$$

$$14 - 8 = \underline{\hspace{2cm}}$$

$$17 - 9 = \underline{\hspace{2cm}}$$

さくらんぼ計算 引き算問題

名前: _____

$$12 - 4 = \underline{\hspace{2cm}}$$

$$17 - 8 = \underline{\hspace{2cm}}$$

$$14 - 7 = \underline{\hspace{2cm}}$$

$$18 - 9 = \underline{\hspace{2cm}}$$

さくらんぼ計算 引き算問題

名前: _____

$$18 - 9 = \underline{\hspace{2cm}}$$

$$16 - 9 = \underline{\hspace{2cm}}$$

$$15 - 7 = \underline{\hspace{2cm}}$$

$$11 - 4 = \underline{\hspace{2cm}}$$

さくらんぼ計算 引き算問題

名前: _____

$$12 - 8 = \underline{\hspace{2cm}}$$

$$12 - 4 = \underline{\hspace{2cm}}$$

$$13 - 6 = \underline{\hspace{2cm}}$$

$$12 - 6 = \underline{\hspace{2cm}}$$

さくらんぼ計算 引き算問題

名前: _____

$$14 - 9 = \underline{\hspace{2cm}}$$

$$16 - 8 = \underline{\hspace{2cm}}$$

$$16 - 7 = \underline{\hspace{2cm}}$$

$$15 - 6 = \underline{\hspace{2cm}}$$

さくらんぼ計算 引き算問題

名前: _____

$$12 - 5 = \underline{\hspace{2cm}}$$

$$13 - 7 = \underline{\hspace{2cm}}$$

$$12 - 8 = \underline{\hspace{2cm}}$$

$$12 - 8 = \underline{\hspace{2cm}}$$

さくらんぼ計算 引き算問題

名前: _____

$$14 - 9 = \underline{\hspace{2cm}}$$

$$13 - 4 = \underline{\hspace{2cm}}$$

$$18 - 9 = \underline{\hspace{2cm}}$$

$$17 - 8 = \underline{\hspace{2cm}}$$

さくらんぼ計算 引き算問題

名前: _____

$$12 - 3 = \underline{\hspace{2cm}}$$

$$12 - 4 = \underline{\hspace{2cm}}$$

$$15 - 8 = \underline{\hspace{2cm}}$$

$$11 - 5 = \underline{\hspace{2cm}}$$

さくらんぼ計算 引き算問題

名前: _____

$$17 - 8 = \underline{\hspace{2cm}}$$

$$14 - 8 = \underline{\hspace{2cm}}$$

$$14 - 5 = \underline{\hspace{2cm}}$$

$$15 - 6 = \underline{\hspace{2cm}}$$

さくらんぼ計算 引き算問題

名前: _____

$$14 - 9 = \underline{\hspace{2cm}}$$

$$15 - 7 = \underline{\hspace{2cm}}$$

$$17 - 8 = \underline{\hspace{2cm}}$$

$$13 - 9 = \underline{\hspace{2cm}}$$

さくらんぼ計算 引き算問題

名前: _____

$$12 - 6 = \underline{\hspace{2cm}}$$

$$12 - 7 = \underline{\hspace{2cm}}$$

$$15 - 7 = \underline{\hspace{2cm}}$$

$$13 - 6 = \underline{\hspace{2cm}}$$

さくらんぼ計算 引き算問題

名前: _____

$$12 - 8 = \underline{\hspace{2cm}}$$

$$14 - 6 = \underline{\hspace{2cm}}$$

$$11 - 4 = \underline{\hspace{2cm}}$$

$$12 - 3 = \underline{\hspace{2cm}}$$

さくらんぼ計算 引き算問題

名前: _____

$$11 - 6 = \underline{\hspace{2cm}}$$

$$13 - 9 = \underline{\hspace{2cm}}$$

$$17 - 9 = \underline{\hspace{2cm}}$$

$$12 - 3 = \underline{\hspace{2cm}}$$

さくらんぼ計算 引き算問題

名前: _____

$$17 - 9 = \underline{\hspace{2cm}}$$

$$13 - 7 = \underline{\hspace{2cm}}$$

$$13 - 8 = \underline{\hspace{2cm}}$$

$$15 - 6 = \underline{\hspace{2cm}}$$

さくらんぼ計算 引き算問題

名前: _____

$$14 - 7 = \underline{\hspace{2cm}}$$

$$11 - 9 = \underline{\hspace{2cm}}$$

$$14 - 5 = \underline{\hspace{2cm}}$$

$$15 - 9 = \underline{\hspace{2cm}}$$

さくらんぼ計算 引き算問題

名前: _____

$$11 - 3 = \underline{\hspace{2cm}}$$

$$13 - 5 = \underline{\hspace{2cm}}$$

$$12 - 7 = \underline{\hspace{2cm}}$$

$$11 - 9 = \underline{\hspace{2cm}}$$

さくらんぼ計算 引き算問題

名前: _____

$$13 - 5 = \underline{\hspace{2cm}}$$

$$11 - 7 = \underline{\hspace{2cm}}$$

$$16 - 8 = \underline{\hspace{2cm}}$$

$$11 - 2 = \underline{\hspace{2cm}}$$

さくらんぼ計算 引き算問題

名前: _____

$$12 - 7 = \underline{\hspace{2cm}}$$

$$15 - 7 = \underline{\hspace{2cm}}$$

$$16 - 7 = \underline{\hspace{2cm}}$$

$$13 - 4 = \underline{\hspace{2cm}}$$

さくらんぼ計算 引き算問題

名前: _____

$$13 - 6 = \underline{\hspace{2cm}}$$

$$15 - 7 = \underline{\hspace{2cm}}$$

$$15 - 9 = \underline{\hspace{2cm}}$$

$$15 - 8 = \underline{\hspace{2cm}}$$

さくらんぼ計算 引き算問題

名前: _____

$$15 - 8 = \underline{\hspace{2cm}}$$

$$17 - 9 = \underline{\hspace{2cm}}$$

$$13 - 9 = \underline{\hspace{2cm}}$$

$$16 - 7 = \underline{\hspace{2cm}}$$

さくらんぼ計算 引き算問題

名前: _____

$$12 - 4 = \underline{\hspace{2cm}}$$

$$15 - 6 = \underline{\hspace{2cm}}$$

$$14 - 8 = \underline{\hspace{2cm}}$$

$$18 - 9 = \underline{\hspace{2cm}}$$

さくらんぼ計算 引き算問題

名前: _____

$$15 - 6 = \underline{\hspace{2cm}}$$

$$17 - 9 = \underline{\hspace{2cm}}$$

$$18 - 9 = \underline{\hspace{2cm}}$$

$$11 - 8 = \underline{\hspace{2cm}}$$

さくらんぼ計算 引き算問題

名前: _____

$$15 - 7 = \underline{\hspace{2cm}}$$

$$11 - 3 = \underline{\hspace{2cm}}$$

$$11 - 8 = \underline{\hspace{2cm}}$$

$$17 - 8 = \underline{\hspace{2cm}}$$

さくらんぼ計算 引き算問題

名前: _____

$$18 - 9 = \underline{\hspace{2cm}}$$

$$18 - 9 = \underline{\hspace{2cm}}$$

$$15 - 9 = \underline{\hspace{2cm}}$$

$$17 - 9 = \underline{\hspace{2cm}}$$

さくらんぼ計算 引き算問題

名前: _____

$$13 - 6 = \underline{\hspace{2cm}}$$

$$11 - 8 = \underline{\hspace{2cm}}$$

$$13 - 7 = \underline{\hspace{2cm}}$$

$$18 - 9 = \underline{\hspace{2cm}}$$

さくらんぼ計算 引き算問題

名前: _____

$$17 - 8 = \underline{\hspace{2cm}}$$

$$18 - 9 = \underline{\hspace{2cm}}$$

$$12 - 5 = \underline{\hspace{2cm}}$$

$$12 - 9 = \underline{\hspace{2cm}}$$

さくらんぼ計算 引き算問題

名前: _____

$$18 - 9 = \underline{\hspace{2cm}}$$

$$11 - 5 = \underline{\hspace{2cm}}$$

$$18 - 9 = \underline{\hspace{2cm}}$$

$$17 - 9 = \underline{\hspace{2cm}}$$

さくらんぼ計算 引き算問題

名前: _____

$$16 - 8 = \underline{\hspace{2cm}}$$

$$14 - 9 = \underline{\hspace{2cm}}$$

$$18 - 9 = \underline{\hspace{2cm}}$$

$$15 - 6 = \underline{\hspace{2cm}}$$

さくらんぼ計算 引き算問題

名前: _____

$$16 - 7 = \underline{\hspace{2cm}}$$

$$17 - 8 = \underline{\hspace{2cm}}$$

$$17 - 9 = \underline{\hspace{2cm}}$$

$$17 - 9 = \underline{\hspace{2cm}}$$

さくらんぼ計算 引き算問題

名前: _____

$$14 - 5 = \underline{\hspace{2cm}}$$

$$13 - 9 = \underline{\hspace{2cm}}$$

$$12 - 3 = \underline{\hspace{2cm}}$$

$$11 - 8 = \underline{\hspace{2cm}}$$

さくらんぼ計算 引き算問題

名前: _____

$$13 - 4 = \underline{\hspace{2cm}}$$

$$14 - 8 = \underline{\hspace{2cm}}$$

$$17 - 8 = \underline{\hspace{2cm}}$$

$$13 - 9 = \underline{\hspace{2cm}}$$

さくらんぼ計算 引き算問題

名前: _____

$$14 - 8 = \underline{\hspace{2cm}}$$

$$17 - 8 = \underline{\hspace{2cm}}$$

$$17 - 9 = \underline{\hspace{2cm}}$$

$$12 - 9 = \underline{\hspace{2cm}}$$

さくらんぼ計算 引き算問題

名前: _____

$$17 - 9 = \underline{\hspace{2cm}}$$

$$18 - 9 = \underline{\hspace{2cm}}$$

$$15 - 9 = \underline{\hspace{2cm}}$$

$$13 - 4 = \underline{\hspace{2cm}}$$

さくらんぼ計算 引き算問題

名前: _____

$$14 - 5 = \underline{\hspace{2cm}}$$

$$13 - 4 = \underline{\hspace{2cm}}$$

$$13 - 6 = \underline{\hspace{2cm}}$$

$$14 - 5 = \underline{\hspace{2cm}}$$

さくらんぼ計算 引き算問題

名前: _____

$$13 - 5 = \underline{\hspace{2cm}}$$

$$18 - 9 = \underline{\hspace{2cm}}$$

$$13 - 7 = \underline{\hspace{2cm}}$$

$$17 - 9 = \underline{\hspace{2cm}}$$

さくらんぼ計算 引き算問題

名前: _____

$$11 - 6 = \underline{\hspace{2cm}}$$

$$18 - 9 = \underline{\hspace{2cm}}$$

$$18 - 9 = \underline{\hspace{2cm}}$$

$$15 - 9 = \underline{\hspace{2cm}}$$

さくらんぼ計算 引き算問題

名前: _____

$$12 - 3 = \underline{\hspace{2cm}}$$

$$16 - 9 = \underline{\hspace{2cm}}$$

$$11 - 5 = \underline{\hspace{2cm}}$$

$$17 - 8 = \underline{\hspace{2cm}}$$

さくらんぼ計算 引き算問題

名前: _____

$$14 - 8 = \underline{\hspace{2cm}}$$

$$15 - 7 = \underline{\hspace{2cm}}$$

$$11 - 3 = \underline{\hspace{2cm}}$$

$$16 - 9 = \underline{\hspace{2cm}}$$

さくらんぼ計算 引き算問題

名前: _____

$$16 - 9 = \underline{\hspace{2cm}}$$

$$15 - 7 = \underline{\hspace{2cm}}$$

$$17 - 8 = \underline{\hspace{2cm}}$$

$$13 - 7 = \underline{\hspace{2cm}}$$

さくらんぼ計算 引き算問題

名前: _____

$$13 - 6 = \underline{\hspace{2cm}}$$

$$11 - 2 = \underline{\hspace{2cm}}$$

$$17 - 8 = \underline{\hspace{2cm}}$$

$$17 - 9 = \underline{\hspace{2cm}}$$

さくらんぼ計算 引き算問題

名前: _____

$$18 - 9 = \underline{\hspace{2cm}}$$

$$13 - 9 = \underline{\hspace{2cm}}$$

$$18 - 9 = \underline{\hspace{2cm}}$$

$$16 - 8 = \underline{\hspace{2cm}}$$

さくらんぼ計算 引き算問題

名前: _____

$$14 - 9 = \underline{\hspace{2cm}}$$

$$12 - 4 = \underline{\hspace{2cm}}$$

$$14 - 8 = \underline{\hspace{2cm}}$$

$$11 - 2 = \underline{\hspace{2cm}}$$

さくらんぼ計算 引き算問題

名前: _____

$$13 - 9 = \underline{\hspace{2cm}}$$

$$18 - 9 = \underline{\hspace{2cm}}$$

$$18 - 9 = \underline{\hspace{2cm}}$$

$$18 - 9 = \underline{\hspace{2cm}}$$

さくらんぼ計算 引き算問題

名前: _____

$$17 - 8 = \underline{\hspace{2cm}}$$

$$12 - 8 = \underline{\hspace{2cm}}$$

$$14 - 6 = \underline{\hspace{2cm}}$$

$$13 - 8 = \underline{\hspace{2cm}}$$

さくらんぼ計算 引き算問題

名前: _____

$$18 - 9 = \underline{\hspace{2cm}}$$

$$18 - 9 = \underline{\hspace{2cm}}$$

$$11 - 5 = \underline{\hspace{2cm}}$$

$$13 - 7 = \underline{\hspace{2cm}}$$

さくらんぼ計算 引き算問題

名前: _____

$$12 - 9 = \underline{\hspace{2cm}}$$

$$17 - 8 = \underline{\hspace{2cm}}$$

$$13 - 9 = \underline{\hspace{2cm}}$$

$$11 - 3 = \underline{\hspace{2cm}}$$

さくらんぼ計算 引き算問題

名前: _____

$$18 - 9 = \underline{\hspace{2cm}}$$

$$14 - 6 = \underline{\hspace{2cm}}$$

$$13 - 9 = \underline{\hspace{2cm}}$$

$$15 - 8 = \underline{\hspace{2cm}}$$

さくらんぼ計算 引き算問題

名前: _____

$$15 - 8 = \underline{\hspace{2cm}}$$

$$12 - 8 = \underline{\hspace{2cm}}$$

$$13 - 6 = \underline{\hspace{2cm}}$$

$$18 - 9 = \underline{\hspace{2cm}}$$

さくらんぼ計算 引き算問題

名前: _____

$$15 - 8 = \underline{\hspace{2cm}}$$

$$14 - 6 = \underline{\hspace{2cm}}$$

$$18 - 9 = \underline{\hspace{2cm}}$$

$$15 - 7 = \underline{\hspace{2cm}}$$

さくらんぼ計算 引き算問題

名前: _____

$$12 - 8 = \underline{\hspace{2cm}}$$

$$11 - 2 = \underline{\hspace{2cm}}$$

$$16 - 9 = \underline{\hspace{2cm}}$$

$$11 - 3 = \underline{\hspace{2cm}}$$

さくらんぼ計算 引き算問題

名前: _____

$$11 - 3 = \underline{\hspace{2cm}}$$

$$15 - 8 = \underline{\hspace{2cm}}$$

$$12 - 9 = \underline{\hspace{2cm}}$$

$$15 - 7 = \underline{\hspace{2cm}}$$

さくらんぼ計算 引き算問題

名前: _____

$$11 - 6 = \underline{\hspace{2cm}}$$

$$15 - 9 = \underline{\hspace{2cm}}$$

$$14 - 9 = \underline{\hspace{2cm}}$$

$$13 - 4 = \underline{\hspace{2cm}}$$

さくらんぼ計算 引き算問題

名前: _____

$$14 - 6 = \underline{\hspace{2cm}}$$

$$11 - 3 = \underline{\hspace{2cm}}$$

$$16 - 9 = \underline{\hspace{2cm}}$$

$$16 - 7 = \underline{\hspace{2cm}}$$

さくらんぼ計算 引き算問題

名前: _____

$$16 - 9 = \underline{\hspace{2cm}}$$

$$16 - 7 = \underline{\hspace{2cm}}$$

$$11 - 3 = \underline{\hspace{2cm}}$$

$$11 - 4 = \underline{\hspace{2cm}}$$

さくらんぼ計算 引き算問題

名前: _____

$$13 - 7 = \underline{\hspace{2cm}}$$

$$13 - 6 = \underline{\hspace{2cm}}$$

$$17 - 9 = \underline{\hspace{2cm}}$$

$$18 - 9 = \underline{\hspace{2cm}}$$

さくらんぼ計算 引き算問題

名前: _____

$$12 - 5 = \underline{\hspace{2cm}}$$

$$15 - 8 = \underline{\hspace{2cm}}$$

$$16 - 7 = \underline{\hspace{2cm}}$$

$$12 - 8 = \underline{\hspace{2cm}}$$

さくらんぼ計算 引き算問題

名前: _____

$$12 - 9 = \underline{\hspace{2cm}}$$

$$14 - 5 = \underline{\hspace{2cm}}$$

$$12 - 3 = \underline{\hspace{2cm}}$$

$$12 - 8 = \underline{\hspace{2cm}}$$

さくらんぼ計算 引き算問題

名前: _____

$$17 - 9 = \underline{\hspace{2cm}}$$

$$13 - 8 = \underline{\hspace{2cm}}$$

$$18 - 9 = \underline{\hspace{2cm}}$$

$$16 - 7 = \underline{\hspace{2cm}}$$

さくらんぼ計算 引き算問題

名前: _____

$$18 - 9 = \underline{\hspace{2cm}}$$

$$15 - 6 = \underline{\hspace{2cm}}$$

$$11 - 7 = \underline{\hspace{2cm}}$$

$$11 - 6 = \underline{\hspace{2cm}}$$

さくらんぼ計算 引き算問題

名前: _____

$$13 - 6 = \underline{\hspace{2cm}}$$

$$11 - 2 = \underline{\hspace{2cm}}$$

$$18 - 9 = \underline{\hspace{2cm}}$$

$$12 - 8 = \underline{\hspace{2cm}}$$

さくらんぼ計算 引き算問題

名前: _____

$$12 - 5 = \underline{\hspace{2cm}}$$

$$11 - 6 = \underline{\hspace{2cm}}$$

$$12 - 8 = \underline{\hspace{2cm}}$$

$$15 - 9 = \underline{\hspace{2cm}}$$

さくらんぼ計算 引き算問題

名前: _____

$$18 - 9 = \underline{\hspace{2cm}}$$

$$13 - 8 = \underline{\hspace{2cm}}$$

$$17 - 9 = \underline{\hspace{2cm}}$$

$$14 - 6 = \underline{\hspace{2cm}}$$

さくらんぼ計算 引き算問題

名前: _____

$$11 - 3 = \underline{\hspace{2cm}}$$

$$11 - 9 = \underline{\hspace{2cm}}$$

$$16 - 9 = \underline{\hspace{2cm}}$$

$$17 - 9 = \underline{\hspace{2cm}}$$

さくらんぼ計算 引き算問題

名前: _____

$$16 - 9 = \underline{\hspace{2cm}}$$

$$13 - 4 = \underline{\hspace{2cm}}$$

$$15 - 9 = \underline{\hspace{2cm}}$$

$$14 - 7 = \underline{\hspace{2cm}}$$

さくらんぼ計算 引き算問題

名前: _____

$$16 - 7 = \underline{\hspace{2cm}}$$

$$13 - 5 = \underline{\hspace{2cm}}$$

$$15 - 8 = \underline{\hspace{2cm}}$$

$$15 - 7 = \underline{\hspace{2cm}}$$

さくらんぼ計算 引き算問題

名前: _____

$$17 - 9 = \underline{\hspace{2cm}}$$

$$15 - 8 = \underline{\hspace{2cm}}$$

$$17 - 9 = \underline{\hspace{2cm}}$$

$$13 - 8 = \underline{\hspace{2cm}}$$

さくらんぼ計算 引き算問題

名前: _____

$$14 - 5 = \underline{\hspace{2cm}}$$

$$17 - 9 = \underline{\hspace{2cm}}$$

$$15 - 7 = \underline{\hspace{2cm}}$$

$$18 - 9 = \underline{\hspace{2cm}}$$

さくらんぼ計算 引き算問題

名前: _____

$$18 - 9 = \underline{\hspace{2cm}}$$

$$17 - 8 = \underline{\hspace{2cm}}$$

$$15 - 6 = \underline{\hspace{2cm}}$$

$$17 - 8 = \underline{\hspace{2cm}}$$

さくらんぼ計算 引き算問題

名前: _____

$$18 - 9 = \underline{\hspace{2cm}}$$

$$15 - 7 = \underline{\hspace{2cm}}$$

$$16 - 7 = \underline{\hspace{2cm}}$$

$$14 - 8 = \underline{\hspace{2cm}}$$

さくらんぼ計算 引き算問題

名前: _____

$$15 - 9 = \underline{\hspace{2cm}}$$

$$17 - 8 = \underline{\hspace{2cm}}$$

$$13 - 4 = \underline{\hspace{2cm}}$$

$$11 - 5 = \underline{\hspace{2cm}}$$

さくらんぼ計算 引き算問題

名前: _____

$$18 - 9 = \underline{\hspace{2cm}}$$

$$13 - 7 = \underline{\hspace{2cm}}$$

$$14 - 6 = \underline{\hspace{2cm}}$$

$$17 - 9 = \underline{\hspace{2cm}}$$

さくらんぼ計算 引き算問題

名前: _____

$$11 - 5 = \underline{\hspace{2cm}}$$

$$14 - 5 = \underline{\hspace{2cm}}$$

$$14 - 6 = \underline{\hspace{2cm}}$$

$$11 - 4 = \underline{\hspace{2cm}}$$

さくらんぼ計算 引き算問題

名前: _____

$$14 - 9 = \underline{\hspace{2cm}}$$

$$12 - 9 = \underline{\hspace{2cm}}$$

$$11 - 9 = \underline{\hspace{2cm}}$$

$$18 - 9 = \underline{\hspace{2cm}}$$

さくらんぼ計算 引き算問題

名前: _____

$$12 - 6 = \underline{\hspace{2cm}}$$

$$15 - 8 = \underline{\hspace{2cm}}$$

$$15 - 6 = \underline{\hspace{2cm}}$$

$$11 - 7 = \underline{\hspace{2cm}}$$

さくらんぼ計算 引き算問題

名前: _____

$$17 - 9 = \underline{\hspace{2cm}}$$

$$15 - 9 = \underline{\hspace{2cm}}$$

$$12 - 4 = \underline{\hspace{2cm}}$$

$$13 - 5 = \underline{\hspace{2cm}}$$

さくらんぼ計算 引き算問題

名前: _____

$$11 - 4 = \underline{\hspace{2cm}}$$

$$11 - 4 = \underline{\hspace{2cm}}$$

$$18 - 9 = \underline{\hspace{2cm}}$$

$$15 - 9 = \underline{\hspace{2cm}}$$

さくらんぼ計算 引き算問題

名前: _____

$$17 - 9 = \underline{\hspace{2cm}}$$

$$13 - 9 = \underline{\hspace{2cm}}$$

$$16 - 9 = \underline{\hspace{2cm}}$$

$$17 - 8 = \underline{\hspace{2cm}}$$

さくらんぼ計算 引き算問題

名前: _____

$$15 - 7 = \underline{\hspace{2cm}}$$

$$11 - 7 = \underline{\hspace{2cm}}$$

$$16 - 7 = \underline{\hspace{2cm}}$$

$$15 - 7 = \underline{\hspace{2cm}}$$

さくらんぼ計算 引き算問題

名前: _____

$$11 - 2 = \underline{\hspace{2cm}}$$

$$18 - 9 = \underline{\hspace{2cm}}$$

$$11 - 4 = \underline{\hspace{2cm}}$$

$$11 - 7 = \underline{\hspace{2cm}}$$

さくらんぼ計算 引き算問題

名前: _____

$$16 - 7 = \underline{\hspace{2cm}}$$

$$18 - 9 = \underline{\hspace{2cm}}$$

$$13 - 5 = \underline{\hspace{2cm}}$$

$$13 - 5 = \underline{\hspace{2cm}}$$

さくらんぼ計算 引き算問題

名前: _____

$$12 - 5 = \underline{\hspace{2cm}}$$

$$12 - 7 = \underline{\hspace{2cm}}$$

$$14 - 9 = \underline{\hspace{2cm}}$$

$$14 - 9 = \underline{\hspace{2cm}}$$

さくらんぼ計算 引き算問題

名前: _____

$$12 - 9 = \underline{\hspace{2cm}}$$

$$17 - 8 = \underline{\hspace{2cm}}$$

$$16 - 7 = \underline{\hspace{2cm}}$$

$$17 - 8 = \underline{\hspace{2cm}}$$

さくらんぼ計算 引き算問題

名前: _____

$$17 - 9 = \underline{\hspace{2cm}}$$

$$18 - 9 = \underline{\hspace{2cm}}$$

$$11 - 7 = \underline{\hspace{2cm}}$$

$$16 - 9 = \underline{\hspace{2cm}}$$

さくらんぼ計算 引き算問題

名前: _____

$$11 - 7 = \underline{\hspace{2cm}}$$

$$12 - 6 = \underline{\hspace{2cm}}$$

$$16 - 9 = \underline{\hspace{2cm}}$$

$$14 - 6 = \underline{\hspace{2cm}}$$

さくらんぼ計算 引き算問題

名前: _____

$$17 - 8 = \underline{\hspace{2cm}}$$

$$16 - 8 = \underline{\hspace{2cm}}$$

$$13 - 7 = \underline{\hspace{2cm}}$$

$$16 - 7 = \underline{\hspace{2cm}}$$

さくらんぼ計算 引き算問題

名前: _____

$$12 - 8 = \underline{\hspace{2cm}}$$

$$16 - 8 = \underline{\hspace{2cm}}$$

$$11 - 7 = \underline{\hspace{2cm}}$$

$$15 - 6 = \underline{\hspace{2cm}}$$

さくらんぼ計算 引き算問題

名前: _____

$$16 - 8 = \underline{\hspace{2cm}}$$

$$11 - 2 = \underline{\hspace{2cm}}$$

$$18 - 9 = \underline{\hspace{2cm}}$$

$$15 - 7 = \underline{\hspace{2cm}}$$

さくらんぼ計算 引き算問題

名前: _____

$$16 - 9 = \underline{\hspace{2cm}}$$

$$13 - 8 = \underline{\hspace{2cm}}$$

$$13 - 4 = \underline{\hspace{2cm}}$$

$$15 - 6 = \underline{\hspace{2cm}}$$

さくらんぼ計算 引き算問題

名前: _____

$$17 - 8 = \underline{\hspace{2cm}}$$

$$18 - 9 = \underline{\hspace{2cm}}$$

$$15 - 8 = \underline{\hspace{2cm}}$$

$$12 - 3 = \underline{\hspace{2cm}}$$

さくらんぼ計算 引き算問題

名前: _____

$$15 - 9 = \underline{\hspace{2cm}}$$

$$15 - 6 = \underline{\hspace{2cm}}$$

$$14 - 9 = \underline{\hspace{2cm}}$$

$$14 - 7 = \underline{\hspace{2cm}}$$

さくらんぼ計算 引き算問題

名前: _____

$$14 - 7 = \underline{\hspace{2cm}}$$

$$18 - 9 = \underline{\hspace{2cm}}$$

$$12 - 9 = \underline{\hspace{2cm}}$$

$$12 - 7 = \underline{\hspace{2cm}}$$

さくらんぼ計算 引き算問題

名前: _____

$$17 - 9 = \underline{\hspace{2cm}}$$

$$14 - 6 = \underline{\hspace{2cm}}$$

$$14 - 6 = \underline{\hspace{2cm}}$$

$$11 - 2 = \underline{\hspace{2cm}}$$

さくらんぼ計算 引き算問題

名前: _____

$$14 - 8 = \underline{\hspace{2cm}}$$

$$12 - 4 = \underline{\hspace{2cm}}$$

$$11 - 3 = \underline{\hspace{2cm}}$$

$$18 - 9 = \underline{\hspace{2cm}}$$

さくらんぼ計算 引き算問題

名前: _____

$$14 - 7 = \underline{\hspace{2cm}}$$

$$16 - 7 = \underline{\hspace{2cm}}$$

$$14 - 7 = \underline{\hspace{2cm}}$$

$$18 - 9 = \underline{\hspace{2cm}}$$

さくらんぼ計算 引き算問題

名前: _____

$$18 - 9 = \underline{\hspace{2cm}}$$

$$12 - 8 = \underline{\hspace{2cm}}$$

$$13 - 8 = \underline{\hspace{2cm}}$$

$$17 - 9 = \underline{\hspace{2cm}}$$

さくらんぼ計算 引き算問題

名前: _____

$$14 - 8 = \underline{\hspace{2cm}}$$

$$18 - 9 = \underline{\hspace{2cm}}$$

$$18 - 9 = \underline{\hspace{2cm}}$$

$$15 - 8 = \underline{\hspace{2cm}}$$

さくらんぼ計算 引き算問題

名前: _____

$$16 - 8 = \underline{\hspace{2cm}}$$

$$13 - 6 = \underline{\hspace{2cm}}$$

$$13 - 8 = \underline{\hspace{2cm}}$$

$$12 - 8 = \underline{\hspace{2cm}}$$

さくらんぼ計算 引き算問題

名前: _____

$$15 - 8 = \underline{\hspace{2cm}}$$

$$16 - 8 = \underline{\hspace{2cm}}$$

$$18 - 9 = \underline{\hspace{2cm}}$$

$$17 - 8 = \underline{\hspace{2cm}}$$

さくらんぼ計算 引き算問題

名前: _____

$$16 - 9 = \underline{\hspace{2cm}}$$

$$14 - 6 = \underline{\hspace{2cm}}$$

$$16 - 8 = \underline{\hspace{2cm}}$$

$$17 - 9 = \underline{\hspace{2cm}}$$

さくらんぼ計算 引き算問題

名前: _____

$$16 - 7 = \underline{\hspace{2cm}}$$

$$15 - 9 = \underline{\hspace{2cm}}$$

$$13 - 7 = \underline{\hspace{2cm}}$$

$$14 - 8 = \underline{\hspace{2cm}}$$

さくらんぼ計算 引き算問題

名前: _____

$$11 - 3 = \underline{\hspace{2cm}}$$

$$16 - 7 = \underline{\hspace{2cm}}$$

$$12 - 5 = \underline{\hspace{2cm}}$$

$$13 - 6 = \underline{\hspace{2cm}}$$

さくらんぼ計算 引き算問題

名前: _____

$$16 - 8 = \underline{\hspace{2cm}}$$

$$18 - 9 = \underline{\hspace{2cm}}$$

$$17 - 9 = \underline{\hspace{2cm}}$$

$$13 - 6 = \underline{\hspace{2cm}}$$

さくらんぼ計算 引き算問題

名前: _____

$$15 - 8 = \underline{\hspace{2cm}}$$

$$17 - 9 = \underline{\hspace{2cm}}$$

$$18 - 9 = \underline{\hspace{2cm}}$$

$$15 - 6 = \underline{\hspace{2cm}}$$

さくらんぼ計算 引き算問題

名前: _____

$$11 - 9 = \underline{\hspace{2cm}}$$

$$13 - 9 = \underline{\hspace{2cm}}$$

$$17 - 8 = \underline{\hspace{2cm}}$$

$$15 - 6 = \underline{\hspace{2cm}}$$

さくらんぼ計算 引き算問題

名前: _____

$$14 - 6 = \underline{\hspace{2cm}}$$

$$14 - 6 = \underline{\hspace{2cm}}$$

$$14 - 7 = \underline{\hspace{2cm}}$$

$$18 - 9 = \underline{\hspace{2cm}}$$

さくらんぼ計算 引き算問題

名前: _____

$$14 - 6 = \underline{\hspace{2cm}}$$

$$12 - 3 = \underline{\hspace{2cm}}$$

$$13 - 6 = \underline{\hspace{2cm}}$$

$$18 - 9 = \underline{\hspace{2cm}}$$

さくらんぼ計算 引き算問題

名前: _____

$$17 - 8 = \underline{\hspace{2cm}}$$

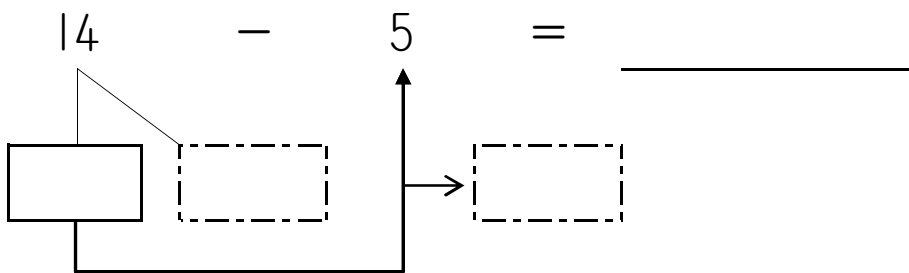
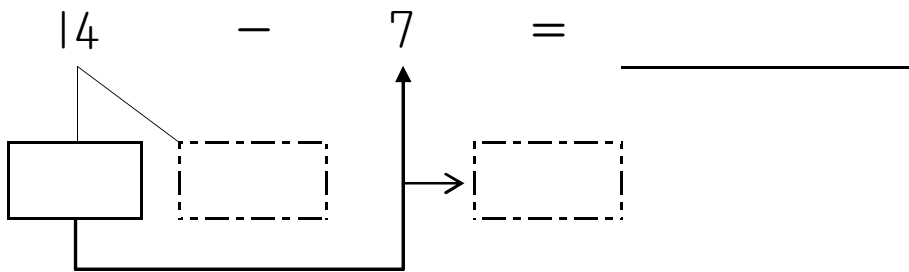
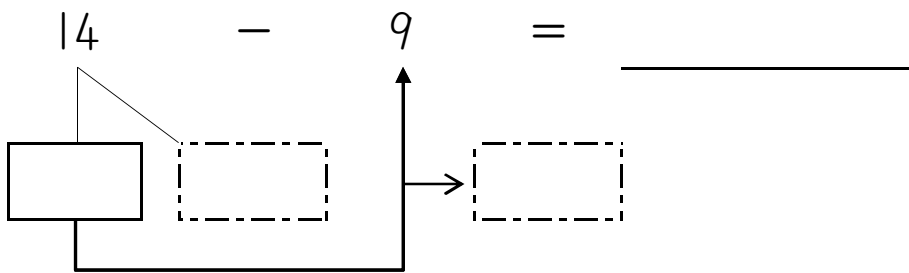
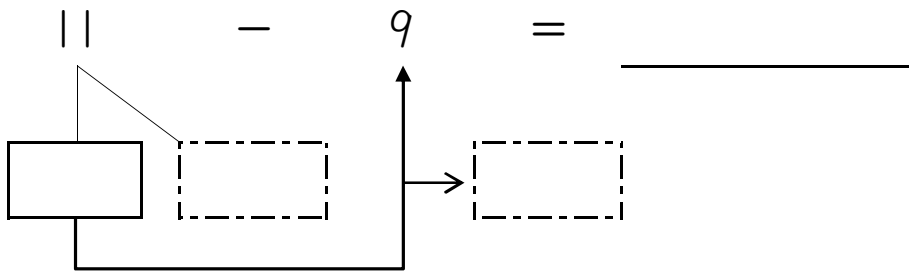
$$15 - 7 = \underline{\hspace{2cm}}$$

$$16 - 8 = \underline{\hspace{2cm}}$$

$$16 - 7 = \underline{\hspace{2cm}}$$

さくらんぼ計算 引き算問題

名前: _____



さくらんぼ計算 引き算問題

名前: _____

$$13 - 6 = \underline{\hspace{2cm}}$$

$$12 - 8 = \underline{\hspace{2cm}}$$

$$11 - 4 = \underline{\hspace{2cm}}$$

$$17 - 9 = \underline{\hspace{2cm}}$$

さくらんぼ計算 引き算問題

名前: _____

$$18 - 9 = \underline{\hspace{2cm}}$$

$$15 - 9 = \underline{\hspace{2cm}}$$

$$18 - 9 = \underline{\hspace{2cm}}$$

$$16 - 7 = \underline{\hspace{2cm}}$$

さくらんぼ計算 引き算問題

名前: _____

$$17 - 9 = \underline{\hspace{2cm}}$$

$$16 - 7 = \underline{\hspace{2cm}}$$

$$18 - 9 = \underline{\hspace{2cm}}$$

$$12 - 7 = \underline{\hspace{2cm}}$$

さくらんぼ計算 引き算問題

名前: _____

$$13 - 9 = \underline{\hspace{2cm}}$$

$$14 - 9 = \underline{\hspace{2cm}}$$

$$15 - 9 = \underline{\hspace{2cm}}$$

$$13 - 4 = \underline{\hspace{2cm}}$$

さくらんぼ計算 引き算問題

名前: _____

$$12 - 7 = \underline{\hspace{2cm}}$$

$$15 - 6 = \underline{\hspace{2cm}}$$

$$12 - 9 = \underline{\hspace{2cm}}$$

$$13 - 7 = \underline{\hspace{2cm}}$$

さくらんぼ計算 引き算問題

名前: _____

$$11 - 6 = \underline{\hspace{2cm}}$$

$$14 - 8 = \underline{\hspace{2cm}}$$

$$14 - 7 = \underline{\hspace{2cm}}$$

$$17 - 8 = \underline{\hspace{2cm}}$$

さくらんぼ計算 引き算問題

名前: _____

$$13 - 6 = \underline{\hspace{2cm}}$$

$$14 - 7 = \underline{\hspace{2cm}}$$

$$15 - 7 = \underline{\hspace{2cm}}$$

$$11 - 5 = \underline{\hspace{2cm}}$$

さくらんぼ計算 引き算問題

名前: _____

$$18 - 9 = \underline{\hspace{2cm}}$$

$$18 - 9 = \underline{\hspace{2cm}}$$

$$15 - 9 = \underline{\hspace{2cm}}$$

$$16 - 8 = \underline{\hspace{2cm}}$$

さくらんぼ計算 引き算問題

名前: _____

$$16 - 7 = \underline{\hspace{2cm}}$$

$$17 - 9 = \underline{\hspace{2cm}}$$

$$16 - 8 = \underline{\hspace{2cm}}$$

$$12 - 5 = \underline{\hspace{2cm}}$$

さくらんぼ計算 引き算問題

名前: _____

$$13 - 5 = \underline{\hspace{2cm}}$$

$$13 - 9 = \underline{\hspace{2cm}}$$

$$18 - 9 = \underline{\hspace{2cm}}$$

$$16 - 9 = \underline{\hspace{2cm}}$$

さくらんぼ計算 引き算問題

名前: _____

$$18 - 9 = \underline{\hspace{2cm}}$$

$$11 - 2 = \underline{\hspace{2cm}}$$

$$13 - 8 = \underline{\hspace{2cm}}$$

$$18 - 9 = \underline{\hspace{2cm}}$$

さくらんぼ計算 引き算問題

名前: _____

$$12 - 9 = \underline{\hspace{2cm}}$$

$$12 - 9 = \underline{\hspace{2cm}}$$

$$15 - 9 = \underline{\hspace{2cm}}$$

$$14 - 8 = \underline{\hspace{2cm}}$$

さくらんぼ計算 引き算問題

名前: _____

$$12 - 6 = \underline{\hspace{2cm}}$$

$$13 - 9 = \underline{\hspace{2cm}}$$

$$14 - 8 = \underline{\hspace{2cm}}$$

$$14 - 5 = \underline{\hspace{2cm}}$$

さくらんぼ計算 引き算問題

名前: _____

$$14 - 6 = \underline{\hspace{2cm}}$$

$$15 - 8 = \underline{\hspace{2cm}}$$

$$16 - 9 = \underline{\hspace{2cm}}$$

$$13 - 5 = \underline{\hspace{2cm}}$$

さくらんぼ計算 引き算問題

名前: _____

$$13 - 5 = \underline{\hspace{2cm}}$$

$$15 - 8 = \underline{\hspace{2cm}}$$

$$15 - 8 = \underline{\hspace{2cm}}$$

$$15 - 8 = \underline{\hspace{2cm}}$$

さくらんぼ計算 引き算問題

名前: _____

$$11 - 5 = \underline{\hspace{2cm}}$$

$$13 - 7 = \underline{\hspace{2cm}}$$

$$11 - 3 = \underline{\hspace{2cm}}$$

$$18 - 9 = \underline{\hspace{2cm}}$$

さくらんぼ計算 引き算問題

名前: _____

$$13 - 4 = \underline{\hspace{2cm}}$$

$$13 - 5 = \underline{\hspace{2cm}}$$

$$12 - 9 = \underline{\hspace{2cm}}$$

$$13 - 8 = \underline{\hspace{2cm}}$$

さくらんぼ計算 引き算問題

名前: _____

$$11 - 8 = \underline{\hspace{2cm}}$$

$$17 - 9 = \underline{\hspace{2cm}}$$

$$16 - 8 = \underline{\hspace{2cm}}$$

$$16 - 7 = \underline{\hspace{2cm}}$$

さくらんぼ計算 引き算問題

名前: _____

$$16 - 9 = \underline{\hspace{2cm}}$$

$$15 - 7 = \underline{\hspace{2cm}}$$

$$13 - 4 = \underline{\hspace{2cm}}$$

$$15 - 9 = \underline{\hspace{2cm}}$$

さくらんぼ計算 引き算問題

名前: _____

$$14 - 9 = \underline{\hspace{2cm}}$$

$$17 - 9 = \underline{\hspace{2cm}}$$

$$16 - 7 = \underline{\hspace{2cm}}$$

$$12 - 5 = \underline{\hspace{2cm}}$$

さくらんぼ計算 引き算問題

名前: _____

$$18 - 9 = \underline{\hspace{2cm}}$$

$$17 - 8 = \underline{\hspace{2cm}}$$

$$16 - 8 = \underline{\hspace{2cm}}$$

$$12 - 6 = \underline{\hspace{2cm}}$$

さくらんぼ計算 引き算問題

名前: _____

$$17 - 8 = \underline{\hspace{2cm}}$$

$$12 - 8 = \underline{\hspace{2cm}}$$

$$12 - 7 = \underline{\hspace{2cm}}$$

$$11 - 3 = \underline{\hspace{2cm}}$$

さくらんぼ計算 引き算問題

名前: _____

$$13 - 8 = \underline{\hspace{2cm}}$$

$$16 - 8 = \underline{\hspace{2cm}}$$

$$17 - 9 = \underline{\hspace{2cm}}$$

$$18 - 9 = \underline{\hspace{2cm}}$$

さくらんぼ計算 引き算問題

名前: _____

$$14 - 8 = \underline{\hspace{2cm}}$$

$$17 - 9 = \underline{\hspace{2cm}}$$

$$12 - 6 = \underline{\hspace{2cm}}$$

$$15 - 6 = \underline{\hspace{2cm}}$$

さくらんぼ計算 引き算問題

名前: _____

$$18 - 9 = \underline{\hspace{2cm}}$$

$$11 - 3 = \underline{\hspace{2cm}}$$

$$12 - 5 = \underline{\hspace{2cm}}$$

$$12 - 3 = \underline{\hspace{2cm}}$$

さくらんぼ計算 引き算問題

名前: _____

$$12 - 5 = \underline{\hspace{2cm}}$$

$$17 - 9 = \underline{\hspace{2cm}}$$

$$14 - 6 = \underline{\hspace{2cm}}$$

$$14 - 7 = \underline{\hspace{2cm}}$$

さくらんぼ計算 引き算問題

名前: _____

$$15 - 7 = \underline{\hspace{2cm}}$$

$$14 - 8 = \underline{\hspace{2cm}}$$

$$11 - 9 = \underline{\hspace{2cm}}$$

$$14 - 7 = \underline{\hspace{2cm}}$$

さくらんぼ計算 引き算問題

名前: _____

$$17 - 8 = \underline{\hspace{2cm}}$$

$$13 - 6 = \underline{\hspace{2cm}}$$

$$13 - 9 = \underline{\hspace{2cm}}$$

$$16 - 9 = \underline{\hspace{2cm}}$$

さくらんぼ計算 引き算問題

名前: _____

$$17 - 9 = \underline{\hspace{2cm}}$$

$$14 - 8 = \underline{\hspace{2cm}}$$

$$11 - 3 = \underline{\hspace{2cm}}$$

$$12 - 4 = \underline{\hspace{2cm}}$$

さくらんぼ計算 引き算問題

名前: _____

$$15 - 7 = \underline{\hspace{2cm}}$$

$$13 - 5 = \underline{\hspace{2cm}}$$

$$13 - 6 = \underline{\hspace{2cm}}$$

$$11 - 7 = \underline{\hspace{2cm}}$$

さくらんぼ計算 引き算問題

名前: _____

$$12 - 7 = \underline{\hspace{2cm}}$$

$$16 - 9 = \underline{\hspace{2cm}}$$

$$16 - 8 = \underline{\hspace{2cm}}$$

$$14 - 6 = \underline{\hspace{2cm}}$$

さくらんぼ計算 引き算問題

名前: _____

$$15 - 7 = \underline{\hspace{2cm}}$$

$$14 - 9 = \underline{\hspace{2cm}}$$

$$12 - 3 = \underline{\hspace{2cm}}$$

$$15 - 9 = \underline{\hspace{2cm}}$$

さくらんぼ計算 引き算問題

名前: _____

$$18 - 9 = \underline{\hspace{2cm}}$$

$$18 - 9 = \underline{\hspace{2cm}}$$

$$17 - 8 = \underline{\hspace{2cm}}$$

$$16 - 8 = \underline{\hspace{2cm}}$$

さくらんぼ計算 引き算問題

名前: _____

$$15 - 6 = \underline{\hspace{2cm}}$$

$$15 - 7 = \underline{\hspace{2cm}}$$

$$13 - 4 = \underline{\hspace{2cm}}$$

$$17 - 9 = \underline{\hspace{2cm}}$$

さくらんぼ計算 引き算問題

名前: _____

$$12 - 8 = \underline{\hspace{2cm}}$$

$$11 - 2 = \underline{\hspace{2cm}}$$

$$14 - 6 = \underline{\hspace{2cm}}$$

$$15 - 8 = \underline{\hspace{2cm}}$$

さくらんぼ計算 引き算問題

名前: _____

$$11 - 4 = \underline{\hspace{2cm}}$$

$$15 - 6 = \underline{\hspace{2cm}}$$

$$16 - 8 = \underline{\hspace{2cm}}$$

$$14 - 8 = \underline{\hspace{2cm}}$$

さくらんぼ計算 引き算問題

名前: _____

$$17 - 9 = \underline{\hspace{2cm}}$$

$$16 - 7 = \underline{\hspace{2cm}}$$

$$13 - 9 = \underline{\hspace{2cm}}$$

$$11 - 5 = \underline{\hspace{2cm}}$$

さくらんぼ計算 引き算問題

名前: _____

$$11 - 4 = \underline{\hspace{2cm}}$$

$$12 - 9 = \underline{\hspace{2cm}}$$

$$14 - 7 = \underline{\hspace{2cm}}$$

$$14 - 7 = \underline{\hspace{2cm}}$$

さくらんぼ計算 引き算問題

名前: _____

$$11 - 5 = \underline{\hspace{2cm}}$$

$$15 - 9 = \underline{\hspace{2cm}}$$

$$15 - 8 = \underline{\hspace{2cm}}$$

$$16 - 7 = \underline{\hspace{2cm}}$$